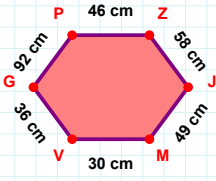
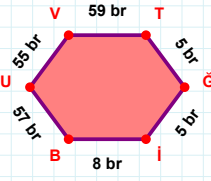


SORU: Aşağıdaki geometrik şekillerle ilgili soruları cevaplayınız.



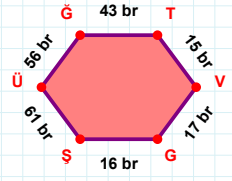
$$|PZ| + |ZJ| = \dots$$

Cevap: ..... cm



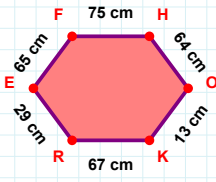
59 br hangi kenara aittir?

Kenar: .....



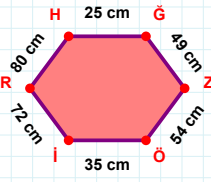
56 br hangi kenara aittir?

Kenar: .....



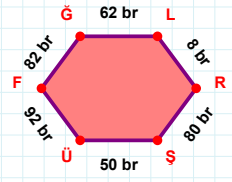
65 cm hangi kenara aittir?

- ☐ RF kenarı  
☐ KR kenarı  
☐ RE kenarı



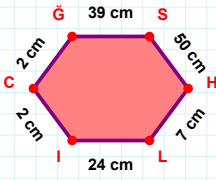
49 cm hangi kenara aittir?

Kenar: .....



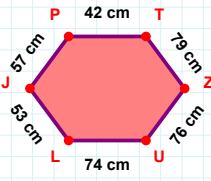
50 br hangi kenara aittir?

Kenar: .....



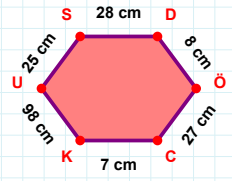
$$|GS| + |SH| = \dots$$

Cevap: ..... cm



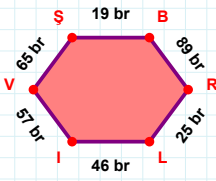
$$|TZ| + |JP| = \dots$$

Cevap: ..... cm



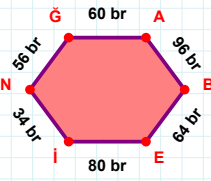
25 cm hangi kenara aittir?

- ☐ CK kenarı  
☐ ÖS kenarı  
☐ ÖC kenarı



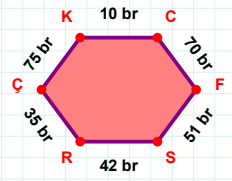
65 br hangi kenara aittir?

- ☐ RI kenarı  
☐ BR kenarı  
☐ LI kenarı



|NG| kaç brdir?

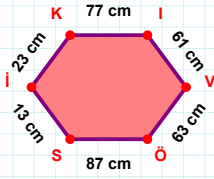
- ☐ 55 br  
☐ 56 br  
☐ 57 br



|SR| kaç brdir?

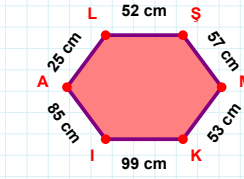
- ☐ 41 br  
☐ 42 br  
☐ 43 br

**SORU:** Aşağıdaki geometrik şekillerle ilgili soruları cevaplayınız.



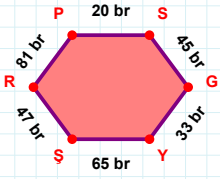
|ÖS| kaç cm'dir?

- ☐ 86 cm  
☐ 87 cm  
☐ 88 cm



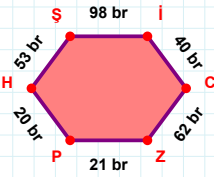
25 cm hangi kenara aittir?

Kenar: .....



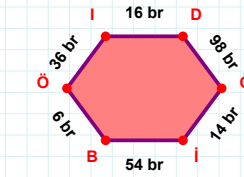
|RP| + |SG| = ....

Cevap: ..... br



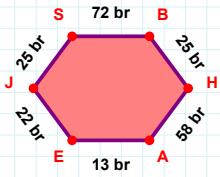
|HŞ| kaç br'dir?

- ☐ 52 br  
☐ 53 br  
☐ 54 br



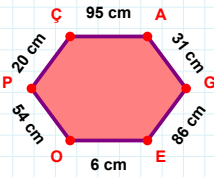
|Dİ| kaç br'dir?

- ☐ 97 br  
☐ 98 br  
☐ 99 br



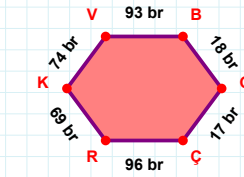
|SB| kaç br'dir?

- ☐ 71 br  
☐ 72 br  
☐ 73 br



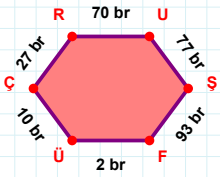
|GE| kaç cm'dir?

- ☐ 85 cm  
☐ 86 cm  
☐ 87 cm



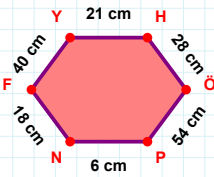
|BG| kaç br'dir?

- ☐ 17 br  
☐ 18 br  
☐ 19 br



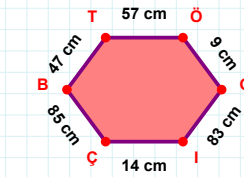
|ÜÇ| + |FÜ| = ....

Cevap: ..... br



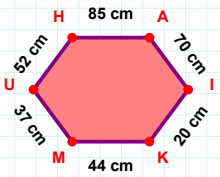
|YH| + |FY| = ....

Cevap: ..... cm



47 cm hangi kenara aittir?

- ☐ ÖG kenarı  
☐ İÇ kenarı  
☐ ÇÖ kenarı



85 cm hangi kenara aittir?

Kenar: .....

### SÜREÇ ODAKLI DEĞERLENDİRME ÖLÇEĞİ

Doğru Sayısı: ..... / 24

Öğretmen ilgili kutucuğu işaretler.

Geliştirilmeli (0-8)

İyi (9-14)

Çok İyi (15-20)

Mükemmel (21-24)

☐
☐
☐
☐

Hazırlayan: .....

Bu bölüme sınıfınızın ilgili kazanıma yönelik genel durumuna ilişkin gözlem ve izlenimlerinizi, öğrencilerinizin bu kazanımla ilgili öğrenme eksikliklerini ve bu eksikliklerin giderilmesi amacıyla yaptığınız/yapmayı planladığınız faaliyetleri not edebilirsiniz.

No	Adı - Soyadı	Toplam Puan	Değerlendirme
1			
2			
3			
4			
5			
6			
7			
8			
9			
10			
11			
12			
13			
14			
15			
16			
17			
18			
19			
20			
21			
22			
23			
24			
25			
26			
27			
28			
29			
30			
31			
32			
33			
34			
35			

Hazırlayan: .....