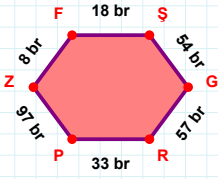
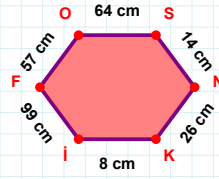


SORU: Aşağıdaki geometrik şekillerle ilgili soruları cevaplayınız.



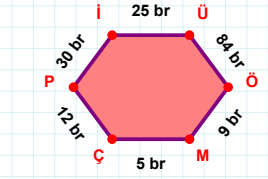
$$|SG| + |ZF| = \dots$$

Cevap: br



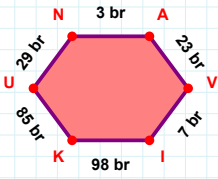
$$|SN| + |NK| = \dots$$

Cevap: cm



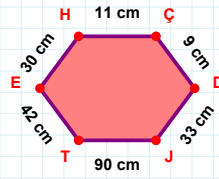
30 br hangi kenara aittir?

- ☐ İÜ kenarı
☐ Pİ kenarı
☐ Çİ kenarı



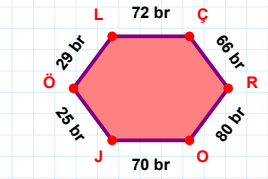
$$|NA| + |Vİ| = \dots$$

Cevap: br



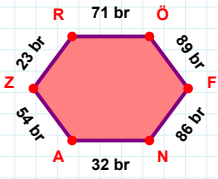
|TE| kaç cmdir?

- ☐ 41 cm
☐ 42 cm
☐ 43 cm



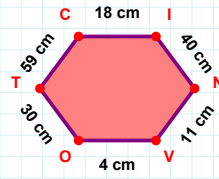
|ÇR| kaç brdir?

- ☐ 65 br
☐ 66 br
☐ 67 br



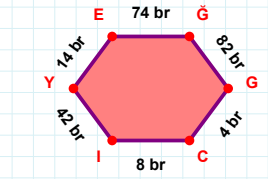
54 br hangi kenara aittir?

Kenar:



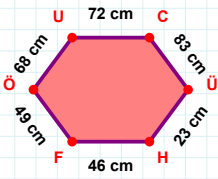
59 cm hangi kenara aittir?

- ☐ TV kenarı
☐ CI kenarı
☐ TC kenarı



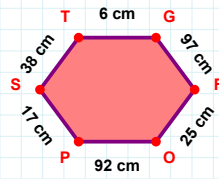
$$|Cİ| + |GC| = \dots$$

Cevap: br



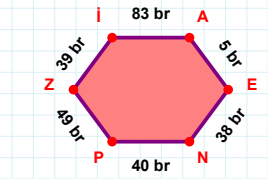
|FÖ| kaç cmdir?

- ☐ 48 cm
☐ 49 cm
☐ 50 cm



|PS| kaç cmdir?

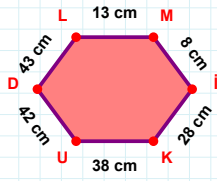
- ☐ 16 cm
☐ 17 cm
☐ 18 cm



$$|AE| + |EN| = \dots$$

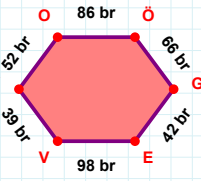
Cevap: br

SORU: Aşağıdaki geometrik şekillerle ilgili soruları cevaplayınız.



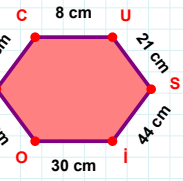
|UD| kaç cmdir?

- ☐ 41 cm
☐ 42 cm
☐ 43 cm



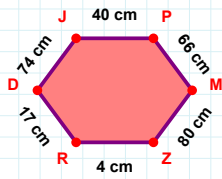
|YO| + |ÖG| =

Cevap: br



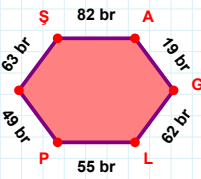
|iO| kaç cmdir?

- ☐ 29 cm
☐ 30 cm
☐ 31 cm



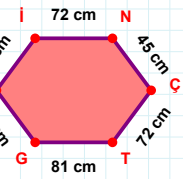
74 cm hangi kenara aittir?

Kenar:



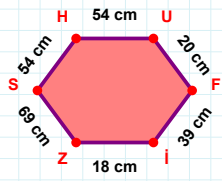
|PI| kaç brdir?

- ☐ 48 br
☐ 49 br
☐ 50 br



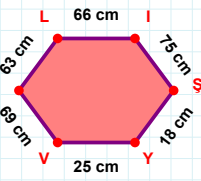
|NÇ| kaç cmdir?

- ☐ 44 cm
☐ 45 cm
☐ 46 cm



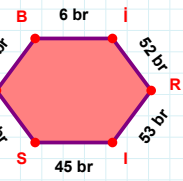
20 cm hangi kenara aittir?

Kenar:



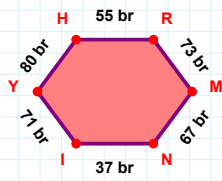
18 cm hangi kenara aittir?

Kenar:



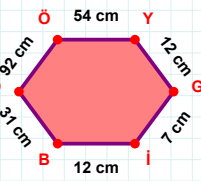
|Şİ| + |İR| =

Cevap: br



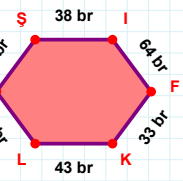
|IY| kaç brdir?

- ☐ 70 br
☐ 71 br
☐ 72 br



92 cm hangi kenara aittir?

- ☐ İB kenarı
☐ OG kenarı
☐ OÖ kenarı



|FK| kaç brdir?

- ☐ 32 br
☐ 33 br
☐ 34 br

SÜREÇ ODAKLI DEĞERLENDİRME ÖLÇEĞİ

Doğru Sayısı: / 24

Öğretmen ilgili kutucuğu işaretler.

Geliştirilmeli (0-8)

İyi (9-14)

Çok İyi (15-20)

Mükemmel (21-24)

☐☐☐☐

Hazırlayan:

Bu bölüme sınıfınızın ilgili kazanıma yönelik genel durumuna ilişkin gözlem ve izlenimlerinizi, öğrencilerinizin bu kazanımla ilgili öğrenme eksikliklerini ve bu eksikliklerin giderilmesi amacıyla yaptığınız/yapmayı planladığınız faaliyetleri not edebilirsiniz.

No	Adı - Soyadı	Toplam Puan	Değerlendirme
1			
2			
3			
4			
5			
6			
7			
8			
9			
10			
11			
12			
13			
14			
15			
16			
17			
18			
19			
20			
21			
22			
23			
24			
25			
26			
27			
28			
29			
30			
31			
32			
33			
34			
35			

Hazırlayan: