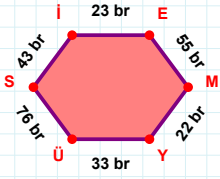
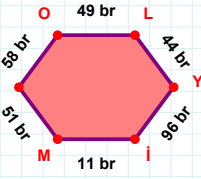
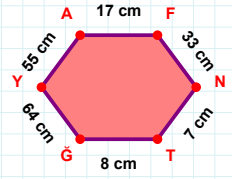


SORU: Aşağıdaki geometrik şekillerle ilgili soruları cevaplayınız.**|İE| kaç brdir?**

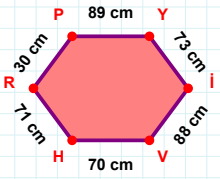
- ☐ 22 br
☐ 23 br
☐ 24 br

**58 br hangi kenara aittir?**

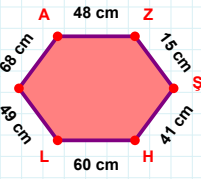
Kenar:

**|AF| + |YA| =**

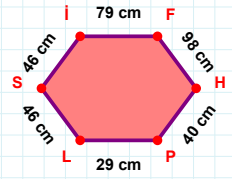
Cevap: cm

**30 cm hangi kenara aittir?**

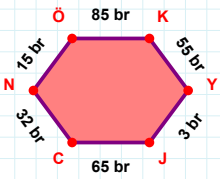
Kenar:

**|ZS| kaç cmdir?**

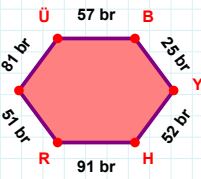
- ☐ 14 cm
☐ 15 cm
☐ 16 cm

**79 cm hangi kenara aittir?**

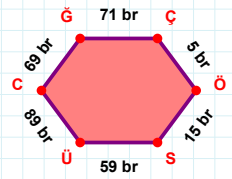
Kenar:

**3 br hangi kenara aittir?**

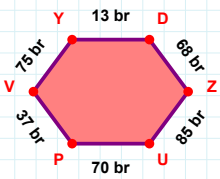
Kenar:

**81 br hangi kenara aittir?**

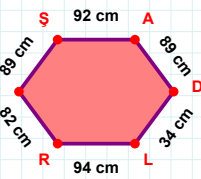
Kenar:

**69 br hangi kenara aittir?**

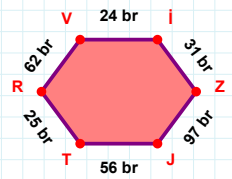
- ☐ GÇ kenarı
☐ ÜC kenarı
☐ ÜG kenarı

**|PV| kaç brdir?**

- ☐ 36 br
☐ 37 br
☐ 38 br

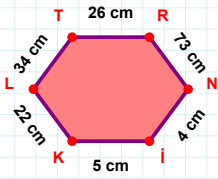
**|AD| + |BS| =**

Cevap: cm

**|RV| kaç brdir?**

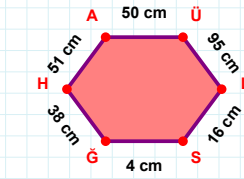
- ☐ 61 br
☐ 62 br
☐ 63 br

SORU: Aşağıdaki geometrik şekillerle ilgili soruları cevaplayınız.



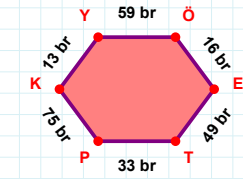
|TR| + |LT| =

Cevap: cm



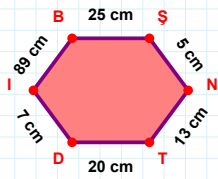
|AÜ| kaç cm'dir?

- ☐ 49 cm
☐ 50 cm
☐ 51 cm



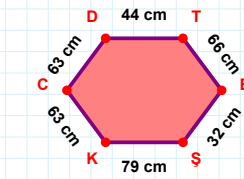
75 br hangi kenara aittir?

Kenar:



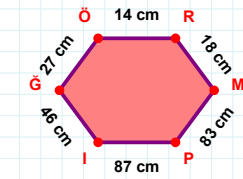
89 cm hangi kenara aittir?

- ☐ ŞT kenarı
☐ İB kenarı
☐ TD kenarı



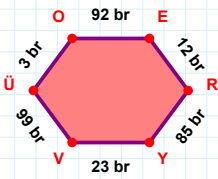
|ŞK| kaç cm'dir?

- ☐ 78 cm
☐ 79 cm
☐ 80 cm



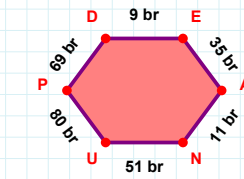
|RM| + |İĞ| =

Cevap: cm



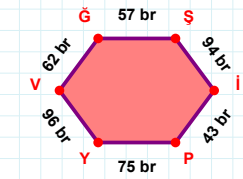
|VÜ| + |ER| =

Cevap: br



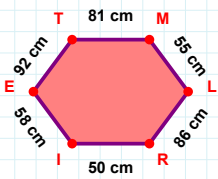
69 br hangi kenara aittir?

- ☐ PA kenarı
☐ DE kenarı
☐ UP kenarı



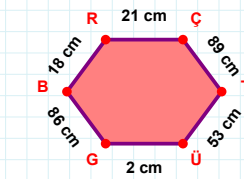
62 br hangi kenara aittir?

- ☐ Şİ kenarı
☐ ŞP kenarı
☐ VĞ kenarı



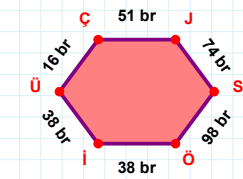
92 cm hangi kenara aittir?

- ☐ TM kenarı
☐ RE kenarı
☐ İE kenarı



18 cm hangi kenara aittir?

- ☐ BR kenarı
☐ GB kenarı
☐ BÇ kenarı



|SÖ| kaç br'dir?

- ☐ 97 br
☐ 98 br
☐ 99 br

SÜREÇ ODAKLI DEĞERLENDİRME ÖLÇEĞİ

Doğru Sayısı: / 24

Öğretmen ilgili kutucuğu işaretler.

Geliştirilmeli (0-8)

İyi (9-14)

Çok İyi (15-20)

Mükemmel (21-24)

☐☐☐☐

Hazırlayan:

Bu bölüme sınıfınızın ilgili kazanıma yönelik genel durumuna ilişkin gözlem ve izlenimlerinizi, öğrencilerinizin bu kazanımla ilgili öğrenme eksikliklerini ve bu eksikliklerin giderilmesi amacıyla yaptığınız/yapmayı planladığınız faaliyetleri not edebilirsiniz.

No	Adı - Soyadı	Toplam Puan	Değerlendirme
1			
2			
3			
4			
5			
6			
7			
8			
9			
10			
11			
12			
13			
14			
15			
16			
17			
18			
19			
20			
21			
22			
23			
24			
25			
26			
27			
28			
29			
30			
31			
32			
33			
34			
35			

Hazırlayan: