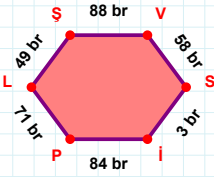
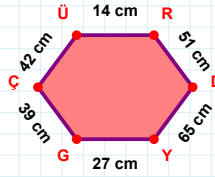


SORU: Aşağıdaki geometrik şekillerle ilgili soruları cevaplayınız.



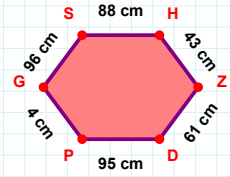
88 br hangi kenara aittir?

Kenar:

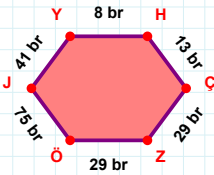


42 cm hangi kenara aittir?

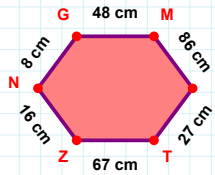
- ☐ ÜR kenarı
☐ ÇÜ kenarı
☐ ÇY kenarı

 $|SH| + |PG| = \dots$

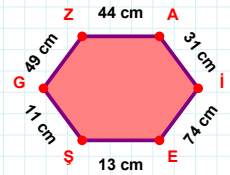
Cevap: cm

 $|ÖJ| + |HÇ| = \dots$

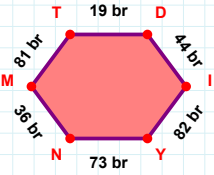
Cevap: br

 $|GM|$ kaç cm'dir?

- ☐ 47 cm
☐ 48 cm
☐ 49 cm

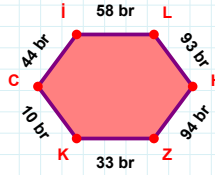
 $|ES| + |ZA| = \dots$

Cevap: cm

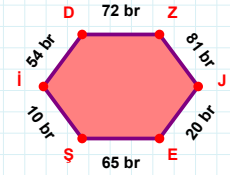


73 br hangi kenara aittir?

Kenar:

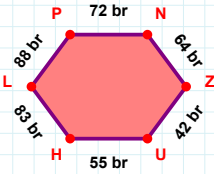
 $|LH|$ kaç br'dir?

- ☐ 92 br
☐ 93 br
☐ 94 br

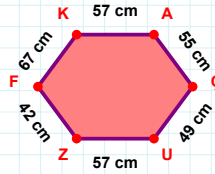


54 br hangi kenara aittir?

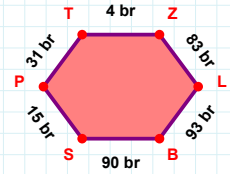
- ☐ Şİ kenarı
☐ DZ kenarı
☐ İE kenarı

 $|HL| + |LP| = \dots$

Cevap: br

 $|ÇU|$ kaç cm'dir?

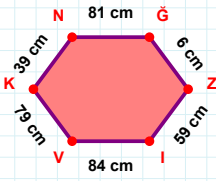
- ☐ 48 cm
☐ 49 cm
☐ 50 cm



4 br hangi kenara aittir?

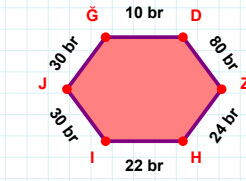
Kenar:

SORU: Aşağıdaki geometrik şekillerle ilgili soruları cevaplayınız.



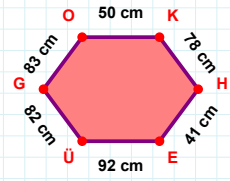
|NG| + |GZ| =

Cevap: cm



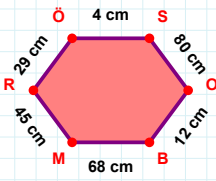
|GD| kaç brdir?

- ☐ 9 br
☐ 10 br
☐ 11 br



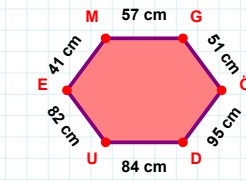
78 cm hangi kenara aittir?

Kenar:



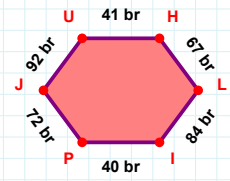
|MR| + |BM| =

Cevap: cm



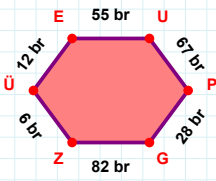
41 cm hangi kenara aittir?

Kenar:



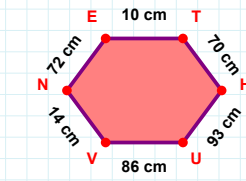
40 br hangi kenara aittir?

Kenar:



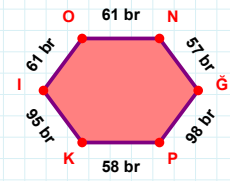
55 br hangi kenara aittir?

Kenar:



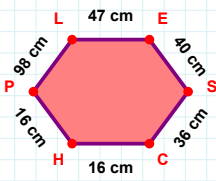
|UV| kaç cm'dir?

- ☐ 85 cm
☐ 86 cm
☐ 87 cm



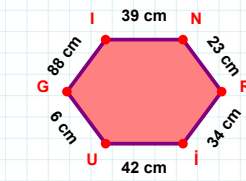
|ON| kaç brdir?

- ☐ 60 br
☐ 61 br
☐ 62 br



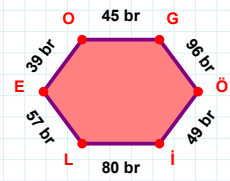
40 cm hangi kenara aittir?

Kenar:



88 cm hangi kenara aittir?

- ☐ GI kenarı
☐ İI kenarı
☐ UG kenarı



39 br hangi kenara aittir?

Kenar:

SÜREÇ ODAKLI DEĞERLENDİRME ÖLÇEĞİ

Doğru Sayısı: / 24

Öğretmen ilgili kutucuğu işaretler.

Geliştirilmeli (0-8)

İyi (9-14)

Çok İyi (15-20)

Mükemmel (21-24)

☐☐☐☐

Hazırlayan:

Bu bölüme sınıfınızın ilgili kazanıma yönelik genel durumuna ilişkin gözlem ve izlenimlerinizi, öğrencilerinizin bu kazanımla ilgili öğrenme eksikliklerini ve bu eksikliklerin giderilmesi amacıyla yaptığınız/yapmayı planladığınız faaliyetleri not edebilirsiniz.

No	Adı - Soyadı	Toplam Puan	Değerlendirme
1			
2			
3			
4			
5			
6			
7			
8			
9			
10			
11			
12			
13			
14			
15			
16			
17			
18			
19			
20			
21			
22			
23			
24			
25			
26			
27			
28			
29			
30			
31			
32			
33			
34			
35			

Hazırlayan: