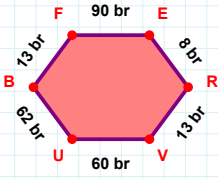
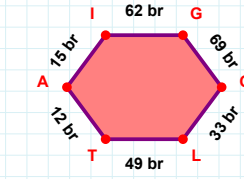


SORU: Aşağıdaki geometrik şekillerle ilgili soruları cevaplayınız.



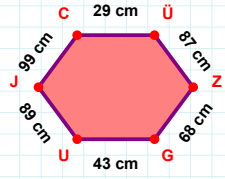
$$|RV| + |BF| = \dots$$

Cevap: br



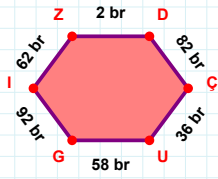
12 br hangi kenara aittir?

Kenar:



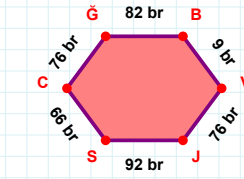
68 cm hangi kenara aittir?

Kenar:



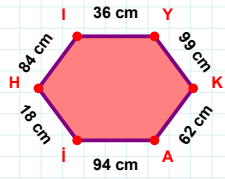
62 br hangi kenara aittir?

- ☐ DU kenarı
☐ IZ kenarı
☐ ZD kenarı



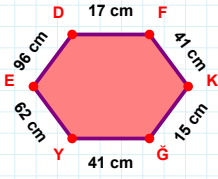
$$|JS| + |VJ| = \dots$$

Cevap: br



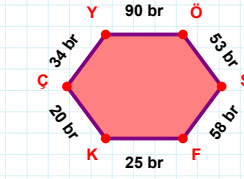
84 cm hangi kenara aittir?

Kenar:



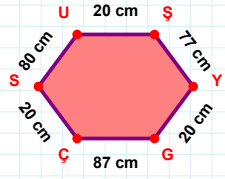
41 cm hangi kenara aittir?

Kenar:



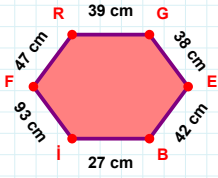
34 br hangi kenara aittir?

- ☐ KÇ kenarı
☐ FK kenarı
☐ ÇF kenarı



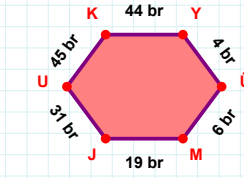
20 cm hangi kenara aittir?

Kenar:



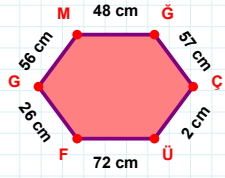
47 cm hangi kenara aittir?

- ☐ Rİ kenarı
☐ EB kenarı
☐ GE kenarı



45 br hangi kenara aittir?

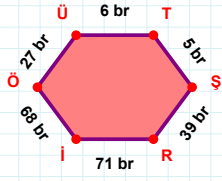
- ☐ MJ kenarı
☐ UÜ kenarı
☐ KY kenarı



56 cm hangi kenara aittir?

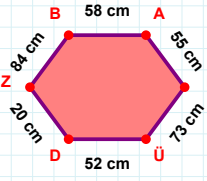
- ☐ ÇÜ kenarı
☐ ÜF kenarı
☐ FM kenarı

SORU: Aşağıdaki geometrik şekillerle ilgili soruları cevaplayınız.

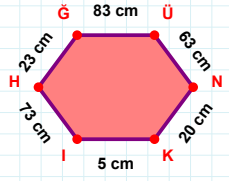


27 br hangi kenara aittir?

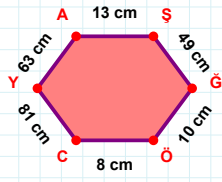
- ☐ ÖŞ kenarı
☐ Rİ kenarı
☐ ÜT kenarı

 $|BA| + |İÜ| = \dots$

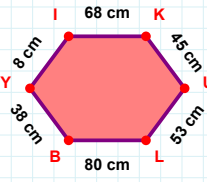
Cevap: cm

 $|IH|$ kaç cm'dir?

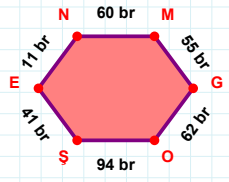
- ☐ 72 cm
☐ 73 cm
☐ 74 cm

 $|ÖC|$ kaç cm'dir?

- ☐ 7 cm
☐ 8 cm
☐ 9 cm

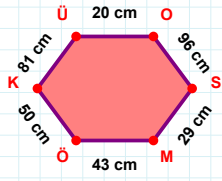
 $|LB| + |BY| = \dots$

Cevap: cm



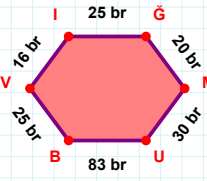
11 br hangi kenara aittir?

- ☐ OŞ kenarı
☐ ŞM kenarı
☐ ŞE kenarı

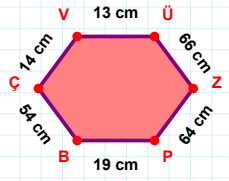


81 cm hangi kenara aittir?

- ☐ ÜO kenarı
☐ ÜM kenarı
☐ MÖ kenarı

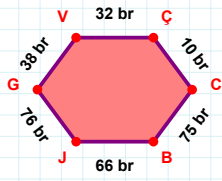
 $|UB| + |İG| = \dots$

Cevap: br

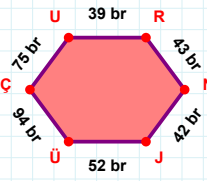


64 cm hangi kenara aittir?

Kenar:

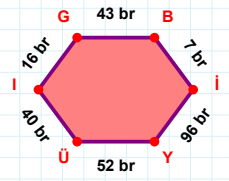
 $|CB| + |VÇ| = \dots$

Cevap: br



75 br hangi kenara aittir?

- ☐ ÇU kenarı
☐ ÜÇ kenarı
☐ UJ kenarı

 $|IG| + |İY| = \dots$

Cevap: br

SÜREÇ ODAKLI DEĞERLENDİRME ÖLÇEĞİ

Doğru Sayısı: / 24

Öğretmen ilgili kutucuğu işaretler.

Geliştirilmeli (0-8)

İyi (9-14)

Çok İyi (15-20)

Mükemmel (21-24)

☐☐☐☐

Hazırlayan:

Bu bölüme sınıfınızın ilgili kazanıma yönelik genel durumuna ilişkin gözlem ve izlenimlerinizi, öğrencilerinizin bu kazanımla ilgili öğrenme eksikliklerini ve bu eksikliklerin giderilmesi amacıyla yaptığınız/yapmayı planladığınız faaliyetleri not edebilirsiniz.

No	Adı - Soyadı	Toplam Puan	Değerlendirme
1			
2			
3			
4			
5			
6			
7			
8			
9			
10			
11			
12			
13			
14			
15			
16			
17			
18			
19			
20			
21			
22			
23			
24			
25			
26			
27			
28			
29			
30			
31			
32			
33			
34			
35			

Hazırlayan: