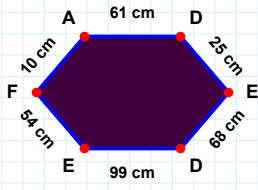
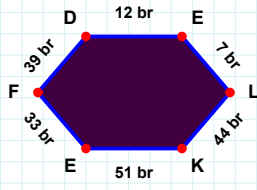


SORU: Aşağıdaki şekillerde istenen kenarın kaç birim veya santimetre olduğunu bulunuz.



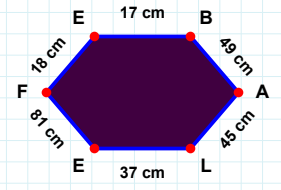
|DE| kaç brdir?

- ☐ 2 br
☐ 11 br
☐ 12 br



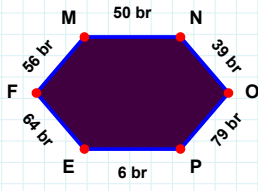
|FA| kaç cmdir?

- ☐ 15 cm
☐ 10 cm
☐ 8 cm



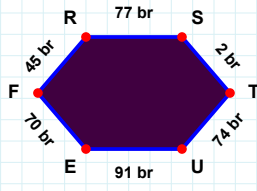
|LE| kaç cmdir?

- ☐ 34 cm
☐ 37 cm
☐ 47 cm



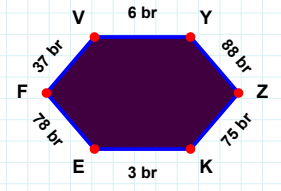
|ST| kaç brdir?

- ☐ 2 br
☐ 5 br
☐ 4 br



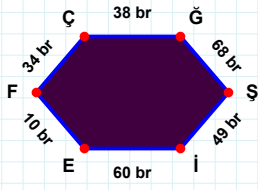
|PE| kaç brdir?

- ☐ 16 br
☐ 6 br
☐ 3 br



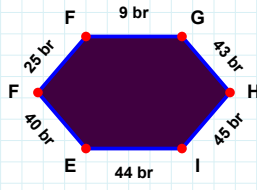
|FV| kaç brdir?

- ☐ 37 br
☐ 27 br
☐ 34 br



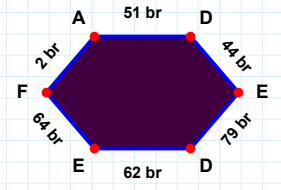
|EF| kaç brdir?

- ☐ 50 br
☐ 37 br
☐ 40 br



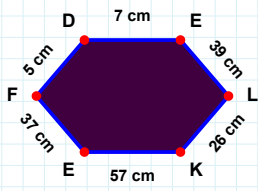
|ÇĞ| kaç brdir?

- ☐ 40 br
☐ 36 br
☐ 38 br



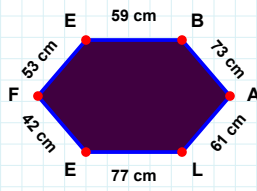
|DE| kaç brdir?

- ☐ 72 br
☐ 57 br
☐ 62 br



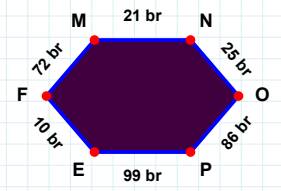
|AL| kaç cmdir?

- ☐ 61 cm
☐ 63 cm
☐ 71 cm



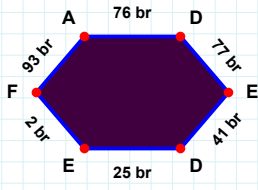
|PE| kaç brdir?

- ☐ 94 br
☐ 96 br
☐ 99 br



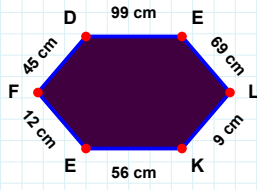
|EL| kaç cmdir?

- ☐ 38 cm
☐ 39 cm
☐ 37 cm

SORU: Aşağıdaki şekillerde istenen kenarın kaç birim veya santimetre olduğunu bulunuz.

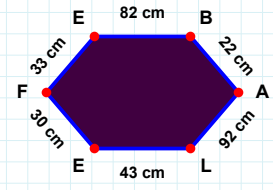
|ED| kaç brdir?

- ☐ 39 br
☐ 42 br
☐ 41 br



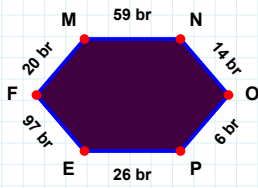
|EF| kaç cmdir?

- ☐ 28 cm
☐ 32 cm
☐ 30 cm



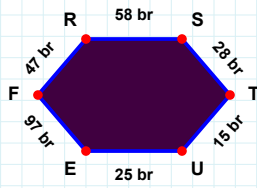
|DE| kaç cmdir?

- ☐ 96 cm
☐ 98 cm
☐ 99 cm



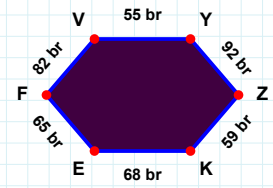
|OP| kaç brdir?

- ☐ 1 br
☐ 6 br
☐ 8 br



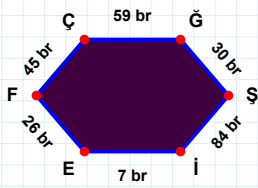
|RV| kaç brdir?

- ☐ 72 br
☐ 80 br
☐ 82 br



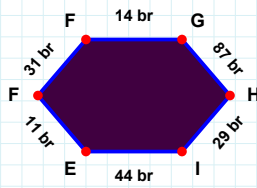
|RS| kaç brdir?

- ☐ 58 br
☐ 55 br
☐ 60 br



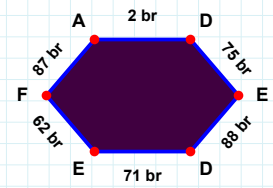
|FF| kaç brdir?

- ☐ 31 br
☐ 36 br
☐ 21 br



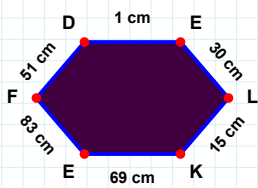
|Şİ| kaç brdir?

- ☐ 87 br
☐ 74 br
☐ 84 br



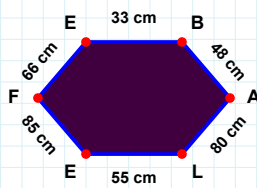
|ED| kaç brdir?

- ☐ 88 br
☐ 98 br
☐ 87 br



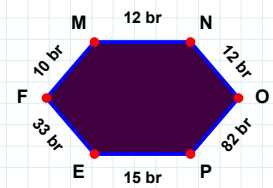
|LE| kaç cmdir?

- ☐ 56 cm
☐ 55 cm
☐ 54 cm



|PE| kaç brdir?

- ☐ 13 br
☐ 15 br
☐ 16 br



|LK| kaç cmdir?

- ☐ 15 cm
☐ 12 cm
☐ 17 cm

SÜREÇ ODAKLI DEĞERLENDİRME ÖLÇEĞİ

Doğru Sayısı: / 24

Öğretmen ilgili kutucuğu işaretler.

Geliştirilmeli (0-8)

İyi (9-14)

Çok İyi (15-20)

Mükemmel (21-24)

☐☐☐☐

Hazırlayan:

Bu bölüme sınıfınızın ilgili kazanıma yönelik genel durumuna ilişkin gözlem ve izlenimlerinizi, öğrencilerinizin bu kazanımla ilgili öğrenme eksikliklerini ve bu eksikliklerin giderilmesi amacıyla yaptığınız/yapmayı planladığınız faaliyetleri not edebilirsiniz.

No	Adı - Soyadı	Toplam Puan	Değerlendirme
1			
2			
3			
4			
5			
6			
7			
8			
9			
10			
11			
12			
13			
14			
15			
16			
17			
18			
19			
20			
21			
22			
23			
24			
25			
26			
27			
28			
29			
30			
31			
32			
33			
34			
35			

Hazırlayan: