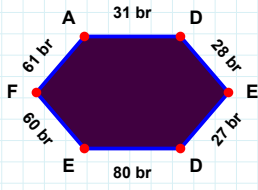
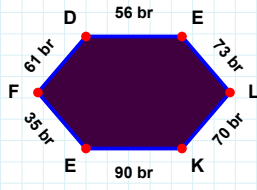


**SORU:** Aşağıdaki şekillerde istenen kenarın kaç birim veya santimetre olduğunu bulunuz.



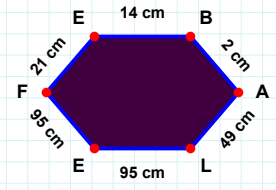
|FD| kaç brdir?

- ☐ 61 br  
☐ 59 br  
☐ 71 br



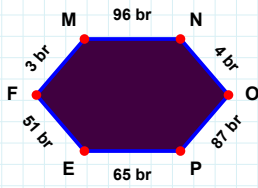
|ED| kaç brdir?

- ☐ 17 br  
☐ 27 br  
☐ 25 br



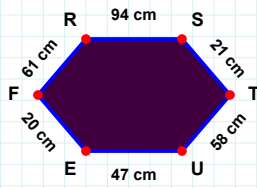
|FE| kaç cmdir?

- ☐ 21 cm  
☐ 26 cm  
☐ 19 cm



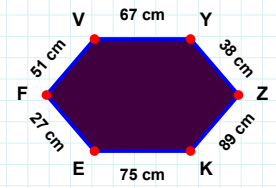
|PE| kaç brdir?

- ☐ 63 br  
☐ 65 br  
☐ 68 br



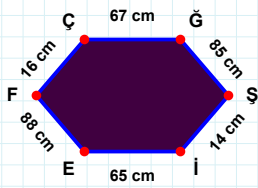
|UE| kaç cmdir?

- ☐ 47 cm  
☐ 37 cm  
☐ 49 cm



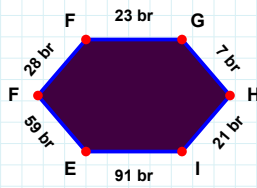
|VY| kaç cmdir?

- ☐ 57 cm  
☐ 67 cm  
☐ 77 cm



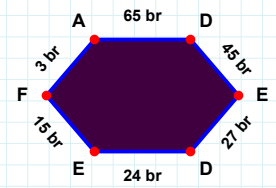
|FG| kaç brdir?

- ☐ 23 br  
☐ 22 br  
☐ 25 br



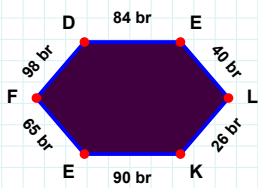
|DE| kaç brdir?

- ☐ 27 br  
☐ 24 br  
☐ 14 br



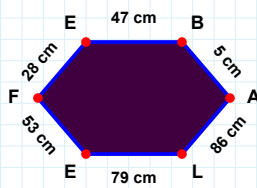
|iE| kaç cmdir?

- ☐ 65 cm  
☐ 63 cm  
☐ 64 cm



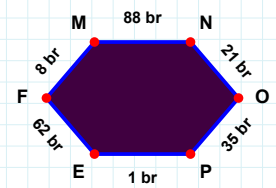
|MN| kaç brdir?

- ☐ 78 br  
☐ 88 br  
☐ 90 br



|EB| kaç cmdir?

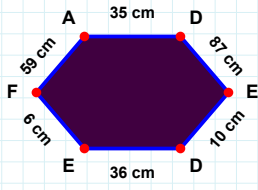
- ☐ 52 cm  
☐ 48 cm  
☐ 47 cm



|KE| kaç brdir?

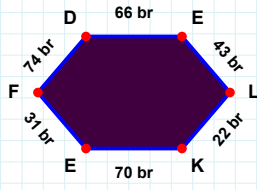
- ☐ 85 br  
☐ 80 br  
☐ 90 br

**SORU:** Aşağıdaki şekillerde istenen kenarın kaç birim veya santimetre olduğunu bulunuz.



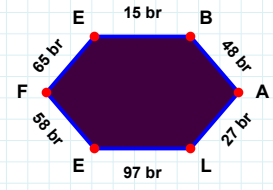
|ED| kaç cm'dir?

- ☐ 5 cm  
☐ 10 cm  
☐ 15 cm



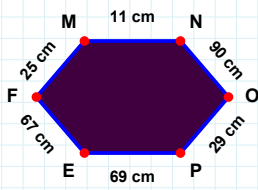
|EF| kaç br'dir?

- ☐ 31 br  
☐ 28 br  
☐ 26 br



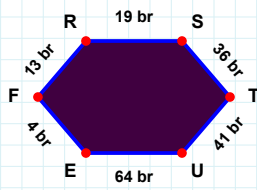
|EF| kaç br'dir?

- ☐ 60 br  
☐ 58 br  
☐ 48 br



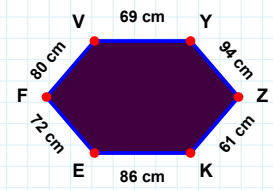
|KE| kaç cm'dir?

- ☐ 81 cm  
☐ 83 cm  
☐ 86 cm



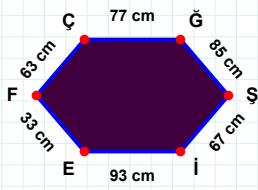
|UE| kaç br'dir?

- ☐ 64 br  
☐ 63 br  
☐ 67 br



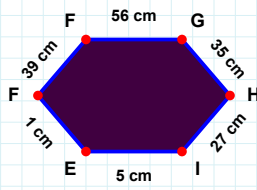
|MN| kaç cm'dir?

- ☐ 11 cm  
☐ 13 cm  
☐ 10 cm



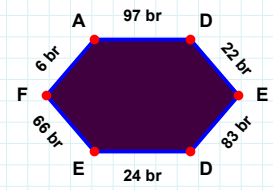
|FA| kaç br'dir?

- ☐ 4 br  
☐ 16 br  
☐ 6 br



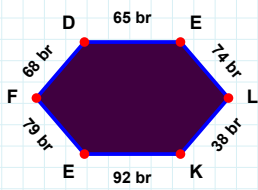
|FF| kaç cm'dir?

- ☐ 34 cm  
☐ 39 cm  
☐ 29 cm



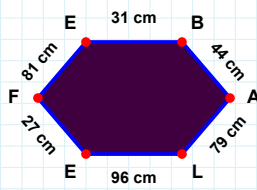
|IE| kaç cm'dir?

- ☐ 94 cm  
☐ 93 cm  
☐ 98 cm



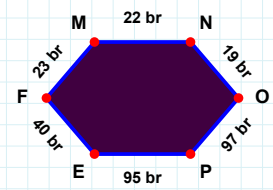
|LK| kaç br'dir?

- ☐ 37 br  
☐ 38 br  
☐ 33 br



|LE| kaç cm'dir?

- ☐ 97 cm  
☐ 98 cm  
☐ 96 cm



|NO| kaç br'dir?

- ☐ 19 br  
☐ 17 br  
☐ 22 br

### SÜREÇ ODAKLI DEĞERLENDİRME ÖLÇEĞİ

Doğru Sayısı: ..... / 24

Öğretmen ilgili kutucuğu işaretler.

Geliştirilmeli (0-8)

İyi (9-14)

Çok İyi (15-20)

Mükemmel (21-24)

☐
☐
☐
☐

Hazırlayan: .....

Bu bölüme sınıfınızın ilgili kazanıma yönelik genel durumuna ilişkin gözlem ve izlenimlerinizi, öğrencilerinizin bu kazanımla ilgili öğrenme eksikliklerini ve bu eksikliklerin giderilmesi amacıyla yaptığınız/yapmayı planladığınız faaliyetleri not edebilirsiniz.

No	Adı - Soyadı	Toplam Puan	Değerlendirme
1			
2			
3			
4			
5			
6			
7			
8			
9			
10			
11			
12			
13			
14			
15			
16			
17			
18			
19			
20			
21			
22			
23			
24			
25			
26			
27			
28			
29			
30			
31			
32			
33			
34			
35			

Hazırlayan: .....