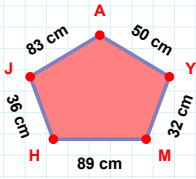
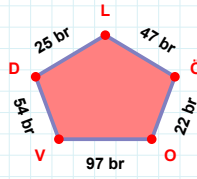


**SORU:** Aşağıdaki geometrik şekillerle ilgili soruları cevaplayınız.

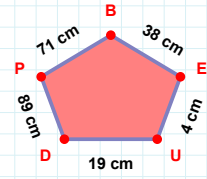
50 cm hangi kenara aittir?

- ☐ MY kenarı  
☐ YA kenarı  
☐ HA kenarı



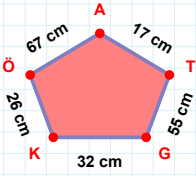
47 br hangi kenara aittir?

- ☐ VO kenarı  
☐ LO kenarı  
☐ LD kenarı



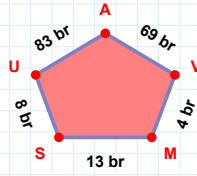
38 cm hangi kenara aittir?

- ☐ UE kenarı  
☐ PD kenarı  
☐ BU kenarı

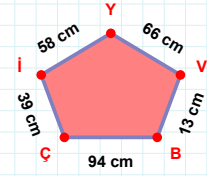


55 cm hangi kenara aittir?

Kenar: .....

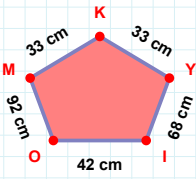
 $|MV| + |SM| = \dots$ 

Cevap: ..... br



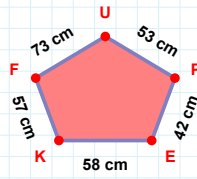
66 cm hangi kenara aittir?

- ☐ İÇ kenarı  
☐ Yİ kenarı  
☐ YÇ kenarı

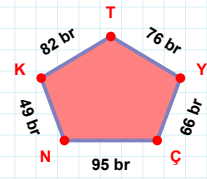


42 cm hangi kenara aittir?

Kenar: .....

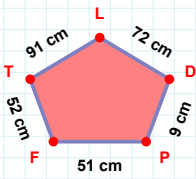
 $|FK| + |EP| = \dots$ 

Cevap: ..... cm



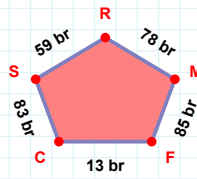
49 br hangi kenara aittir?

Kenar: .....



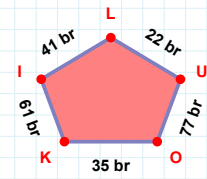
52 cm hangi kenara aittir?

Kenar: .....



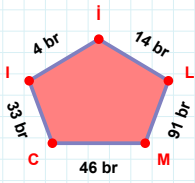
78 br hangi kenara aittir?

- ☐ FM kenarı  
☐ FR kenarı  
☐ RS kenarı

 $|KO|$  kaç brdir?

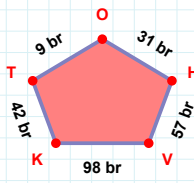
- ☐ 34 br  
☐ 35 br  
☐ 36 br

SORU: Aşağıdaki geometrik şekillerle ilgili soruları cevaplayınız.



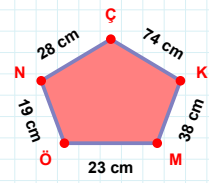
46 br hangi kenara aittir?

Kenar: .....



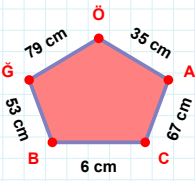
|HO| kaç brdir?

- ☐ 30 br  
☐ 31 br  
☐ 32 br



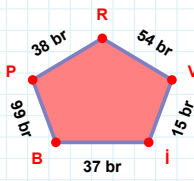
74 cm hangi kenara aittir?

- ☐ ÖM kenarı  
☐ ÇM kenarı  
☐ ÇN kenarı



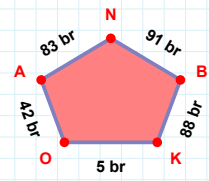
|ÖĞ| kaç cmdir?

- ☐ 78 cm  
☐ 79 cm  
☐ 80 cm



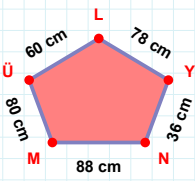
54 br hangi kenara aittir?

- ☐ PB kenarı  
☐ PV kenarı  
☐ VR kenarı



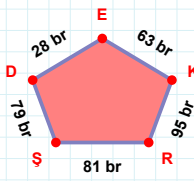
|AO| kaç brdir?

- ☐ 41 br  
☐ 42 br  
☐ 43 br



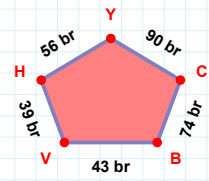
78 cm hangi kenara aittir?

- ☐ NY kenarı  
☐ ÜM kenarı  
☐ ML kenarı



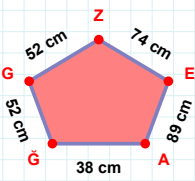
28 br hangi kenara aittir?

Kenar: .....



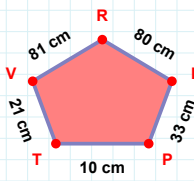
|CY| + |YH| = ....

Cevap: ..... br



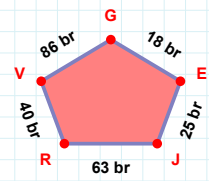
|ĞA| kaç cmdir?

- ☐ 37 cm  
☐ 38 cm  
☐ 39 cm



80 cm hangi kenara aittir?

- ☐ RT kenarı  
☐ RV kenarı  
☐ IR kenarı



|JE| kaç brdir?

- ☐ 24 br  
☐ 25 br  
☐ 26 br

## SÜREÇ ODAKLI DEĞERLENDİRME ÖLÇEĞİ

Doğru Sayısı: ..... / 24

Öğretmen ilgili kutucuğu işaretler.

Geliştirilmeli (0-8)

İyi (9-14)

Çok İyi (15-20)

Mükemmel (21-24)

☐☐☐☐

Hazırlayan: .....

**Bu bölüme sınıfınızın ilgili kazanıma yönelik genel durumuna ilişkin gözlem ve izlenimlerinizi, öğrencilerinizin bu kazanımla ilgili öğrenme eksikliklerini ve bu eksikliklerin giderilmesi amacıyla yaptığınız/yapmayı planladığınız faaliyetleri not edebilirsiniz.**

| No | Adı - Soyadı | Toplam Puan | Değerlendirme |
|----|--------------|-------------|---------------|
| 1  |              |             |               |
| 2  |              |             |               |
| 3  |              |             |               |
| 4  |              |             |               |
| 5  |              |             |               |
| 6  |              |             |               |
| 7  |              |             |               |
| 8  |              |             |               |
| 9  |              |             |               |
| 10 |              |             |               |
| 11 |              |             |               |
| 12 |              |             |               |
| 13 |              |             |               |
| 14 |              |             |               |
| 15 |              |             |               |
| 16 |              |             |               |
| 17 |              |             |               |
| 18 |              |             |               |
| 19 |              |             |               |
| 20 |              |             |               |
| 21 |              |             |               |
| 22 |              |             |               |
| 23 |              |             |               |
| 24 |              |             |               |
| 25 |              |             |               |
| 26 |              |             |               |
| 27 |              |             |               |
| 28 |              |             |               |
| 29 |              |             |               |
| 30 |              |             |               |
| 31 |              |             |               |
| 32 |              |             |               |
| 33 |              |             |               |
| 34 |              |             |               |
| 35 |              |             |               |

Hazırlayan: .....