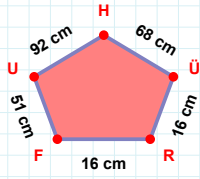
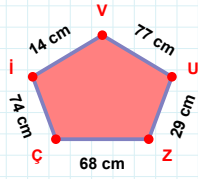


SORU: Aşağıdaki geometrik şekillerle ilgili soruları cevaplayınız.

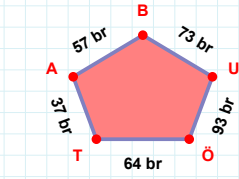
|ÜH| kaç cm'dir?

- ☐ 67 cm
☐ 68 cm
☐ 69 cm



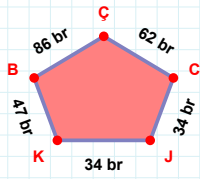
14 cm hangi kenara aittir?

Kenar:



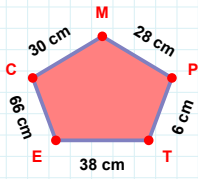
73 br hangi kenara aittir?

Kenar:



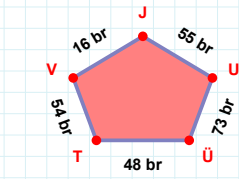
62 br hangi kenara aittir?

- ☐ KJ kenarı
☐ ÇJ kenarı
☐ JC kenarı



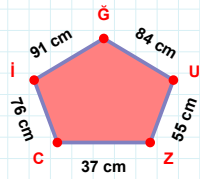
|PM| kaç cm'dir?

- ☐ 27 cm
☐ 28 cm
☐ 29 cm



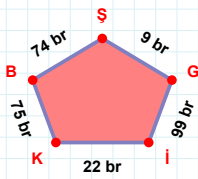
|TÜ| + |VT| =

Cevap: br



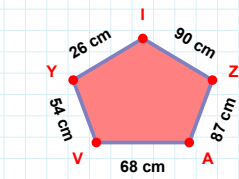
37 cm hangi kenara aittir?

Kenar:



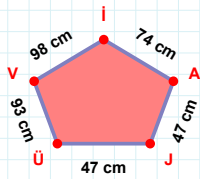
9 br hangi kenara aittir?

- ☐ ŞB kenarı
☐ İG kenarı
☐ KG kenarı



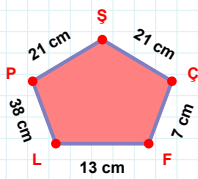
|ZI| kaç cm'dir?

- ☐ 89 cm
☐ 90 cm
☐ 91 cm



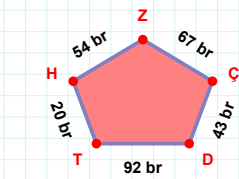
|ÜJ| kaç cm'dir?

- ☐ 46 cm
☐ 47 cm
☐ 48 cm



|ŞP| + |ÇŞ| =

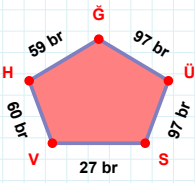
Cevap: cm



|ÇZ| + |TD| =

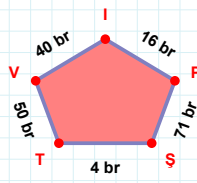
Cevap: br

SORU: Aşağıdaki geometrik şekillerle ilgili soruları cevaplayınız.



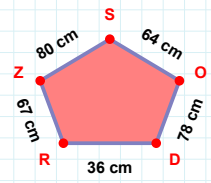
97 br hangi kenara aittir?

- ☐ ÜV kenarı
☐ HV kenarı
☐ SÜ kenarı



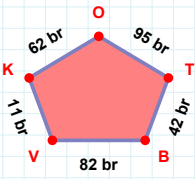
16 br hangi kenara aittir?

- ☐ ŞP kenarı
☐ IV kenarı
☐ ŞI kenarı



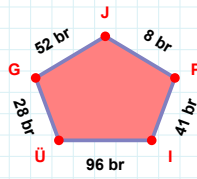
64 cm hangi kenara aittir?

- ☐ ZR kenarı
☐ RO kenarı
☐ OS kenarı



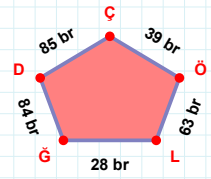
82 br hangi kenara aittir?

Kenar:



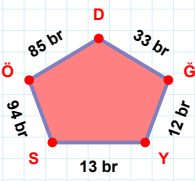
|PJ| kaç brdir?

- ☐ 7 br
☐ 8 br
☐ 9 br



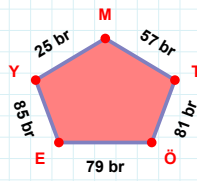
28 br hangi kenara aittir?

Kenar:



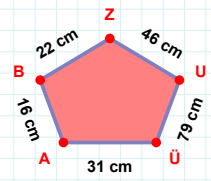
33 br hangi kenara aittir?

- ☐ YG kenarı
☐ GÖ kenarı
☐ GD kenarı



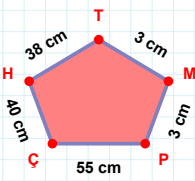
|ÖT| kaç brdir?

- ☐ 80 br
☐ 81 br
☐ 82 br



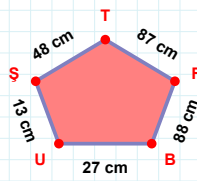
46 cm hangi kenara aittir?

- ☐ AÜ kenarı
☐ BÜ kenarı
☐ ÜU kenarı



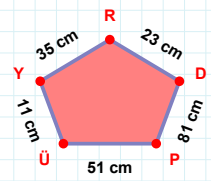
|ÇP| + |MT| =

Cevap: cm



|ŞU| kaç cmdir?

- ☐ 12 cm
☐ 13 cm
☐ 14 cm



|PD| + |DR| =

Cevap: cm

SÜREÇ ODAKLI DEĞERLENDİRME ÖLÇEĞİ

Doğru Sayısı: / 24

Öğretmen ilgili kutucuğu işaretler.

Geliştirilmeli (0-8)

İyi (9-14)

Çok İyi (15-20)

Mükemmel (21-24)

☐
☐
☐
☐

Hazırlayan:

Bu bölüme sınıfınızın ilgili kazanıma yönelik genel durumuna ilişkin gözlem ve izlenimlerinizi, öğrencilerinizin bu kazanımla ilgili öğrenme eksikliklerini ve bu eksikliklerin giderilmesi amacıyla yaptığınız/yapmayı planladığınız faaliyetleri not edebilirsiniz.

No	Adı - Soyadı	Toplam Puan	Değerlendirme
1			
2			
3			
4			
5			
6			
7			
8			
9			
10			
11			
12			
13			
14			
15			
16			
17			
18			
19			
20			
21			
22			
23			
24			
25			
26			
27			
28			
29			
30			
31			
32			
33			
34			
35			

Hazırlayan: