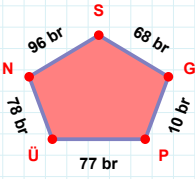
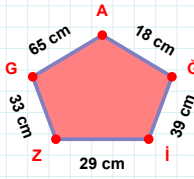


SORU: Aşağıdaki geometrik şekillerle ilgili soruları cevaplayınız.

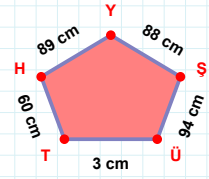
$$|ÜP| + |NÜ| = \dots$$

Cevap: br



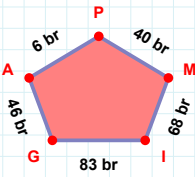
33 cm hangi kenara aittir?

Kenar:



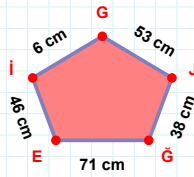
|HT| kaç cm'dir?

- ☐ 59 cm
☐ 60 cm
☐ 61 cm



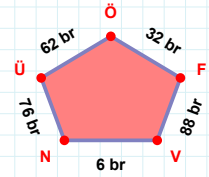
40 br hangi kenara aittir?

- ☐ MP kenarı
☐ GI kenarı
☐ MG kenarı



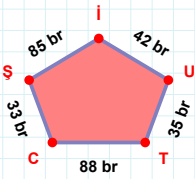
$$|İE| + |GI| = \dots$$

Cevap: cm



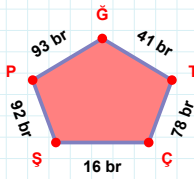
|VF| kaç br'dir?

- ☐ 87 br
☐ 88 br
☐ 89 br



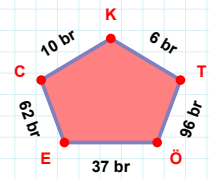
88 br hangi kenara aittir?

Kenar:



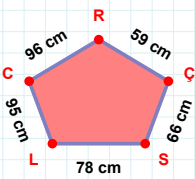
|GP| kaç br'dir?

- ☐ 92 br
☐ 93 br
☐ 94 br



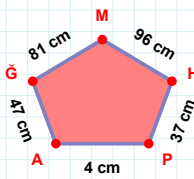
|CE| kaç br'dir?

- ☐ 61 br
☐ 62 br
☐ 63 br



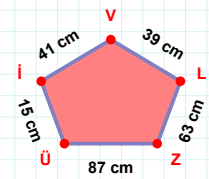
$$|RC| + |CL| = \dots$$

Cevap: cm



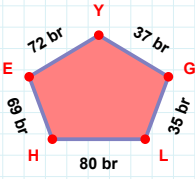
96 cm hangi kenara aittir?

- ☐ HM kenarı
☐ PM kenarı
☐ MG kenarı



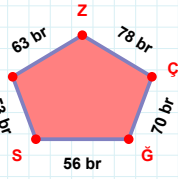
63 cm hangi kenara aittir?

Kenar:

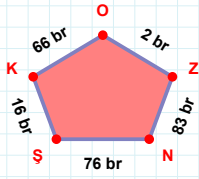
SORU: Aşağıdaki geometrik şekillerle ilgili soruları cevaplayınız.

37 br hangi kenara aittir?

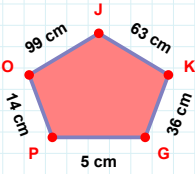
- ☐ HG kenarı
☐ EH kenarı
☐ LG kenarı

 $|ĞÇ| + |ÇZ| = \dots$

Cevap: br

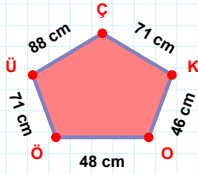
 $|SN| + |KS| = \dots$

Cevap: br



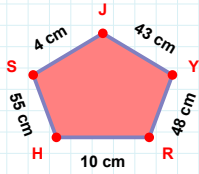
63 cm hangi kenara aittir?

- ☐ PJ kenarı
☐ OP kenarı
☐ JO kenarı



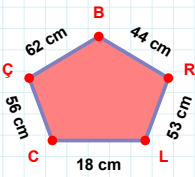
71 cm hangi kenara aittir?

- ☐ OK kenarı
☐ OÜ kenarı
☐ ÖO kenarı

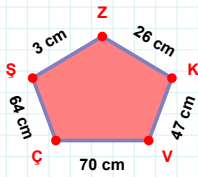


43 cm hangi kenara aittir?

Kenar:

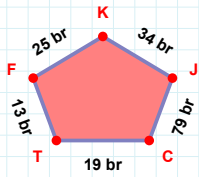
 $|RB|$ kaç cm'dir?

- ☐ 43 cm
☐ 44 cm
☐ 45 cm



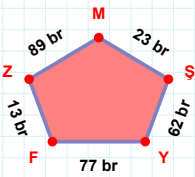
26 cm hangi kenara aittir?

Kenar:



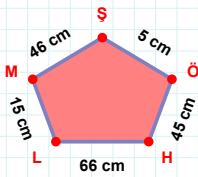
79 br hangi kenara aittir?

Kenar:

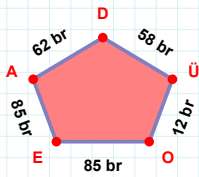


62 br hangi kenara aittir?

Kenar:

 $|ŞM|$ kaç cm'dir?

- ☐ 45 cm
☐ 46 cm
☐ 47 cm

 $|EO|$ kaç br'dir?

- ☐ 84 br
☐ 85 br
☐ 86 br

SÜREÇ ODAKLI DEĞERLENDİRME ÖLÇEĞİ

Doğru Sayısı: / 24

Öğretmen ilgili kutucuğu işaretler.

Geliştirilmeli (0-8)

İyi (9-14)

Çok İyi (15-20)

Mükemmel (21-24)

☐☐☐☐

Hazırlayan:

Bu bölüme sınıfınızın ilgili kazanıma yönelik genel durumuna ilişkin gözlem ve izlenimlerinizi, öğrencilerinizin bu kazanımla ilgili öğrenme eksikliklerini ve bu eksikliklerin giderilmesi amacıyla yaptığınız/yapmayı planladığınız faaliyetleri not edebilirsiniz.

No	Adı - Soyadı	Toplam Puan	Değerlendirme
1			
2			
3			
4			
5			
6			
7			
8			
9			
10			
11			
12			
13			
14			
15			
16			
17			
18			
19			
20			
21			
22			
23			
24			
25			
26			
27			
28			
29			
30			
31			
32			
33			
34			
35			

Hazırlayan: