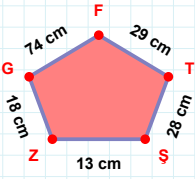
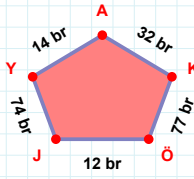


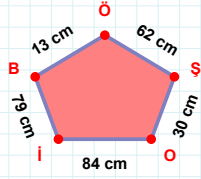
**SORU:** Aşağıdaki geometrik şekillerle ilgili soruları cevaplayınız.

74 cm hangi kenara aittir?

Kenar: .....

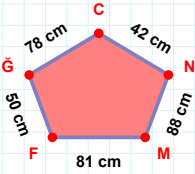
 $|YJ| + |KA| = \dots$ 

Cevap: ..... br

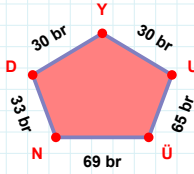


62 cm hangi kenara aittir?

Kenar: .....

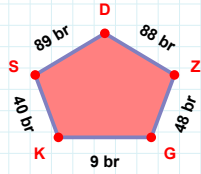
 $|NC|$  kaç cm'dir?

- ☐ 41 cm  
☐ 42 cm  
☐ 43 cm



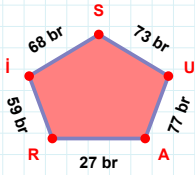
30 br hangi kenara aittir?

- ☐ ÜY kenarı  
☐ UY kenarı  
☐ ÜU kenarı



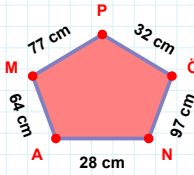
88 br hangi kenara aittir?

- ☐ GZ kenarı  
☐ SK kenarı  
☐ KD kenarı

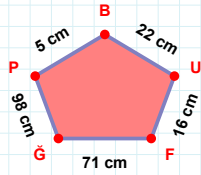


73 br hangi kenara aittir?

- ☐ SI kenarı  
☐ İR kenarı  
☐ AI kenarı

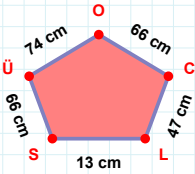
 $|MA| + |NÖ| = \dots$ 

Cevap: ..... cm

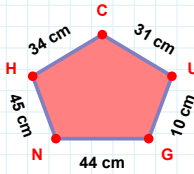


71 cm hangi kenara aittir?

Kenar: .....

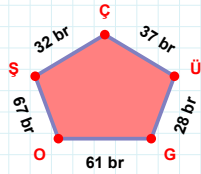
 $|ÜS|$  kaç cm'dir?

- ☐ 65 cm  
☐ 66 cm  
☐ 67 cm

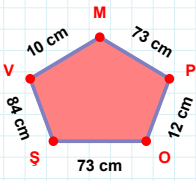


31 cm hangi kenara aittir?

- ☐ CH kenarı  
☐ UC kenarı  
☐ GC kenarı

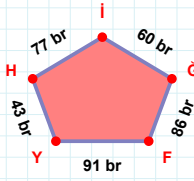
 $|OG|$  kaç br'dir?

- ☐ 60 br  
☐ 61 br  
☐ 62 br

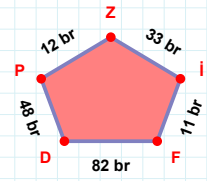
**SORU:** Aşağıdaki geometrik şekillerle ilgili soruları cevaplayınız.

12 cm hangi kenara aittir?

Kenar: .....

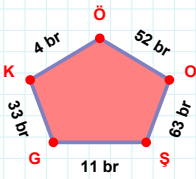
 $|FG| + |IH| = \dots$ 

Cevap: ..... br



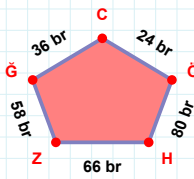
12 br hangi kenara aittir?

Kenar: .....

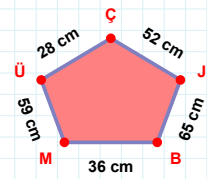


52 br hangi kenara aittir?

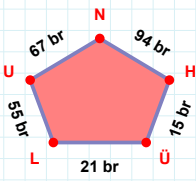
- ☐ ÖG kenarı  
☐ KG kenarı  
☐ GŞ kenarı

 $|CĞ|$  kaç brdir?

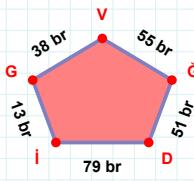
- ☐ 35 br  
☐ 36 br  
☐ 37 br

 $|MB| + |BJ| = \dots$ 

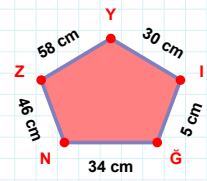
Cevap: ..... cm

 $|ÜH|$  kaç brdir?

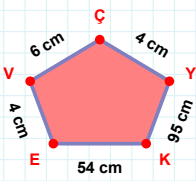
- ☐ 14 br  
☐ 15 br  
☐ 16 br

 $|Gİ| + |VG| = \dots$ 

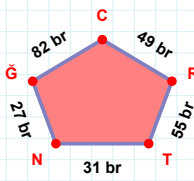
Cevap: ..... br

 $|Ğİ|$  kaç cmdir?

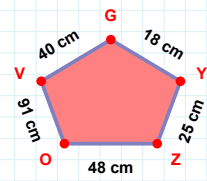
- ☐ 4 cm  
☐ 5 cm  
☐ 6 cm

 $|VE| + |KY| = \dots$ 

Cevap: ..... cm

 $|RC|$  kaç brdir?

- ☐ 48 br  
☐ 49 br  
☐ 50 br



18 cm hangi kenara aittir?

- ☐ VO kenarı  
☐ YG kenarı  
☐ GZ kenarı

## SÜREÇ ODAKLI DEĞERLENDİRME ÖLÇEĞİ

Doğru Sayısı: ..... / 24

Öğretmen ilgili kutucuğu işaretler.

Geliştirilmeli (0-8)

İyi (9-14)

Çok İyi (15-20)

Mükemmel (21-24)

☐☐☐☐

Hazırlayan: .....

**Bu bölüme sınıfınızın ilgili kazanıma yönelik genel durumuna ilişkin gözlem ve izlenimlerinizi, öğrencilerinizin bu kazanımla ilgili öğrenme eksikliklerini ve bu eksikliklerin giderilmesi amacıyla yaptığınız/yapmayı planladığınız faaliyetleri not edebilirsiniz.**

| No | Adı - Soyadı | Toplam Puan | Değerlendirme |
|----|--------------|-------------|---------------|
| 1  |              |             |               |
| 2  |              |             |               |
| 3  |              |             |               |
| 4  |              |             |               |
| 5  |              |             |               |
| 6  |              |             |               |
| 7  |              |             |               |
| 8  |              |             |               |
| 9  |              |             |               |
| 10 |              |             |               |
| 11 |              |             |               |
| 12 |              |             |               |
| 13 |              |             |               |
| 14 |              |             |               |
| 15 |              |             |               |
| 16 |              |             |               |
| 17 |              |             |               |
| 18 |              |             |               |
| 19 |              |             |               |
| 20 |              |             |               |
| 21 |              |             |               |
| 22 |              |             |               |
| 23 |              |             |               |
| 24 |              |             |               |
| 25 |              |             |               |
| 26 |              |             |               |
| 27 |              |             |               |
| 28 |              |             |               |
| 29 |              |             |               |
| 30 |              |             |               |
| 31 |              |             |               |
| 32 |              |             |               |
| 33 |              |             |               |
| 34 |              |             |               |
| 35 |              |             |               |

Hazırlayan: .....