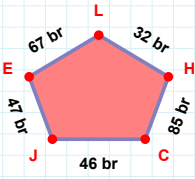
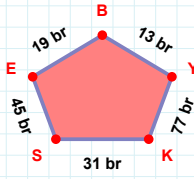
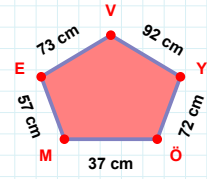


SORU: Aşağıdaki geometrik şekillerle ilgili soruları cevaplayınız.**|CH| + |JC| =**

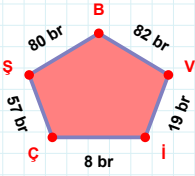
Cevap: br

**|BE| kaç brdir?**

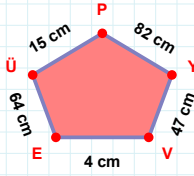
- ☐ 18 br
☐ 19 br
☐ 20 br

**|ÖY| kaç cmdir?**

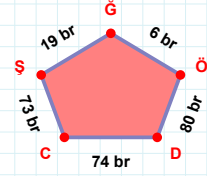
- ☐ 71 cm
☐ 72 cm
☐ 73 cm

**|İV| + |ŞÇ| =**

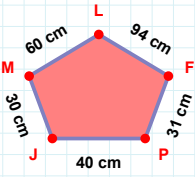
Cevap: br

**|PÜ| kaç cmdir?**

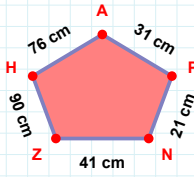
- ☐ 14 cm
☐ 15 cm
☐ 16 cm

**6 br hangi kenara aittir?**

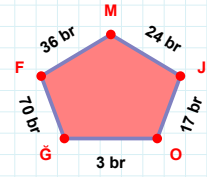
- ☐ CÖ kenarı
☐ GŞ kenarı
☐ ŞC kenarı

**|LM| kaç cmdir?**

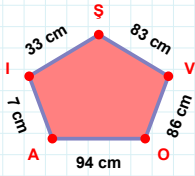
- ☐ 59 cm
☐ 60 cm
☐ 61 cm

**41 cm hangi kenara aittir?**

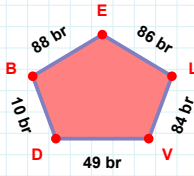
Kenar:

**24 br hangi kenara aittir?**

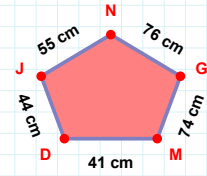
- ☐ OJ kenarı
☐ GO kenarı
☐ OM kenarı

**|AO| kaç cmdir?**

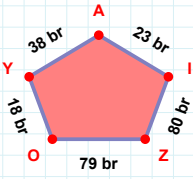
- ☐ 93 cm
☐ 94 cm
☐ 95 cm

**|LE| kaç brdir?**

- ☐ 85 br
☐ 86 br
☐ 87 br

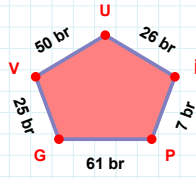
**|DM| kaç cmdir?**

- ☐ 40 cm
☐ 41 cm
☐ 42 cm

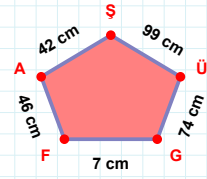
SORU: Aşağıdaki geometrik şekillerle ilgili soruları cevaplayınız.

23 br hangi kenara aittir?

- ☐ YO kenarı
☐ AO kenarı
☐ AY kenarı

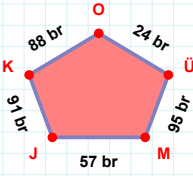
 $|UV| + |IU| = \dots$

Cevap: br

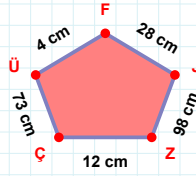


99 cm hangi kenara aittir?

- ☐ FG kenarı
☐ FÜ kenarı
☐ GÜ kenarı

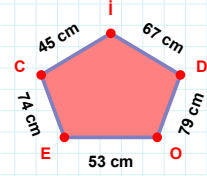
 $|ÜO|$ kaç brdir?

- ☐ 23 br
☐ 24 br
☐ 25 br



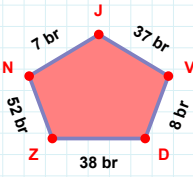
28 cm hangi kenara aittir?

- ☐ ZJ kenarı
☐ ÜZ kenarı
☐ FÜ kenarı

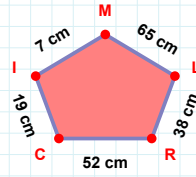


67 cm hangi kenara aittir?

- ☐ CE kenarı
☐ İC kenarı
☐ CD kenarı

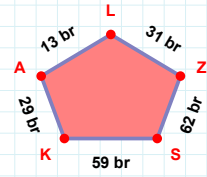
 $|NZ|$ kaç brdir?

- ☐ 51 br
☐ 52 br
☐ 53 br



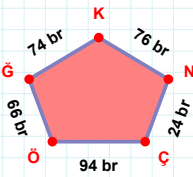
65 cm hangi kenara aittir?

- ☐ IC kenarı
☐ RL kenarı
☐ CM kenarı



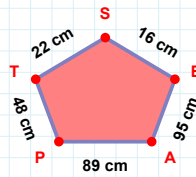
62 br hangi kenara aittir?

Kenar:



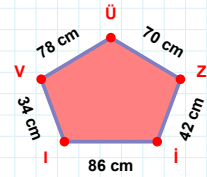
94 br hangi kenara aittir?

Kenar:



95 cm hangi kenara aittir?

Kenar:

 $|İZ| + |II| = \dots$

Cevap: cm

SÜREÇ ODAKLI DEĞERLENDİRME ÖLÇEĞİ

Doğru Sayısı: / 24

Öğretmen ilgili kutucuğu işaretler.

Geliştirilmeli (0-8)

İyi (9-14)

Çok İyi (15-20)

Mükemmel (21-24)

☐☐☐☐

Hazırlayan:

Bu bölüme sınıfınızın ilgili kazanıma yönelik genel durumuna ilişkin gözlem ve izlenimlerinizi, öğrencilerinizin bu kazanımla ilgili öğrenme eksikliklerini ve bu eksikliklerin giderilmesi amacıyla yaptığınız/yapmayı planladığınız faaliyetleri not edebilirsiniz.

No	Adı - Soyadı	Toplam Puan	Değerlendirme
1			
2			
3			
4			
5			
6			
7			
8			
9			
10			
11			
12			
13			
14			
15			
16			
17			
18			
19			
20			
21			
22			
23			
24			
25			
26			
27			
28			
29			
30			
31			
32			
33			
34			
35			

Hazırlayan: