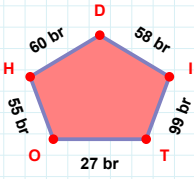
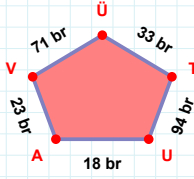


**SORU:** Aşağıdaki geometrik şekillerle ilgili soruları cevaplayınız.

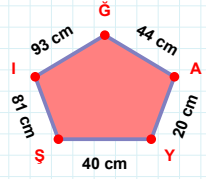
$$|HO| + |OT| = \dots$$

Cevap: ..... br



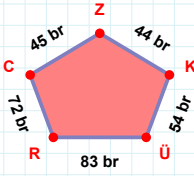
33 br hangi kenara aittir?

- ☐ ÜV kenarı  
☐ ÜA kenarı  
☐ AU kenarı



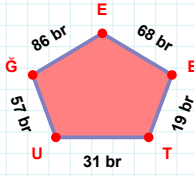
44 cm hangi kenara aittir?

- ☐ YA kenarı  
☐ İŞ kenarı  
☐ ŞY kenarı



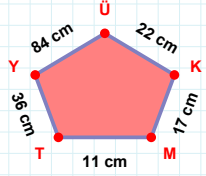
$$|ÜK| + |RÜ| = \dots$$

Cevap: ..... br



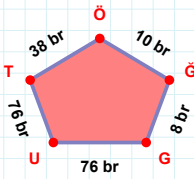
$$|TB| + |UT| = \dots$$

Cevap: ..... br



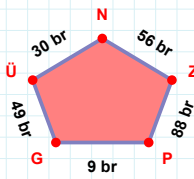
17 cm hangi kenara aittir?

Kenar: .....



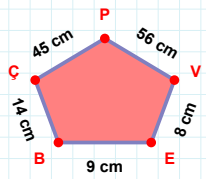
$$|GÖ| + |ÖT| = \dots$$

Cevap: ..... br



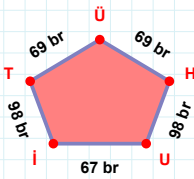
|GP| kaç brdir?

- ☐ 8 br  
☐ 9 br  
☐ 10 br



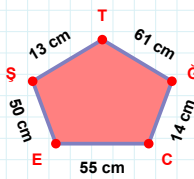
8 cm hangi kenara aittir?

Kenar: .....



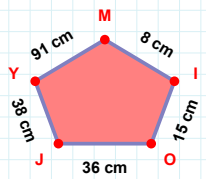
$$|Tİ| + |IU| = \dots$$

Cevap: ..... br



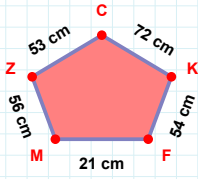
61 cm hangi kenara aittir?

- ☐ CŞ kenarı  
☐ EC kenarı  
☐ ET kenarı



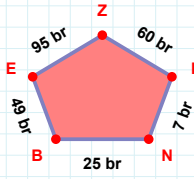
$$|OI| + |YJ| = \dots$$

Cevap: ..... cm

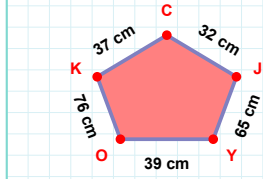
**SORU:** Aşağıdaki geometrik şekillerle ilgili soruları cevaplayınız.

72 cm hangi kenara aittir?

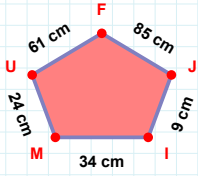
- ☐ CZ kenarı  
☐ ZM kenarı  
☐ KM kenarı

 $|NI| + |BN| = \dots$ 

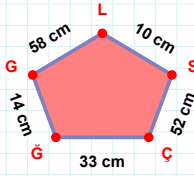
Cevap: ..... br

 $|KO|$  kaç cm'dir?

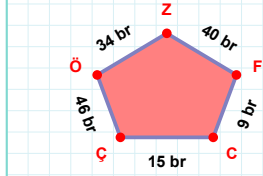
- ☐ 75 cm  
☐ 76 cm  
☐ 77 cm

 $|IJ|$  kaç cm'dir?

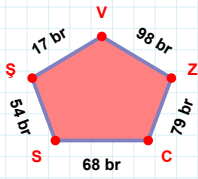
- ☐ 8 cm  
☐ 9 cm  
☐ 10 cm

 $|LG|$  kaç cm'dir?

- ☐ 57 cm  
☐ 58 cm  
☐ 59 cm

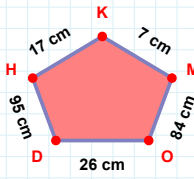
 $|CF|$  kaç br'dir?

- ☐ 8 br  
☐ 9 br  
☐ 10 br

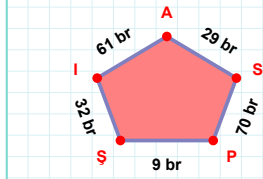


17 br hangi kenara aittir?

Kenar: .....

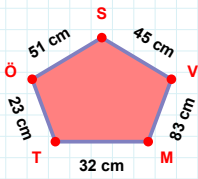
 $|DO| + |MK| = \dots$ 

Cevap: ..... cm

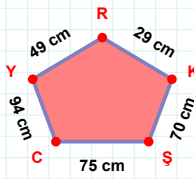


29 br hangi kenara aittir?

- ☐ ŞP kenarı  
☐ AP kenarı  
☐ İŞ kenarı

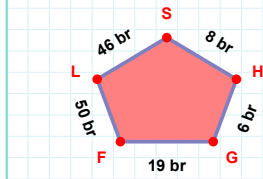
 $|VS| + |SÖ| = \dots$ 

Cevap: ..... cm



75 cm hangi kenara aittir?

Kenar: .....

 $|SL| + |HS| = \dots$ 

Cevap: ..... br

## SÜREÇ ODAKLI DEĞERLENDİRME ÖLÇEĞİ

Doğru Sayısı: ..... / 24

Öğretmen ilgili kutucuğu işaretler.

Geliştirilmeli (0-8)

İyi (9-14)

Çok İyi (15-20)

Mükemmel (21-24)

☐☐☐☐

Hazırlayan: .....

**Bu bölüme sınıfınızın ilgili kazanıma yönelik genel durumuna ilişkin gözlem ve izlenimlerinizi, öğrencilerinizin bu kazanımla ilgili öğrenme eksikliklerini ve bu eksikliklerin giderilmesi amacıyla yaptığınız/yapmayı planladığınız faaliyetleri not edebilirsiniz.**

No	Adı - Soyadı	Toplam Puan	Değerlendirme
1			
2			
3			
4			
5			
6			
7			
8			
9			
10			
11			
12			
13			
14			
15			
16			
17			
18			
19			
20			
21			
22			
23			
24			
25			
26			
27			
28			
29			
30			
31			
32			
33			
34			
35			

Hazırlayan: .....