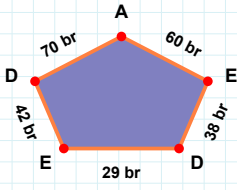
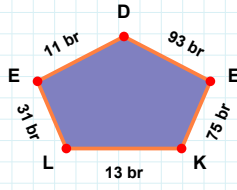


**SORU:** Aşağıdaki şekillerde istenen kenarın kaç birim veya santimetre olduğunu bulunuz.



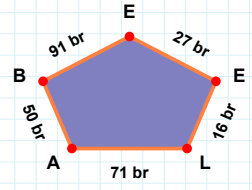
|EL| kaç brdir?

- ☐ 28 br  
☐ 31 br  
☐ 26 br



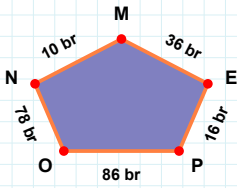
|EB| kaç brdir?

- ☐ 92 br  
☐ 88 br  
☐ 91 br



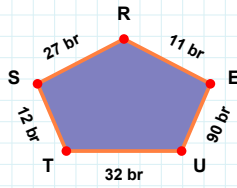
|DE| kaç brdir?

- ☐ 42 br  
☐ 45 br  
☐ 40 br



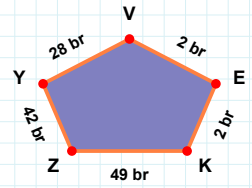
|ST| kaç brdir?

- ☐ 2 br  
☐ 12 br  
☐ 17 br



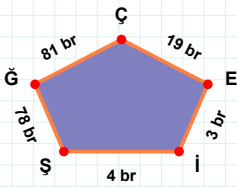
|ZK| kaç brdir?

- ☐ 39 br  
☐ 47 br  
☐ 49 br



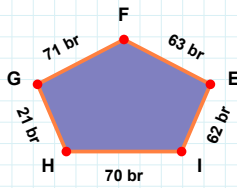
|OP| kaç brdir?

- ☐ 86 br  
☐ 96 br  
☐ 91 br



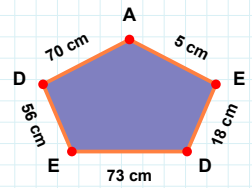
|ÇĞ| kaç brdir?

- ☐ 83 br  
☐ 81 br  
☐ 86 br



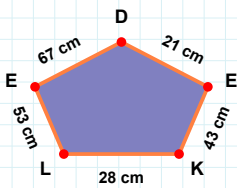
|ED| kaç cmdir?

- ☐ 78 cm  
☐ 70 cm  
☐ 73 cm



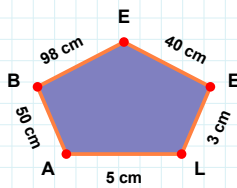
|FG| kaç brdir?

- ☐ 76 br  
☐ 73 br  
☐ 71 br



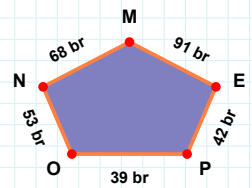
|EL| kaç cmdir?

- ☐ 53 cm  
☐ 50 cm  
☐ 56 cm



|EE| kaç cmdir?

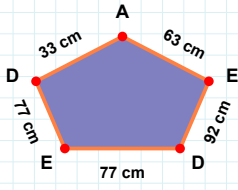
- ☐ 30 cm  
☐ 40 cm  
☐ 45 cm



|MN| kaç brdir?

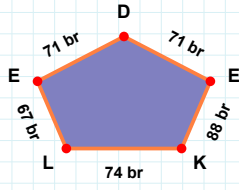
- ☐ 70 br  
☐ 68 br  
☐ 58 br

**SORU:** Aşağıdaki şekillerde istenen kenarın kaç birim veya santimetre olduğunu bulunuz.



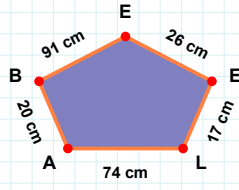
|AD| kaç cm'dir?

- ☐ 33 cm  
☐ 28 cm  
☐ 30 cm



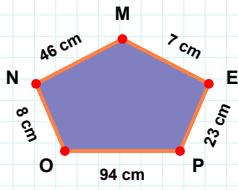
|ED| kaç br'dir?

- ☐ 70 br  
☐ 74 br  
☐ 71 br



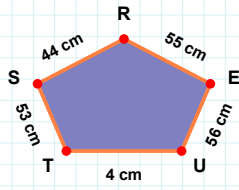
|EB| kaç cm'dir?

- ☐ 94 cm  
☐ 81 cm  
☐ 91 cm



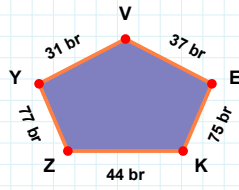
|NO| kaç cm'dir?

- ☐ 5 cm  
☐ 8 cm  
☐ 10 cm



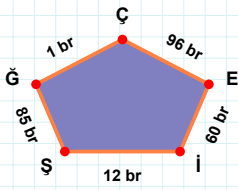
|EV| kaç br'dir?

- ☐ 34 br  
☐ 37 br  
☐ 38 br



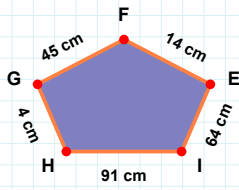
|UE| kaç cm'dir?

- ☐ 56 cm  
☐ 61 cm  
☐ 57 cm



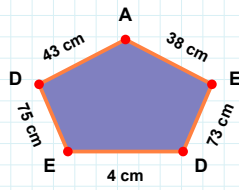
|IE| kaç br'dir?

- ☐ 60 br  
☐ 63 br  
☐ 50 br



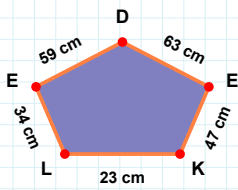
|FG| kaç cm'dir?

- ☐ 45 cm  
☐ 48 cm  
☐ 43 cm



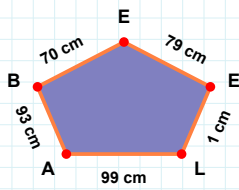
|EA| kaç cm'dir?

- ☐ 41 cm  
☐ 43 cm  
☐ 38 cm



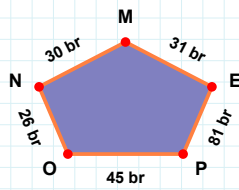
|NO| kaç br'dir?

- ☐ 16 br  
☐ 26 br  
☐ 31 br



|EL| kaç cm'dir?

- ☐ 34 cm  
☐ 36 cm  
☐ 35 cm



|EE| kaç cm'dir?

- ☐ 79 cm  
☐ 80 cm  
☐ 81 cm

## SÜREÇ ODAKLI DEĞERLENDİRME ÖLÇEĞİ

Doğru Sayısı: ..... / 24

Öğretmen ilgili kutucuğu işaretler.

Geliştirilmeli (0-8)

İyi (9-14)

Çok İyi (15-20)

Mükemmel (21-24)

☐
☐
☐
☐

Hazırlayan: .....

Bu bölüme sınıfınızın ilgili kazanıma yönelik genel durumuna ilişkin gözlem ve izlenimlerinizi, öğrencilerinizin bu kazanımla ilgili öğrenme eksikliklerini ve bu eksikliklerin giderilmesi amacıyla yaptığınız/yapmayı planladığınız faaliyetleri not edebilirsiniz.

No	Adı - Soyadı	Toplam Puan	Değerlendirme
1			
2			
3			
4			
5			
6			
7			
8			
9			
10			
11			
12			
13			
14			
15			
16			
17			
18			
19			
20			
21			
22			
23			
24			
25			
26			
27			
28			
29			
30			
31			
32			
33			
34			
35			

Hazırlayan: .....