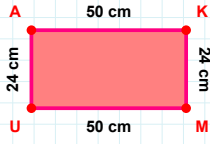
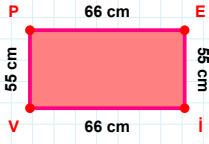


SORU: Aşağıdaki geometrik şekillerle ilgili soruları cevaplayınız.



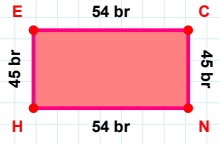
24 cm hangi kenara aittir?

Kenar: .....

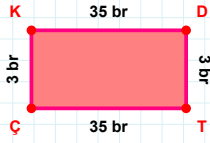


66 cm hangi kenara aittir?

Kenar: .....

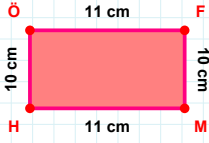
 $|EC| + |HE| = \dots$ 

Cevap: ..... br



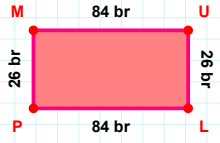
35 br hangi kenara aittir?

Kenar: .....



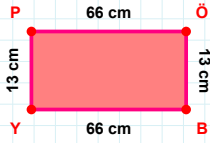
10 cm hangi kenara aittir?

Kenar: .....



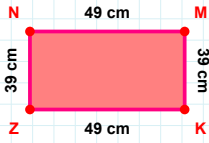
26 br hangi kenara aittir?

- ☐ LP kenarı  
☐ ML kenarı  
☐ UL kenarı

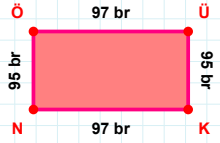


13 cm hangi kenara aittir?

- ☐ YÖ kenarı  
☐ ÖB kenarı  
☐ YP kenarı

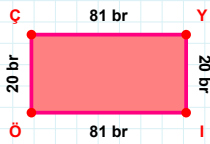
 $|MK|$  kaç cm'dir?

- ☐ 38 cm  
☐ 39 cm  
☐ 40 cm

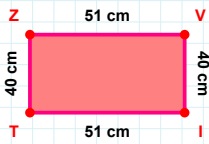


95 br hangi kenara aittir?

Kenar: .....

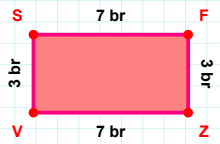
 $|Yİ| + |ÇY| = \dots$ 

Cevap: ..... br



51 cm hangi kenara aittir?

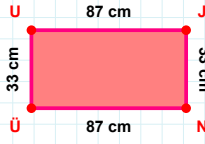
Kenar: .....



7 br hangi kenara aittir?

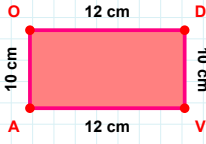
Kenar: .....

SORU: Aşağıdaki geometrik şekillerle ilgili soruları cevaplayınız.



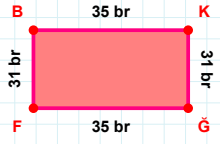
33 cm hangi kenara aittir?

- ☐ ÜÜ kenarı  
☐ NU kenarı  
☐ UJ kenarı



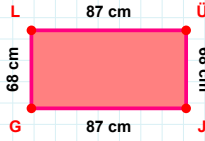
|AO| kaç cm'dir?

- ☐ 9 cm  
☐ 10 cm  
☐ 11 cm



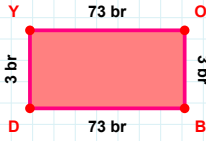
|KG| kaç br'dir?

- ☐ 30 br  
☐ 31 br  
☐ 32 br



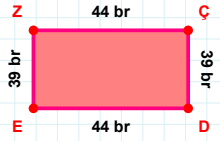
|LÜ| + |GL| = ....

Cevap: ..... cm



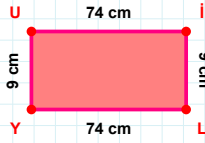
|YO| + |DY| = ....

Cevap: ..... br



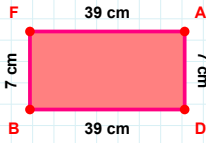
|DE| kaç br'dir?

- ☐ 43 br  
☐ 44 br  
☐ 45 br



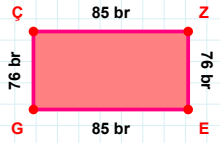
9 cm hangi kenara aittir?

- ☐ UL kenarı  
☐ LY kenarı  
☐ UI kenarı



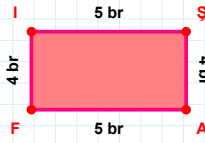
|FA| kaç cm'dir?

- ☐ 38 cm  
☐ 39 cm  
☐ 40 cm



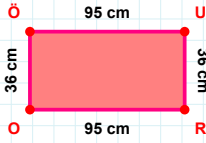
|EG| kaç br'dir?

- ☐ 84 br  
☐ 85 br  
☐ 86 br



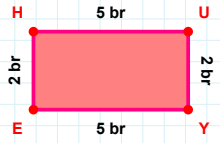
|İŞ| kaç br'dir?

- ☐ 4 br  
☐ 5 br  
☐ 6 br



95 cm hangi kenara aittir?

Kenar: .....



2 br hangi kenara aittir?

Kenar: .....

## SÜREÇ ODAKLI DEĞERLENDİRME ÖLÇEĞİ

Doğru Sayısı: ..... / 24

Öğretmen ilgili kutucuğu işaretler.

Geliştirilmeli (0-8)

İyi (9-14)

Çok İyi (15-20)

Mükemmel (21-24)

☐☐☐☐

Hazırlayan: .....

Bu bölüme sınıfınızın ilgili kazanıma yönelik genel durumuna ilişkin gözlem ve izlenimlerinizi, öğrencilerinizin bu kazanımla ilgili öğrenme eksikliklerini ve bu eksikliklerin giderilmesi amacıyla yaptığınız/yapmayı planladığınız faaliyetleri not edebilirsiniz.

No	Adı - Soyadı	Toplam Puan	Değerlendirme
1			
2			
3			
4			
5			
6			
7			
8			
9			
10			
11			
12			
13			
14			
15			
16			
17			
18			
19			
20			
21			
22			
23			
24			
25			
26			
27			
28			
29			
30			
31			
32			
33			
34			
35			

Hazırlayan: .....