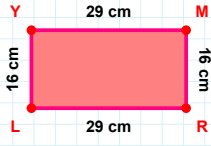
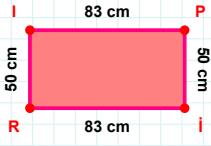


SORU: Aşağıdaki geometrik şekillerle ilgili soruları cevaplayınız.



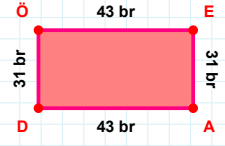
|YM| kaç cm'dir?

- ☐ 28 cm
☐ 29 cm
☐ 30 cm



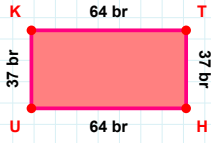
83 cm hangi kenara aittir?

Kenar:



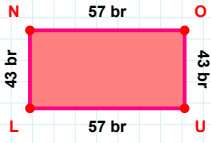
31 br hangi kenara aittir?

- ☐ DÖ kenarı
☐ EA kenarı
☐ AÖ kenarı



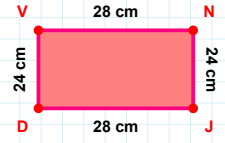
64 br hangi kenara aittir?

Kenar:



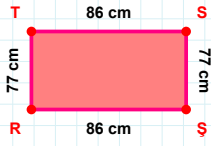
57 br hangi kenara aittir?

Kenar:



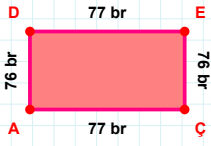
|VN| + |NJ| =

Cevap: cm



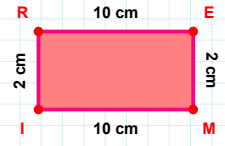
77 cm hangi kenara aittir?

- ☐ SŞ kenarı
☐ TŞ kenarı
☐ ŞR kenarı



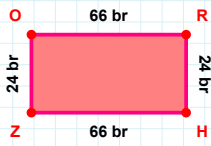
|ÇA| + |AD| =

Cevap: br



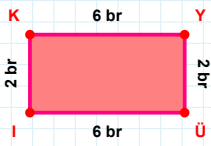
|İR| + |RE| =

Cevap: cm



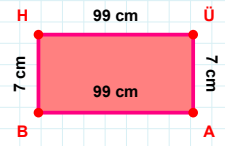
|ZO| + |HZ| =

Cevap: br



|Üİ| kaç br'dir?

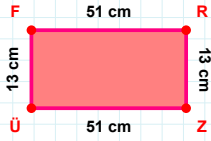
- ☐ 5 br
☐ 6 br
☐ 7 br



|ÜA| kaç cm'dir?

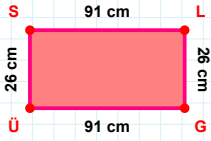
- ☐ 6 cm
☐ 7 cm
☐ 8 cm

SORU: Aşağıdaki geometrik şekillerle ilgili soruları cevaplayınız.



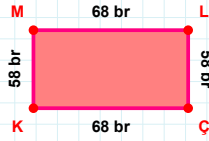
51 cm hangi kenara aittir?

Kenar:



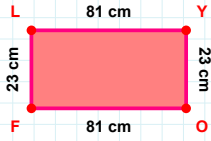
|LG| kaç cmdir?

- ☐ 25 cm
☐ 26 cm
☐ 27 cm



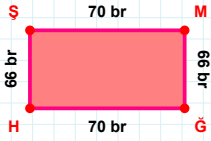
|LC| kaç brdir?

- ☐ 57 br
☐ 58 br
☐ 59 br



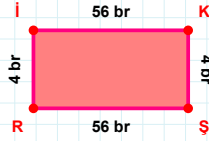
23 cm hangi kenara aittir?

- ☐ YO kenarı
☐ FY kenarı
☐ LY kenarı



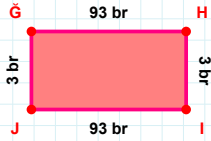
|ŞM| + |HS| =

Cevap: br



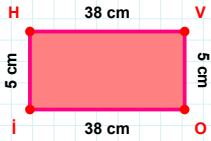
|KS| kaç brdir?

- ☐ 3 br
☐ 4 br
☐ 5 br



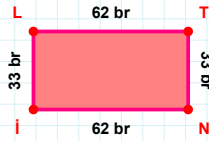
|ĞH| kaç brdir?

- ☐ 92 br
☐ 93 br
☐ 94 br



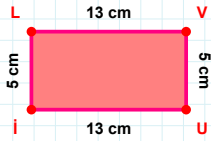
|VO| + |HV| =

Cevap: cm



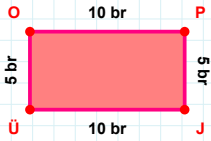
|İN| kaç brdir?

- ☐ 61 br
☐ 62 br
☐ 63 br



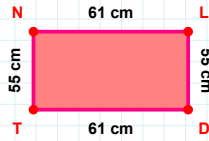
|Üİ| + |LV| =

Cevap: cm



|OP| kaç brdir?

- ☐ 9 br
☐ 10 br
☐ 11 br



61 cm hangi kenara aittir?

Kenar:

SÜREÇ ODAKLI DEĞERLENDİRME ÖLÇEĞİ

Doğru Sayısı: / 24

Öğretmen ilgili kutucuğu işaretler.

Geliştirilmeli (0-8)

İyi (9-14)

Çok İyi (15-20)

Mükemmel (21-24)

☐
☐
☐
☐

Hazırlayan:

Bu bölüme sınıfınızın ilgili kazanıma yönelik genel durumuna ilişkin gözlem ve izlenimlerinizi, öğrencilerinizin bu kazanımla ilgili öğrenme eksikliklerini ve bu eksikliklerin giderilmesi amacıyla yaptığınız/yapmayı planladığınız faaliyetleri not edebilirsiniz.

No	Adı - Soyadı	Toplam Puan	Değerlendirme
1			
2			
3			
4			
5			
6			
7			
8			
9			
10			
11			
12			
13			
14			
15			
16			
17			
18			
19			
20			
21			
22			
23			
24			
25			
26			
27			
28			
29			
30			
31			
32			
33			
34			
35			

Hazırlayan: