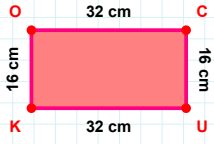
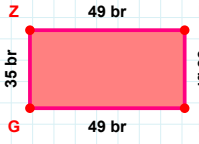


SORU: Aşağıdaki geometrik şekillerle ilgili soruları cevaplayınız.

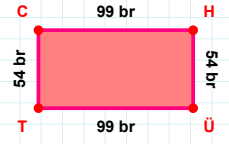


32 cm hangi kenara aittir?

Kenar:

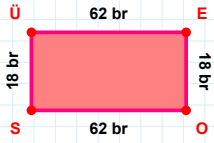
 $|IG| + |GZ| = \dots$

Cevap: br



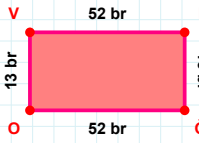
54 br hangi kenara aittir?

Kenar:



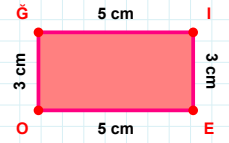
18 br hangi kenara aittir?

- ☐ SÜ kenarı
☐ OÜ kenarı
☐ ÜE kenarı



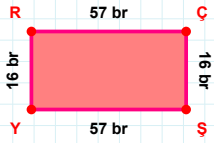
13 br hangi kenara aittir?

- ☐ GO kenarı
☐ VG kenarı
☐ OV kenarı



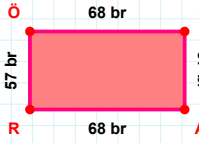
3 cm hangi kenara aittir?

- ☐ GI kenarı
☐ EO kenarı
☐ IO kenarı

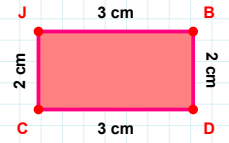


57 br hangi kenara aittir?

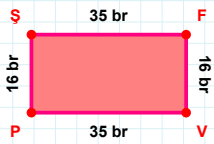
Kenar:

 $|RÖ|$ kaç brdir?

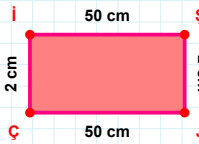
- ☐ 56 br
☐ 57 br
☐ 58 br

 $|DC| + |BD| = \dots$

Cevap: cm

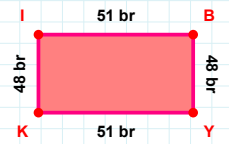
 $|PŞ|$ kaç brdir?

- ☐ 15 br
☐ 16 br
☐ 17 br



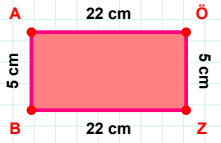
50 cm hangi kenara aittir?

Kenar:

 $|YK| + |İB| = \dots$

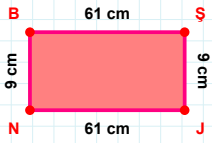
Cevap: br

SORU: Aşağıdaki geometrik şekillerle ilgili soruları cevaplayınız.



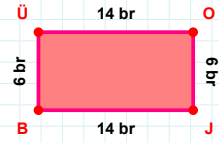
$|AÖ| + |ÖZ| = \dots$

Cevap: cm



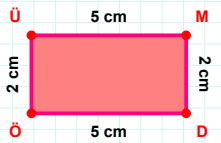
61 cm hangi kenara aittir?

Kenar:



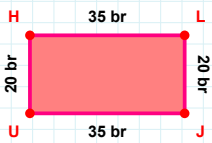
14 br hangi kenara aittir?

Kenar:



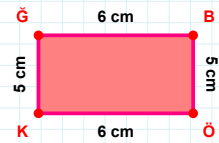
$|MD| + |ÜM| = \dots$

Cevap: cm



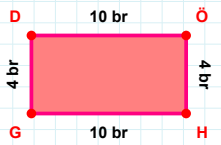
$|JU| + |UH| = \dots$

Cevap: br



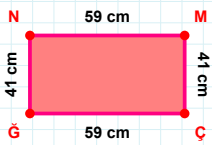
5 cm hangi kenara aittir?

Kenar:



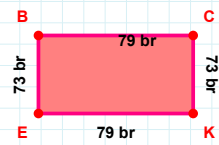
$|HG| + |DÖ| = \dots$

Cevap: br



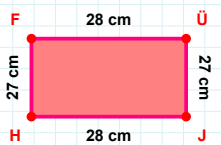
41 cm hangi kenara aittir?

Kenar:



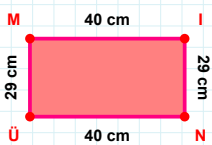
73 br hangi kenara aittir?

- ☐ BK kenarı
☐ CK kenarı
☐ EB kenarı



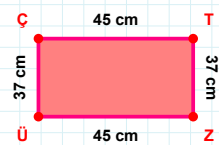
27 cm hangi kenara aittir?

- ☐ JF kenarı
☐ FÜ kenarı
☐ JH kenarı



$|MI| + |İM| = \dots$

Cevap: cm



45 cm hangi kenara aittir?

Kenar:

SÜREÇ ODAKLI DEĞERLENDİRME ÖLÇEĞİ

Doğru Sayısı: / 24

Öğretmen ilgili kutucuğu işaretler.

Geliştirilmeli (0-8)

İyi (9-14)

Çok İyi (15-20)

Mükemmel (21-24)

☐
☐
☐
☐

Hazırlayan:

Bu bölüme sınıfınızın ilgili kazanıma yönelik genel durumuna ilişkin gözlem ve izlenimlerinizi, öğrencilerinizin bu kazanımla ilgili öğrenme eksikliklerini ve bu eksikliklerin giderilmesi amacıyla yaptığınız/yapmayı planladığınız faaliyetleri not edebilirsiniz.

No	Adı - Soyadı	Toplam Puan	Değerlendirme
1			
2			
3			
4			
5			
6			
7			
8			
9			
10			
11			
12			
13			
14			
15			
16			
17			
18			
19			
20			
21			
22			
23			
24			
25			
26			
27			
28			
29			
30			
31			
32			
33			
34			
35			

Hazırlayan: