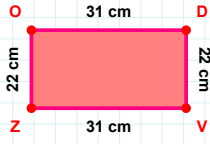
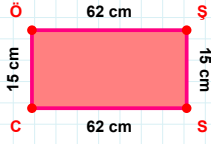


SORU: Aşağıdaki geometrik şekillerle ilgili soruları cevaplayınız.



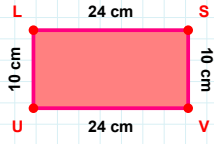
22 cm hangi kenara aittir?

- ☐ OD kenarı
☐ ZD kenarı
☐ VZ kenarı

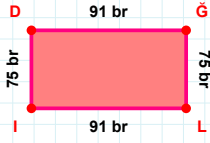


62 cm hangi kenara aittir?

Kenar:

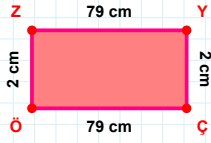
 $|VU| + |LS| = \dots$

Cevap: cm



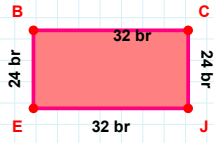
75 br hangi kenara aittir?

- ☐ GL kenarı
☐ ID kenarı
☐ DL kenarı



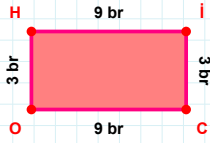
2 cm hangi kenara aittir?

- ☐ ÖZ kenarı
☐ ÇZ kenarı
☐ ZY kenarı



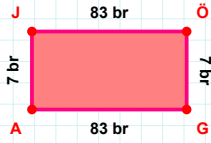
32 br hangi kenara aittir?

Kenar:



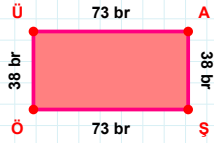
3 br hangi kenara aittir?

Kenar:

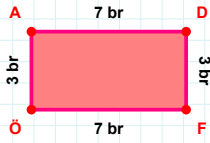


7 br hangi kenara aittir?

- ☐ AÖ kenarı
☐ AJ kenarı
☐ JO kenarı

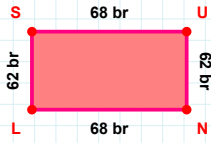
 $|ÖÜ| + |AS| = \dots$

Cevap: br

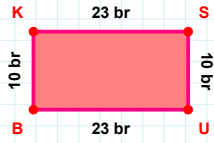


3 br hangi kenara aittir?

Kenar:

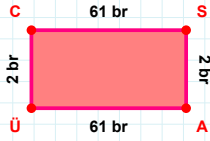
 $|UN| + |LS| = \dots$

Cevap: br

 $|SU|$ kaç brdir?

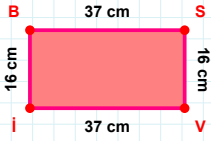
- ☐ 9 br
☐ 10 br
☐ 11 br

SORU: Aşağıdaki geometrik şekillerle ilgili soruları cevaplayınız.



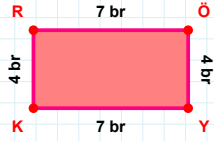
|AÜ| kaç brdir?

- ☐ 60 br
☐ 61 br
☐ 62 br



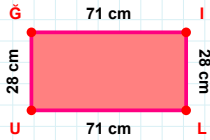
|İV| kaç cmdir?

- ☐ 36 cm
☐ 37 cm
☐ 38 cm



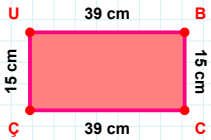
|ÖY| + |RÖ| =

Cevap: br



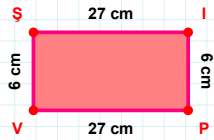
|Ğİ| + |İL| =

Cevap: cm



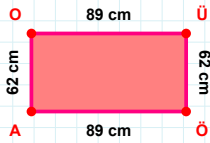
|ÇU| + |BC| =

Cevap: cm



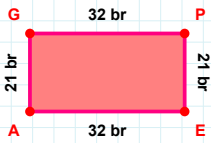
|İP| + |VS| =

Cevap: cm



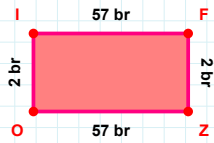
|ÖA| kaç cmdir?

- ☐ 88 cm
☐ 89 cm
☐ 90 cm



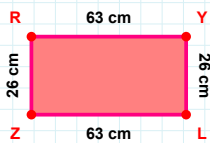
32 br hangi kenara aittir?

Kenar:



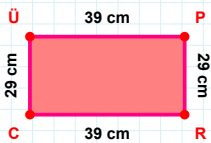
2 br hangi kenara aittir?

- ☐ ZO kenarı
☐ FO kenarı
☐ FZ kenarı



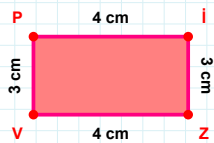
63 cm hangi kenara aittir?

Kenar:



29 cm hangi kenara aittir?

Kenar:



|Pİ| + |ZV| =

Cevap: cm

SÜREÇ ODAKLI DEĞERLENDİRME ÖLÇEĞİ

Doğru Sayısı: / 24

Öğretmen ilgili kutucuğu işaretler.

Geliştirilmeli (0-8)

İyi (9-14)

Çok İyi (15-20)

Mükemmel (21-24)

☐
☐
☐
☐

Hazırlayan:

Bu bölüme sınıfınızın ilgili kazanıma yönelik genel durumuna ilişkin gözlem ve izlenimlerinizi, öğrencilerinizin bu kazanımla ilgili öğrenme eksikliklerini ve bu eksikliklerin giderilmesi amacıyla yaptığınız/yapmayı planladığınız faaliyetleri not edebilirsiniz.

No	Adı - Soyadı	Toplam Puan	Değerlendirme
1			
2			
3			
4			
5			
6			
7			
8			
9			
10			
11			
12			
13			
14			
15			
16			
17			
18			
19			
20			
21			
22			
23			
24			
25			
26			
27			
28			
29			
30			
31			
32			
33			
34			
35			

Hazırlayan: