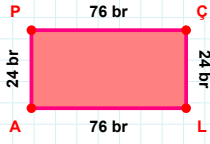
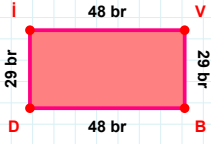


SORU: Aşağıdaki geometrik şekillerle ilgili soruları cevaplayınız.



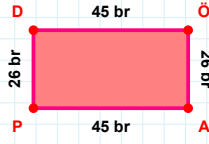
24 br hangi kenara aittir?

- ☐ PÇ kenarı
☐ PL kenarı
☐ ÇL kenarı



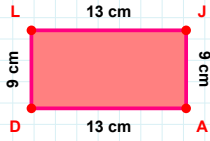
29 br hangi kenara aittir?

- ☐ İV kenarı
☐ DV kenarı
☐ VB kenarı



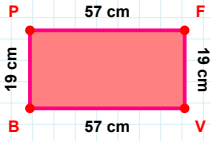
45 br hangi kenara aittir?

Kenar:



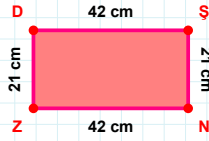
|AD| kaç cm'dir?

- ☐ 12 cm
☐ 13 cm
☐ 14 cm



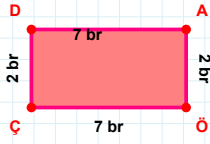
57 cm hangi kenara aittir?

Kenar:



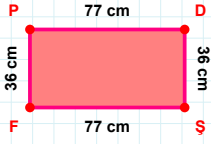
42 cm hangi kenara aittir?

Kenar:



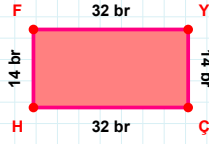
2 br hangi kenara aittir?

- ☐ ÖD kenarı
☐ ÇD kenarı
☐ AÖ kenarı



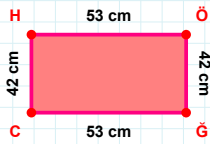
77 cm hangi kenara aittir?

Kenar:



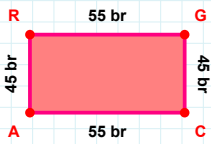
|ÇH| + |YÇ| =

Cevap: br



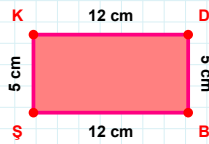
42 cm hangi kenara aittir?

- ☐ ÖĞ kenarı
☐ HÖ kenarı
☐ ĞH kenarı



45 br hangi kenara aittir?

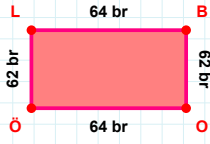
- ☐ CA kenarı
☐ AG kenarı
☐ RG kenarı



|DB| + |KD| =

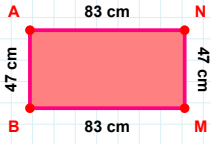
Cevap: cm

SORU: Aşağıdaki geometrik şekillerle ilgili soruları cevaplayınız.

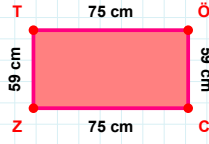


62 br hangi kenara aittir?

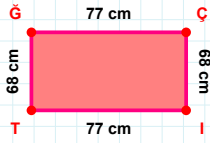
- ☐ ÖB kenarı
☐ LB kenarı
☐ ÖÖ kenarı

 $|AN| + |BA| = \dots$

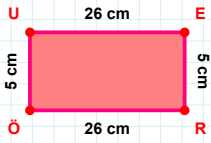
Cevap: cm

 $|CZ|$ kaç cmdir?

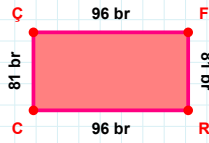
- ☐ 74 cm
☐ 75 cm
☐ 76 cm

 $|IT| + |Çİ| = \dots$

Cevap: cm

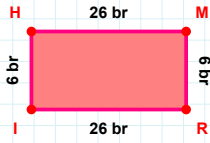
 $|UE|$ kaç cmdir?

- ☐ 25 cm
☐ 26 cm
☐ 27 cm

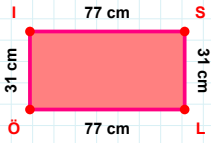


81 br hangi kenara aittir?

Kenar:

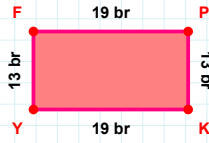
 $|IH| + |HM| = \dots$

Cevap: br



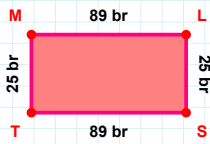
31 cm hangi kenara aittir?

Kenar:



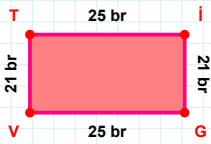
13 br hangi kenara aittir?

- ☐ KF kenarı
☐ FP kenarı
☐ KY kenarı

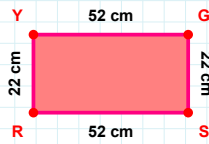


25 br hangi kenara aittir?

- ☐ LT kenarı
☐ ML kenarı
☐ TM kenarı

 $|Tİ| + |VT| = \dots$

Cevap: br



22 cm hangi kenara aittir?

Kenar:

SÜREÇ ODAKLI DEĞERLENDİRME ÖLÇEĞİ

Doğru Sayısı: / 24

Öğretmen ilgili kutucuğu işaretler.

Geliştirilmeli (0-8)

İyi (9-14)

Çok İyi (15-20)

Mükemmel (21-24)

☐☐☐☐

Hazırlayan:

Bu bölüme sınıfınızın ilgili kazanıma yönelik genel durumuna ilişkin gözlem ve izlenimlerinizi, öğrencilerinizin bu kazanımla ilgili öğrenme eksikliklerini ve bu eksikliklerin giderilmesi amacıyla yaptığınız/yapmayı planladığınız faaliyetleri not edebilirsiniz.

No	Adı - Soyadı	Toplam Puan	Değerlendirme
1			
2			
3			
4			
5			
6			
7			
8			
9			
10			
11			
12			
13			
14			
15			
16			
17			
18			
19			
20			
21			
22			
23			
24			
25			
26			
27			
28			
29			
30			
31			
32			
33			
34			
35			

Hazırlayan: