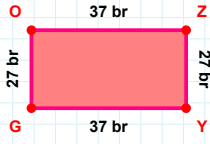
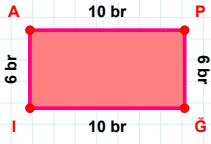


SORU: Aşağıdaki geometrik şekillerle ilgili soruları cevaplayınız.



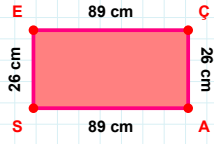
$|ZY| + |YG| = \dots$

Cevap: br



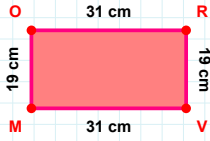
6 br hangi kenara aittir?

- ☐ ĞA kenarı
☐ PĞ kenarı
☐ ĞI kenarı



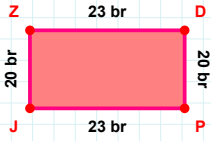
$|ÇA| + |SE| = \dots$

Cevap: cm



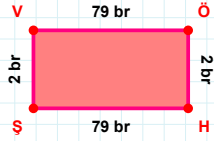
$|VM| + |OR| = \dots$

Cevap: cm



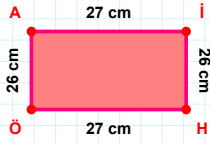
20 br hangi kenara aittir?

Kenar:



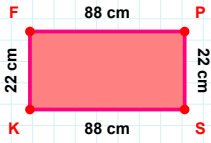
2 br hangi kenara aittir?

- ☐ VÖ kenarı
☐ ŞV kenarı
☐ ÖŞ kenarı



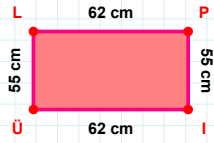
|AI| kaç cm'dir?

- ☐ 26 cm
☐ 27 cm
☐ 28 cm



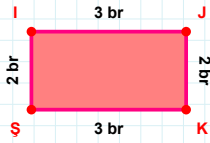
$|SK| + |FP| = \dots$

Cevap: cm



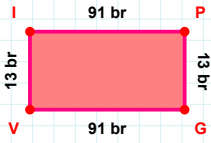
62 cm hangi kenara aittir?

Kenar:



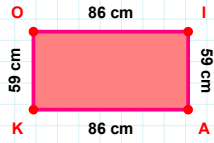
$|İJ| + |JK| = \dots$

Cevap: br



91 br hangi kenara aittir?

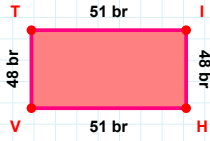
Kenar:



$|OI| + |AK| = \dots$

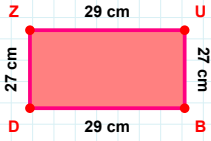
Cevap: cm

SORU: Aşağıdaki geometrik şekillerle ilgili soruları cevaplayınız.



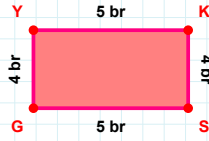
|VT| kaç brdir?

- ☐ 47 br
☐ 48 br
☐ 49 br



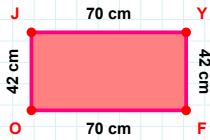
27 cm hangi kenara aittir?

- ☐ UB kenarı
☐ BD kenarı
☐ DU kenarı



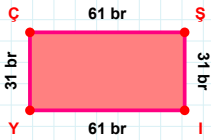
4 br hangi kenara aittir?

- ☐ GY kenarı
☐ KS kenarı
☐ KG kenarı



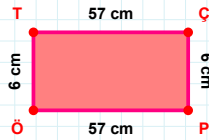
|OJ| + |FO| =

Cevap: cm



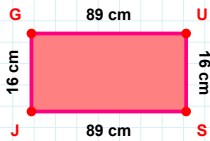
|ÇŞ| + |Şİ| =

Cevap: br



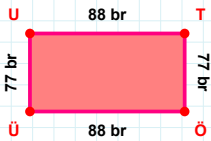
|ÖT| kaç cmdir?

- ☐ 5 cm
☐ 6 cm
☐ 7 cm



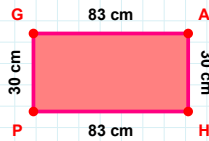
|JG| kaç cmdir?

- ☐ 15 cm
☐ 16 cm
☐ 17 cm



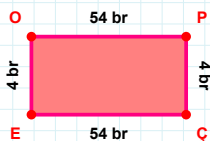
|ÜÜ| kaç brdir?

- ☐ 76 br
☐ 77 br
☐ 78 br



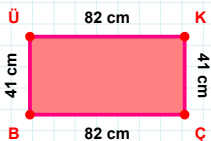
|GA| kaç cmdir?

- ☐ 82 cm
☐ 83 cm
☐ 84 cm



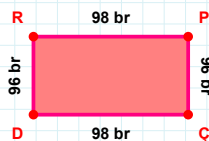
4 br hangi kenara aittir?

Kenar:



41 cm hangi kenara aittir?

- ☐ KÇ kenarı
☐ ÇB kenarı
☐ KB kenarı



|RP| + |PÇ| =

Cevap: br

SÜREÇ ODAKLI DEĞERLENDİRME ÖLÇEĞİ

Doğru Sayısı: / 24

Öğretmen ilgili kutucuğu işaretler.

Geliştirilmeli (0-8)

İyi (9-14)

Çok İyi (15-20)

Mükemmel (21-24)

☐
☐
☐
☐

Hazırlayan:

Bu bölüme sınıfınızın ilgili kazanıma yönelik genel durumuna ilişkin gözlem ve izlenimlerinizi, öğrencilerinizin bu kazanımla ilgili öğrenme eksikliklerini ve bu eksikliklerin giderilmesi amacıyla yaptığınız/yapmayı planladığınız faaliyetleri not edebilirsiniz.

No	Adı - Soyadı	Toplam Puan	Değerlendirme
1			
2			
3			
4			
5			
6			
7			
8			
9			
10			
11			
12			
13			
14			
15			
16			
17			
18			
19			
20			
21			
22			
23			
24			
25			
26			
27			
28			
29			
30			
31			
32			
33			
34			
35			

Hazırlayan: