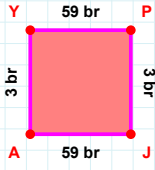
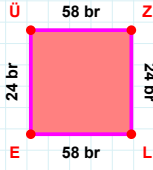
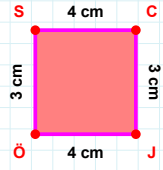
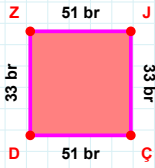


SORU: Aşağıdaki geometrik şekillerle ilgili soruları cevaplayınız.**3 br hangi kenara aittir?**

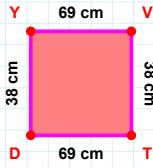
- ☐ AP kenarı
☐ AY kenarı
☐ JA kenarı

**24 br hangi kenara aittir?**

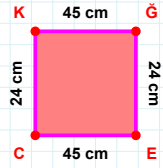
- ☐ EÜ kenarı
☐ ZE kenarı
☐ ÜZ kenarı

**|ÖS| + |CJ| =****Cevap:** cm**|ZJ| kaç brdir?**

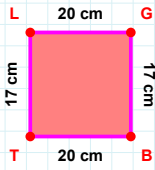
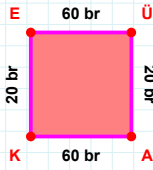
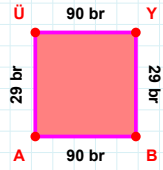
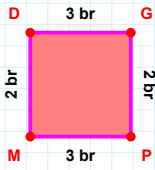
- ☐ 50 br
☐ 51 br
☐ 52 br

**|VT| kaç cmdir?**

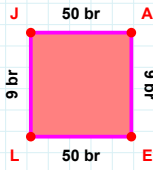
- ☐ 37 cm
☐ 38 cm
☐ 39 cm

**|ĞE| kaç cmdir?**

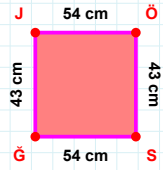
- ☐ 23 cm
☐ 24 cm
☐ 25 cm

**|LG| + |BT| =****Cevap:** cm**20 br hangi kenara aittir?****Kenar:****|ÜY| + |YB| =****Cevap:** br**2 br hangi kenara aittir?**

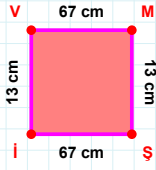
- ☐ PM kenarı
☐ DP kenarı
☐ MD kenarı

**9 br hangi kenara aittir?**

- ☐ JA kenarı
☐ EJ kenarı
☐ EL kenarı

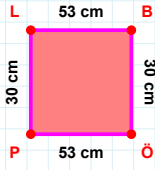
**43 cm hangi kenara aittir?**

- ☐ ÖS kenarı
☐ ÖĞ kenarı
☐ JÖ kenarı

SORU: Aşağıdaki geometrik şekillerle ilgili soruları cevaplayınız.

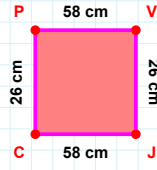
$|Vİ| + |MS| = \dots$

Cevap: cm



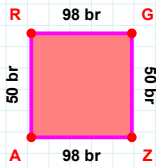
$|LB| + |PL| = \dots$

Cevap: cm



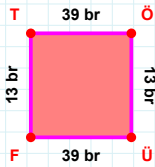
26 cm hangi kenara aittir?

Kenar:



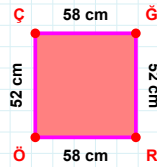
|GZ| kaç brdir?

- ☐ 49 br
☐ 50 br
☐ 51 br



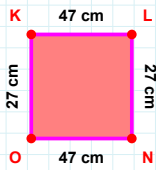
39 br hangi kenara aittir?

Kenar:



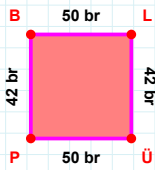
|ÖÇ| kaç cmdir?

- ☐ 51 cm
☐ 52 cm
☐ 53 cm



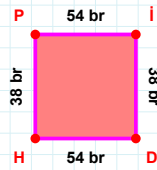
47 cm hangi kenara aittir?

Kenar:



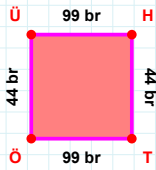
|LÜ| kaç brdir?

- ☐ 41 br
☐ 42 br
☐ 43 br



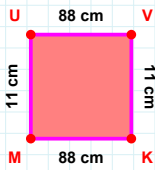
38 br hangi kenara aittir?

- ☐ DP kenarı
☐ İD kenarı
☐ HP kenarı



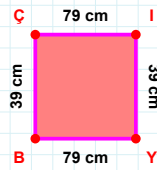
|ÜH| kaç brdir?

- ☐ 98 br
☐ 99 br
☐ 100 br



$|VK| + |MU| = \dots$

Cevap: cm



39 cm hangi kenara aittir?

- ☐ Çİ kenarı
☐ BÇ kenarı
☐ İB kenarı

SÜREÇ ODAKLI DEĞERLENDİRME ÖLÇEĞİ

Doğru Sayısı: / 24

Öğretmen ilgili kutucuğu işaretler.

Geliştirilmeli (0-8)

İyi (9-14)

Çok İyi (15-20)

Mükemmel (21-24)

☐☐☐☐

Hazırlayan:

Bu bölüme sınıfınızın ilgili kazanıma yönelik genel durumuna ilişkin gözlem ve izlenimlerinizi, öğrencilerinizin bu kazanımla ilgili öğrenme eksikliklerini ve bu eksikliklerin giderilmesi amacıyla yaptığınız/yapmayı planladığınız faaliyetleri not edebilirsiniz.

No	Adı - Soyadı	Toplam Puan	Değerlendirme
1			
2			
3			
4			
5			
6			
7			
8			
9			
10			
11			
12			
13			
14			
15			
16			
17			
18			
19			
20			
21			
22			
23			
24			
25			
26			
27			
28			
29			
30			
31			
32			
33			
34			
35			

Hazırlayan: