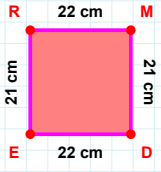
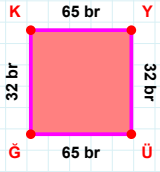


SORU: Aşağıdaki geometrik şekillerle ilgili soruları cevaplayınız.

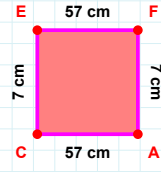
21 cm hangi kenara aittir?

- ☐ ER kenarı
☐ ME kenarı
☐ RM kenarı

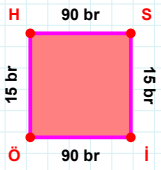


32 br hangi kenara aittir?

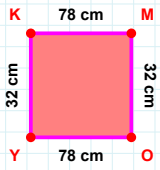
Kenar:

 $|CE| + |AC| = \dots$

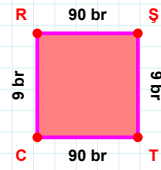
Cevap: cm

 $|HS| + |iÖ| = \dots$

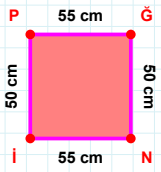
Cevap: br

 $|KM|$ kaç cm'dir?

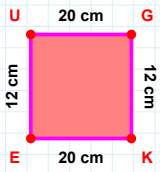
- ☐ 77 cm
☐ 78 cm
☐ 79 cm

 $|RŞ|$ kaç br'dir?

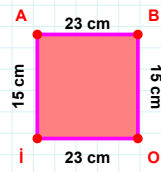
- ☐ 89 br
☐ 90 br
☐ 91 br

 $|İP| + |Nİ| = \dots$

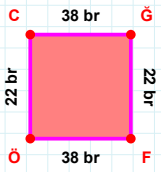
Cevap: cm

 $|İGK| + |UG| = \dots$

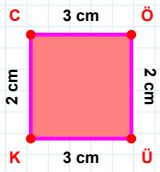
Cevap: cm

 $|İA| + |BO| = \dots$

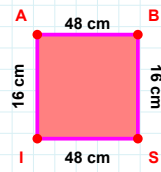
Cevap: cm

 $|ÖC| + |CĞ| = \dots$

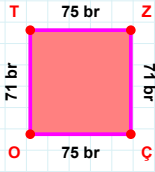
Cevap: br

 $|CÖ|$ kaç cm'dir?

- ☐ 2 cm
☐ 3 cm
☐ 4 cm

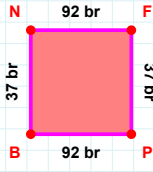
 $|AB|$ kaç cm'dir?

- ☐ 47 cm
☐ 48 cm
☐ 49 cm

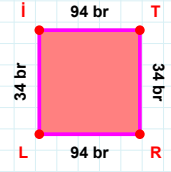
SORU: Aşağıdaki geometrik şekillerle ilgili soruları cevaplayınız.

75 br hangi kenara aittir?

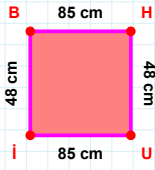
Kenar:

 $|BN| + |FP| = \dots$

Cevap: br

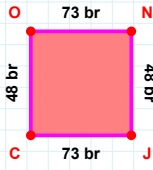
 $|LI|$ kaç brdir?

- ☐ 33 br
☐ 34 br
☐ 35 br

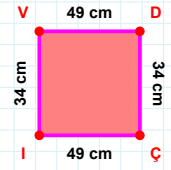


85 cm hangi kenara aittir?

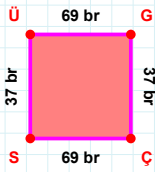
Kenar:

 $|CO| + |NJ| = \dots$

Cevap: br

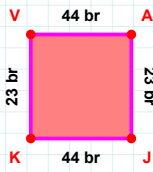
 $|DÇ|$ kaç cmdir?

- ☐ 33 cm
☐ 34 cm
☐ 35 cm

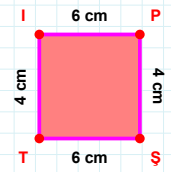


69 br hangi kenara aittir?

Kenar:

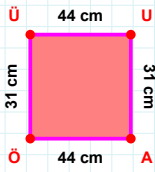
 $|JK| + |KV| = \dots$

Cevap: br

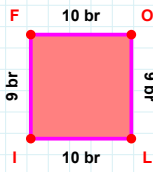


4 cm hangi kenara aittir?

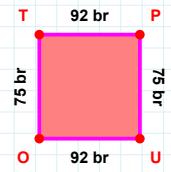
Kenar:

 $|UA| + |ÜU| = \dots$

Cevap: cm

 $|OL|$ kaç brdir?

- ☐ 8 br
☐ 9 br
☐ 10 br

 $|PU| + |OU| = \dots$

Cevap: br

SÜREÇ ODAKLI DEĞERLENDİRME ÖLÇEĞİ

Doğru Sayısı: / 24

Öğretmen ilgili kutucuğu işaretler.

Geliştirilmeli (0-8)

İyi (9-14)

Çok İyi (15-20)

Mükemmel (21-24)

☐☐☐☐

Hazırlayan:

Bu bölüme sınıfınızın ilgili kazanıma yönelik genel durumuna ilişkin gözlem ve izlenimlerinizi, öğrencilerinizin bu kazanımla ilgili öğrenme eksikliklerini ve bu eksikliklerin giderilmesi amacıyla yaptığınız/yapmayı planladığınız faaliyetleri not edebilirsiniz.

No	Adı - Soyadı	Toplam Puan	Değerlendirme
1			
2			
3			
4			
5			
6			
7			
8			
9			
10			
11			
12			
13			
14			
15			
16			
17			
18			
19			
20			
21			
22			
23			
24			
25			
26			
27			
28			
29			
30			
31			
32			
33			
34			
35			

Hazırlayan: