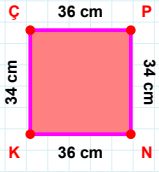
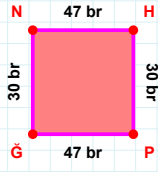
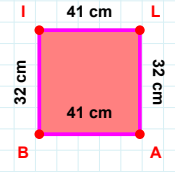
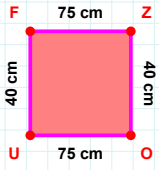


**SORU:** Aşağıdaki geometrik şekillerle ilgili soruları cevaplayınız.**34 cm hangi kenara aittir?**

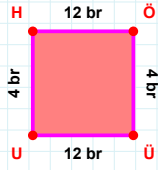
- ☐ KP kenarı  
☐ NK kenarı  
☐ KÇ kenarı

**|NH| + |PĞ| = ....****Cevap:** ..... br**32 cm hangi kenara aittir?**

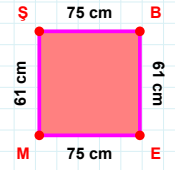
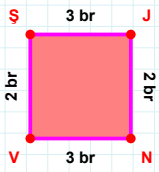
- ☐ AB kenarı  
☐ LA kenarı  
☐ LB kenarı

**|FZ| kaç cmdir?**

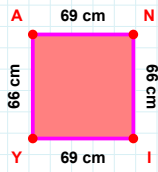
- ☐ 74 cm  
☐ 75 cm  
☐ 76 cm

**|ÖÜ| kaç brdir?**

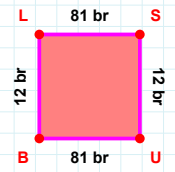
- ☐ 3 br  
☐ 4 br  
☐ 5 br

**|EM| + |MŞ| = ....****Cevap:** ..... cm**|ŞJ| kaç brdir?**

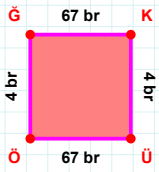
- ☐ 2 br  
☐ 3 br  
☐ 4 br

**|AN| kaç cmdir?**

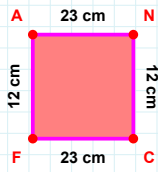
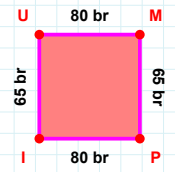
- ☐ 68 cm  
☐ 69 cm  
☐ 70 cm

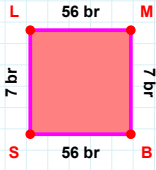
**12 br hangi kenara aittir?**

- ☐ SB kenarı  
☐ SU kenarı  
☐ UB kenarı

**|ÖĞ| kaç brdir?**

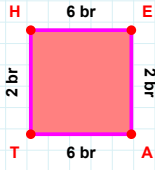
- ☐ 3 br  
☐ 4 br  
☐ 5 br

**12 cm hangi kenara aittir?****Kenar:** .....**65 br hangi kenara aittir?****Kenar:** .....

**SORU:** Aşağıdaki geometrik şekillerle ilgili soruları cevaplayınız.

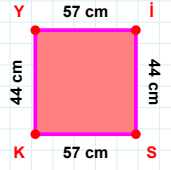
|BS| kaç brdir?

- ☐ 55 br  
☐ 56 br  
☐ 57 br



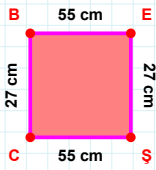
|TH| + |AT| = ....

Cevap: ..... br



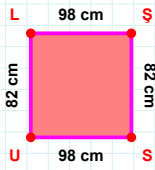
|İS| kaç cmdir?

- ☐ 43 cm  
☐ 44 cm  
☐ 45 cm



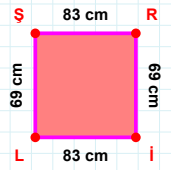
|EŞ| + |CB| = ....

Cevap: ..... cm



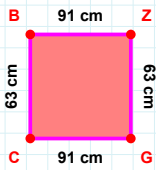
|UL| + |SU| = ....

Cevap: ..... cm



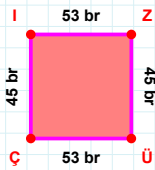
|İL| kaç cmdir?

- ☐ 82 cm  
☐ 83 cm  
☐ 84 cm



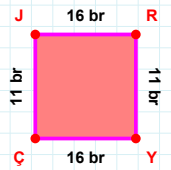
|CB| kaç cmdir?

- ☐ 62 cm  
☐ 63 cm  
☐ 64 cm



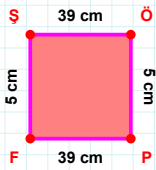
45 br hangi kenara aittir?

Kenar: .....



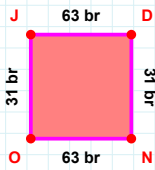
|ÇJ| kaç brdir?

- ☐ 10 br  
☐ 11 br  
☐ 12 br



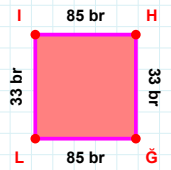
|FŞ| kaç cmdir?

- ☐ 4 cm  
☐ 5 cm  
☐ 6 cm



31 br hangi kenara aittir?

Kenar: .....



|ĞL| + |LI| = ....

Cevap: ..... br

## SÜREÇ ODAKLI DEĞERLENDİRME ÖLÇEĞİ

Doğru Sayısı: ..... / 24

Öğretmen ilgili kutucuğu işaretler.

Geliştirilmeli (0-8)

İyi (9-14)

Çok İyi (15-20)

Mükemmel (21-24)

☐☐☐☐

Hazırlayan: .....

Bu bölüme sınıfınızın ilgili kazanıma yönelik genel durumuna ilişkin gözlem ve izlenimlerinizi, öğrencilerinizin bu kazanımla ilgili öğrenme eksikliklerini ve bu eksikliklerin giderilmesi amacıyla yaptığınız/yapmayı planladığınız faaliyetleri not edebilirsiniz.

No	Adı - Soyadı	Toplam Puan	Değerlendirme
1			
2			
3			
4			
5			
6			
7			
8			
9			
10			
11			
12			
13			
14			
15			
16			
17			
18			
19			
20			
21			
22			
23			
24			
25			
26			
27			
28			
29			
30			
31			
32			
33			
34			
35			

Hazırlayan: .....