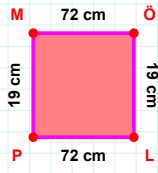
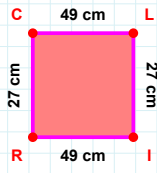


**SORU:** Aşağıdaki geometrik şekillerle ilgili soruları cevaplayınız.

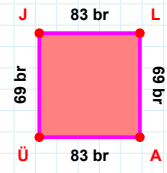
19 cm hangi kenara aittir?

- ☐ MÖ kenarı  
☐ PM kenarı  
☐ ÖP kenarı



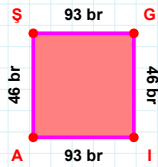
|IR| kaç cm'dir?

- ☐ 48 cm  
☐ 49 cm  
☐ 50 cm



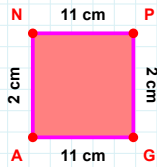
69 br hangi kenara aittir?

- ☐ AJ kenarı  
☐ AÜ kenarı  
☐ JL kenarı



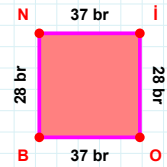
93 br hangi kenara aittir?

Kenar: .....



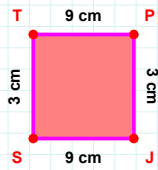
|NP| + |GA| = ....

Cevap: ..... cm



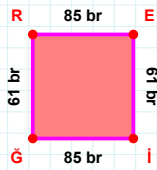
28 br hangi kenara aittir?

- ☐ Nİ kenarı  
☐ NO kenarı  
☐ BN kenarı



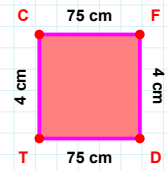
3 cm hangi kenara aittir?

- ☐ TP kenarı  
☐ PJ kenarı  
☐ TJ kenarı



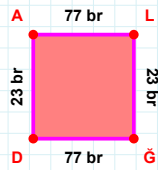
|ĞR| kaç br'dir?

- ☐ 60 br  
☐ 61 br  
☐ 62 br



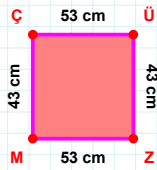
|FD| + |CF| = ....

Cevap: ..... cm



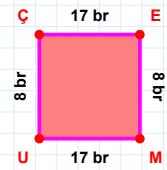
|LĞ| + |AL| = ....

Cevap: ..... br



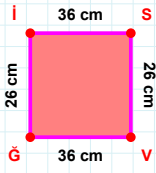
43 cm hangi kenara aittir?

Kenar: .....

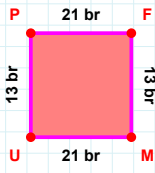


8 br hangi kenara aittir?

Kenar: .....

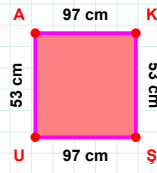
**SORU:** Aşağıdaki geometrik şekillerle ilgili soruları cevaplayınız. $|IS| + |VG| = \dots$ 

Cevap: ..... cm

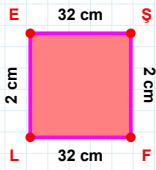


13 br hangi kenara aittir?

- ☐ FM kenarı  
☐ FU kenarı  
☐ UP kenarı

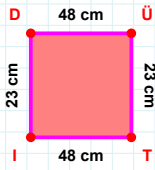
 $|UA|$  kaç cm'dir?

- ☐ 52 cm  
☐ 53 cm  
☐ 54 cm

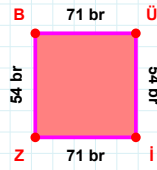


2 cm hangi kenara aittir?

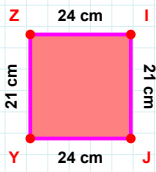
Kenar: .....

 $|DÜ|$  kaç cm'dir?

- ☐ 47 cm  
☐ 48 cm  
☐ 49 cm

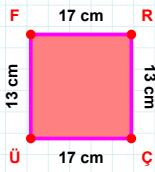
 $|BÜ|$  kaç br'dir?

- ☐ 70 br  
☐ 71 br  
☐ 72 br

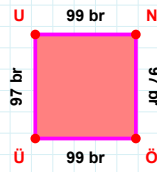


21 cm hangi kenara aittir?

Kenar: .....

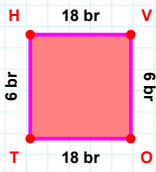
 $|FR| + |ÜF| = \dots$ 

Cevap: ..... cm



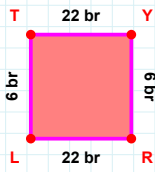
97 br hangi kenara aittir?

Kenar: .....



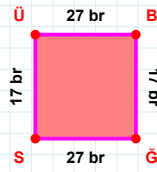
6 br hangi kenara aittir?

Kenar: .....



22 br hangi kenara aittir?

Kenar: .....



17 br hangi kenara aittir?

- ☐ ÜB kenarı  
☐ BĞ kenarı  
☐ BS kenarı

## SÜREÇ ODAKLI DEĞERLENDİRME ÖLÇEĞİ

Doğru Sayısı: ..... / 24

Öğretmen ilgili kutucuğu işaretler.

Geliştirilmeli (0-8)

İyi (9-14)

Çok İyi (15-20)

Mükemmel (21-24)

☐☐☐☐

Hazırlayan: .....

Bu bölüme sınıfınızın ilgili kazanıma yönelik genel durumuna ilişkin gözlem ve izlenimlerinizi, öğrencilerinizin bu kazanımla ilgili öğrenme eksikliklerini ve bu eksikliklerin giderilmesi amacıyla yaptığınız/yapmayı planladığınız faaliyetleri not edebilirsiniz.

No	Adı - Soyadı	Toplam Puan	Değerlendirme
1			
2			
3			
4			
5			
6			
7			
8			
9			
10			
11			
12			
13			
14			
15			
16			
17			
18			
19			
20			
21			
22			
23			
24			
25			
26			
27			
28			
29			
30			
31			
32			
33			
34			
35			

Hazırlayan: .....