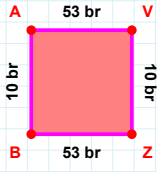
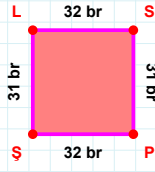


SORU: Aşağıdaki geometrik şekillerle ilgili soruları cevaplayınız.

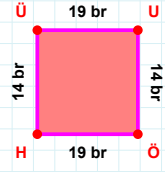
|BA| kaç brdir?

- ☐ 9 br
☐ 10 br
☐ 11 br



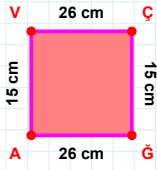
31 br hangi kenara aittir?

Kenar:



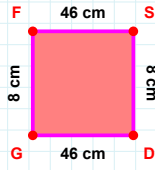
14 br hangi kenara aittir?

- ☐ HÜ kenarı
☐ ÖÜ kenarı
☐ ÜU kenarı



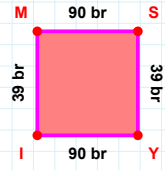
|AV| + |ÇĞ| =

Cevap: cm



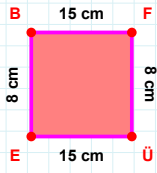
8 cm hangi kenara aittir?

- ☐ DG kenarı
☐ GS kenarı
☐ FS kenarı



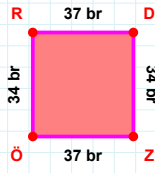
39 br hangi kenara aittir?

Kenar:



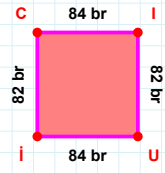
8 cm hangi kenara aittir?

- ☐ ÜB kenarı
☐ BF kenarı
☐ ÜE kenarı



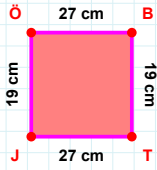
34 br hangi kenara aittir?

- ☐ ÖR kenarı
☐ RD kenarı
☐ RZ kenarı



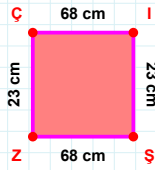
|Cİ| + |İU| =

Cevap: br



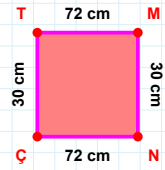
19 cm hangi kenara aittir?

- ☐ BJ kenarı
☐ JÖ kenarı
☐ ÖB kenarı



|ZÇ| + |İŞ| =

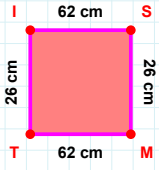
Cevap: cm



|NÇ| + |TM| =

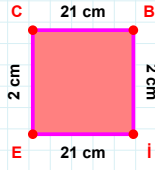
Cevap: cm

SORU: Aşağıdaki geometrik şekillerle ilgili soruları cevaplayınız.



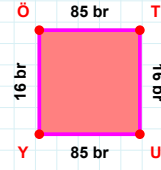
|SM| + |IS| =

Cevap: cm



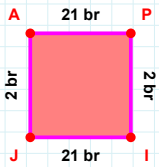
|Bİ| kaç cm'dir?

- ☐ 1 cm
☐ 2 cm
☐ 3 cm



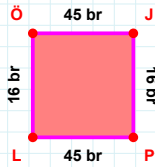
16 br hangi kenara aittir?

- ☐ ÖU kenarı
☐ UY kenarı
☐ TU kenarı



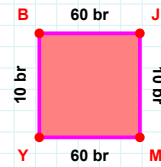
|IJ| kaç br'dir?

- ☐ 20 br
☐ 21 br
☐ 22 br



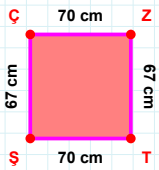
|LÖ| kaç br'dir?

- ☐ 15 br
☐ 16 br
☐ 17 br



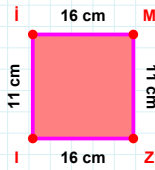
10 br hangi kenara aittir?

- ☐ YB kenarı
☐ BJ kenarı
☐ YJ kenarı



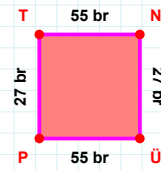
70 cm hangi kenara aittir?

Kenar:



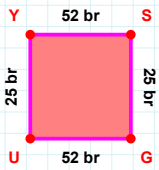
11 cm hangi kenara aittir?

Kenar:



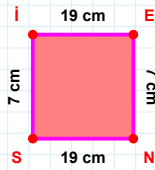
|NÜ| + |ÜP| =

Cevap: br



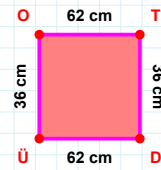
25 br hangi kenara aittir?

- ☐ YG kenarı
☐ YS kenarı
☐ GU kenarı



19 cm hangi kenara aittir?

Kenar:



36 cm hangi kenara aittir?

- ☐ ÜO kenarı
☐ TÜ kenarı
☐ DÜ kenarı

SÜREÇ ODAKLI DEĞERLENDİRME ÖLÇEĞİ

Doğru Sayısı: / 24

Öğretmen ilgili kutucuğu işaretler.

Geliştirilmeli (0-8)

İyi (9-14)

Çok İyi (15-20)

Mükemmel (21-24)

☐☐☐☐

Hazırlayan:

Bu bölüme sınıfınızın ilgili kazanıma yönelik genel durumuna ilişkin gözlem ve izlenimlerinizi, öğrencilerinizin bu kazanımla ilgili öğrenme eksikliklerini ve bu eksikliklerin giderilmesi amacıyla yaptığınız/yapmayı planladığınız faaliyetleri not edebilirsiniz.

No	Adı - Soyadı	Toplam Puan	Değerlendirme
1			
2			
3			
4			
5			
6			
7			
8			
9			
10			
11			
12			
13			
14			
15			
16			
17			
18			
19			
20			
21			
22			
23			
24			
25			
26			
27			
28			
29			
30			
31			
32			
33			
34			
35			

Hazırlayan: