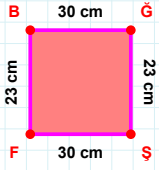
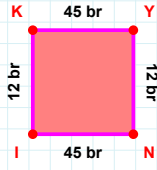
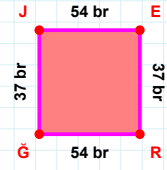


SORU: Aşağıdaki geometrik şekillerle ilgili soruları cevaplayınız.**23 cm hangi kenara aittir?**

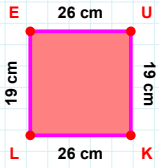
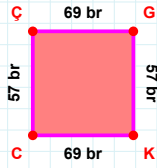
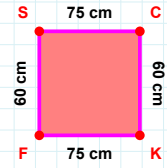
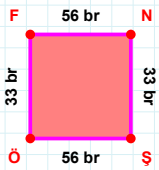
- ☐ GF kenarı
☐ BĞ kenarı
☐ FB kenarı

**12 br hangi kenara aittir?**

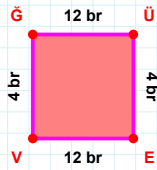
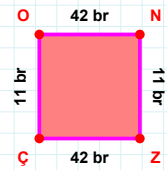
- ☐ KN kenarı
☐ YN kenarı
☐ NI kenarı

**37 br hangi kenara aittir?**

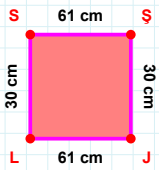
- ☐ JE kenarı
☐ RĞ kenarı
☐ GE kenarı

**|LE| + |EU| =****Cevap: cm****|KC| + |ÇG| =****Cevap: br****75 cm hangi kenara aittir?****Kenar:****|NS| kaç brdir?**

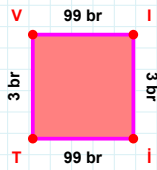
- ☐ 32 br
☐ 33 br
☐ 34 br

**12 br hangi kenara aittir?****Kenar:****11 br hangi kenara aittir?**

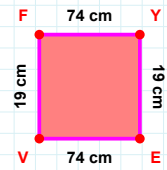
- ☐ ON kenarı
☐ ZO kenarı
☐ ZÇ kenarı

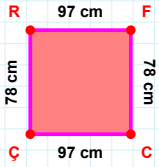
**|SŞ| kaç cmdir?**

- ☐ 60 cm
☐ 61 cm
☐ 62 cm

**3 br hangi kenara aittir?**

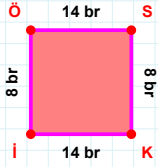
- ☐ IT kenarı
☐ VI kenarı
☐ İT kenarı

**|YE| + |FY| =****Cevap: cm**

SORU: Aşağıdaki geometrik şekillerle ilgili soruları cevaplayınız.

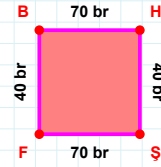
78 cm hangi kenara aittir?

- ☐ CÇ kenarı
☐ ÇF kenarı
☐ FC kenarı



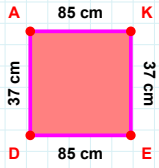
8 br hangi kenara aittir?

Kenar:



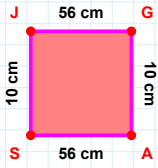
40 br hangi kenara aittir?

- ☐ ŞF kenarı
☐ FB kenarı
☐ HF kenarı



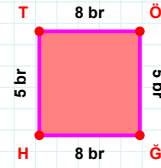
37 cm hangi kenara aittir?

- ☐ AK kenarı
☐ ED kenarı
☐ EA kenarı

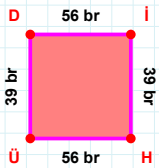


56 cm hangi kenara aittir?

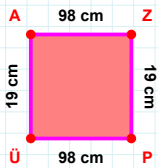
Kenar:

 $|GH| + |ÖĞ| = \dots$

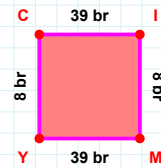
Cevap: br

 $|IH|$ kaç brdir?

- ☐ 38 br
☐ 39 br
☐ 40 br

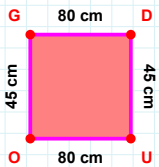
 $|ÜA| + |AZ| = \dots$

Cevap: cm

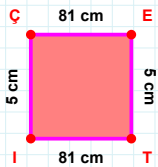


39 br hangi kenara aittir?

Kenar:

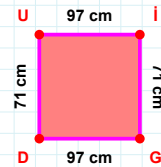
 $|UO|$ kaç cmdir?

- ☐ 79 cm
☐ 80 cm
☐ 81 cm



5 cm hangi kenara aittir?

- ☐ TI kenarı
☐ EI kenarı
☐ ÇE kenarı



71 cm hangi kenara aittir?

- ☐ İG kenarı
☐ GU kenarı
☐ DU kenarı

SÜREÇ ODAKLI DEĞERLENDİRME ÖLÇEĞİ

Doğru Sayısı: / 24

Öğretmen ilgili kutucuğu işaretler.

Geliştirilmeli (0-8)

İyi (9-14)

Çok İyi (15-20)

Mükemmel (21-24)

☐☐☐☐

Hazırlayan:

Bu bölüme sınıfınızın ilgili kazanıma yönelik genel durumuna ilişkin gözlem ve izlenimlerinizi, öğrencilerinizin bu kazanımla ilgili öğrenme eksikliklerini ve bu eksikliklerin giderilmesi amacıyla yaptığınız/yapmayı planladığınız faaliyetleri not edebilirsiniz.

No	Adı - Soyadı	Toplam Puan	Değerlendirme
1			
2			
3			
4			
5			
6			
7			
8			
9			
10			
11			
12			
13			
14			
15			
16			
17			
18			
19			
20			
21			
22			
23			
24			
25			
26			
27			
28			
29			
30			
31			
32			
33			
34			
35			

Hazırlayan: