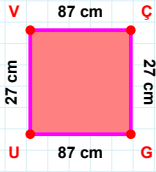
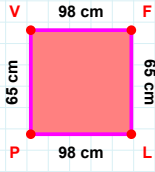
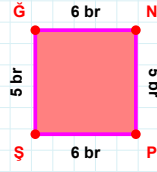
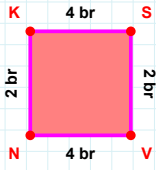


**SORU:** Aşağıdaki geometrik şekillerle ilgili soruları cevaplayınız.**27 cm hangi kenara aittir?**

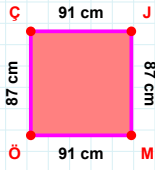
- ☐ GU kenarı  
☐ GV kenarı  
☐ UV kenarı

 **$|PV| + |LP| = \dots$** **Cevap:** ..... cm**5 br hangi kenara aittir?**

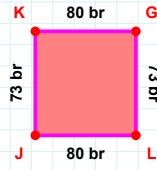
- ☐ ĞN kenarı  
☐ NP kenarı  
☐ NŞ kenarı

 **$|NK|$  kaç brdir?**

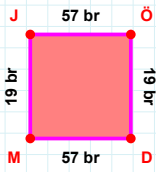
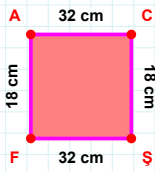
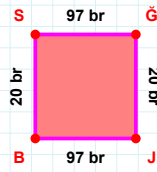
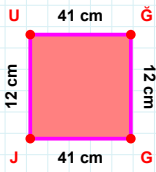
- ☐ 1 br  
☐ 2 br  
☐ 3 br

 **$|ÖÇ|$  kaç cmdir?**

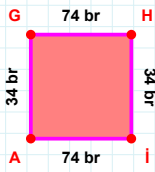
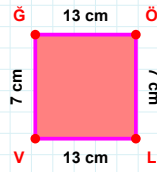
- ☐ 86 cm  
☐ 87 cm  
☐ 88 cm

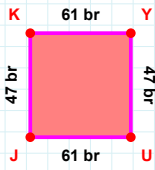
 **$|LJ|$  kaç brdir?**

- ☐ 79 br  
☐ 80 br  
☐ 81 br

**19 br hangi kenara aittir?****Kenar:** ..... **$|AC| + |ŞF| = \dots$** **Cevap:** ..... cm**20 br hangi kenara aittir?****Kenar:** ..... **$|GJ|$  kaç cmdir?**

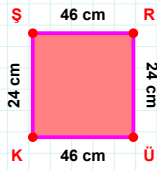
- ☐ 40 cm  
☐ 41 cm  
☐ 42 cm

 **$|AG| + |GH| = \dots$** **Cevap:** ..... br**13 cm hangi kenara aittir?****Kenar:** .....

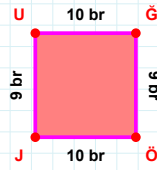
**SORU:** Aşağıdaki geometrik şekillerle ilgili soruları cevaplayınız.

47 br hangi kenara aittir?

- ☐ UK kenarı  
☐ KY kenarı  
☐ JK kenarı

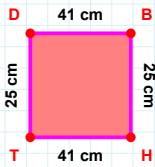
 $|ÜK| + |KŞ| = \dots$ 

Cevap: ..... cm

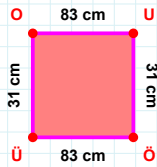


9 br hangi kenara aittir?

- ☐ ĞÖ kenarı  
☐ UĞ kenarı  
☐ JĞ kenarı

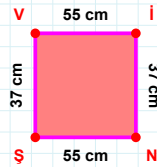
 $|DB| + |HT| = \dots$ 

Cevap: ..... cm



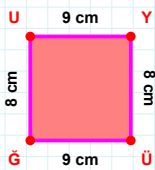
31 cm hangi kenara aittir?

- ☐ ÖÜ kenarı  
☐ ÜO kenarı  
☐ OÖ kenarı

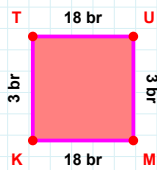


37 cm hangi kenara aittir?

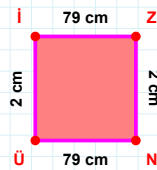
Kenar: .....

 $|ĞÜ|$  kaç cm'dir?

- ☐ 7 cm  
☐ 8 cm  
☐ 9 cm

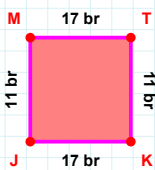
 $|UM| + |KT| = \dots$ 

Cevap: ..... br

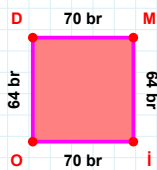


2 cm hangi kenara aittir?

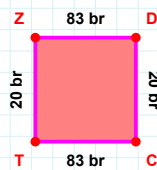
- ☐ İN kenarı  
☐ Üİ kenarı  
☐ NÜ kenarı

 $|KJ| + |TK| = \dots$ 

Cevap: ..... br

 $|OD| + |İO| = \dots$ 

Cevap: ..... br



20 br hangi kenara aittir?

- ☐ CT kenarı  
☐ CZ kenarı  
☐ DC kenarı

## SÜREÇ ODAKLI DEĞERLENDİRME ÖLÇEĞİ

Doğru Sayısı: ..... / 24

Öğretmen ilgili kutucuğu işaretler.

Geliştirilmeli (0-8)

İyi (9-14)

Çok İyi (15-20)

Mükemmel (21-24)

☐☐☐☐

Hazırlayan: .....

Bu bölüme sınıfınızın ilgili kazanıma yönelik genel durumuna ilişkin gözlem ve izlenimlerinizi, öğrencilerinizin bu kazanımla ilgili öğrenme eksikliklerini ve bu eksikliklerin giderilmesi amacıyla yaptığınız/yapmayı planladığınız faaliyetleri not edebilirsiniz.

No	Adı - Soyadı	Toplam Puan	Değerlendirme
1			
2			
3			
4			
5			
6			
7			
8			
9			
10			
11			
12			
13			
14			
15			
16			
17			
18			
19			
20			
21			
22			
23			
24			
25			
26			
27			
28			
29			
30			
31			
32			
33			
34			
35			

Hazırlayan: .....