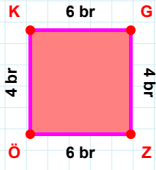
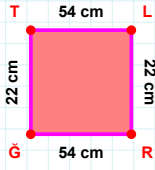


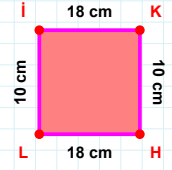
SORU: Aşağıdaki geometrik şekillerle ilgili soruları cevaplayınız.

4 br hangi kenara aittir?

Kenar:

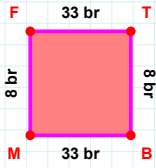
 $|TL| + |LR| = \dots$

Cevap: cm

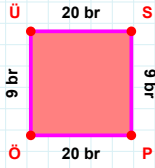


10 cm hangi kenara aittir?

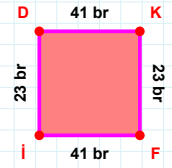
- ☐ KH kenarı
☐ HL kenarı
☐ HI kenarı

 $|MF|$ kaç brdir?

- ☐ 7 br
☐ 8 br
☐ 9 br

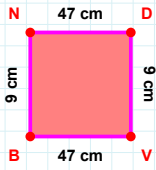
 $|PÖ|$ kaç brdir?

- ☐ 19 br
☐ 20 br
☐ 21 br

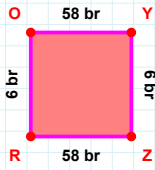


23 br hangi kenara aittir?

- ☐ KF kenarı
☐ İK kenarı
☐ FI kenarı

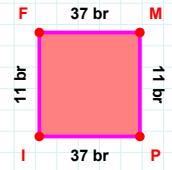
 $|BN| + |VB| = \dots$

Cevap: cm

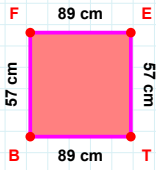


6 br hangi kenara aittir?

Kenar:

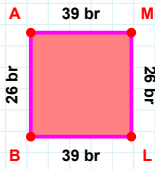
 $|PI|$ kaç brdir?

- ☐ 36 br
☐ 37 br
☐ 38 br

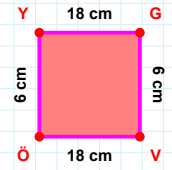


57 cm hangi kenara aittir?

- ☐ FE kenarı
☐ TB kenarı
☐ TF kenarı

 $|BA| + |LB| = \dots$

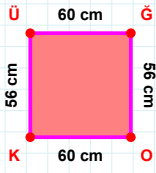
Cevap: br



6 cm hangi kenara aittir?

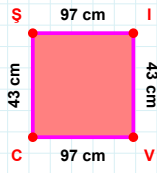
Kenar:

SORU: Aşağıdaki geometrik şekillerle ilgili soruları cevaplayınız.

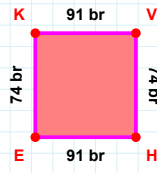


60 cm hangi kenara aittir?

Kenar:

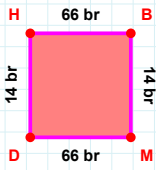
 $|CS| + |IV| = \dots$

Cevap: cm



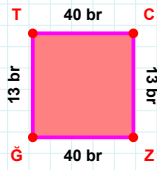
74 br hangi kenara aittir?

- ☐ EK kenarı
☐ EV kenarı
☐ HE kenarı

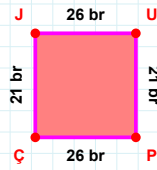


14 br hangi kenara aittir?

Kenar:

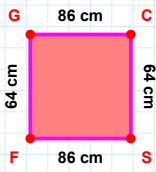
 $|GT| + |TC| = \dots$

Cevap: br



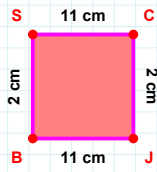
21 br hangi kenara aittir?

Kenar:

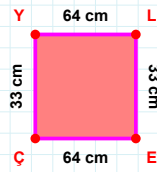


86 cm hangi kenara aittir?

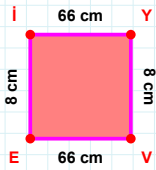
Kenar:

 $|BS|$ kaç cm'dir?

- ☐ 1 cm
☐ 2 cm
☐ 3 cm

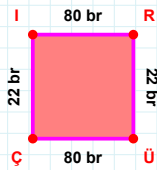
 $|LE|$ kaç cm'dir?

- ☐ 32 cm
☐ 33 cm
☐ 34 cm

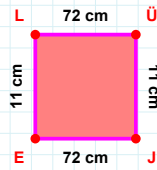


8 cm hangi kenara aittir?

Kenar:

 $|RÜ| + |Cİ| = \dots$

Cevap: br

 $|JE|$ kaç cm'dir?

- ☐ 71 cm
☐ 72 cm
☐ 73 cm

SÜREÇ ODAKLI DEĞERLENDİRME ÖLÇEĞİ

Doğru Sayısı: / 24

Öğretmen ilgili kutucuğu işaretler.

Geliştirilmeli (0-8)

İyi (9-14)

Çok İyi (15-20)

Mükemmel (21-24)

☐☐☐☐

Hazırlayan:

Bu bölüme sınıfınızın ilgili kazanıma yönelik genel durumuna ilişkin gözlem ve izlenimlerinizi, öğrencilerinizin bu kazanımla ilgili öğrenme eksikliklerini ve bu eksikliklerin giderilmesi amacıyla yaptığınız/yapmayı planladığınız faaliyetleri not edebilirsiniz.

No	Adı - Soyadı	Toplam Puan	Değerlendirme
1			
2			
3			
4			
5			
6			
7			
8			
9			
10			
11			
12			
13			
14			
15			
16			
17			
18			
19			
20			
21			
22			
23			
24			
25			
26			
27			
28			
29			
30			
31			
32			
33			
34			
35			

Hazırlayan: