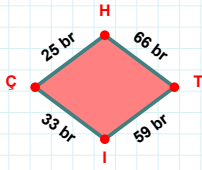
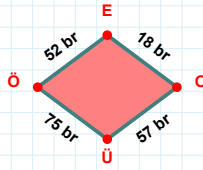


SORU: Aşağıdaki geometrik şekillerle ilgili soruları cevaplayınız.

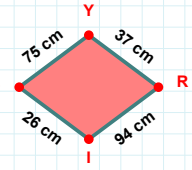
66 br hangi kenara aittir?

Kenar:



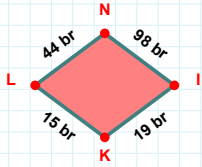
|ÖE| kaç brdir?

- ☐ 51 br
☐ 52 br
☐ 53 br



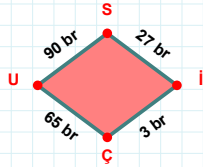
|YR| + |RI| =

Cevap: cm



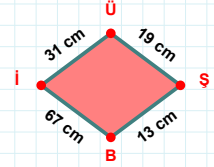
|NI| + |KL| =

Cevap: br



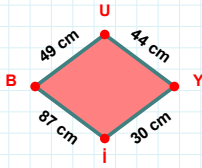
27 br hangi kenara aittir?

Kenar:



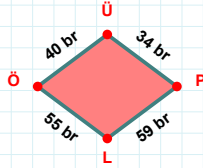
67 cm hangi kenara aittir?

Kenar:



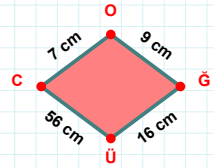
49 cm hangi kenara aittir?

- ☐ İU kenarı
☐ UY kenarı
☐ BU kenarı



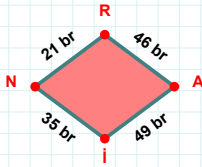
|ÖÜ| kaç brdir?

- ☐ 39 br
☐ 40 br
☐ 41 br



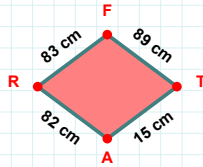
|CÖ| kaç cmdir?

- ☐ 6 cm
☐ 7 cm
☐ 8 cm



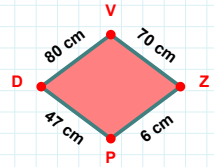
|AI| kaç brdir?

- ☐ 48 br
☐ 49 br
☐ 50 br



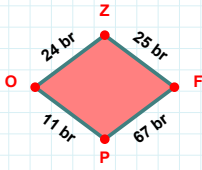
83 cm hangi kenara aittir?

- ☐ TA kenarı
☐ RT kenarı
☐ AR kenarı



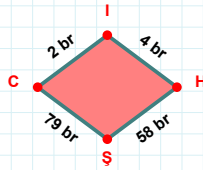
80 cm hangi kenara aittir?

Kenar:

SORU: Aşağıdaki geometrik şekillerle ilgili soruları cevaplayınız.

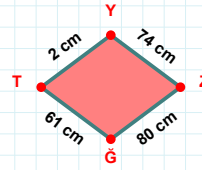
24 br hangi kenara aittir?

- ☐ FO kenarı
☐ OZ kenarı
☐ ZF kenarı

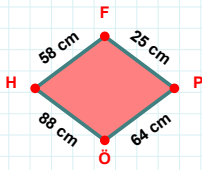


2 br hangi kenara aittir?

Kenar:

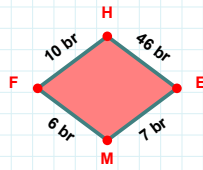
 $|TY| + |YZ| = \dots$

Cevap: cm



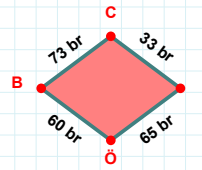
58 cm hangi kenara aittir?

- ☐ HF kenarı
☐ ÖH kenarı
☐ ÖF kenarı

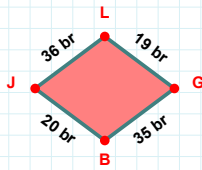


10 br hangi kenara aittir?

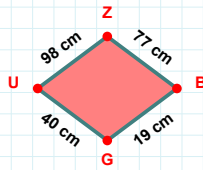
- ☐ HM kenarı
☐ MF kenarı
☐ HE kenarı

 $|IÖ|$ kaç brdir?

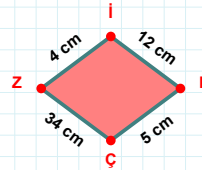
- ☐ 64 br
☐ 65 br
☐ 66 br

 $|JL|$ kaç brdir?

- ☐ 35 br
☐ 36 br
☐ 37 br

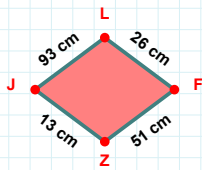
 $|GU| + |BG| = \dots$

Cevap: cm



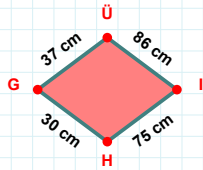
34 cm hangi kenara aittir?

Kenar:

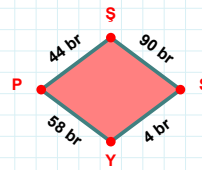


51 cm hangi kenara aittir?

Kenar:

 $|GÜ| + |HG| = \dots$

Cevap: cm

 $|YP|$ kaç brdir?

- ☐ 57 br
☐ 58 br
☐ 59 br

SÜREÇ ODAKLI DEĞERLENDİRME ÖLÇEĞİ

Doğru Sayısı: / 24

Öğretmen ilgili kutucuğu işaretler.

Geliştirilmeli (0-8)

İyi (9-14)

Çok İyi (15-20)

Mükemmel (21-24)

☐☐☐☐

Hazırlayan:

Bu bölüme sınıfınızın ilgili kazanıma yönelik genel durumuna ilişkin gözlem ve izlenimlerinizi, öğrencilerinizin bu kazanımla ilgili öğrenme eksikliklerini ve bu eksikliklerin giderilmesi amacıyla yaptığınız/yapmayı planladığınız faaliyetleri not edebilirsiniz.

No	Adı - Soyadı	Toplam Puan	Değerlendirme
1			
2			
3			
4			
5			
6			
7			
8			
9			
10			
11			
12			
13			
14			
15			
16			
17			
18			
19			
20			
21			
22			
23			
24			
25			
26			
27			
28			
29			
30			
31			
32			
33			
34			
35			

Hazırlayan: