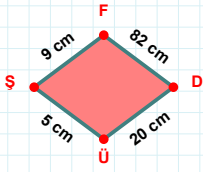
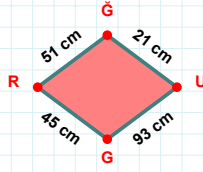


**SORU:** Aşağıdaki geometrik şekillerle ilgili soruları cevaplayınız.

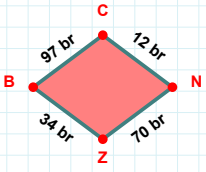
9 cm hangi kenara aittir?

- ☐ ŞD kenarı  
☐ ÜŞ kenarı  
☐ DÜ kenarı



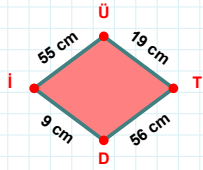
45 cm hangi kenara aittir?

Kenar: .....



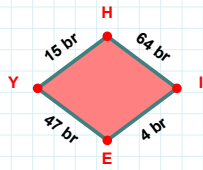
12 br hangi kenara aittir?

Kenar: .....

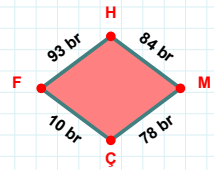


55 cm hangi kenara aittir?

- ☐ İÜ kenarı  
☐ DÜ kenarı  
☐ TD kenarı

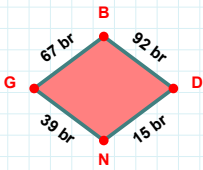
 $|EY| + |YH| = \dots$ 

Cevap: ..... br



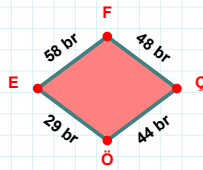
78 br hangi kenara aittir?

Kenar: .....

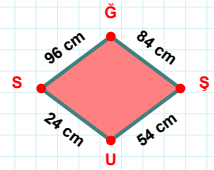


67 br hangi kenara aittir?

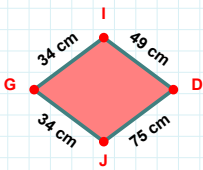
Kenar: .....

 $|ÇÖ| + |ÖE| = \dots$ 

Cevap: ..... br

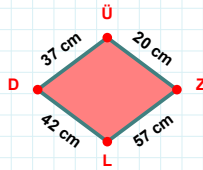
 $|GS|$  kaç cm'dir?

- ☐ 83 cm  
☐ 84 cm  
☐ 85 cm



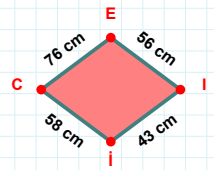
34 cm hangi kenara aittir?

Kenar: .....



57 cm hangi kenara aittir?

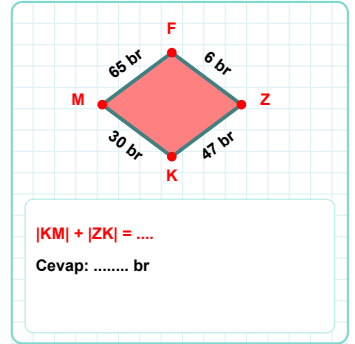
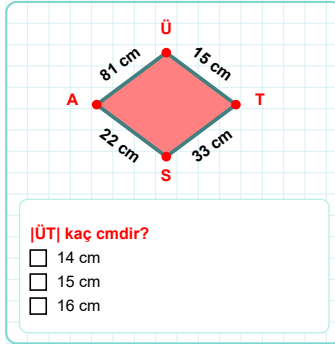
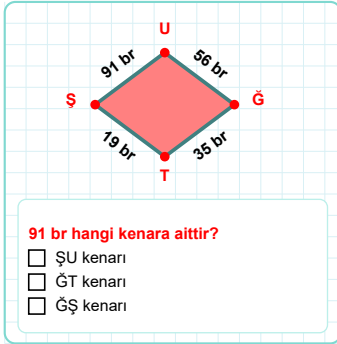
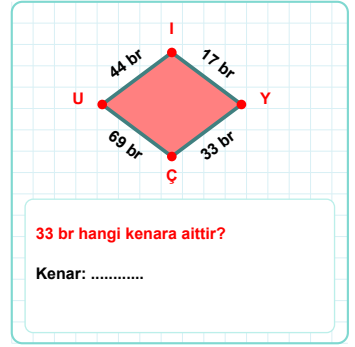
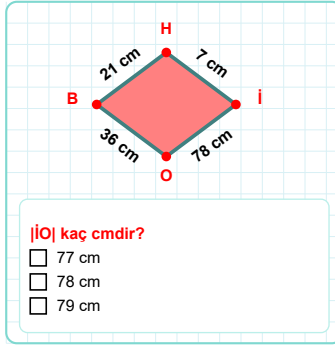
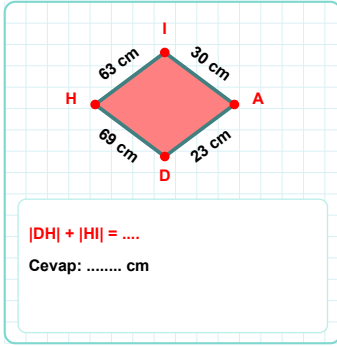
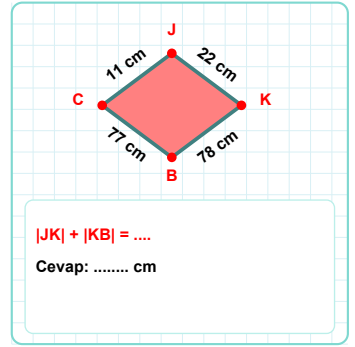
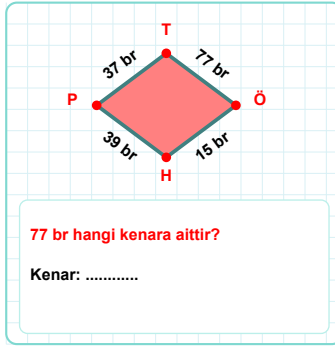
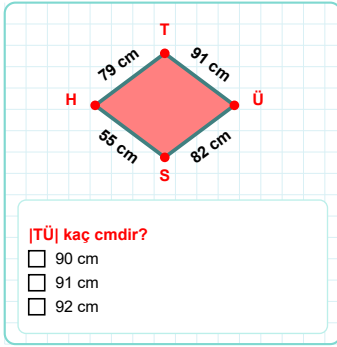
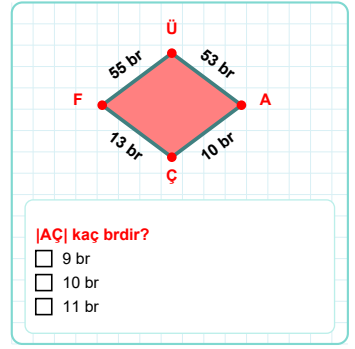
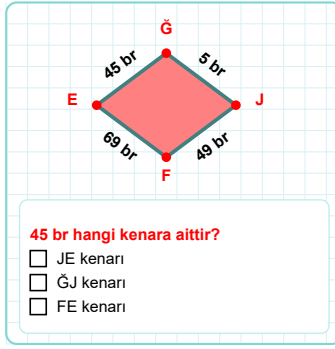
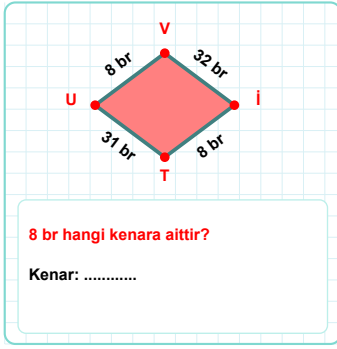
Kenar: .....



76 cm hangi kenara aittir?

Kenar: .....

**SORU:** Aşağıdaki geometrik şekillerle ilgili soruları cevaplayınız.



SÜREÇ ODAKLI DEĞERLENDİRME ÖLÇEĞİ

Doğru Sayısı: ..... / 24

Öğretmen ilgili kutucuğu işaretler.

Geliştirilmeli (0-8)

İyi (9-14)

Çok İyi (15-20)

Mükemmel (21-24)

☐☐☐☐

Hazırlayan: .....

Bu bölüme sınıfınızın ilgili kazanıma yönelik genel durumuna ilişkin gözlem ve izlenimlerinizi, öğrencilerinizin bu kazanımla ilgili öğrenme eksikliklerini ve bu eksikliklerin giderilmesi amacıyla yaptığınız/yapmayı planladığınız faaliyetleri not edebilirsiniz.

No	Adı - Soyadı	Toplam Puan	Değerlendirme
1			
2			
3			
4			
5			
6			
7			
8			
9			
10			
11			
12			
13			
14			
15			
16			
17			
18			
19			
20			
21			
22			
23			
24			
25			
26			
27			
28			
29			
30			
31			
32			
33			
34			
35			

Hazırlayan: .....