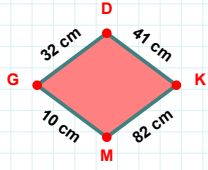
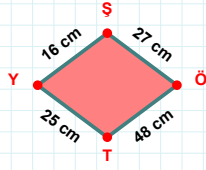


SORU: Aşağıdaki geometrik şekillerle ilgili soruları cevaplayınız.

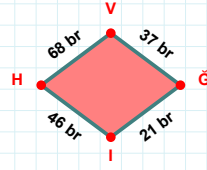
32 cm hangi kenara aittir?

- ☐ KG kenarı
☐ DK kenarı
☐ KM kenarı



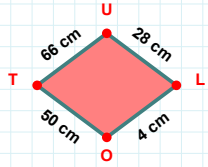
|ŞÖ| kaç cm'dir?

- ☐ 26 cm
☐ 27 cm
☐ 28 cm



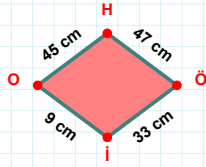
|VĞ| kaç br'dir?

- ☐ 36 br
☐ 37 br
☐ 38 br



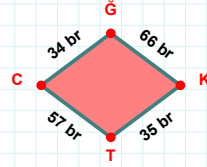
66 cm hangi kenara aittir?

- ☐ TU kenarı
☐ UO kenarı
☐ UL kenarı



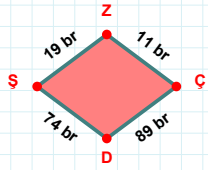
|OH| + |Öİ| =

Cevap: cm



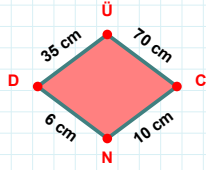
34 br hangi kenara aittir?

Kenar:



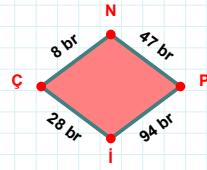
|DŞ| + |ŞZ| =

Cevap: br



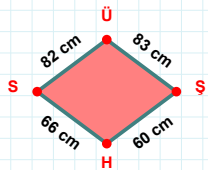
35 cm hangi kenara aittir?

Kenar:



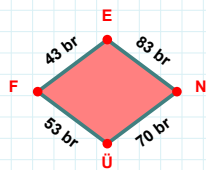
|ÇN| + |NP| =

Cevap: br



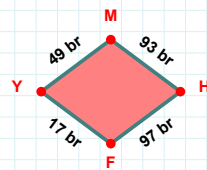
82 cm hangi kenara aittir?

Kenar:



43 br hangi kenara aittir?

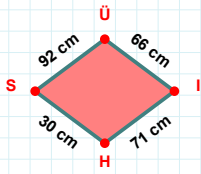
- ☐ NÜ kenarı
☐ FE kenarı
☐ FN kenarı



49 br hangi kenara aittir?

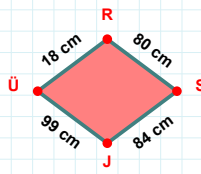
- ☐ FM kenarı
☐ HF kenarı
☐ YM kenarı

SORU: Aşağıdaki geometrik şekillerle ilgili soruları cevaplayınız.



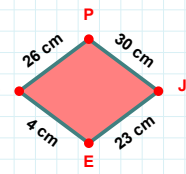
92 cm hangi kenara aittir?

- ☐ HÜ kenarı
☐ ÜI kenarı
☐ HS kenarı



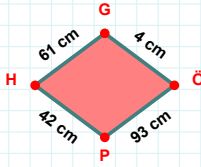
|RS| kaç cm'dir?

- ☐ 79 cm
☐ 80 cm
☐ 81 cm



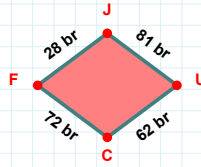
|EZ| kaç cm'dir?

- ☐ 3 cm
☐ 4 cm
☐ 5 cm



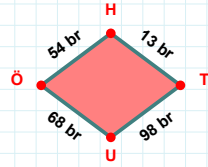
|ÖP| kaç cm'dir?

- ☐ 92 cm
☐ 93 cm
☐ 94 cm



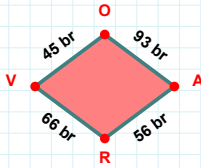
|FJ| kaç br'dir?

- ☐ 27 br
☐ 28 br
☐ 29 br



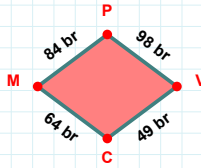
|UÖ| + |HT| =

Cevap: br



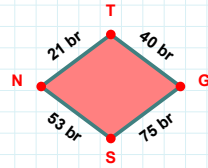
|AR| kaç br'dir?

- ☐ 55 br
☐ 56 br
☐ 57 br



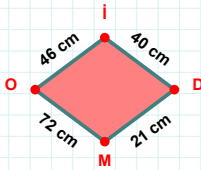
84 br hangi kenara aittir?

Kenar:



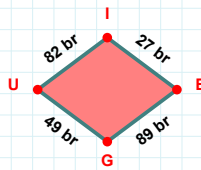
|SN| kaç br'dir?

- ☐ 52 br
☐ 53 br
☐ 54 br



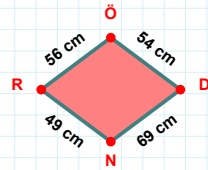
72 cm hangi kenara aittir?

Kenar:



|GU| kaç br'dir?

- ☐ 48 br
☐ 49 br
☐ 50 br



56 cm hangi kenara aittir?

- ☐ DR kenarı
☐ NR kenarı
☐ RÖ kenarı

SÜREÇ ODAKLI DEĞERLENDİRME ÖLÇEĞİ

Doğru Sayısı: / 24

Öğretmen ilgili kutucuğu işaretler.

Geliştirilmeli (0-8)

İyi (9-14)

Çok İyi (15-20)

Mükemmel (21-24)

☐
☐
☐
☐

Hazırlayan:

Bu bölüme sınıfınızın ilgili kazanıma yönelik genel durumuna ilişkin gözlem ve izlenimlerinizi, öğrencilerinizin bu kazanımla ilgili öğrenme eksikliklerini ve bu eksikliklerin giderilmesi amacıyla yaptığınız/yapmayı planladığınız faaliyetleri not edebilirsiniz.

No	Adı - Soyadı	Toplam Puan	Değerlendirme
1			
2			
3			
4			
5			
6			
7			
8			
9			
10			
11			
12			
13			
14			
15			
16			
17			
18			
19			
20			
21			
22			
23			
24			
25			
26			
27			
28			
29			
30			
31			
32			
33			
34			
35			

Hazırlayan: