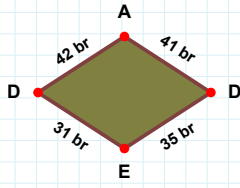
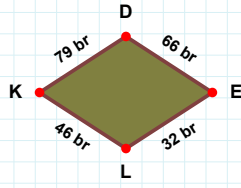


**SORU:** Aşağıdaki şekillerde istenen kenarın kaç birim veya santimetre olduğunu bulunuz.

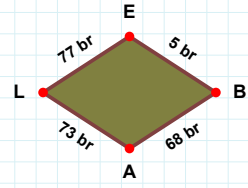
|EB| kaç brdir?

- ☐ 15 br  
☐ 10 br  
☐ 5 br



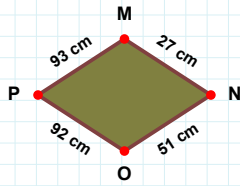
|DE| kaç brdir?

- ☐ 35 br  
☐ 33 br  
☐ 45 br



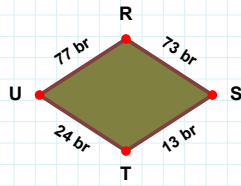
|DE| kaç brdir?

- ☐ 68 br  
☐ 64 br  
☐ 66 br



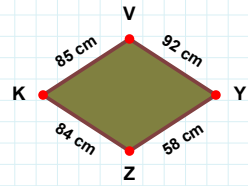
|MN| kaç cmdir?

- ☐ 25 cm  
☐ 24 cm  
☐ 27 cm



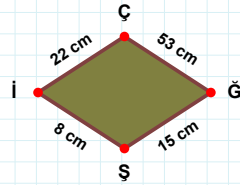
|KV| kaç cmdir?

- ☐ 86 cm  
☐ 85 cm  
☐ 84 cm



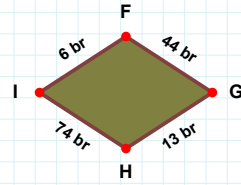
|TU| kaç brdir?

- ☐ 24 br  
☐ 27 br  
☐ 23 br



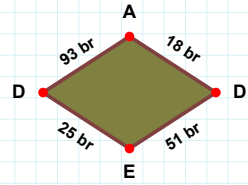
|GH| kaç brdir?

- ☐ 13 br  
☐ 8 br  
☐ 23 br



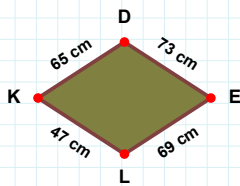
|AD| kaç brdir?

- ☐ 18 br  
☐ 16 br  
☐ 17 br



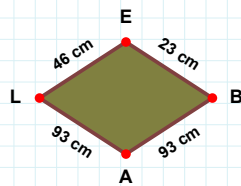
|ÇĞ| kaç cmdir?

- ☐ 63 cm  
☐ 53 cm  
☐ 56 cm



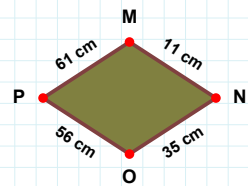
|EB| kaç cmdir?

- ☐ 20 cm  
☐ 23 cm  
☐ 21 cm



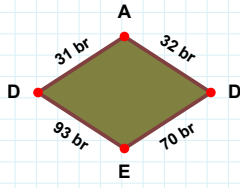
|NO| kaç cmdir?

- ☐ 36 cm  
☐ 34 cm  
☐ 35 cm

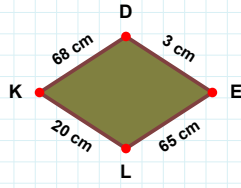


|KD| kaç cmdir?

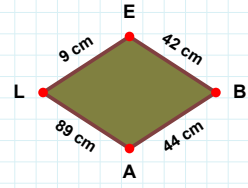
- ☐ 75 cm  
☐ 68 cm  
☐ 65 cm

**SORU: Aşağıdaki şekillerde istenen kenarın kaç birim veya santimetre olduğunu bulunuz.****|BA| kaç cmdir?**

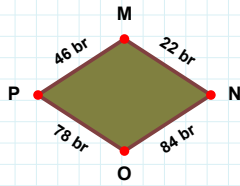
- ☐ 42 cm  
☐ 44 cm  
☐ 45 cm

**|AD| kaç brdir?**

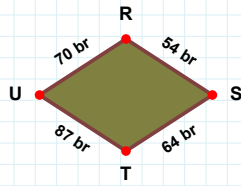
- ☐ 32 br  
☐ 31 br  
☐ 35 br

**|LK| kaç cmdir?**

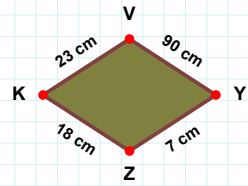
- ☐ 20 cm  
☐ 17 cm  
☐ 25 cm

**|PM| kaç brdir?**

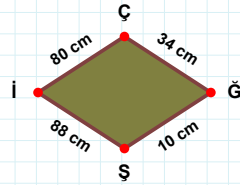
- ☐ 46 br  
☐ 56 br  
☐ 51 br

**|ZK| kaç cmdir?**

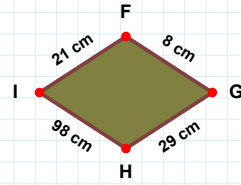
- ☐ 13 cm  
☐ 18 cm  
☐ 16 cm

**|UR| kaç brdir?**

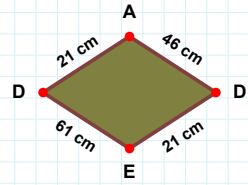
- ☐ 67 br  
☐ 68 br  
☐ 70 br

**|ĞŞ| kaç cmdir?**

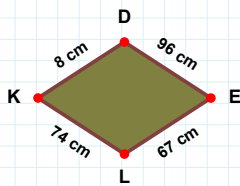
- ☐ 10 cm  
☐ 20 cm  
☐ 15 cm

**|ED| kaç cmdir?**

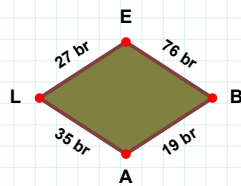
- ☐ 64 cm  
☐ 61 cm  
☐ 58 cm

**|İF| kaç cmdir?**

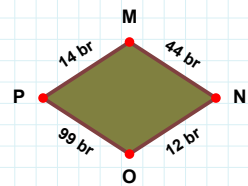
- ☐ 20 cm  
☐ 26 cm  
☐ 21 cm

**|LE| kaç brdir?**

- ☐ 27 br  
☐ 22 br  
☐ 25 br

**|DE| kaç cmdir?**

- ☐ 86 cm  
☐ 96 cm  
☐ 95 cm

**|OP| kaç brdir?**

- ☐ 97 br  
☐ 98 br  
☐ 99 br

## SÜREÇ ODAKLI DEĞERLENDİRME ÖLÇEĞİ

Doğru Sayısı: ..... / 24

Öğretmen ilgili kutucuğu işaretler.

Geliştirilmeli (0-8)

İyi (9-14)

Çok İyi (15-20)

Mükemmel (21-24)

☐☐☐☐

Hazırlayan: .....

Bu bölüme sınıfınızın ilgili kazanıma yönelik genel durumuna ilişkin gözlem ve izlenimlerinizi, öğrencilerinizin bu kazanımla ilgili öğrenme eksikliklerini ve bu eksikliklerin giderilmesi amacıyla yaptığınız/yapmayı planladığınız faaliyetleri not edebilirsiniz.

No	Adı - Soyadı	Toplam Puan	Değerlendirme
1			
2			
3			
4			
5			
6			
7			
8			
9			
10			
11			
12			
13			
14			
15			
16			
17			
18			
19			
20			
21			
22			
23			
24			
25			
26			
27			
28			
29			
30			
31			
32			
33			
34			
35			

Hazırlayan: .....