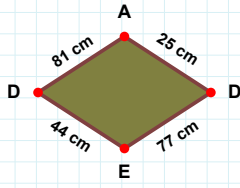
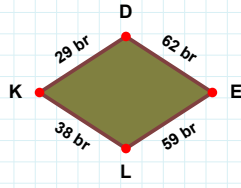


**SORU:** Aşağıdaki şekillerde istenen kenarın kaç birim veya santimetre olduğunu bulunuz.

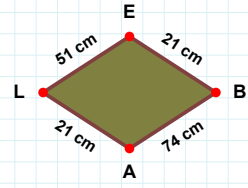
|DE| kaç cmdir?

- ☐ 75 cm  
☐ 80 cm  
☐ 77 cm



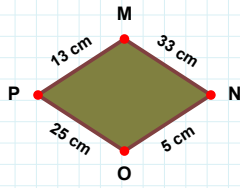
|BA| kaç cmdir?

- ☐ 75 cm  
☐ 74 cm  
☐ 77 cm



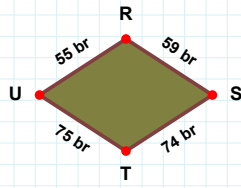
|DE| kaç brdir?

- ☐ 61 br  
☐ 65 br  
☐ 62 br



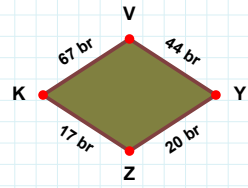
|MN| kaç cmdir?

- ☐ 33 cm  
☐ 43 cm  
☐ 38 cm



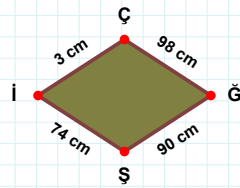
|YZ| kaç brdir?

- ☐ 20 br  
☐ 23 br  
☐ 30 br



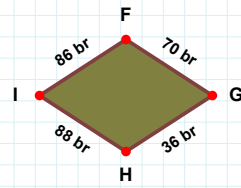
|RS| kaç brdir?

- ☐ 59 br  
☐ 58 br  
☐ 62 br



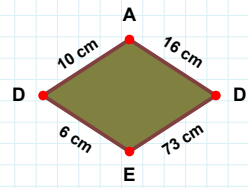
|Şİ| kaç cmdir?

- ☐ 74 cm  
☐ 84 cm  
☐ 72 cm



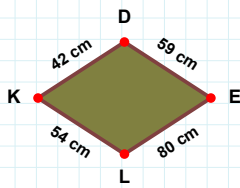
|AD| kaç cmdir?

- ☐ 18 cm  
☐ 16 cm  
☐ 17 cm



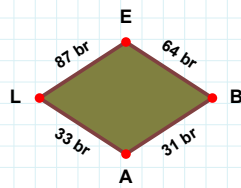
|HI| kaç brdir?

- ☐ 93 br  
☐ 90 br  
☐ 88 br



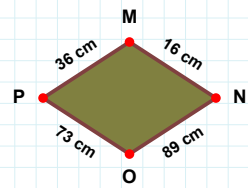
|AL| kaç brdir?

- ☐ 34 br  
☐ 35 br  
☐ 33 br



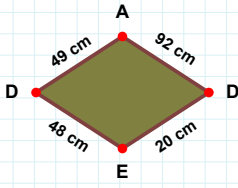
|NO| kaç cmdir?

- ☐ 88 cm  
☐ 99 cm  
☐ 89 cm



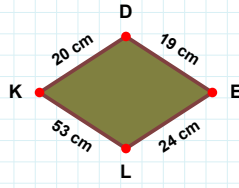
|KD| kaç cmdir?

- ☐ 43 cm  
☐ 42 cm  
☐ 41 cm

**SORU:** Aşağıdaki şekillerde istenen kenarın kaç birim veya santimetre olduğunu bulunuz.

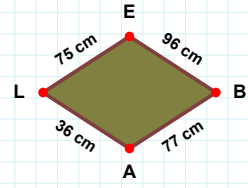
|LE| kaç cmdir?

- ☐ 76 cm  
☐ 75 cm  
☐ 77 cm



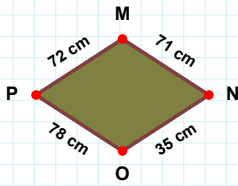
|ED| kaç cmdir?

- ☐ 48 cm  
☐ 53 cm  
☐ 46 cm



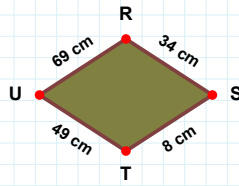
|KD| kaç cmdir?

- ☐ 15 cm  
☐ 20 cm  
☐ 22 cm



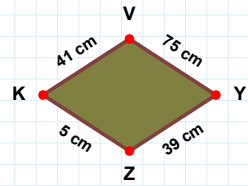
|PM| kaç cmdir?

- ☐ 72 cm  
☐ 70 cm  
☐ 74 cm



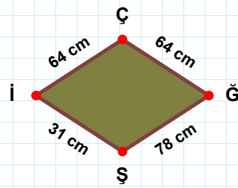
|VY| kaç cmdir?

- ☐ 85 cm  
☐ 75 cm  
☐ 78 cm



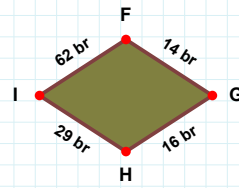
|RS| kaç cmdir?

- ☐ 39 cm  
☐ 34 cm  
☐ 29 cm



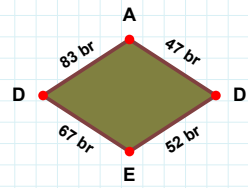
|GH| kaç brdir?

- ☐ 21 br  
☐ 16 br  
☐ 11 br



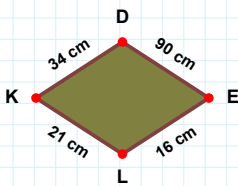
|ED| kaç brdir?

- ☐ 67 br  
☐ 69 br  
☐ 64 br



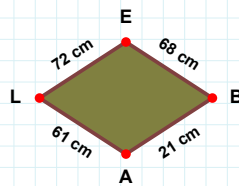
|ĜŞ| kaç cmdir?

- ☐ 76 cm  
☐ 78 cm  
☐ 88 cm



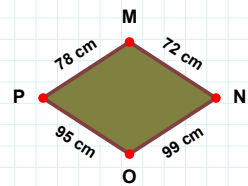
|KD| kaç cmdir?

- ☐ 37 cm  
☐ 34 cm  
☐ 31 cm



|EB| kaç cmdir?

- ☐ 68 cm  
☐ 63 cm  
☐ 71 cm



|NO| kaç cmdir?

- ☐ 99 cm  
☐ 97 cm  
☐ 96 cm

## SÜREÇ ODAKLI DEĞERLENDİRME ÖLÇEĞİ

Doğru Sayısı: ..... / 24

Öğretmen ilgili kutucuğu işaretler.

Geliştirilmeli (0-8)

İyi (9-14)

Çok İyi (15-20)

Mükemmel (21-24)

☐☐☐☐

Hazırlayan: .....

Bu bölüme sınıfınızın ilgili kazanıma yönelik genel durumuna ilişkin gözlem ve izlenimlerinizi, öğrencilerinizin bu kazanımla ilgili öğrenme eksikliklerini ve bu eksikliklerin giderilmesi amacıyla yaptığınız/yapmayı planladığınız faaliyetleri not edebilirsiniz.

No	Adı - Soyadı	Toplam Puan	Değerlendirme
1			
2			
3			
4			
5			
6			
7			
8			
9			
10			
11			
12			
13			
14			
15			
16			
17			
18			
19			
20			
21			
22			
23			
24			
25			
26			
27			
28			
29			
30			
31			
32			
33			
34			
35			

Hazırlayan: .....