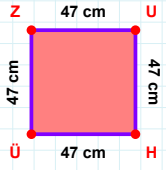
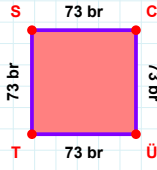


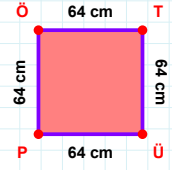
**SORU:** Aşağıdaki geometrik şekillerle ilgili soruları cevaplayınız.

47 cm hangi kenara aittir?

Kenar: .....

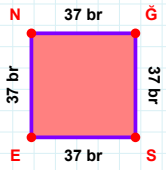
 $|TS| + |ÜT| = \dots$ 

Cevap: ..... br



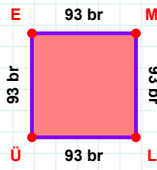
64 cm hangi kenara aittir?

Kenar: .....

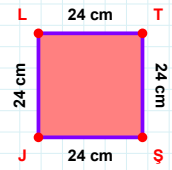


37 br hangi kenara aittir?

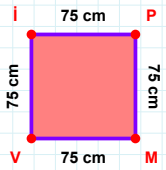
Kenar: .....

 $|LÜ| + |ML| = \dots$ 

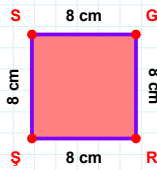
Cevap: ..... br

 $|JL| + |TŞ| = \dots$ 

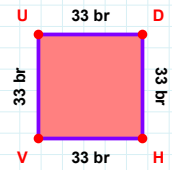
Cevap: ..... cm

 $|MV|$  kaç cm'dir?

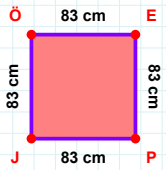
- ☐ 74 cm  
☐ 75 cm  
☐ 76 cm

 $|RS|$  kaç cm'dir?

- ☐ 7 cm  
☐ 8 cm  
☐ 9 cm

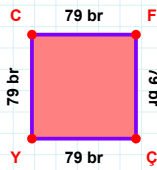
 $|HV| + |UD| = \dots$ 

Cevap: ..... br



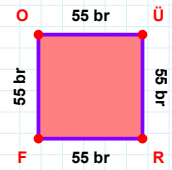
83 cm hangi kenara aittir?

- ☐ PJ kenarı  
☐ PÖ kenarı  
☐ JÖ kenarı



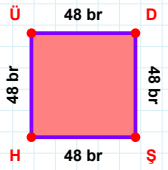
79 br hangi kenara aittir?

- ☐ ÇC kenarı  
☐ FÇ kenarı  
☐ ÇY kenarı

 $|FO| + |RF| = \dots$ 

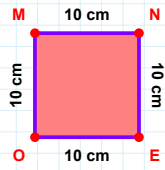
Cevap: ..... br

SORU: Aşağıdaki geometrik şekillerle ilgili soruları cevaplayınız.



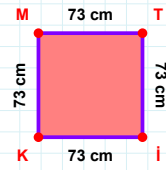
48 br hangi kenara aittir?

- ☐ ŞH kenarı  
☐ HD kenarı  
☐ ÜD kenarı

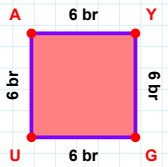


10 cm hangi kenara aittir?

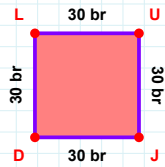
- ☐ MN kenarı  
☐ EO kenarı  
☐ EM kenarı

 $|KM| + |Tİ| = \dots$ 

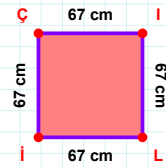
Cevap: ..... cm

 $|AY|$  kaç brdir?

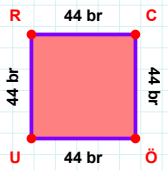
- ☐ 5 br  
☐ 6 br  
☐ 7 br

 $|JD| + |UJ| = \dots$ 

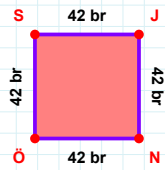
Cevap: ..... br

 $|Çİ|$  kaç cmdir?

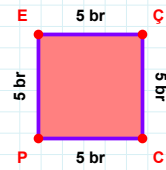
- ☐ 66 cm  
☐ 67 cm  
☐ 68 cm

 $|RC| + |ÖU| = \dots$ 

Cevap: ..... br

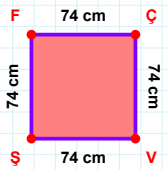
 $|NÖ|$  kaç brdir?

- ☐ 41 br  
☐ 42 br  
☐ 43 br



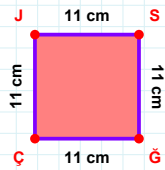
5 br hangi kenara aittir?

- ☐ ÇC kenarı  
☐ PE kenarı  
☐ EC kenarı



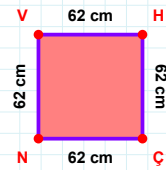
74 cm hangi kenara aittir?

- ☐ ÇŞ kenarı  
☐ FÇ kenarı  
☐ ÇV kenarı



11 cm hangi kenara aittir?

- ☐ ÇJ kenarı  
☐ SÇ kenarı  
☐ SÇ kenarı

 $|HÇ|$  kaç cmdir?

- ☐ 61 cm  
☐ 62 cm  
☐ 63 cm

## SÜREÇ ODAKLI DEĞERLENDİRME ÖLÇEĞİ

Doğru Sayısı: ..... / 24

Öğretmen ilgili kutucuğu işaretler.

Geliştirilmeli (0-8)

İyi (9-14)

Çok İyi (15-20)

Mükemmel (21-24)

☐
☐
☐
☐

Hazırlayan: .....

Bu bölüme sınıfınızın ilgili kazanıma yönelik genel durumuna ilişkin gözlem ve izlenimlerinizi, öğrencilerinizin bu kazanımla ilgili öğrenme eksikliklerini ve bu eksikliklerin giderilmesi amacıyla yaptığınız/yapmayı planladığınız faaliyetleri not edebilirsiniz.

| No | Adı - Soyadı | Toplam Puan | Değerlendirme |
|----|--------------|-------------|---------------|
| 1  |              |             |               |
| 2  |              |             |               |
| 3  |              |             |               |
| 4  |              |             |               |
| 5  |              |             |               |
| 6  |              |             |               |
| 7  |              |             |               |
| 8  |              |             |               |
| 9  |              |             |               |
| 10 |              |             |               |
| 11 |              |             |               |
| 12 |              |             |               |
| 13 |              |             |               |
| 14 |              |             |               |
| 15 |              |             |               |
| 16 |              |             |               |
| 17 |              |             |               |
| 18 |              |             |               |
| 19 |              |             |               |
| 20 |              |             |               |
| 21 |              |             |               |
| 22 |              |             |               |
| 23 |              |             |               |
| 24 |              |             |               |
| 25 |              |             |               |
| 26 |              |             |               |
| 27 |              |             |               |
| 28 |              |             |               |
| 29 |              |             |               |
| 30 |              |             |               |
| 31 |              |             |               |
| 32 |              |             |               |
| 33 |              |             |               |
| 34 |              |             |               |
| 35 |              |             |               |

Hazırlayan: .....