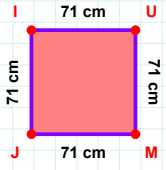
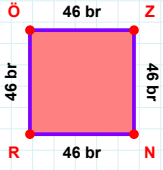


**SORU:** Aşağıdaki geometrik şekillerle ilgili soruları cevaplayınız.

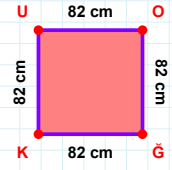
$$|JI| + |UM| = \dots$$

Cevap: ..... cm



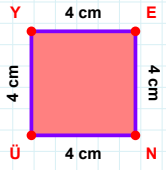
$$|ÖZ| + |RÖ| = \dots$$

Cevap: ..... br



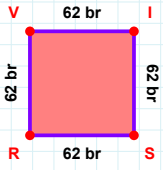
$$|ÖK| + |UO| = \dots$$

Cevap: ..... cm



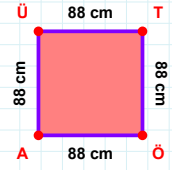
4 cm hangi kenara aittir?

Kenar: .....



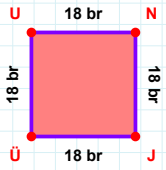
$$|SR| + |VI| = \dots$$

Cevap: ..... br



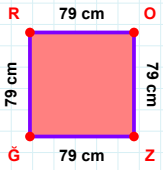
88 cm hangi kenara aittir?

Kenar: .....



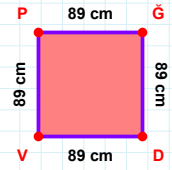
18 br hangi kenara aittir?

Kenar: .....



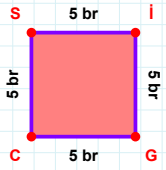
79 cm hangi kenara aittir?

Kenar: .....



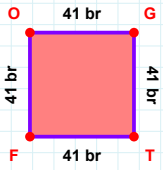
$$|DV| + |GD| = \dots$$

Cevap: ..... cm



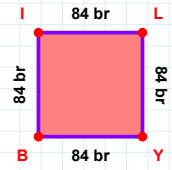
5 br hangi kenara aittir?

- ☐ CS kenarı  
☐ SG kenarı  
☐ Sİ kenarı



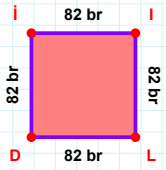
41 br hangi kenara aittir?

Kenar: .....



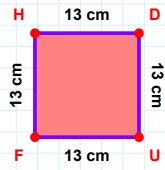
84 br hangi kenara aittir?

- ☐ LY kenarı  
☐ Bİ kenarı  
☐ İY kenarı

**SORU:** Aşağıdaki geometrik şekillerle ilgili soruları cevaplayınız.

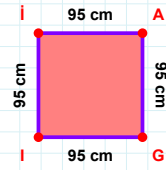
|IL| kaç brdir?

- ☐ 81 br  
☐ 82 br  
☐ 83 br



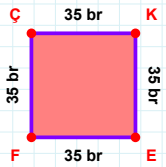
|UF| + |HD| = ....

Cevap: ..... cm



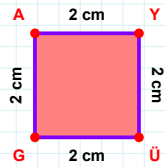
95 cm hangi kenara aittir?

Kenar: .....



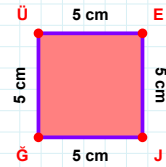
|EF| kaç brdir?

- ☐ 34 br  
☐ 35 br  
☐ 36 br



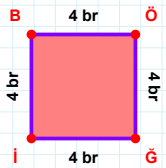
|AY| + |YÜ| = ....

Cevap: ..... cm



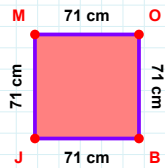
5 cm hangi kenara aittir?

Kenar: .....



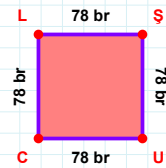
|ÖG| kaç brdir?

- ☐ 3 br  
☐ 4 br  
☐ 5 br



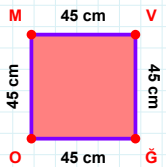
|JM| kaç cmdir?

- ☐ 70 cm  
☐ 71 cm  
☐ 72 cm



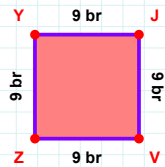
|UC| + |ŞU| = ....

Cevap: ..... br



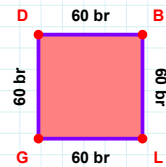
45 cm hangi kenara aittir?

- ☐ VO kenarı  
☐ OM kenarı  
☐ MV kenarı



9 br hangi kenara aittir?

Kenar: .....



60 br hangi kenara aittir?

- ☐ LG kenarı  
☐ GD kenarı  
☐ GB kenarı

## SÜREÇ ODAKLI DEĞERLENDİRME ÖLÇEĞİ

Doğru Sayısı: ..... / 24

Öğretmen ilgili kutucuğu işaretler.

Geliştirilmeli (0-8)

İyi (9-14)

Çok İyi (15-20)

Mükemmel (21-24)

☐
☐
☐
☐

Hazırlayan: .....

Bu bölüme sınıfınızın ilgili kazanıma yönelik genel durumuna ilişkin gözlem ve izlenimlerinizi, öğrencilerinizin bu kazanımla ilgili öğrenme eksikliklerini ve bu eksikliklerin giderilmesi amacıyla yaptığınız/yapmayı planladığınız faaliyetleri not edebilirsiniz.

No	Adı - Soyadı	Toplam Puan	Değerlendirme
1			
2			
3			
4			
5			
6			
7			
8			
9			
10			
11			
12			
13			
14			
15			
16			
17			
18			
19			
20			
21			
22			
23			
24			
25			
26			
27			
28			
29			
30			
31			
32			
33			
34			
35			

Hazırlayan: .....