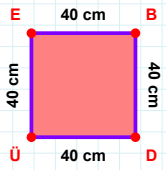
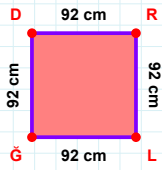


SORU: Aşağıdaki geometrik şekillerle ilgili soruları cevaplayınız.

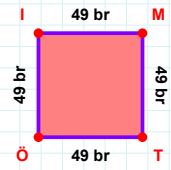
40 cm hangi kenara aittir?

- ☐ DÜ kenarı
☐ ÜE kenarı
☐ DE kenarı



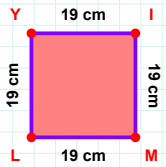
|ĞD| kaç cm'dir?

- ☐ 91 cm
☐ 92 cm
☐ 93 cm



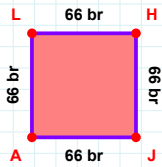
|MT| kaç br'dir?

- ☐ 48 br
☐ 49 br
☐ 50 br



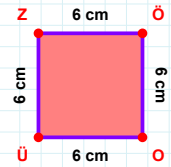
|LY| + |ML| =

Cevap: cm



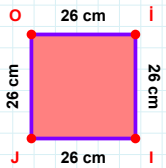
|JA| + |LH| =

Cevap: br



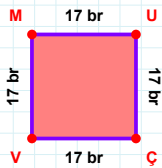
6 cm hangi kenara aittir?

- ☐ ÖÜ kenarı
☐ ÖO kenarı
☐ ZÖ kenarı



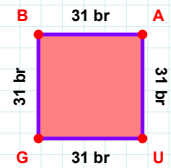
|OI| kaç cm'dir?

- ☐ 25 cm
☐ 26 cm
☐ 27 cm



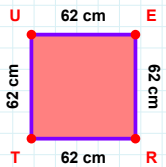
|ÇV| + |UÇ| =

Cevap: br



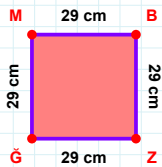
31 br hangi kenara aittir?

- ☐ GB kenarı
☐ GA kenarı
☐ BA kenarı



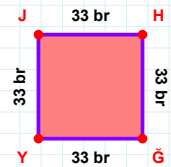
62 cm hangi kenara aittir?

Kenar:



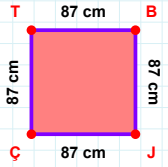
|ĞM| kaç cm'dir?

- ☐ 28 cm
☐ 29 cm
☐ 30 cm

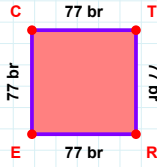


|HĞ| kaç br'dir?

- ☐ 32 br
☐ 33 br
☐ 34 br

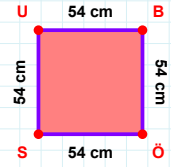
SORU: Aşağıdaki geometrik şekillerle ilgili soruları cevaplayınız. $|BJ| + |ÇT| = \dots$

Cevap: cm

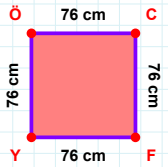


77 br hangi kenara aittir?

- ☐ TR kenarı
☐ TE kenarı
☐ RE kenarı

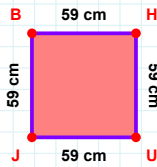
 $|BÖ|$ kaç cm'dir?

- ☐ 53 cm
☐ 54 cm
☐ 55 cm

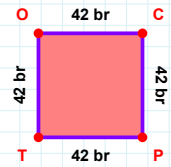


76 cm hangi kenara aittir?

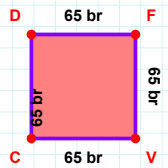
- ☐ CF kenarı
☐ FY kenarı
☐ CY kenarı

 $|BH| + |UJ| = \dots$

Cevap: cm

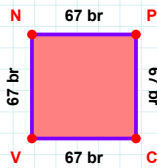
 $|CP|$ kaç br'dir?

- ☐ 41 br
☐ 42 br
☐ 43 br



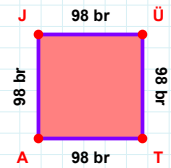
65 br hangi kenara aittir?

Kenar:

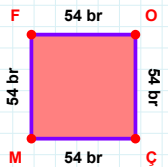


67 br hangi kenara aittir?

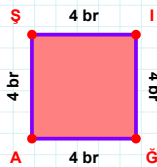
Kenar:

 $|JÜ|$ kaç br'dir?

- ☐ 97 br
☐ 98 br
☐ 99 br

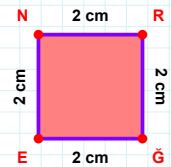
 $|OÇ| + |ÇM| = \dots$

Cevap: br



4 br hangi kenara aittir?

Kenar:

 $|GE|$ kaç cm'dir?

- ☐ 1 cm
☐ 2 cm
☐ 3 cm

SÜREÇ ODAKLI DEĞERLENDİRME ÖLÇEĞİ

Doğru Sayısı: / 24

Öğretmen ilgili kutucuğu işaretler.

Geliştirilmeli (0-8)

İyi (9-14)

Çok İyi (15-20)

Mükemmel (21-24)

☐☐☐☐

Hazırlayan:

Bu bölüme sınıfınızın ilgili kazanıma yönelik genel durumuna ilişkin gözlem ve izlenimlerinizi, öğrencilerinizin bu kazanımla ilgili öğrenme eksikliklerini ve bu eksikliklerin giderilmesi amacıyla yaptığınız/yapmayı planladığınız faaliyetleri not edebilirsiniz.

No	Adı - Soyadı	Toplam Puan	Değerlendirme
1			
2			
3			
4			
5			
6			
7			
8			
9			
10			
11			
12			
13			
14			
15			
16			
17			
18			
19			
20			
21			
22			
23			
24			
25			
26			
27			
28			
29			
30			
31			
32			
33			
34			
35			

Hazırlayan: