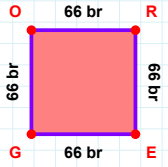
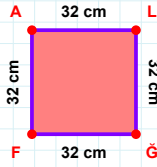
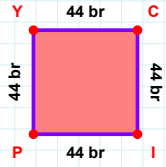
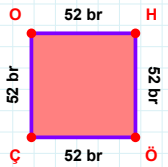
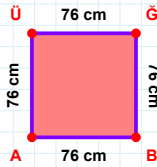
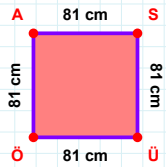
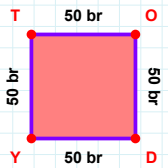
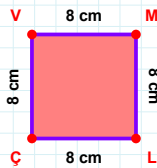


SORU: Aşağıdaki geometrik şekillerle ilgili soruları cevaplayınız.**|GO| kaç brdir?**

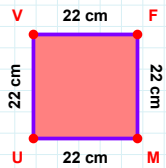
- ☐ 65 br
☐ 66 br
☐ 67 br

**|AL| + |FA| =****Cevap:** cm**44 br hangi kenara aittir?****Kenar:****|OH| + |ÖÇ| =****Cevap:** br**76 cm hangi kenara aittir?****Kenar:****81 cm hangi kenara aittir?****Kenar:****|OD| kaç brdir?**

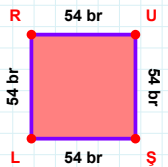
- ☐ 49 br
☐ 50 br
☐ 51 br

**|ÇV| kaç cmdir?**

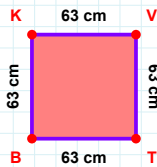
- ☐ 7 cm
☐ 8 cm
☐ 9 cm

**|UV| kaç cmdir?**

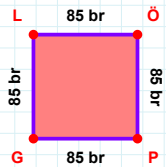
- ☐ 21 cm
☐ 22 cm
☐ 23 cm

**54 br hangi kenara aittir?**

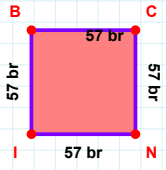
- ☐ UŞ kenarı
☐ RŞ kenarı
☐ RU kenarı

**|KV| kaç cmdir?**

- ☐ 62 cm
☐ 63 cm
☐ 64 cm

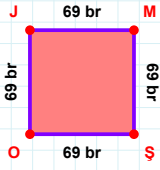
**|ÖP| kaç brdir?**

- ☐ 84 br
☐ 85 br
☐ 86 br

SORU: Aşağıdaki geometrik şekillerle ilgili soruları cevaplayınız.

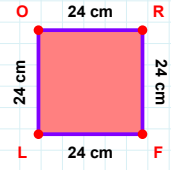
|BC| kaç brdir?

- ☐ 56 br
☐ 57 br
☐ 58 br



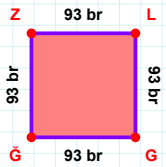
|ŞO| + |OJ| =

Cevap: br



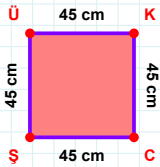
|FL| + |LO| =

Cevap: cm



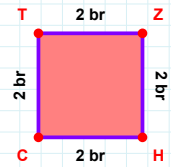
93 br hangi kenara aittir?

Kenar:



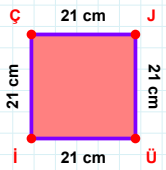
|ÜK| + |KC| =

Cevap: cm



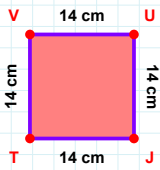
2 br hangi kenara aittir?

- ☐ HC kenarı
☐ HT kenarı
☐ ZH kenarı



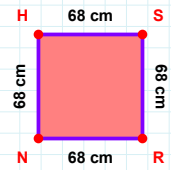
|Üİ| kaç cmdir?

- ☐ 20 cm
☐ 21 cm
☐ 22 cm



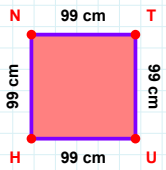
14 cm hangi kenara aittir?

Kenar:



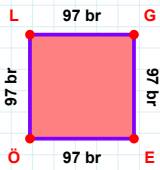
68 cm hangi kenara aittir?

- ☐ SN kenarı
☐ HS kenarı
☐ NH kenarı



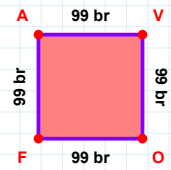
99 cm hangi kenara aittir?

Kenar:



97 br hangi kenara aittir?

- ☐ GÖ kenarı
☐ EÖ kenarı
☐ ÖL kenarı



99 br hangi kenara aittir?

Kenar:

SÜREÇ ODAKLI DEĞERLENDİRME ÖLÇEĞİ

Doğru Sayısı: / 24

Öğretmen ilgili kutucuğu işaretler.

Geliştirilmeli (0-8)

İyi (9-14)

Çok İyi (15-20)

Mükemmel (21-24)

☐
☐
☐
☐

Hazırlayan:

Bu bölüme sınıfınızın ilgili kazanıma yönelik genel durumuna ilişkin gözlem ve izlenimlerinizi, öğrencilerinizin bu kazanımla ilgili öğrenme eksikliklerini ve bu eksikliklerin giderilmesi amacıyla yaptığınız/yapmayı planladığınız faaliyetleri not edebilirsiniz.

No	Adı - Soyadı	Toplam Puan	Değerlendirme
1			
2			
3			
4			
5			
6			
7			
8			
9			
10			
11			
12			
13			
14			
15			
16			
17			
18			
19			
20			
21			
22			
23			
24			
25			
26			
27			
28			
29			
30			
31			
32			
33			
34			
35			

Hazırlayan: