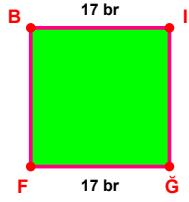
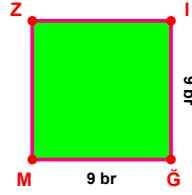


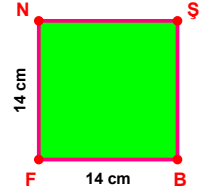
SORU: Aşağıdaki şekillerde verilen, kenar uzunlukları farklarını bulunuz.



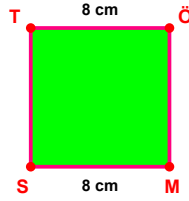
$$|\text{GF}| - |\text{BI}| = \dots\dots$$



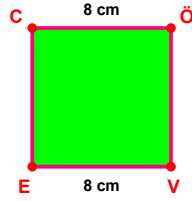
$$|\text{ZI}| - |\text{GM}| = \dots\dots$$



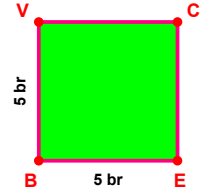
$$|\text{FN}| - |\text{BF}| = \dots\dots$$



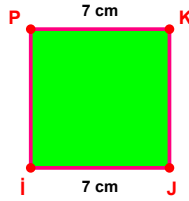
$$|\text{TÖ}| - |\text{MS}| = \dots\dots$$



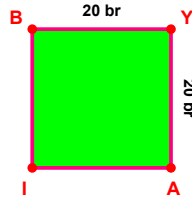
$$|\text{VE}| - |\text{CÖ}| = \dots\dots$$



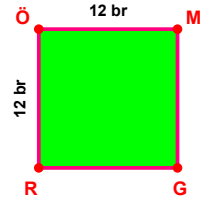
$$|\text{EB}| - |\text{BV}| = \dots\dots$$



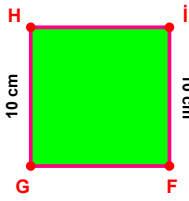
$$|\text{JI}| - |\text{PK}| = \dots\dots$$



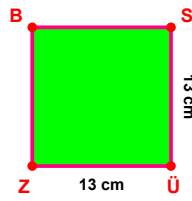
$$|\text{YA}| - |\text{BY}| = \dots\dots$$



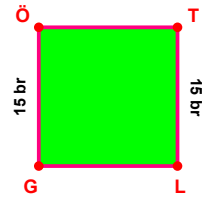
$$|\text{ÖM}| - |\text{RÖ}| = \dots\dots$$



$$|\text{IF}| - |\text{GH}| = \dots\dots$$

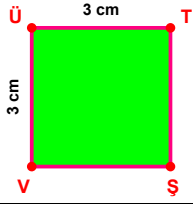


$$|\text{ÜZ}| - |\text{SÜ}| = \dots\dots$$

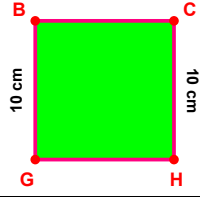


$$|\text{GÖ}| - |\text{TL}| = \dots\dots$$

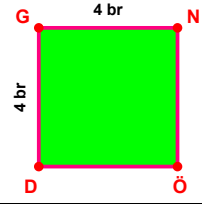
SORU: Aşağıdaki şekillerde verilen, kenar uzunlukları farklarını bulunuz.



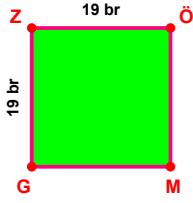
$$|ÜT| - |VÜ| = \dots\dots$$



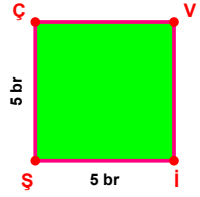
$$|GB| - |CH| = \dots\dots$$



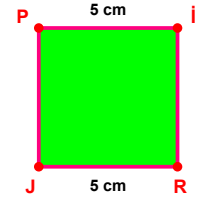
$$|DG| - |GN| = \dots\dots$$



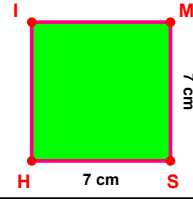
$$|GZ| - |ZÖ| = \dots\dots$$



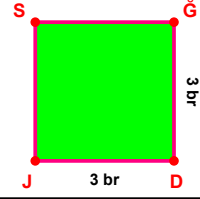
$$|ŞÇ| - |İŞ| = \dots\dots$$



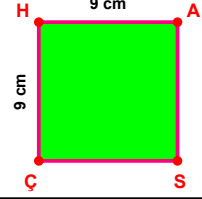
$$|RJ| - |PI| = \dots\dots$$



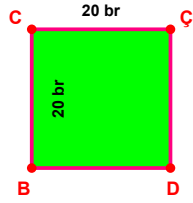
$$|MS| - |SH| = \dots\dots$$



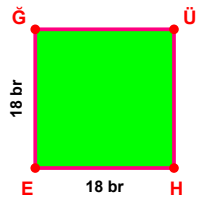
$$|DJ| - |ĞD| = \dots\dots$$



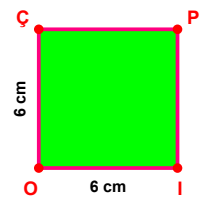
$$|HA| - |ÇH| = \dots\dots$$



$$|CÇ| - |BC| = \dots\dots$$



$$|EĞ| - |HE| = \dots\dots$$



$$|OÇ| - |İO| = \dots\dots$$

SÜREÇ ODAKLI DEĞERLENDİRME ÖLÇEĞİ

Doğru Sayısı: / 24

Öğretmen ilgili kutucuğu işaretler.

Geliştirilmeli (0-8)

İyi (9-14)

Çok İyi (15-20)

Mükemmel (21-24)

☐
☐
☐
☐

Hazırlayan:

Bu bölüme sınıfınızın ilgili kazanıma yönelik genel durumuna ilişkin gözlem ve izlenimlerinizi, öğrencilerinizin bu kazanımla ilgili öğrenme eksikliklerini ve bu eksikliklerin giderilmesi amacıyla yaptığınız/yapmayı planladığınız faaliyetleri not edebilirsiniz.

No	Adı - Soyadı	Toplam Puan	Değerlendirme
1			
2			
3			
4			
5			
6			
7			
8			
9			
10			
11			
12			
13			
14			
15			
16			
17			
18			
19			
20			
21			
22			
23			
24			
25			
26			
27			
28			
29			
30			
31			
32			
33			
34			
35			

Hazırlayan: