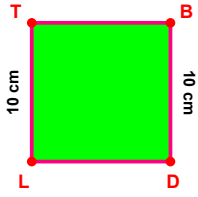
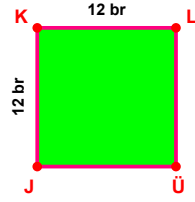


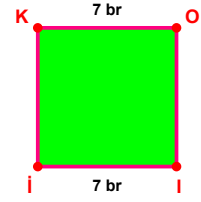
SORU: Aşağıdaki şekillerde verilen, kenar uzunlukları farklarını bulunuz.



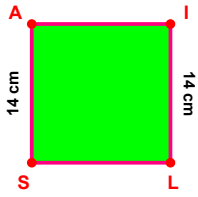
$$|BD| - |LT| = \dots\dots$$



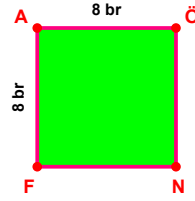
$$|KL| - |JK| = \dots\dots$$



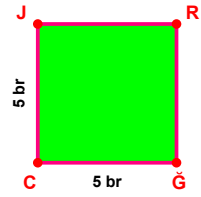
$$|KO| - |İİ| = \dots\dots$$



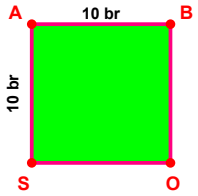
$$|İL| - |SA| = \dots\dots$$



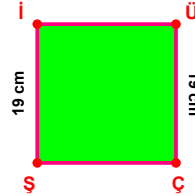
$$|FA| - |AÖ| = \dots\dots$$



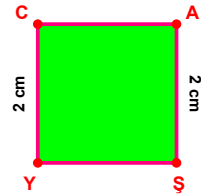
$$|ĞC| - |CJ| = \dots\dots$$



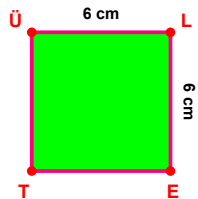
$$|SA| - |AB| = \dots\dots$$



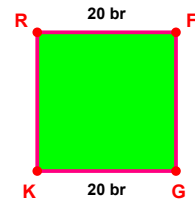
$$|ÜÇ| - |İİ| = \dots\dots$$



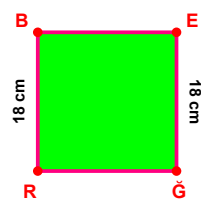
$$|YC| - |AŞ| = \dots\dots$$



$$|ÜL| - |LE| = \dots\dots$$

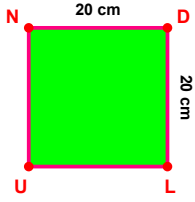


$$|RF| - |GK| = \dots\dots$$

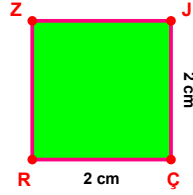


$$|EĞ| - |RB| = \dots\dots$$

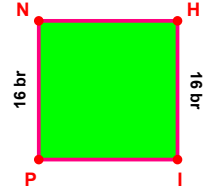
SORU: Aşağıdaki şekillerde verilen, kenar uzunlukları farklarını bulunuz.



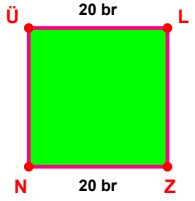
$$|DL| - |ND| = \dots\dots$$



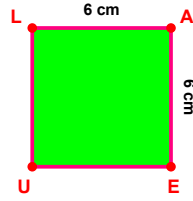
$$|ÇR| - |JC| = \dots\dots$$



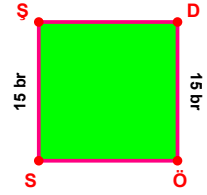
$$|PN| - |HI| = \dots\dots$$



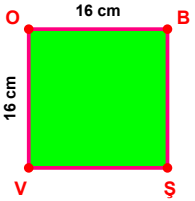
$$|ÜL| - |ZN| = \dots\dots$$



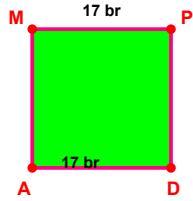
$$|AE| - |LA| = \dots\dots$$



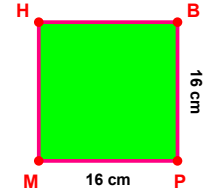
$$|SŞ| - |DÖ| = \dots\dots$$



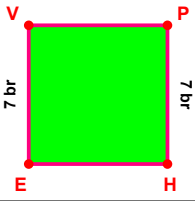
$$|VO| - |OB| = \dots\dots$$



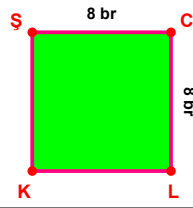
$$|MP| - |DA| = \dots\dots$$



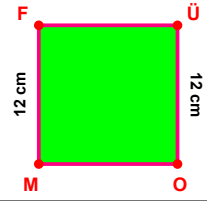
$$|PM| - |BP| = \dots\dots$$



$$|EV| - |PH| = \dots\dots$$



$$|CL| - |ŞC| = \dots\dots$$



$$|ÜO| - |MF| = \dots\dots$$

## SÜREÇ ODAKLI DEĞERLENDİRME ÖLÇEĞİ

Doğru Sayısı: ..... / 24

Öğretmen ilgili kutucuğu işaretler.

Geliştirilmeli (0-8)

İyi (9-14)

Çok İyi (15-20)

Mükemmel (21-24)



Hazırlayan: .....

Bu bölüme sınıfınızın ilgili kazanıma yönelik genel durumuna ilişkin gözlem ve izlenimlerinizi, öğrencilerinizin bu kazanımla ilgili öğrenme eksikliklerini ve bu eksikliklerin giderilmesi amacıyla yaptığınız/yapmayı planladığınız faaliyetleri not edebilirsiniz.

No	Adı - Soyadı	Toplam Puan	Değerlendirme
1			
2			
3			
4			
5			
6			
7			
8			
9			
10			
11			
12			
13			
14			
15			
16			
17			
18			
19			
20			
21			
22			
23			
24			
25			
26			
27			
28			
29			
30			
31			
32			
33			
34			
35			

Hazırlayan: .....