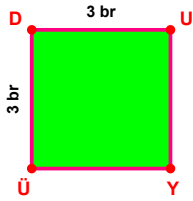
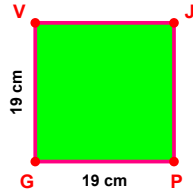


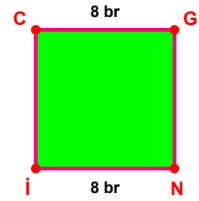
SORU: Aşağıdaki şekillerde verilen, kenar uzunlukları farklarını bulunuz.



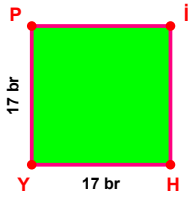
$$|DU| - |ÜD| = \dots\dots$$



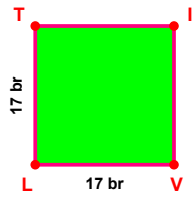
$$|PG| - |GV| = \dots\dots$$



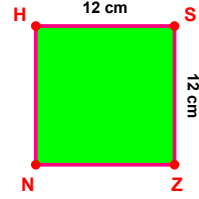
$$|CG| - |Nİ| = \dots\dots$$



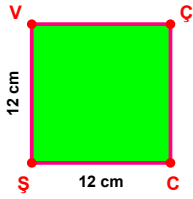
$$|HY| - |YP| = \dots\dots$$



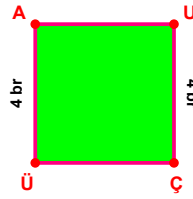
$$|LT| - |VL| = \dots\dots$$



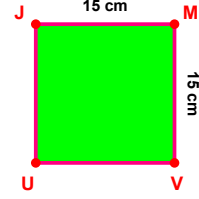
$$|SZ| - |HS| = \dots\dots$$



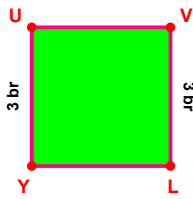
$$|ŞV| - |CŞ| = \dots\dots$$



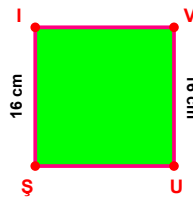
$$|ÜA| - |UÇ| = \dots\dots$$



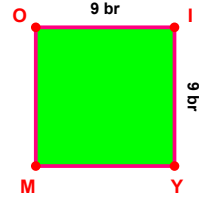
$$|JM| - |MV| = \dots\dots$$



$$|YU| - |VL| = \dots\dots$$

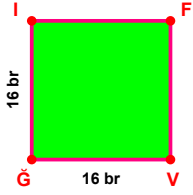


$$|Şİ| - |VU| = \dots\dots$$

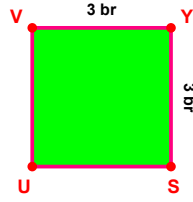


$$|Oİ| - |İY| = \dots\dots$$

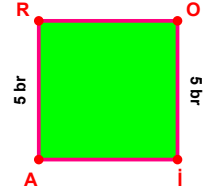
SORU: Aşağıdaki şekillerde verilen, kenar uzunlukları farklarını bulunuz.



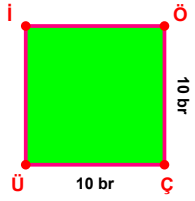
$$|VG| - |GI| = \dots\dots$$



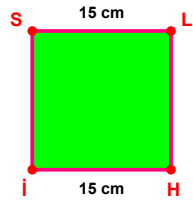
$$|YS| - |VY| = \dots\dots$$



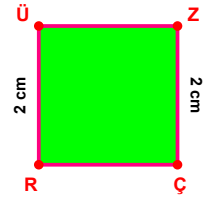
$$|Oi| - |AR| = \dots\dots$$



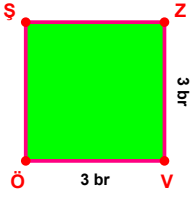
$$|ÖÇ| - |ÇÜ| = \dots\dots$$



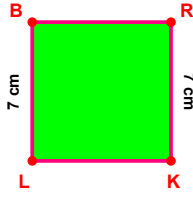
$$|SL| - |Hi| = \dots\dots$$



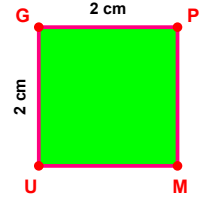
$$|RÜ| - |ZÇ| = \dots\dots$$



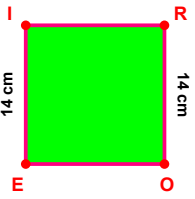
$$|ZV| - |VÖ| = \dots\dots$$



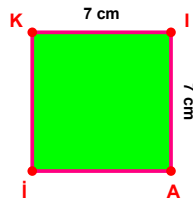
$$|RK| - |LB| = \dots\dots$$



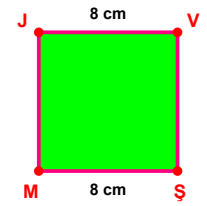
$$|GP| - |UG| = \dots\dots$$



$$|RO| - |EI| = \dots\dots$$



$$|Ki| - |Ai| = \dots\dots$$



$$|JV| - |ŞM| = \dots\dots$$

SÜREÇ ODAKLI DEĞERLENDİRME ÖLÇEĞİ

Doğru Sayısı: / 24

Öğretmen ilgili kutucuğu işaretler.

Geliştirilmeli (0-8)

İyi (9-14)

Çok İyi (15-20)

Mükemmel (21-24)

☐
☐
☐
☐

Hazırlayan:

Bu bölüme sınıfınızın ilgili kazanıma yönelik genel durumuna ilişkin gözlem ve izlenimlerinizi, öğrencilerinizin bu kazanımla ilgili öğrenme eksikliklerini ve bu eksikliklerin giderilmesi amacıyla yaptığınız/yapmayı planladığınız faaliyetleri not edebilirsiniz.

No	Adı - Soyadı	Toplam Puan	Değerlendirme
1			
2			
3			
4			
5			
6			
7			
8			
9			
10			
11			
12			
13			
14			
15			
16			
17			
18			
19			
20			
21			
22			
23			
24			
25			
26			
27			
28			
29			
30			
31			
32			
33			
34			
35			

Hazırlayan: