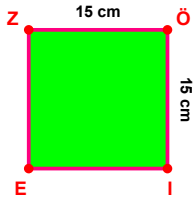
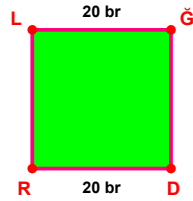


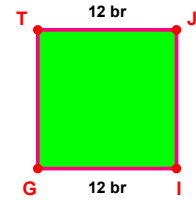
SORU: Aşağıdaki şekillerde verilen, kenar uzunlukları farklarını bulunuz.



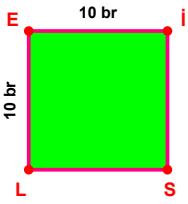
$$|ZÖ| - |Öİ| = \dots\dots$$



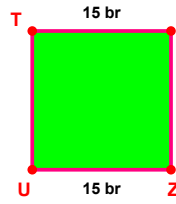
$$|LĞ| - |DR| = \dots\dots$$



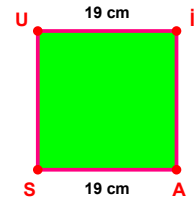
$$|İG| - |TJ| = \dots\dots$$



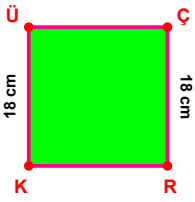
$$|LE| - |Eİ| = \dots\dots$$



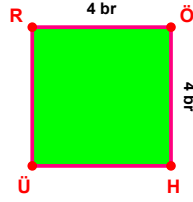
$$|ZU| - |TK| = \dots\dots$$



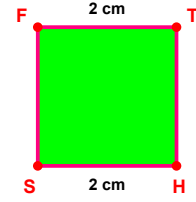
$$|AS| - |UI| = \dots\dots$$



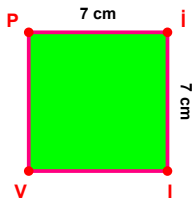
$$|ÇR| - |KÜ| = \dots\dots$$



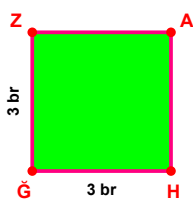
$$|ÖH| - |RÖ| = \dots\dots$$



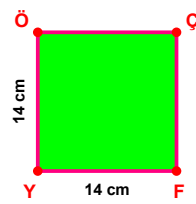
$$|HS| - |FT| = \dots\dots$$



$$|İİ| - |Pİ| = \dots\dots$$

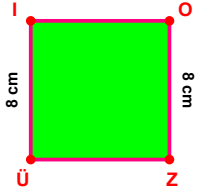


$$|ĞZ| - |HĞ| = \dots\dots$$

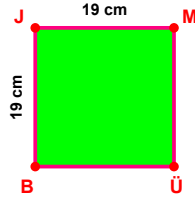


$$|FY| - |YÖ| = \dots\dots$$

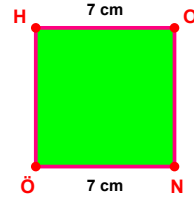
SORU: Aşağıdaki şekillerde verilen, kenar uzunlukları farklarını bulunuz.



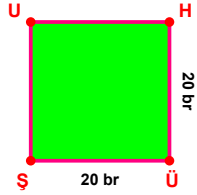
$$|OZ| - |ÜI| = \dots\dots\dots$$



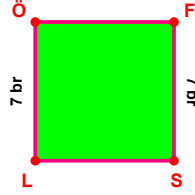
$$|BJ| - |JM| = \dots\dots\dots$$



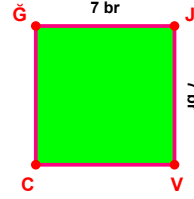
$$|NÖ| - |HO| = \dots\dots\dots$$



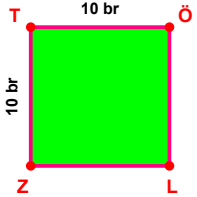
$$|HÜ| - |ÜŞ| = \dots\dots\dots$$



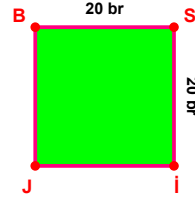
$$|FS| - |LÖ| = \dots\dots\dots$$



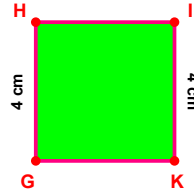
$$|ĞJ| - |JV| = \dots\dots\dots$$



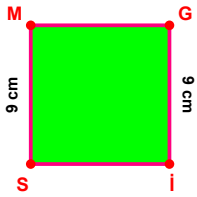
$$|TÖ| - |ZT| = \dots\dots\dots$$



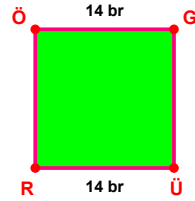
$$|BS| - |Sİ| = \dots\dots\dots$$



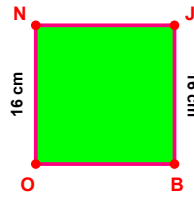
$$|GH| - |İK| = \dots\dots\dots$$



$$|Gİ| - |SM| = \dots\dots\dots$$



$$|ÜR| - |ÖG| = \dots\dots\dots$$



$$|JB| - |ON| = \dots\dots\dots$$

SÜREÇ ODAKLI DEĞERLENDİRME ÖLÇEĞİ

Doğru Sayısı: / 24

Öğretmen ilgili kutucuğu işaretler.

Geliştirilmeli (0-8)

İyi (9-14)

Çok İyi (15-20)

Mükemmel (21-24)

☐☐☐☐

Hazırlayan:

Bu bölüme sınıfınızın ilgili kazanıma yönelik genel durumuna ilişkin gözlem ve izlenimlerinizi, öğrencilerinizin bu kazanımla ilgili öğrenme eksikliklerini ve bu eksikliklerin giderilmesi amacıyla yaptığınız/yapmayı planladığınız faaliyetleri not edebilirsiniz.

No	Adı - Soyadı	Toplam Puan	Değerlendirme
1			
2			
3			
4			
5			
6			
7			
8			
9			
10			
11			
12			
13			
14			
15			
16			
17			
18			
19			
20			
21			
22			
23			
24			
25			
26			
27			
28			
29			
30			
31			
32			
33			
34			
35			

Hazırlayan: