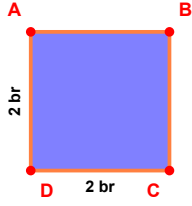
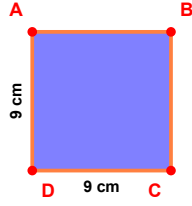


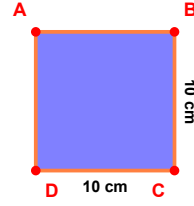
**SORU:** Aşağıdaki şekillerde verilen kenar uzunluklarının toplamını bulunuz.



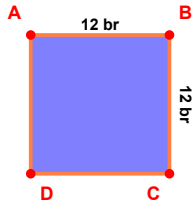
$$|CD| + |DA| = \dots$$



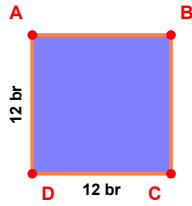
$$|CD| + |DA| = \dots$$



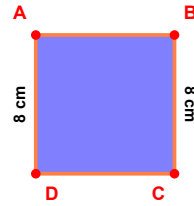
$$|CD| + |BC| = \dots$$



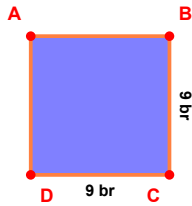
$$|AB| + |BC| = \dots$$



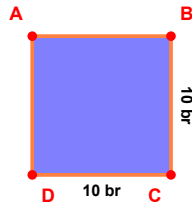
$$|DA| + |CD| = \dots$$



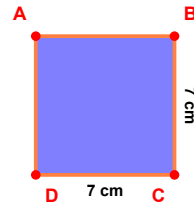
$$|BC| + |DA| = \dots$$



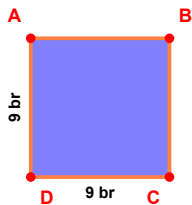
$$|CD| + |BC| = \dots$$



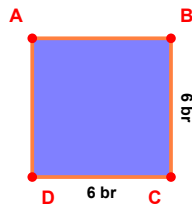
$$|BC| + |CD| = \dots$$



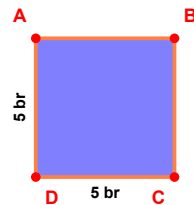
$$|CD| + |BC| = \dots$$



$$|DA| + |CD| = \dots$$

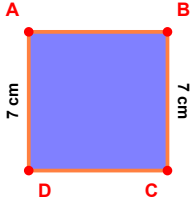


$$|CD| + |BC| = \dots$$

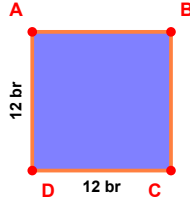


$$|CD| + |DA| = \dots$$

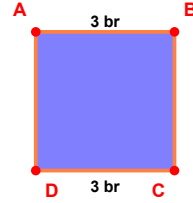
**SORU:** Aşağıdaki şekillerde verilen kenar uzunluklarının toplamını bulunuz.



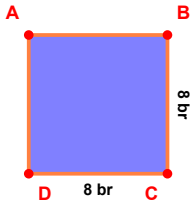
$$|BC| + |DA| = \dots$$



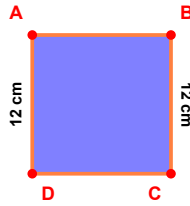
$$|CD| + |DA| = \dots$$



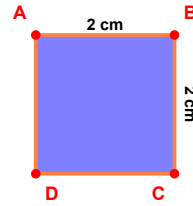
$$|CD| + |AB| = \dots$$



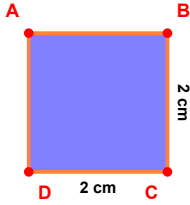
$$|BC| + |CD| = \dots$$



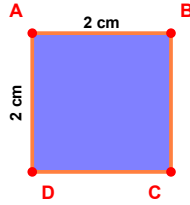
$$|DA| + |BC| = \dots$$



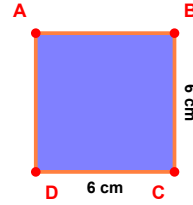
$$|AB| + |BC| = \dots$$



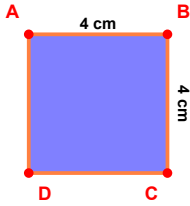
$$|BC| + |CD| = \dots$$



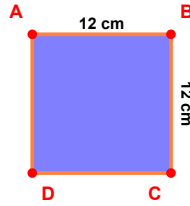
$$|DA| + |AB| = \dots$$



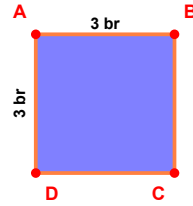
$$|BC| + |CD| = \dots$$



$$|AB| + |BC| = \dots$$



$$|BC| + |AB| = \dots$$



$$|DA| + |AB| = \dots$$

## SÜREÇ ODAKLI DEĞERLENDİRME ÖLÇEĞİ

Doğru Sayısı: ..... / 24

Öğretmen ilgili kutucuğu işaretler.

Geliştirilmeli (0-8)

İyi (9-14)

Çok İyi (15-20)

Mükemmel (21-24)

☐
☐
☐
☐

Hazırlayan: Şeyhmus Öğretmen

Bu bölüme sınıfınızın ilgili kazanıma yönelik genel durumuna ilişkin gözlem ve izlenimlerinizi, öğrencilerinizin bu kazanımla ilgili öğrenme eksikliklerini ve bu eksikliklerin giderilmesi amacıyla yaptığınız/yapmayı planladığınız faaliyetleri not edebilirsiniz.

No	Adı - Soyadı	Toplam Puan	Değerlendirme
1			
2			
3			
4			
5			
6			
7			
8			
9			
10			
11			
12			
13			
14			
15			
16			
17			
18			
19			
20			
21			
22			
23			
24			
25			
26			
27			
28			
29			
30			
31			
32			
33			
34			
35			

Hazırlayan: Şeyhmus Öğretmen