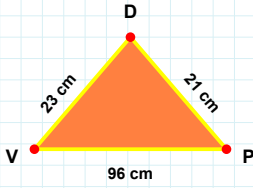
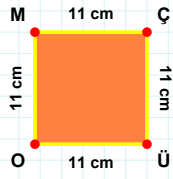


SORU: Aşağıdaki şekilleri inceleyiniz. Verilen kenar bilgisinin hangi şekle ait olduğunu işaretleyiniz.



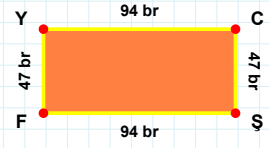
[ÜO] kenarı hangi şeklin kenarıdır?

- ☐ Dikdörtgen
☐ Üçgen
☐ Kare



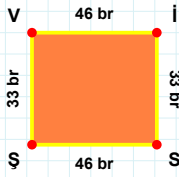
[FY] kenarı hangi şeklin kenarıdır?

- ☐ Üçgen
☐ Kare
☐ Dikdörtgen



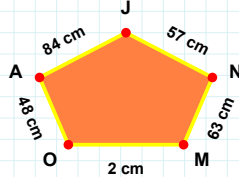
[VP] kenarı hangi şeklin kenarıdır?

- ☐ Dikdörtgen
☐ Üçgen
☐ Kare



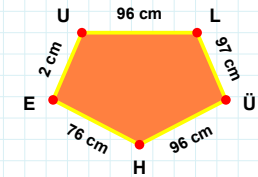
63 cm hangi şeklin kenarıdır?

- ☐ Ters Beşgen
☐ Beşgen
☐ Dikey Dikdörtgen



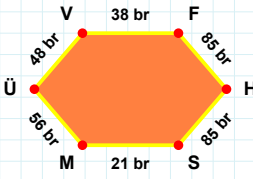
[ÜH] kenarı hangi şeklin kenarıdır?

- ☐ Beşgen
☐ Dikey Dikdörtgen
☐ Ters Beşgen



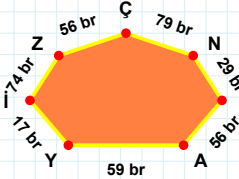
[Vİ] kenarı hangi şeklin kenarıdır?

- ☐ Beşgen
☐ Ters Beşgen
☐ Dikey Dikdörtgen



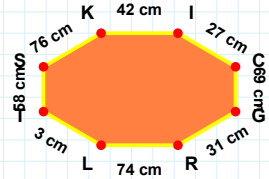
17 br hangi şeklin kenarıdır?

- ☐ Yedigen
☐ Altıgen
☐ Sekizgen



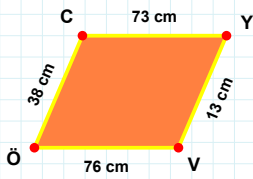
[ĞR] kenarı hangi şeklin kenarıdır?

- ☐ Yedigen
☐ Altıgen
☐ Sekizgen



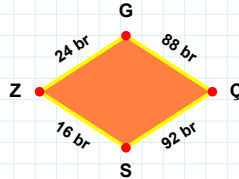
[ÜV] kenarı hangi şeklin kenarıdır?

- ☐ Altıgen
☐ Sekizgen
☐ Yedigen



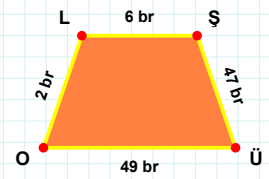
[ŞÜ] kenarı hangi şeklin kenarıdır?

- ☐ Eşkenar Dörtgen
☐ Yamuk
☐ Paralelkenar



[YV] kenarı hangi şeklin kenarıdır?

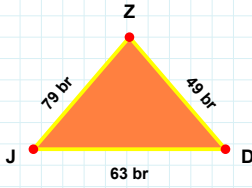
- ☐ Eşkenar Dörtgen
☐ Yamuk
☐ Paralelkenar



88 br hangi şeklin kenarıdır?

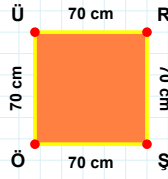
- ☐ Yamuk
☐ Paralelkenar
☐ Eşkenar Dörtgen

SORU: Aşağıdaki şekilleri inceleyiniz. Verilen kenar bilgisinin hangi şekle ait olduğunu işaretleyiniz.



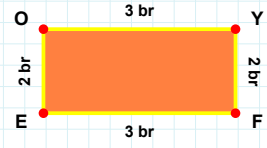
[ŞÖ] kenarı hangi şeklin kenarıdır?

- ☐ Üçgen
☐ Dikdörtgen
☐ Kare



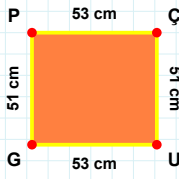
[YF] kenarı hangi şeklin kenarıdır?

- ☐ Üçgen
☐ Kare
☐ Dikdörtgen



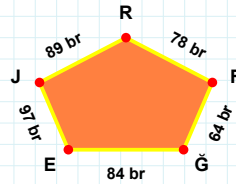
[JD] kenarı hangi şeklin kenarıdır?

- ☐ Kare
☐ Üçgen
☐ Dikdörtgen



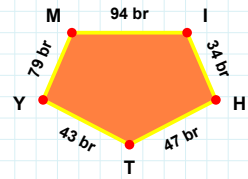
84 br hangi şeklin kenarıdır?

- ☐ Beşgen
☐ Ters Beşgen
☐ Dikey Dikdörtgen



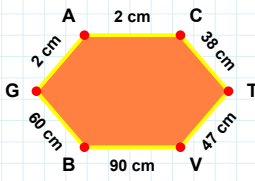
[IH] kenarı hangi şeklin kenarıdır?

- ☐ Dikey Dikdörtgen
☐ Beşgen
☐ Ters Beşgen



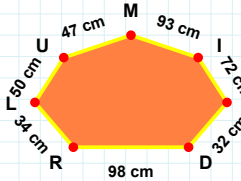
[GP] kenarı hangi şeklin kenarıdır?

- ☐ Ters Beşgen
☐ Beşgen
☐ Dikey Dikdörtgen



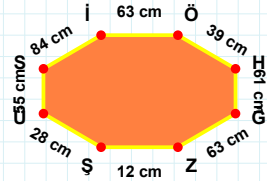
[İÖ] kenarı hangi şeklin kenarıdır?

- ☐ Yedigen
☐ Altıgen
☐ Sekizgen



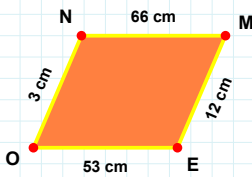
[BG] kenarı hangi şeklin kenarıdır?

- ☐ Altıgen
☐ Yedigen
☐ Sekizgen



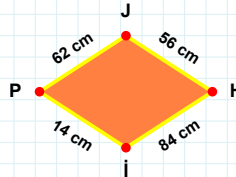
34 cm hangi şeklin kenarıdır?

- ☐ Sekizgen
☐ Yedigen
☐ Altıgen



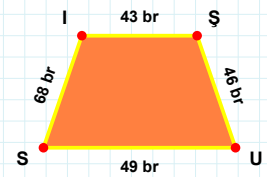
56 cm hangi şeklin kenarıdır?

- ☐ Paralelkenar
☐ Yamuk
☐ Eşkenar Dörtgen



[ŞU] kenarı hangi şeklin kenarıdır?

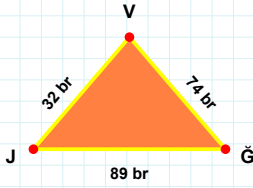
- ☐ Eşkenar Dörtgen
☐ Paralelkenar
☐ Yamuk



[ME] kenarı hangi şeklin kenarıdır?

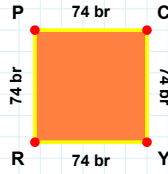
- ☐ Yamuk
☐ Eşkenar Dörtgen
☐ Paralelkenar

SORU: Aşağıdaki şekilleri inceleyiniz. Verilen kenar bilgisinin hangi şekle ait olduğunu işaretleyiniz.



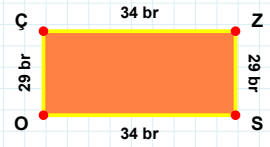
[CY] kenarı hangi şeklin kenarıdır?

- ☐ Kare
☐ Dikdörtgen
☐ Üçgen



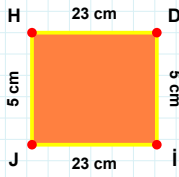
[SO] kenarı hangi şeklin kenarıdır?

- ☐ Üçgen
☐ Kare
☐ Dikdörtgen



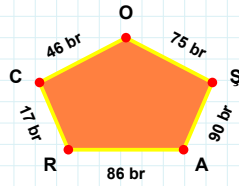
[VJ] kenarı hangi şeklin kenarıdır?

- ☐ Dikdörtgen
☐ Kare
☐ Üçgen



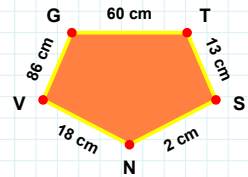
[TS] kenarı hangi şeklin kenarıdır?

- ☐ Beşgen
☐ Ters Beşgen
☐ Dikey Dikdörtgen



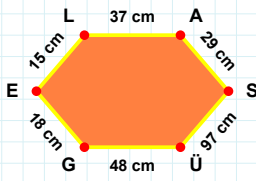
[DJ] kenarı hangi şeklin kenarıdır?

- ☐ Dikey Dikdörtgen
☐ Ters Beşgen
☐ Beşgen



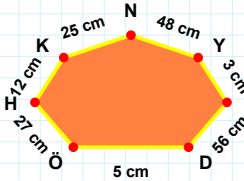
86 br hangi şeklin kenarıdır?

- ☐ Dikey Dikdörtgen
☐ Beşgen
☐ Ters Beşgen



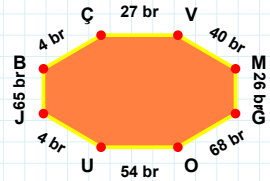
25 cm hangi şeklin kenarıdır?

- ☐ Altıgen
☐ Sekizgen
☐ Yedigen



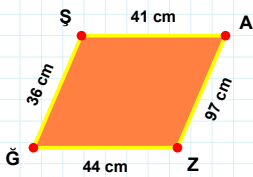
[UJ] kenarı hangi şeklin kenarıdır?

- ☐ Sekizgen
☐ Altıgen
☐ Yedigen



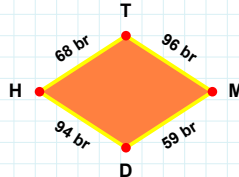
[AS] kenarı hangi şeklin kenarıdır?

- ☐ Yedigen
☐ Sekizgen
☐ Altıgen



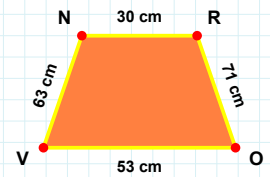
59 br hangi şeklin kenarıdır?

- ☐ Paralelkenar
☐ Eşkenar Dörtgen
☐ Yamuk



[RO] kenarı hangi şeklin kenarıdır?

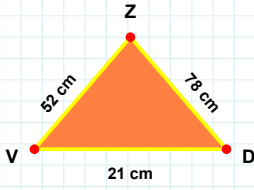
- ☐ Yamuk
☐ Eşkenar Dörtgen
☐ Paralelkenar



[ĞŞ] kenarı hangi şeklin kenarıdır?

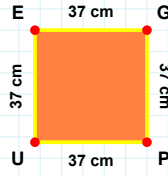
- ☐ Eşkenar Dörtgen
☐ Paralelkenar
☐ Yamuk

SORU: Aşağıdaki şekilleri inceleyiniz. Verilen kenar bilgisinin hangi şekle ait olduğunu işaretleyiniz.



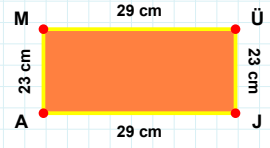
|AM| kenarı hangi şeklin kenarıdır?

- ☐ Dikdörtgen
☐ Kare
☐ Üçgen



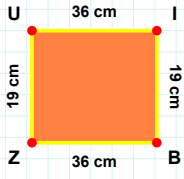
|DZ| kenarı hangi şeklin kenarıdır?

- ☐ Kare
☐ Dikdörtgen
☐ Üçgen



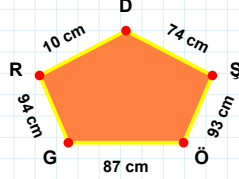
|PU| kenarı hangi şeklin kenarıdır?

- ☐ Üçgen
☐ Dikdörtgen
☐ Kare



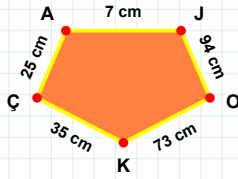
|ÇA| kenarı hangi şeklin kenarıdır?

- ☐ Beşgen
☐ Dikey Dikdörtgen
☐ Ters Beşgen



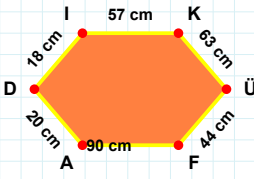
|IB| kenarı hangi şeklin kenarıdır?

- ☐ Beşgen
☐ Ters Beşgen
☐ Dikey Dikdörtgen



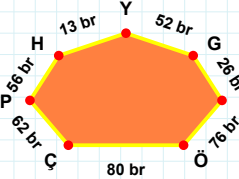
87 cm hangi şeklin kenarıdır?

- ☐ Ters Beşgen
☐ Dikey Dikdörtgen
☐ Beşgen



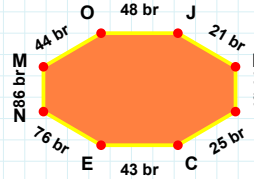
|NM| kenarı hangi şeklin kenarıdır?

- ☐ Sekizgen
☐ Yediggen
☐ Altıgen



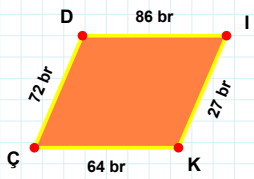
|KÜ| kenarı hangi şeklin kenarıdır?

- ☐ Yediggen
☐ Altıgen
☐ Sekizgen



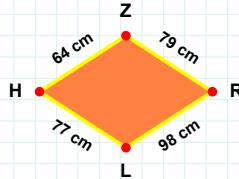
26 br hangi şeklin kenarıdır?

- ☐ Yediggen
☐ Sekizgen
☐ Altıgen



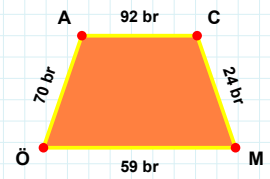
|ÖA| kenarı hangi şeklin kenarıdır?

- ☐ Eşkenar Dörtgen
☐ Paralelkenar
☐ Yamuk



|ÇD| kenarı hangi şeklin kenarıdır?

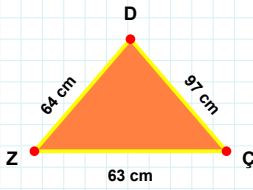
- ☐ Yamuk
☐ Paralelkenar
☐ Eşkenar Dörtgen



64 cm hangi şeklin kenarıdır?

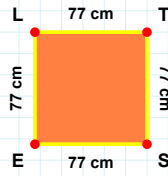
- ☐ Paralelkenar
☐ Eşkenar Dörtgen
☐ Yamuk

SORU: Aşağıdaki şekilleri inceleyiniz. Verilen kenar bilgisinin hangi şekle ait olduğunu işaretleyiniz.



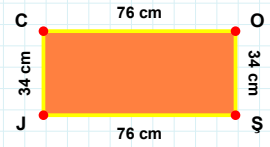
[TS] kenarı hangi şeklin kenarıdır?

- ☐ Kare
☐ Üçgen
☐ Dikdörtgen



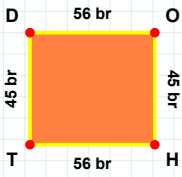
[JC] kenarı hangi şeklin kenarıdır?

- ☐ Üçgen
☐ Dikdörtgen
☐ Kare



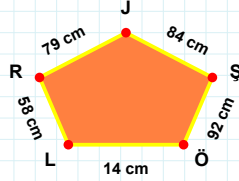
[DZ] kenarı hangi şeklin kenarıdır?

- ☐ Kare
☐ Üçgen
☐ Dikdörtgen



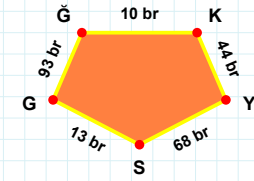
[GĞ] kenarı hangi şeklin kenarıdır?

- ☐ Ters Beşgen
☐ Dikey Dikdörtgen
☐ Beşgen



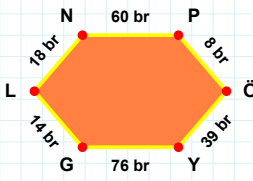
[TD] kenarı hangi şeklin kenarıdır?

- ☐ Dikey Dikdörtgen
☐ Beşgen
☐ Ters Beşgen



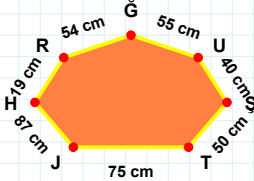
79 cm hangi şeklin kenarıdır?

- ☐ Ters Beşgen
☐ Dikey Dikdörtgen
☐ Beşgen



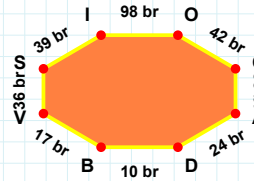
[AD] kenarı hangi şeklin kenarıdır?

- ☐ Yedigen
☐ Altıgen
☐ Sekizgen



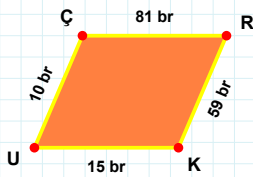
[YG] kenarı hangi şeklin kenarıdır?

- ☐ Altıgen
☐ Sekizgen
☐ Yedigen



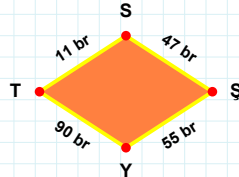
40 cm hangi şeklin kenarıdır?

- ☐ Sekizgen
☐ Altıgen
☐ Yedigen



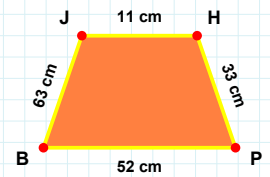
11 br hangi şeklin kenarıdır?

- ☐ Eşkenar Dörtgen
☐ Paralelkenar
☐ Yamuk



[HP] kenarı hangi şeklin kenarıdır?

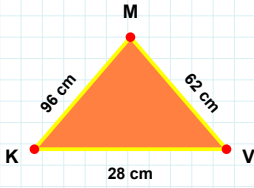
- ☐ Yamuk
☐ Eşkenar Dörtgen
☐ Paralelkenar



[ÇR] kenarı hangi şeklin kenarıdır?

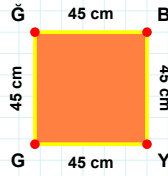
- ☐ Eşkenar Dörtgen
☐ Yamuk
☐ Paralelkenar

SORU: Aşağıdaki şekilleri inceleyiniz. Verilen kenar bilgisinin hangi şekle ait olduğunu işaretleyiniz.



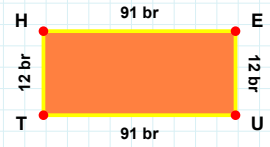
[UT] kenarı hangi şeklin kenarıdır?

- ☐ Üçgen
☐ Kare
☐ Dikdörtgen



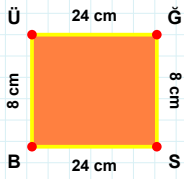
[VM] kenarı hangi şeklin kenarıdır?

- ☐ Üçgen
☐ Dikdörtgen
☐ Kare



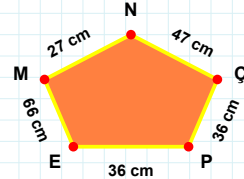
[GĞ] kenarı hangi şeklin kenarıdır?

- ☐ Üçgen
☐ Kare
☐ Dikdörtgen



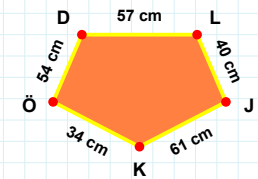
[ÖD] kenarı hangi şeklin kenarıdır?

- ☐ Ters Beşgen
☐ Beşgen
☐ Dikey Dikdörtgen



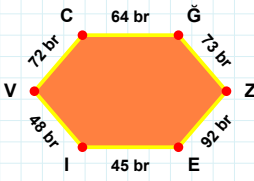
[BÜ] kenarı hangi şeklin kenarıdır?

- ☐ Dikey Dikdörtgen
☐ Ters Beşgen
☐ Beşgen



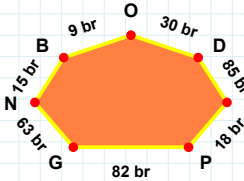
47 cm hangi şeklin kenarıdır?

- ☐ Ters Beşgen
☐ Dikey Dikdörtgen
☐ Beşgen



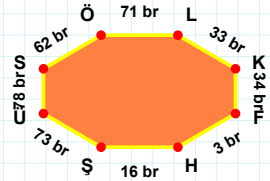
18 br hangi şeklin kenarıdır?

- ☐ Yedigen
☐ Altıgen
☐ Sekizgen



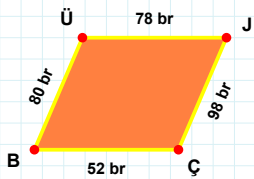
[KF] kenarı hangi şeklin kenarıdır?

- ☐ Yedigen
☐ Altıgen
☐ Sekizgen



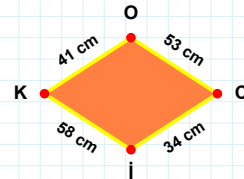
[ZE] kenarı hangi şeklin kenarıdır?

- ☐ Sekizgen
☐ Altıgen
☐ Yedigen



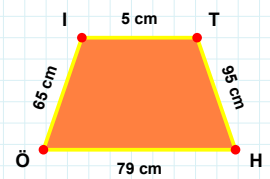
53 cm hangi şeklin kenarıdır?

- ☐ Yamuk
☐ Eşkenar Dörtgen
☐ Paralelkenar



[TH] kenarı hangi şeklin kenarıdır?

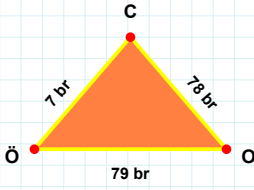
- ☐ Yamuk
☐ Paralelkenar
☐ Eşkenar Dörtgen



[JÇ] kenarı hangi şeklin kenarıdır?

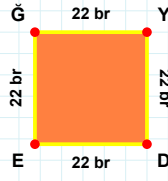
- ☐ Eşkenar Dörtgen
☐ Paralelkenar
☐ Yamuk

SORU: Aşağıdaki şekilleri inceleyiniz. Verilen kenar bilgisinin hangi şekle ait olduğunu işaretleyiniz.



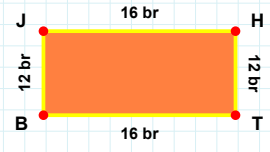
|YD| kenarı hangi şeklin kenarıdır?

- ☐ Üçgen
☐ Kare
☐ Dikdörtgen



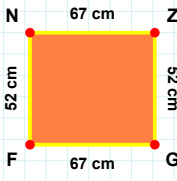
|HT| kenarı hangi şeklin kenarıdır?

- ☐ Dikdörtgen
☐ Kare
☐ Üçgen



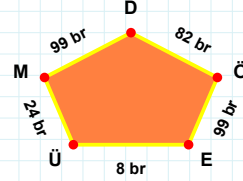
|OC| kenarı hangi şeklin kenarıdır?

- ☐ Üçgen
☐ Kare
☐ Dikdörtgen



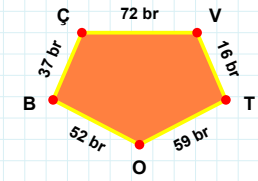
|OB| kenarı hangi şeklin kenarıdır?

- ☐ Dikey Dikdörtgen
☐ Beşgen
☐ Ters Beşgen



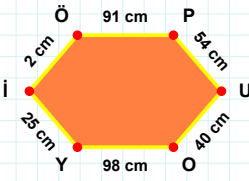
|ZG| kenarı hangi şeklin kenarıdır?

- ☐ Ters Beşgen
☐ Beşgen
☐ Dikey Dikdörtgen



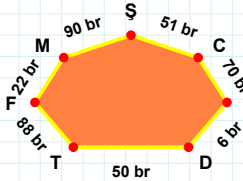
8 br hangi şeklin kenarıdır?

- ☐ Beşgen
☐ Dikey Dikdörtgen
☐ Ters Beşgen



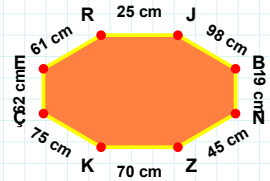
22 br hangi şeklin kenarıdır?

- ☐ Altıgen
☐ Yediggen
☐ Sekizgen



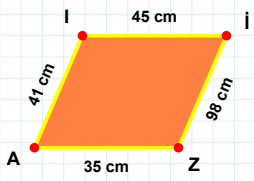
|ZK| kenarı hangi şeklin kenarıdır?

- ☐ Sekizgen
☐ Yediggen
☐ Altıgen



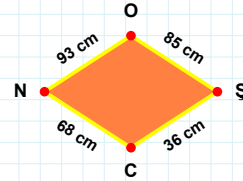
|OY| kenarı hangi şeklin kenarıdır?

- ☐ Yediggen
☐ Sekizgen
☐ Altıgen



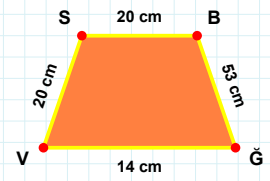
|BĞ| kenarı hangi şeklin kenarıdır?

- ☐ Yamuk
☐ Paralelkenar
☐ Eşkenar Dörtgen



|İİ| kenarı hangi şeklin kenarıdır?

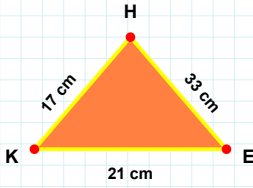
- ☐ Paralelkenar
☐ Yamuk
☐ Eşkenar Dörtgen



36 cm hangi şeklin kenarıdır?

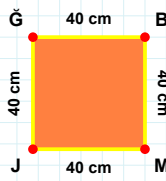
- ☐ Yamuk
☐ Paralelkenar
☐ Eşkenar Dörtgen

SORU: Aşağıdaki şekilleri inceleyiniz. Verilen kenar bilgisinin hangi şekle ait olduğunu işaretleyiniz.



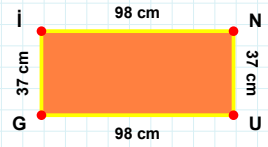
[Gİ] kenarı hangi şeklin kenarıdır?

- ☐ Dikdörtgen
☐ Kare
☐ Üçgen



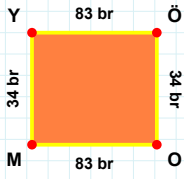
[HK] kenarı hangi şeklin kenarıdır?

- ☐ Kare
☐ Dikdörtgen
☐ Üçgen



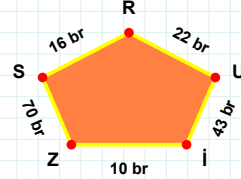
[GB] kenarı hangi şeklin kenarıdır?

- ☐ Kare
☐ Dikdörtgen
☐ Üçgen



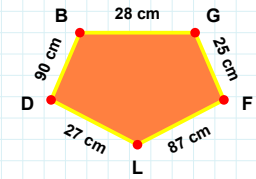
43 br hangi şeklin kenarıdır?

- ☐ Beşgen
☐ Ters Beşgen
☐ Dikey Dikdörtgen



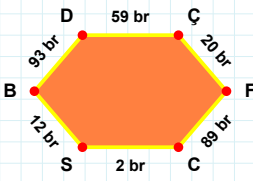
[DB] kenarı hangi şeklin kenarıdır?

- ☐ Ters Beşgen
☐ Dikey Dikdörtgen
☐ Beşgen



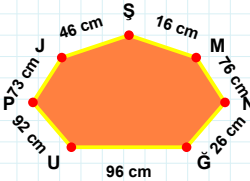
[ÖO] kenarı hangi şeklin kenarıdır?

- ☐ Dikey Dikdörtgen
☐ Ters Beşgen
☐ Beşgen



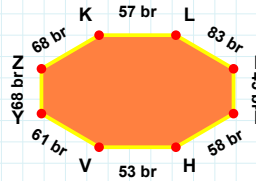
[VY] kenarı hangi şeklin kenarıdır?

- ☐ Sekizgen
☐ Altıgen
☐ Yedigen



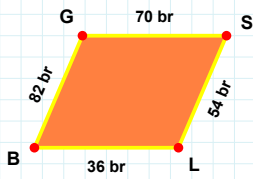
[ÇF] kenarı hangi şeklin kenarıdır?

- ☐ Yedigen
☐ Sekizgen
☐ Altıgen



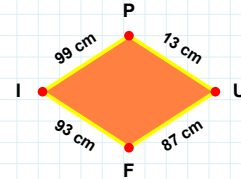
26 cm hangi şeklin kenarıdır?

- ☐ Sekizgen
☐ Yedigen
☐ Altıgen



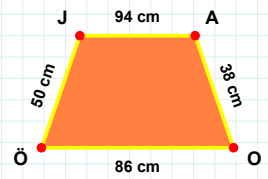
13 cm hangi şeklin kenarıdır?

- ☐ Yamuk
☐ Paralelkenar
☐ Eşkenar Dörtgen



[ÖJ] kenarı hangi şeklin kenarıdır?

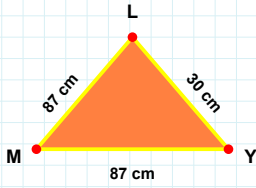
- ☐ Paralelkenar
☐ Eşkenar Dörtgen
☐ Yamuk



[BG] kenarı hangi şeklin kenarıdır?

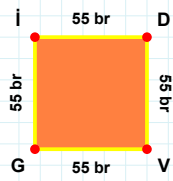
- ☐ Yamuk
☐ Eşkenar Dörtgen
☐ Paralelkenar

SORU: Aşağıdaki şekilleri inceleyiniz. Verilen kenar bilgisinin hangi şekle ait olduğunu işaretleyiniz.



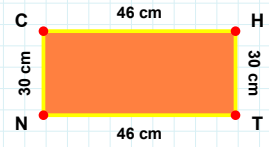
[NC] kenarı hangi şeklin kenarıdır?

- ☐ Üçgen
☐ Kare
☐ Dikdörtgen



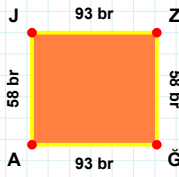
[MY] kenarı hangi şeklin kenarıdır?

- ☐ Dikdörtgen
☐ Kare
☐ Üçgen



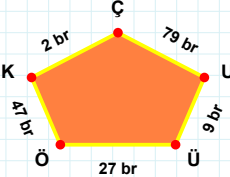
[GI] kenarı hangi şeklin kenarıdır?

- ☐ Üçgen
☐ Kare
☐ Dikdörtgen



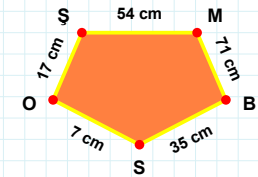
[OŞ] kenarı hangi şeklin kenarıdır?

- ☐ Beşgen
☐ Dikey Dikdörtgen
☐ Ters Beşgen



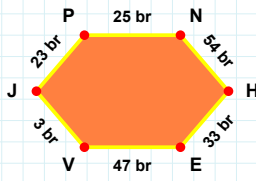
[GA] kenarı hangi şeklin kenarıdır?

- ☐ Ters Beşgen
☐ Beşgen
☐ Dikey Dikdörtgen



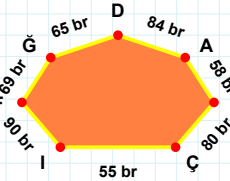
47 br hangi şeklin kenarıdır?

- ☐ Ters Beşgen
☐ Beşgen
☐ Dikey Dikdörtgen



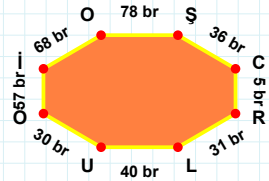
[CR] kenarı hangi şeklin kenarıdır?

- ☐ Altıgen
☐ Yediggen
☐ Sekizgen



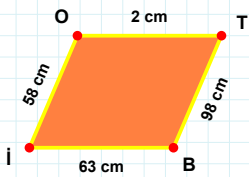
[PN] kenarı hangi şeklin kenarıdır?

- ☐ Altıgen
☐ Yediggen
☐ Sekizgen



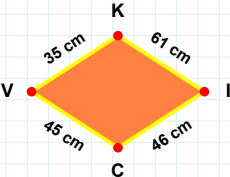
58 br hangi şeklin kenarıdır?

- ☐ Sekizgen
☐ Yediggen
☐ Altıgen



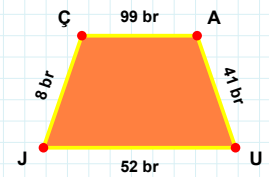
35 cm hangi şeklin kenarıdır?

- ☐ Eşkenar Dörtgen
☐ Yamuk
☐ Paralelkenar



[AU] kenarı hangi şeklin kenarıdır?

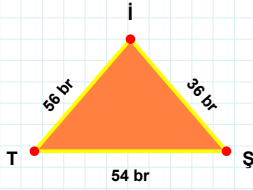
- ☐ Eşkenar Dörtgen
☐ Paralelkenar
☐ Yamuk



[Bİ] kenarı hangi şeklin kenarıdır?

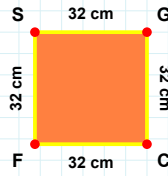
- ☐ Yamuk
☐ Paralelkenar
☐ Eşkenar Dörtgen

SORU: Aşağıdaki şekilleri inceleyiniz. Verilen kenar bilgisinin hangi şekle ait olduğunu işaretleyiniz.



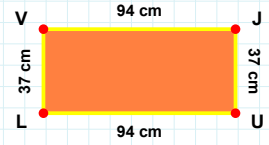
[SG] kenarı hangi şeklin kenarıdır?

- ☐ Kare
☐ Dikdörtgen
☐ Üçgen



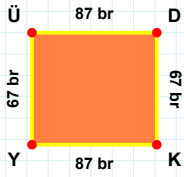
[LV] kenarı hangi şeklin kenarıdır?

- ☐ Dikdörtgen
☐ Üçgen
☐ Kare



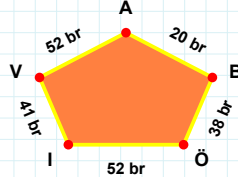
[İT] kenarı hangi şeklin kenarıdır?

- ☐ Kare
☐ Üçgen
☐ Dikdörtgen



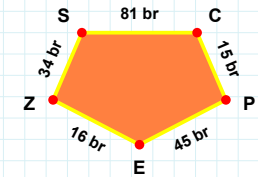
[PE] kenarı hangi şeklin kenarıdır?

- ☐ Ters Beşgen
☐ Beşgen
☐ Dikey Dikdörtgen



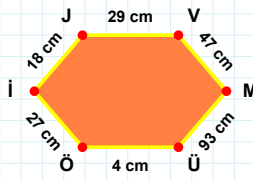
[DK] kenarı hangi şeklin kenarıdır?

- ☐ Ters Beşgen
☐ Beşgen
☐ Dikey Dikdörtgen



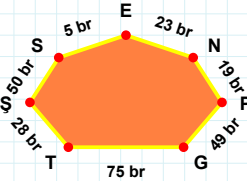
38 br hangi şeklin kenarıdır?

- ☐ Ters Beşgen
☐ Beşgen
☐ Dikey Dikdörtgen



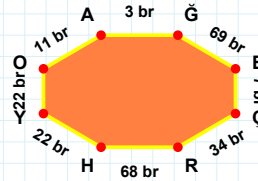
75 br hangi şeklin kenarıdır?

- ☐ Sekizgen
☐ Yediggen
☐ Altıgen



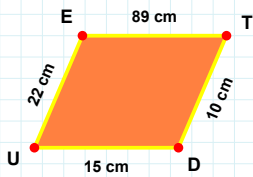
[YO] kenarı hangi şeklin kenarıdır?

- ☐ Sekizgen
☐ Yediggen
☐ Altıgen



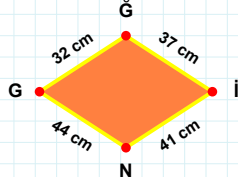
[MÜ] kenarı hangi şeklin kenarıdır?

- ☐ Altıgen
☐ Sekizgen
☐ Yediggen



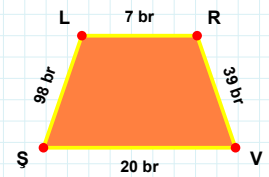
41 cm hangi şeklin kenarıdır?

- ☐ Yamuk
☐ Paralelkenar
☐ Eşkenar Dörtgen



[VŞ] kenarı hangi şeklin kenarıdır?

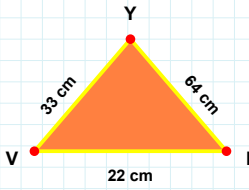
- ☐ Yamuk
☐ Eşkenar Dörtgen
☐ Paralelkenar



[UE] kenarı hangi şeklin kenarıdır?

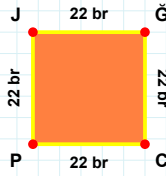
- ☐ Yamuk
☐ Eşkenar Dörtgen
☐ Paralelkenar

SORU: Aşağıdaki şekilleri inceleyiniz. Verilen kenar bilgisinin hangi şekle ait olduğunu işaretleyiniz.



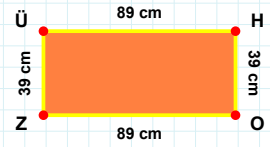
[HO] kenarı hangi şeklin kenarıdır?

- ☐ Dikdörtgen
☐ Kare
☐ Üçgen



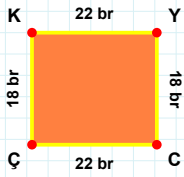
[VI] kenarı hangi şeklin kenarıdır?

- ☐ Kare
☐ Üçgen
☐ Dikdörtgen



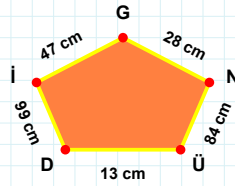
[JĞ] kenarı hangi şeklin kenarıdır?

- ☐ Üçgen
☐ Dikdörtgen
☐ Kare



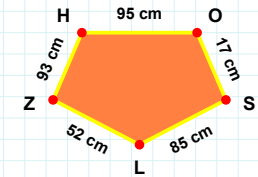
[ZH] kenarı hangi şeklin kenarıdır?

- ☐ Beşgen
☐ Dikey Dikdörtgen
☐ Ters Beşgen



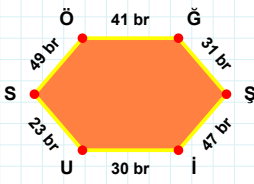
[CÇ] kenarı hangi şeklin kenarıdır?

- ☐ Ters Beşgen
☐ Dikey Dikdörtgen
☐ Beşgen



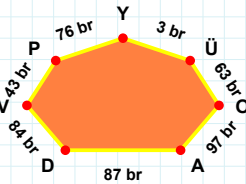
84 cm hangi şeklin kenarıdır?

- ☐ Dikey Dikdörtgen
☐ Beşgen
☐ Ters Beşgen



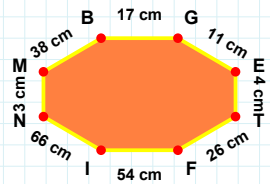
[FI] kenarı hangi şeklin kenarıdır?

- ☐ Altıgen
☐ Yediggen
☐ Sekizgen



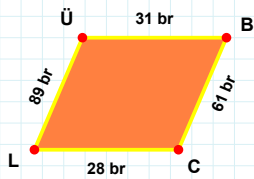
[ĞŞ] kenarı hangi şeklin kenarıdır?

- ☐ Altıgen
☐ Yediggen
☐ Sekizgen



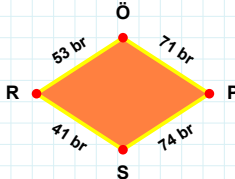
87 br hangi şeklin kenarıdır?

- ☐ Sekizgen
☐ Yediggen
☐ Altıgen



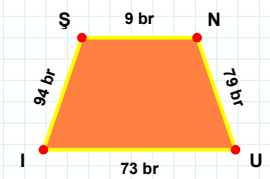
71 br hangi şeklin kenarıdır?

- ☐ Eşkenar Dörtgen
☐ Yamuk
☐ Paralelkenar



[SN] kenarı hangi şeklin kenarıdır?

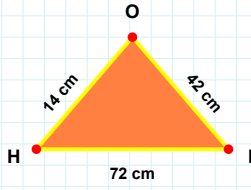
- ☐ Paralelkenar
☐ Yamuk
☐ Eşkenar Dörtgen



[ÜB] kenarı hangi şeklin kenarıdır?

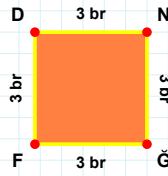
- ☐ Eşkenar Dörtgen
☐ Paralelkenar
☐ Yamuk

SORU: Aşağıdaki şekilleri inceleyiniz. Verilen kenar bilgisinin hangi şekle ait olduğunu işaretleyiniz.



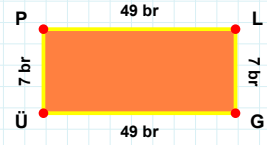
[FH] kenarı hangi şeklin kenarıdır?

- ☐ Üçgen
☐ Dikdörtgen
☐ Kare



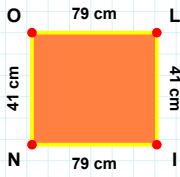
[GÜ] kenarı hangi şeklin kenarıdır?

- ☐ Kare
☐ Üçgen
☐ Dikdörtgen



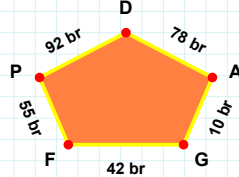
[IO] kenarı hangi şeklin kenarıdır?

- ☐ Dikdörtgen
☐ Üçgen
☐ Kare



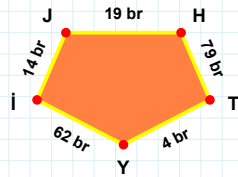
55 br hangi şeklin kenarıdır?

- ☐ Beşgen
☐ Dikey Dikdörtgen
☐ Ters Beşgen



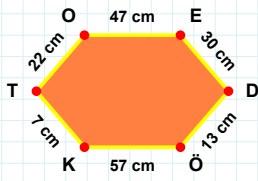
[Yİ] kenarı hangi şeklin kenarıdır?

- ☐ Ters Beşgen
☐ Dikey Dikdörtgen
☐ Beşgen



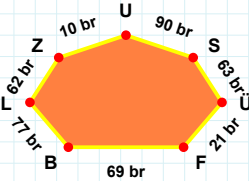
[NO] kenarı hangi şeklin kenarıdır?

- ☐ Beşgen
☐ Dikey Dikdörtgen
☐ Ters Beşgen



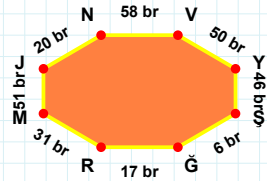
10 br hangi şeklin kenarıdır?

- ☐ Yedigen
☐ Altıgen
☐ Sekizgen



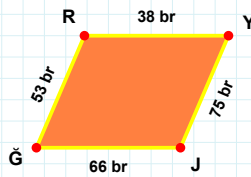
[JN] kenarı hangi şeklin kenarıdır?

- ☐ Sekizgen
☐ Altıgen
☐ Yedigen



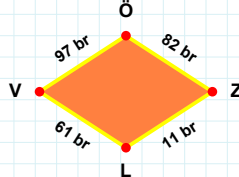
[ÖK] kenarı hangi şeklin kenarıdır?

- ☐ Sekizgen
☐ Altıgen
☐ Yedigen



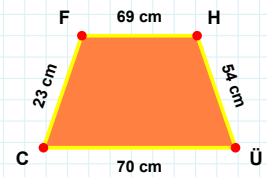
[ÜC] kenarı hangi şeklin kenarıdır?

- ☐ Yamuk
☐ Paralelkenar
☐ Eşkenar Dörtgen



[JĞ] kenarı hangi şeklin kenarıdır?

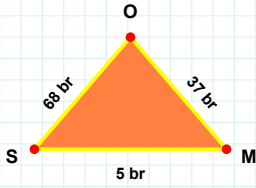
- ☐ Paralelkenar
☐ Yamuk
☐ Eşkenar Dörtgen



11 br hangi şeklin kenarıdır?

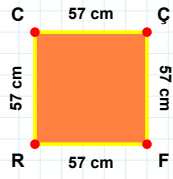
- ☐ Eşkenar Dörtgen
☐ Yamuk
☐ Paralelkenar

SORU: Aşağıdaki şekilleri inceleyiniz. Verilen kenar bilgisinin hangi şekle ait olduğunu işaretleyiniz.



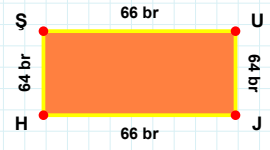
[CÇ] kenarı hangi şeklin kenarıdır?

- ☐ Dikdörtgen
☐ Kare
☐ Üçgen



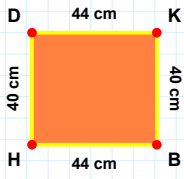
[ŞÜ] kenarı hangi şeklin kenarıdır?

- ☐ Üçgen
☐ Kare
☐ Dikdörtgen



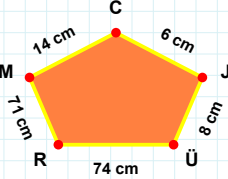
[SM] kenarı hangi şeklin kenarıdır?

- ☐ Dikdörtgen
☐ Kare
☐ Üçgen



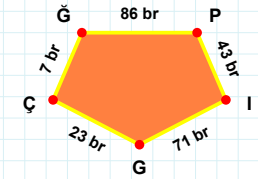
71 cm hangi şeklin kenarıdır?

- ☐ Beşgen
☐ Ters Beşgen
☐ Dikey Dikdörtgen



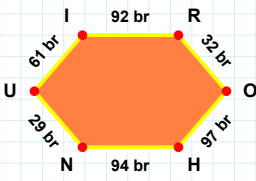
[GP] kenarı hangi şeklin kenarıdır?

- ☐ Dikey Dikdörtgen
☐ Ters Beşgen
☐ Beşgen



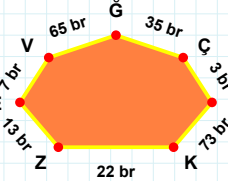
[KB] kenarı hangi şeklin kenarıdır?

- ☐ Ters Beşgen
☐ Beşgen
☐ Dikey Dikdörtgen



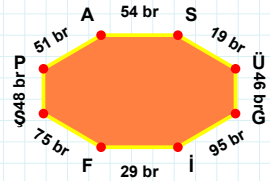
73 br hangi şeklin kenarıdır?

- ☐ Yedigen
☐ Sekizgen
☐ Altıgen



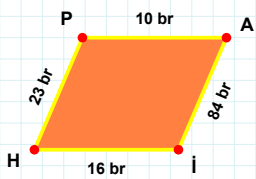
[SÜ] kenarı hangi şeklin kenarıdır?

- ☐ Yedigen
☐ Sekizgen
☐ Altıgen



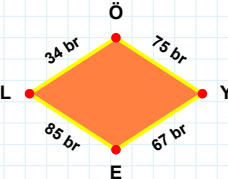
[UI] kenarı hangi şeklin kenarıdır?

- ☐ Sekizgen
☐ Yedigen
☐ Altıgen



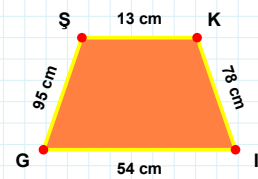
75 br hangi şeklin kenarıdır?

- ☐ Paralelkenar
☐ Eşkenar Dörtgen
☐ Yamuk



[GŞ] kenarı hangi şeklin kenarıdır?

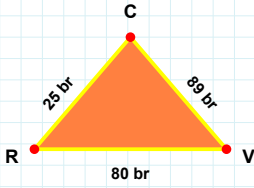
- ☐ Eşkenar Dörtgen
☐ Yamuk
☐ Paralelkenar



[İH] kenarı hangi şeklin kenarıdır?

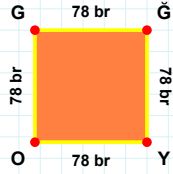
- ☐ Eşkenar Dörtgen
☐ Yamuk
☐ Paralelkenar

SORU: Aşağıdaki şekilleri inceleyiniz. Verilen kenar bilgisinin hangi şekle ait olduğunu işaretleyiniz.



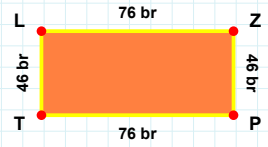
[LZ] kenarı hangi şeklin kenarıdır?

- ☐ Kare
☐ Dikdörtgen
☐ Üçgen



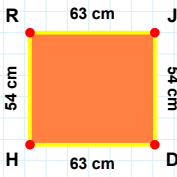
[CR] kenarı hangi şeklin kenarıdır?

- ☐ Dikdörtgen
☐ Kare
☐ Üçgen



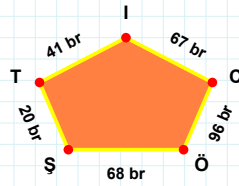
[GY] kenarı hangi şeklin kenarıdır?

- ☐ Kare
☐ Üçgen
☐ Dikdörtgen



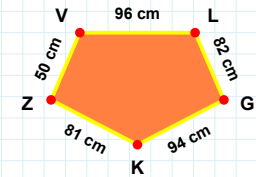
20 br hangi şeklin kenarıdır?

- ☐ Dikey Dikdörtgen
☐ Ters Beşgen
☐ Beşgen



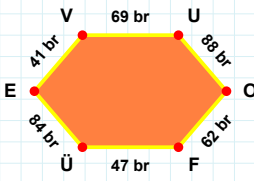
[KZ] kenarı hangi şeklin kenarıdır?

- ☐ Dikey Dikdörtgen
☐ Beşgen
☐ Ters Beşgen



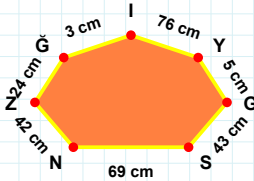
[HR] kenarı hangi şeklin kenarıdır?

- ☐ Beşgen
☐ Ters Beşgen
☐ Dikey Dikdörtgen



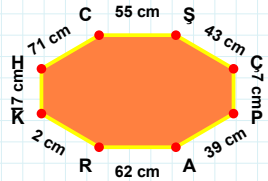
42 cm hangi şeklin kenarıdır?

- ☐ Sekizgen
☐ Altıgen
☐ Yedigen



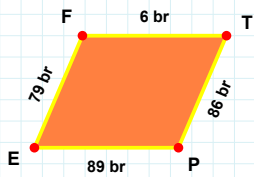
[HC] kenarı hangi şeklin kenarıdır?

- ☐ Altıgen
☐ Yedigen
☐ Sekizgen



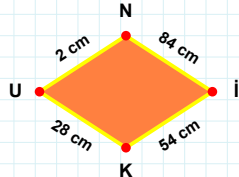
[OF] kenarı hangi şeklin kenarıdır?

- ☐ Yedigen
☐ Altıgen
☐ Sekizgen



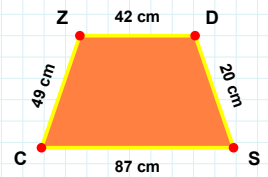
84 cm hangi şeklin kenarıdır?

- ☐ Paralelkenar
☐ Yamuk
☐ Eşkenar Dörtgen



[CZ] kenarı hangi şeklin kenarıdır?

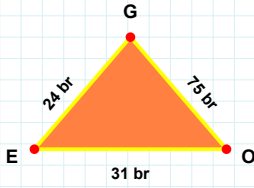
- ☐ Yamuk
☐ Eşkenar Dörtgen
☐ Paralelkenar



[TP] kenarı hangi şeklin kenarıdır?

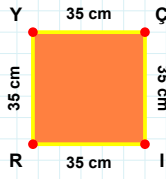
- ☐ Eşkenar Dörtgen
☐ Yamuk
☐ Paralelkenar

SORU: Aşağıdaki şekilleri inceleyiniz. Verilen kenar bilgisinin hangi şekle ait olduğunu işaretleyiniz.



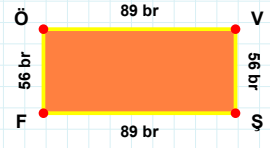
[RY] kenarı hangi şeklin kenarıdır?

- ☐ Kare
☐ Üçgen
☐ Dikdörtgen



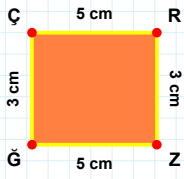
[ŞF] kenarı hangi şeklin kenarıdır?

- ☐ Üçgen
☐ Kare
☐ Dikdörtgen



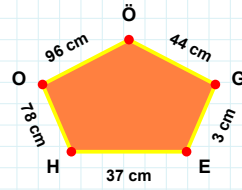
[OG] kenarı hangi şeklin kenarıdır?

- ☐ Dikdörtgen
☐ Üçgen
☐ Kare



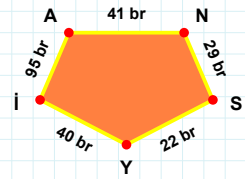
[NS] kenarı hangi şeklin kenarıdır?

- ☐ Beşgen
☐ Dikey Dikdörtgen
☐ Ters Beşgen



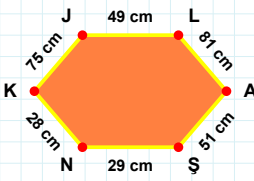
[ĞÇ] kenarı hangi şeklin kenarıdır?

- ☐ Beşgen
☐ Ters Beşgen
☐ Dikey Dikdörtgen



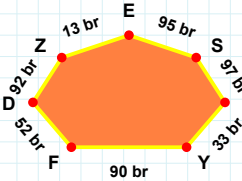
37 cm hangi şeklin kenarıdır?

- ☐ Dikey Dikdörtgen
☐ Ters Beşgen
☐ Beşgen



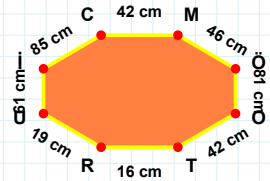
[MÖ] kenarı hangi şeklin kenarıdır?

- ☐ Sekizgen
☐ Yediggen
☐ Altıgen



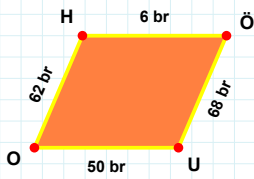
[AŞ] kenarı hangi şeklin kenarıdır?

- ☐ Yediggen
☐ Altıgen
☐ Sekizgen



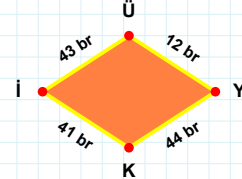
13 br hangi şeklin kenarıdır?

- ☐ Sekizgen
☐ Yediggen
☐ Altıgen



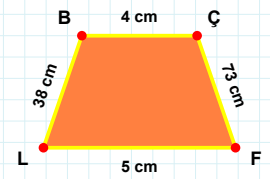
43 br hangi şeklin kenarıdır?

- ☐ Eşkenar Dörtgen
☐ Paralelkenar
☐ Yamuk



[ÇF] kenarı hangi şeklin kenarıdır?

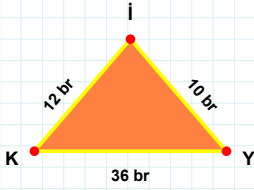
- ☐ Yamuk
☐ Paralelkenar
☐ Eşkenar Dörtgen



[ÖÜ] kenarı hangi şeklin kenarıdır?

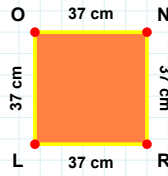
- ☐ Yamuk
☐ Paralelkenar
☐ Eşkenar Dörtgen

SORU: Aşağıdaki şekilleri inceleyiniz. Verilen kenar bilgisinin hangi şekle ait olduğunu işaretleyiniz.



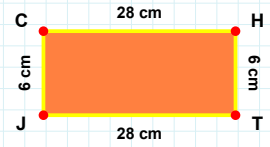
[KI] kenarı hangi şeklin kenarıdır?

- ☐ Dikdörtgen
☐ Kare
☐ Üçgen



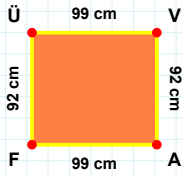
[YL] kenarı hangi şeklin kenarıdır?

- ☐ Kare
☐ Üçgen
☐ Dikdörtgen



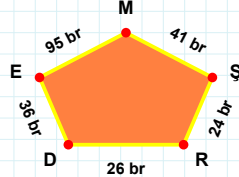
[LO] kenarı hangi şeklin kenarıdır?

- ☐ Üçgen
☐ Kare
☐ Dikdörtgen



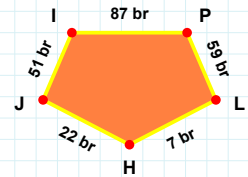
24 br hangi şeklin kenarıdır?

- ☐ Dikey Dikdörtgen
☐ Beşgen
☐ Ters Beşgen



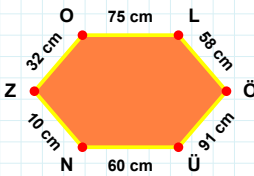
[PL] kenarı hangi şeklin kenarıdır?

- ☐ Beşgen
☐ Dikey Dikdörtgen
☐ Ters Beşgen



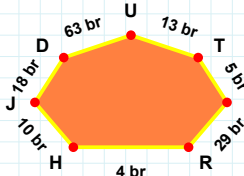
[VA] kenarı hangi şeklin kenarıdır?

- ☐ Beşgen
☐ Ters Beşgen
☐ Dikey Dikdörtgen



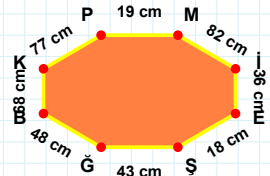
18 br hangi şeklin kenarıdır?

- ☐ Sekizgen
☐ Yedigen
☐ Altigen



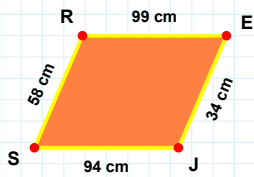
[MI] kenarı hangi şeklin kenarıdır?

- ☐ Sekizgen
☐ Altigen
☐ Yedigen



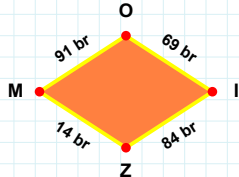
[NZ] kenarı hangi şeklin kenarıdır?

- ☐ Sekizgen
☐ Yedigen
☐ Altigen



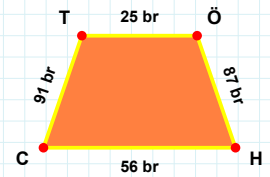
69 br hangi şeklin kenarıdır?

- ☐ Paralelkenar
☐ Eşkenar Dörtgen
☐ Yamuk



[CT] kenarı hangi şeklin kenarıdır?

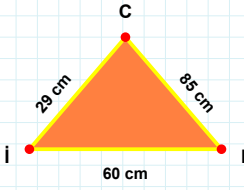
- ☐ Eşkenar Dörtgen
☐ Paralelkenar
☐ Yamuk



[JS] kenarı hangi şeklin kenarıdır?

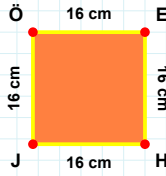
- ☐ Eşkenar Dörtgen
☐ Paralelkenar
☐ Yamuk

SORU: Aşağıdaki şekilleri inceleyiniz. Verilen kenar bilgisinin hangi şekle ait olduğunu işaretleyiniz.



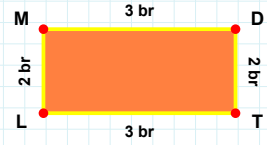
[TL] kenarı hangi şeklin kenarıdır?

- ☐ Kare
☐ Dikdörtgen
☐ Üçgen



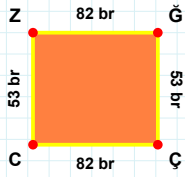
[JC] kenarı hangi şeklin kenarıdır?

- ☐ Üçgen
☐ Dikdörtgen
☐ Kare



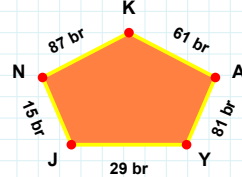
[ÖE] kenarı hangi şeklin kenarıdır?

- ☐ Üçgen
☐ Kare
☐ Dikdörtgen



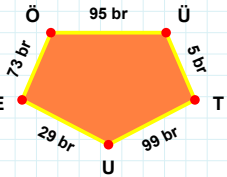
[ÖÜ] kenarı hangi şeklin kenarıdır?

- ☐ Dikey Dikdörtgen
☐ Beşgen
☐ Ters Beşgen



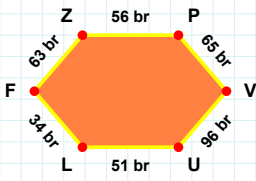
[ZG] kenarı hangi şeklin kenarıdır?

- ☐ Beşgen
☐ Ters Beşgen
☐ Dikey Dikdörtgen



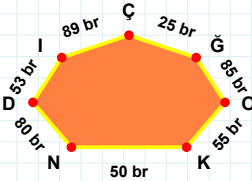
87 br hangi şeklin kenarıdır?

- ☐ Dikey Dikdörtgen
☐ Beşgen
☐ Ters Beşgen



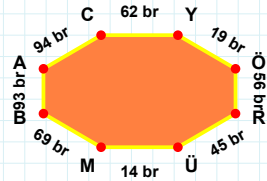
53 br hangi şeklin kenarıdır?

- ☐ Sekizgen
☐ Altıgen
☐ Yedigen



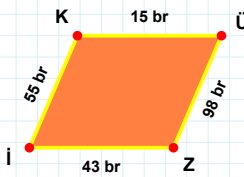
[AC] kenarı hangi şeklin kenarıdır?

- ☐ Altıgen
☐ Sekizgen
☐ Yedigen



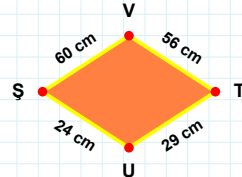
[LF] kenarı hangi şeklin kenarıdır?

- ☐ Sekizgen
☐ Altıgen
☐ Yedigen



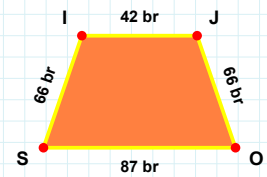
60 cm hangi şeklin kenarıdır?

- ☐ Eşkenar Dörtgen
☐ Yamuk
☐ Paralelkenar



[IJ] kenarı hangi şeklin kenarıdır?

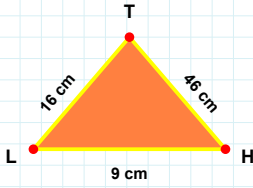
- ☐ Eşkenar Dörtgen
☐ Paralelkenar
☐ Yamuk



[IK] kenarı hangi şeklin kenarıdır?

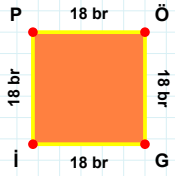
- ☐ Paralelkenar
☐ Eşkenar Dörtgen
☐ Yamuk

SORU: Aşağıdaki şekilleri inceleyiniz. Verilen kenar bilgisinin hangi şekle ait olduğunu işaretleyiniz.



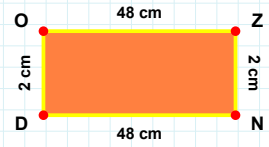
[|P|] kenarı hangi şeklin kenarıdır?

- ☐ Üçgen
☐ Kare
☐ Dikdörtgen



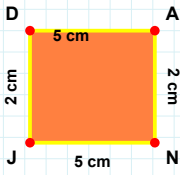
[|ND|] kenarı hangi şeklin kenarıdır?

- ☐ Dikdörtgen
☐ Kare
☐ Üçgen



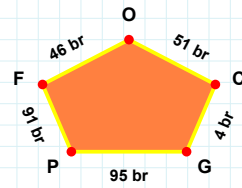
[|TL|] kenarı hangi şeklin kenarıdır?

- ☐ Dikdörtgen
☐ Üçgen
☐ Kare



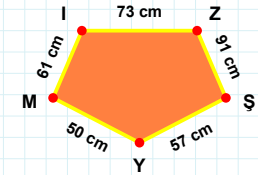
[|Z|] kenarı hangi şeklin kenarıdır?

- ☐ Beşgen
☐ Ters Beşgen
☐ Dikey Dikdörtgen



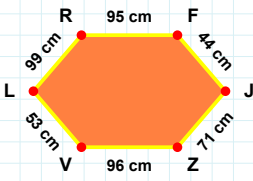
[|JD|] kenarı hangi şeklin kenarıdır?

- ☐ Beşgen
☐ Ters Beşgen
☐ Dikey Dikdörtgen



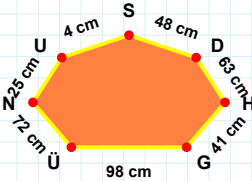
4 br hangi şeklin kenarıdır?

- ☐ Beşgen
☐ Dikey Dikdörtgen
☐ Ters Beşgen



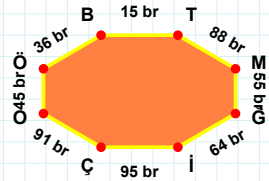
[|BT|] kenarı hangi şeklin kenarıdır?

- ☐ Sekizgen
☐ Yediggen
☐ Altıgen



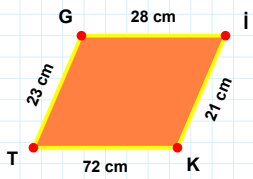
[|ZV|] kenarı hangi şeklin kenarıdır?

- ☐ Altıgen
☐ Sekizgen
☐ Yediggen



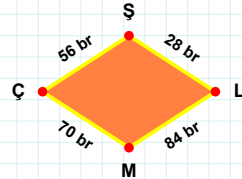
63 cm hangi şeklin kenarıdır?

- ☐ Yediggen
☐ Sekizgen
☐ Altıgen



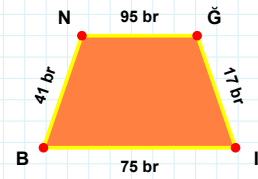
[|NĞ|] kenarı hangi şeklin kenarıdır?

- ☐ Yamuk
☐ Paralelkenar
☐ Eşkenar Dörtgen



[|KT|] kenarı hangi şeklin kenarıdır?

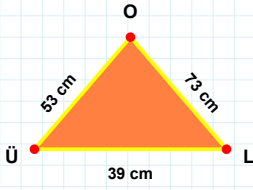
- ☐ Paralelkenar
☐ Eşkenar Dörtgen
☐ Yamuk



56 br hangi şeklin kenarıdır?

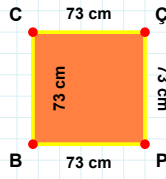
- ☐ Eşkenar Dörtgen
☐ Paralelkenar
☐ Yamuk

SORU: Aşağıdaki şekilleri inceleyiniz. Verilen kenar bilgisinin hangi şekle ait olduğunu işaretleyiniz.



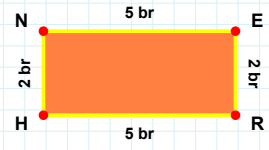
[ER] kenarı hangi şeklin kenarıdır?

- ☐ Kare
☐ Üçgen
☐ Dikdörtgen



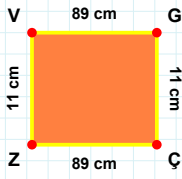
[LO] kenarı hangi şeklin kenarıdır?

- ☐ Dikdörtgen
☐ Üçgen
☐ Kare



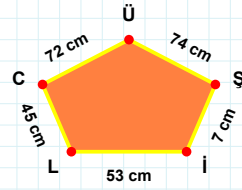
[CÇ] kenarı hangi şeklin kenarıdır?

- ☐ Kare
☐ Dikdörtgen
☐ Üçgen



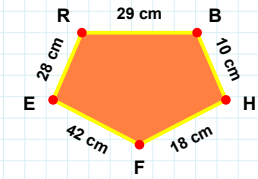
72 cm hangi şeklin kenarıdır?

- ☐ Dikey Dikdörtgen
☐ Beşgen
☐ Ters Beşgen



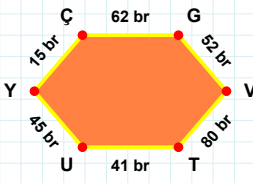
[ER] kenarı hangi şeklin kenarıdır?

- ☐ Dikey Dikdörtgen
☐ Beşgen
☐ Ters Beşgen



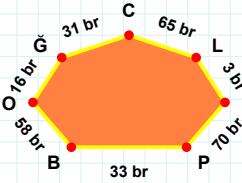
[VG] kenarı hangi şeklin kenarıdır?

- ☐ Beşgen
☐ Ters Beşgen
☐ Dikey Dikdörtgen



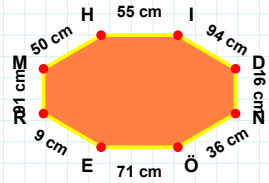
65 br hangi şeklin kenarıdır?

- ☐ Altıgen
☐ Sekizgen
☐ Yediggen



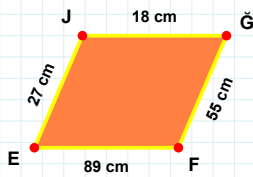
[NÖ] kenarı hangi şeklin kenarıdır?

- ☐ Yediggen
☐ Altıgen
☐ Sekizgen



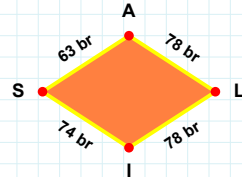
[UY] kenarı hangi şeklin kenarıdır?

- ☐ Altıgen
☐ Yediggen
☐ Sekizgen



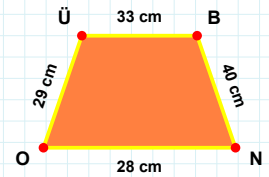
[BN] kenarı hangi şeklin kenarıdır?

- ☐ Eşkenar Dörtgen
☐ Yamuk
☐ Paralelkenar



[GF] kenarı hangi şeklin kenarıdır?

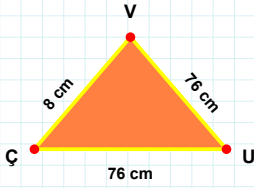
- ☐ Paralelkenar
☐ Eşkenar Dörtgen
☐ Yamuk



74 br hangi şeklin kenarıdır?

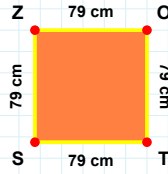
- ☐ Eşkenar Dörtgen
☐ Paralelkenar
☐ Yamuk

SORU: Aşağıdaki şekilleri inceleyiniz. Verilen kenar bilgisinin hangi şekle ait olduğunu işaretleyiniz.



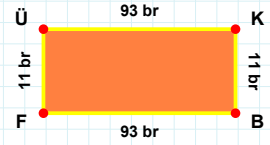
[SZ] kenarı hangi şeklin kenarıdır?

- ☐ Üçgen
☐ Kare
☐ Dikdörtgen



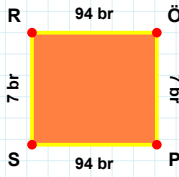
[BF] kenarı hangi şeklin kenarıdır?

- ☐ Kare
☐ Dikdörtgen
☐ Üçgen



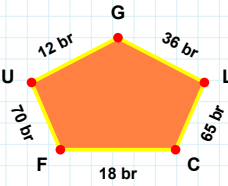
[VÇ] kenarı hangi şeklin kenarıdır?

- ☐ Dikdörtgen
☐ Üçgen
☐ Kare



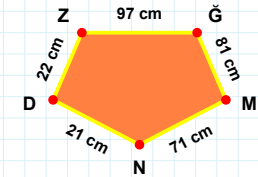
18 br hangi şeklin kenarıdır?

- ☐ Dikey Dikdörtgen
☐ Beşgen
☐ Ters Beşgen



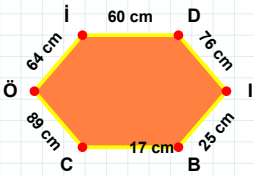
[DZ] kenarı hangi şeklin kenarıdır?

- ☐ Ters Beşgen
☐ Beşgen
☐ Dikey Dikdörtgen



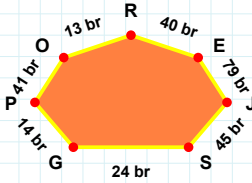
[ÖP] kenarı hangi şeklin kenarıdır?

- ☐ Ters Beşgen
☐ Dikey Dikdörtgen
☐ Beşgen



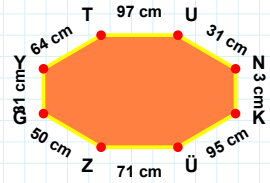
14 br hangi şeklin kenarıdır?

- ☐ Sekizgen
☐ Altıgen
☐ Yediggen



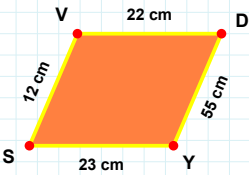
[YT] kenarı hangi şeklin kenarıdır?

- ☐ Altıgen
☐ Yediggen
☐ Sekizgen



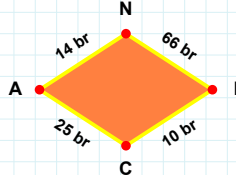
[CÖ] kenarı hangi şeklin kenarıdır?

- ☐ Altıgen
☐ Yediggen
☐ Sekizgen



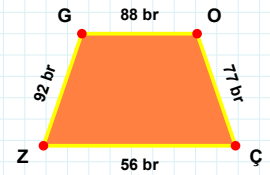
10 br hangi şeklin kenarıdır?

- ☐ Eşkenar Dörtgen
☐ Yamuk
☐ Paralelkenar



[GO] kenarı hangi şeklin kenarıdır?

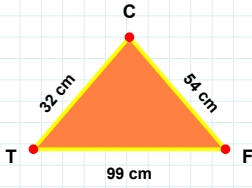
- ☐ Yamuk
☐ Paralelkenar
☐ Eşkenar Dörtgen



[VD] kenarı hangi şeklin kenarıdır?

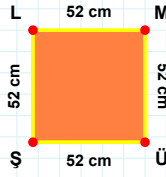
- ☐ Paralelkenar
☐ Eşkenar Dörtgen
☐ Yamuk

SORU: Aşağıdaki şekilleri inceleyiniz. Verilen kenar bilgisinin hangi şekle ait olduğunu işaretleyiniz.



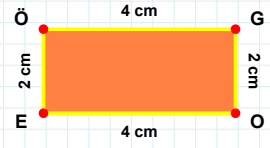
[ÜŞ] kenarı hangi şeklin kenarıdır?

- ☐ Üçgen
☐ Kare
☐ Dikdörtgen



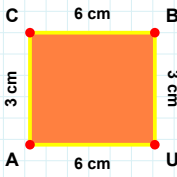
[GO] kenarı hangi şeklin kenarıdır?

- ☐ Üçgen
☐ Dikdörtgen
☐ Kare



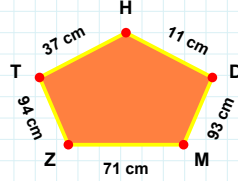
[TF] kenarı hangi şeklin kenarıdır?

- ☐ Dikdörtgen
☐ Üçgen
☐ Kare



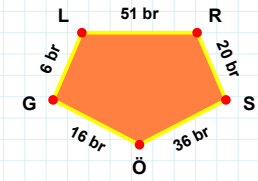
93 cm hangi şeklin kenarıdır?

- ☐ Dikey Dikdörtgen
☐ Beşgen
☐ Ters Beşgen



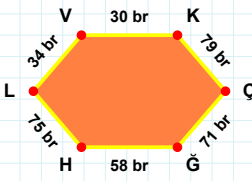
[RS] kenarı hangi şeklin kenarıdır?

- ☐ Ters Beşgen
☐ Dikey Dikdörtgen
☐ Beşgen



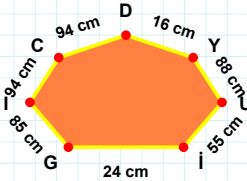
[CB] kenarı hangi şeklin kenarıdır?

- ☐ Beşgen
☐ Ters Beşgen
☐ Dikey Dikdörtgen



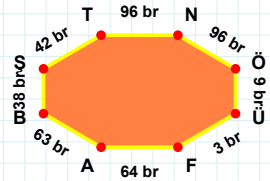
16 cm hangi şeklin kenarıdır?

- ☐ Yedigen
☐ Altigen
☐ Sekizgen



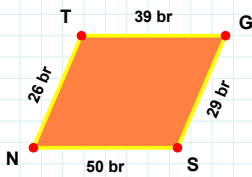
[FA] kenarı hangi şeklin kenarıdır?

- ☐ Sekizgen
☐ Yedigen
☐ Altigen



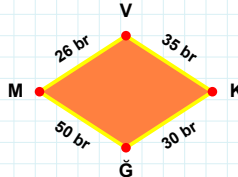
[GH] kenarı hangi şeklin kenarıdır?

- ☐ Altigen
☐ Yedigen
☐ Sekizgen



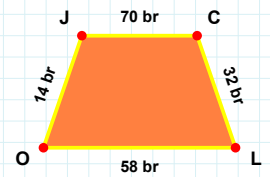
[OJ] kenarı hangi şeklin kenarıdır?

- ☐ Eşkenar Dörtgen
☐ Paralelkenar
☐ Yamuk



[GS] kenarı hangi şeklin kenarıdır?

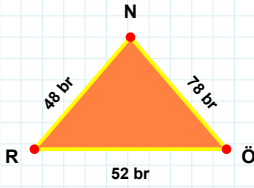
- ☐ Eşkenar Dörtgen
☐ Paralelkenar
☐ Yamuk



35 br hangi şeklin kenarıdır?

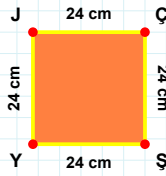
- ☐ Yamuk
☐ Eşkenar Dörtgen
☐ Paralelkenar

SORU: Aşağıdaki şekilleri inceleyiniz. Verilen kenar bilgisinin hangi şekle ait olduğunu işaretleyiniz.



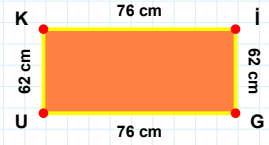
|JÇ| kenarı hangi şeklin kenarıdır?

- ☐ Üçgen
☐ Kare
☐ Dikdörtgen



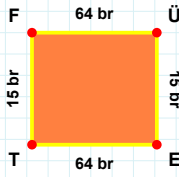
|İÇ| kenarı hangi şeklin kenarıdır?

- ☐ Dikdörtgen
☐ Üçgen
☐ Kare



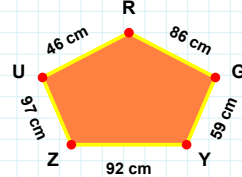
|ÖN| kenarı hangi şeklin kenarıdır?

- ☐ Üçgen
☐ Dikdörtgen
☐ Kare



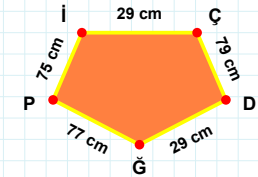
86 cm hangi şeklin kenarıdır?

- ☐ Dikey Dikdörtgen
☐ Beşgen
☐ Ters Beşgen



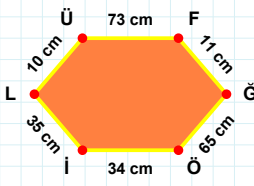
|İÇ| kenarı hangi şeklin kenarıdır?

- ☐ Beşgen
☐ Dikey Dikdörtgen
☐ Ters Beşgen



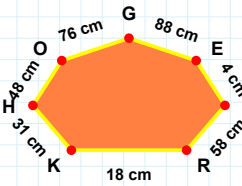
|FÜ| kenarı hangi şeklin kenarıdır?

- ☐ Beşgen
☐ Ters Beşgen
☐ Dikey Dikdörtgen



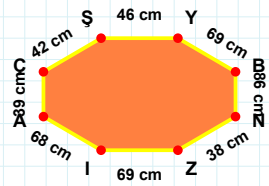
48 cm hangi şeklin kenarıdır?

- ☐ Sekizgen
☐ Yediggen
☐ Altıgen



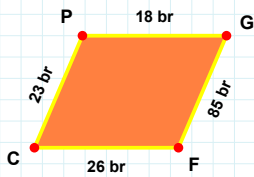
|ŞY| kenarı hangi şeklin kenarıdır?

- ☐ Sekizgen
☐ Yediggen
☐ Altıgen



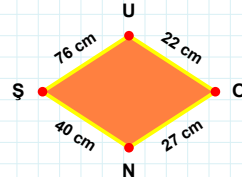
|LÜ| kenarı hangi şeklin kenarıdır?

- ☐ Altıgen
☐ Yediggen
☐ Sekizgen



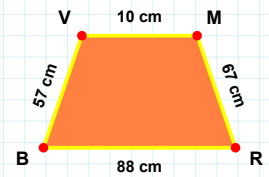
|BV| kenarı hangi şeklin kenarıdır?

- ☐ Eşkenar Dörtgen
☐ Paralelkenar
☐ Yamuk



|CP| kenarı hangi şeklin kenarıdır?

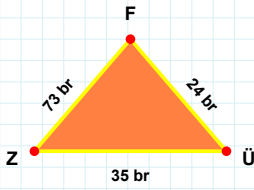
- ☐ Yamuk
☐ Paralelkenar
☐ Eşkenar Dörtgen



22 cm hangi şeklin kenarıdır?

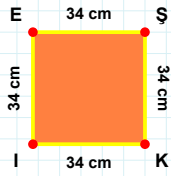
- ☐ Eşkenar Dörtgen
☐ Yamuk
☐ Paralelkenar

SORU: Aşağıdaki şekilleri inceleyiniz. Verilen kenar bilgisinin hangi şekle ait olduğunu işaretleyiniz.



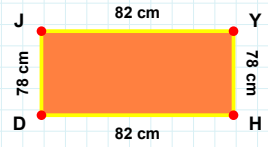
[YH] kenarı hangi şeklin kenarıdır?

- ☐ Dikdörtgen
☐ Kare
☐ Üçgen



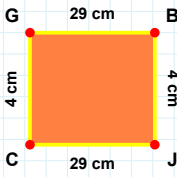
[FZ] kenarı hangi şeklin kenarıdır?

- ☐ Dikdörtgen
☐ Üçgen
☐ Kare



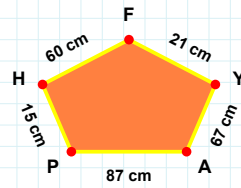
[KI] kenarı hangi şeklin kenarıdır?

- ☐ Üçgen
☐ Kare
☐ Dikdörtgen



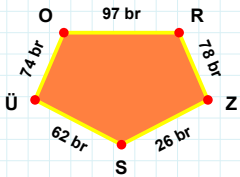
21 cm hangi şeklin kenarıdır?

- ☐ Beşgen
☐ Dikey Dikdörtgen
☐ Ters Beşgen



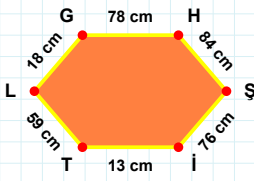
[OR] kenarı hangi şeklin kenarıdır?

- ☐ Dikey Dikdörtgen
☐ Ters Beşgen
☐ Beşgen



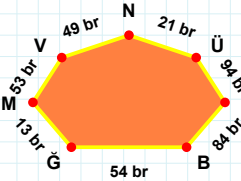
[BJ] kenarı hangi şeklin kenarıdır?

- ☐ Dikey Dikdörtgen
☐ Ters Beşgen
☐ Beşgen



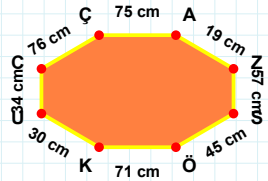
49 br hangi şeklin kenarıdır?

- ☐ Sekizgen
☐ Altıgen
☐ Yediggen



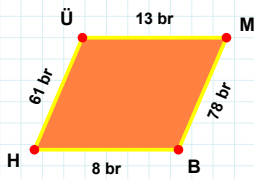
[KU] kenarı hangi şeklin kenarıdır?

- ☐ Sekizgen
☐ Yediggen
☐ Altıgen



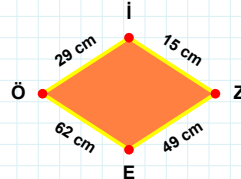
[TL] kenarı hangi şeklin kenarıdır?

- ☐ Yediggen
☐ Sekizgen
☐ Altıgen



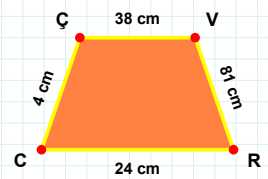
[ÇV] kenarı hangi şeklin kenarıdır?

- ☐ Paralelkenar
☐ Eşkenar Dörtgen
☐ Yamuk



[BH] kenarı hangi şeklin kenarıdır?

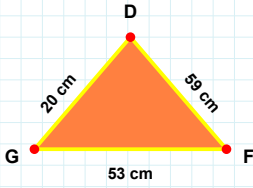
- ☐ Eşkenar Dörtgen
☐ Paralelkenar
☐ Yamuk



29 cm hangi şeklin kenarıdır?

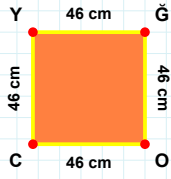
- ☐ Eşkenar Dörtgen
☐ Paralelkenar
☐ Yamuk

SORU: Aşağıdaki şekilleri inceleyiniz. Verilen kenar bilgisinin hangi şekle ait olduğunu işaretleyiniz.



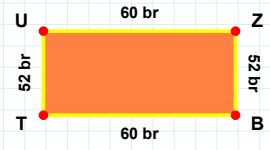
[TU] kenarı hangi şeklin kenarıdır?

- ☐ Üçgen
☐ Dikdörtgen
☐ Kare



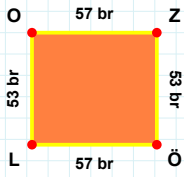
[FD] kenarı hangi şeklin kenarıdır?

- ☐ Dikdörtgen
☐ Üçgen
☐ Kare



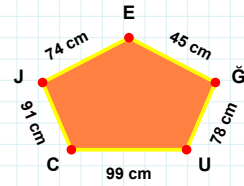
[CY] kenarı hangi şeklin kenarıdır?

- ☐ Üçgen
☐ Dikdörtgen
☐ Kare



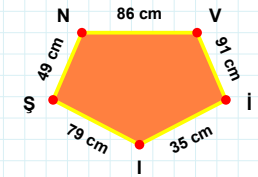
[İŞ] kenarı hangi şeklin kenarıdır?

- ☐ Dikey Dikdörtgen
☐ Beşgen
☐ Ters Beşgen



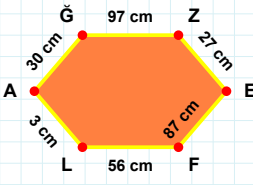
[OZ] kenarı hangi şeklin kenarıdır?

- ☐ Beşgen
☐ Ters Beşgen
☐ Dikey Dikdörtgen



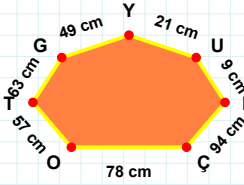
45 cm hangi şeklin kenarıdır?

- ☐ Dikey Dikdörtgen
☐ Ters Beşgen
☐ Beşgen



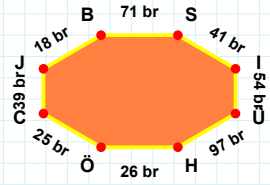
[JB] kenarı hangi şeklin kenarıdır?

- ☐ Altıgen
☐ Yedigen
☐ Sekizgen



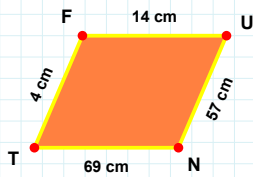
[ZE] kenarı hangi şeklin kenarıdır?

- ☐ Yedigen
☐ Altıgen
☐ Sekizgen



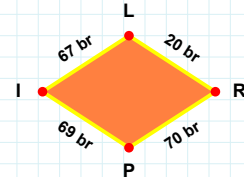
49 cm hangi şeklin kenarıdır?

- ☐ Yedigen
☐ Sekizgen
☐ Altıgen



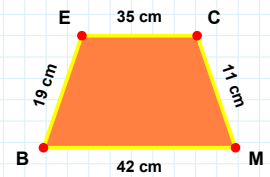
67 br hangi şeklin kenarıdır?

- ☐ Paralelkenar
☐ Eşkenar Dörtgen
☐ Yamuk



[EC] kenarı hangi şeklin kenarıdır?

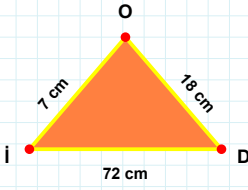
- ☐ Eşkenar Dörtgen
☐ Yamuk
☐ Paralelkenar



[UN] kenarı hangi şeklin kenarıdır?

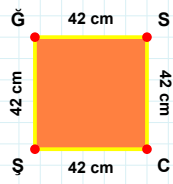
- ☐ Paralelkenar
☐ Eşkenar Dörtgen
☐ Yamuk

SORU: Aşağıdaki şekilleri inceleyiniz. Verilen kenar bilgisinin hangi şekle ait olduğunu işaretleyiniz.



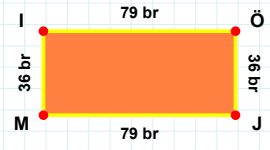
|ŞĞ| kenarı hangi şeklin kenarıdır?

- ☐ Üçgen
☐ Kare
☐ Dikdörtgen



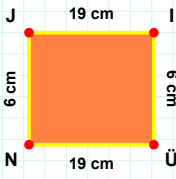
|MI| kenarı hangi şeklin kenarıdır?

- ☐ Kare
☐ Dikdörtgen
☐ Üçgen



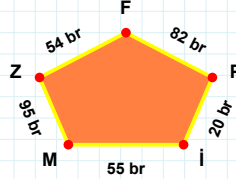
|OI| kenarı hangi şeklin kenarıdır?

- ☐ Dikdörtgen
☐ Kare
☐ Üçgen



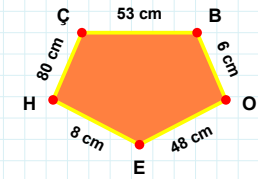
|BO| kenarı hangi şeklin kenarıdır?

- ☐ Beşgen
☐ Dikey Dikdörtgen
☐ Ters Beşgen



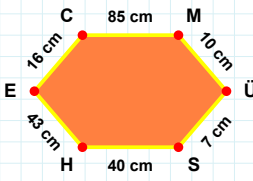
|ÜN| kenarı hangi şeklin kenarıdır?

- ☐ Dikey Dikdörtgen
☐ Beşgen
☐ Ters Beşgen



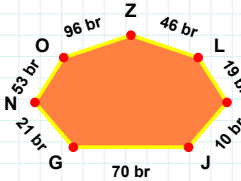
95 br hangi şeklin kenarıdır?

- ☐ Beşgen
☐ Dikey Dikdörtgen
☐ Ters Beşgen



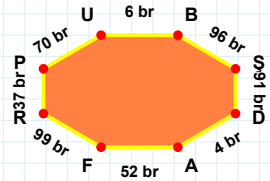
10 br hangi şeklin kenarıdır?

- ☐ Sekizgen
☐ Altıgen
☐ Yediggen



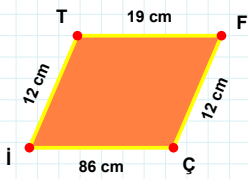
|UB| kenarı hangi şeklin kenarıdır?

- ☐ Sekizgen
☐ Yediggen
☐ Altıgen



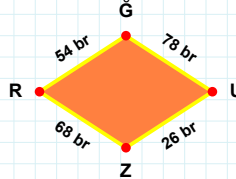
|HE| kenarı hangi şeklin kenarıdır?

- ☐ Altıgen
☐ Yediggen
☐ Sekizgen



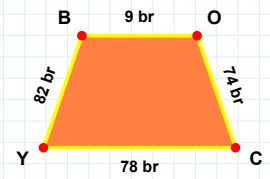
|OC| kenarı hangi şeklin kenarıdır?

- ☐ Eşkenar Dörtgen
☐ Yamuk
☐ Paralelkenar



|FÇ| kenarı hangi şeklin kenarıdır?

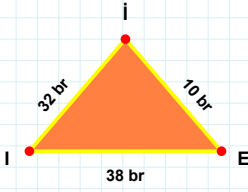
- ☐ Eşkenar Dörtgen
☐ Paralelkenar
☐ Yamuk



54 br hangi şeklin kenarıdır?

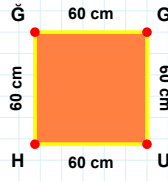
- ☐ Paralelkenar
☐ Yamuk
☐ Eşkenar Dörtgen

SORU: Aşağıdaki şekilleri inceleyiniz. Verilen kenar bilgisinin hangi şekle ait olduğunu işaretleyiniz.



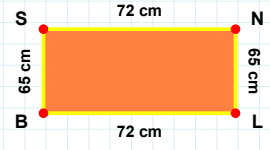
|İG| kenarı hangi şeklin kenarıdır?

- ☐ Kare
☐ Dikdörtgen
☐ Üçgen



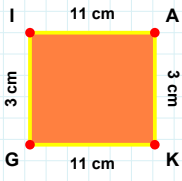
|BS| kenarı hangi şeklin kenarıdır?

- ☐ Üçgen
☐ Kare
☐ Dikdörtgen



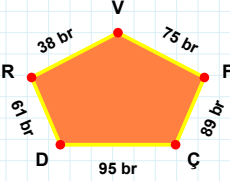
|Eİ| kenarı hangi şeklin kenarıdır?

- ☐ Üçgen
☐ Dikdörtgen
☐ Kare



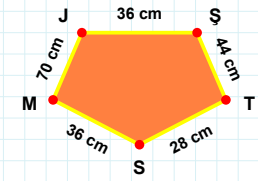
89 br hangi şeklin kenarıdır?

- ☐ Dikey Dikdörtgen
☐ Beşgen
☐ Ters Beşgen



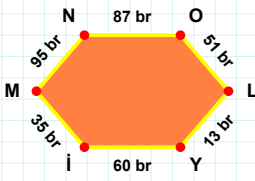
|MJ| kenarı hangi şeklin kenarıdır?

- ☐ Dikey Dikdörtgen
☐ Beşgen
☐ Ters Beşgen



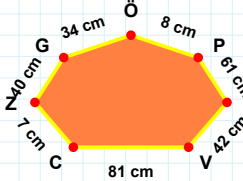
|GI| kenarı hangi şeklin kenarıdır?

- ☐ Dikey Dikdörtgen
☐ Ters Beşgen
☐ Beşgen



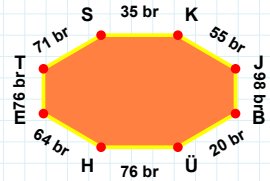
81 cm hangi şeklin kenarıdır?

- ☐ Yedigen
☐ Sekizgen
☐ Altıgen



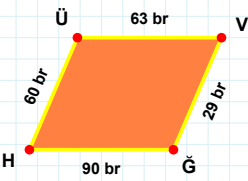
|JB| kenarı hangi şeklin kenarıdır?

- ☐ Yedigen
☐ Sekizgen
☐ Altıgen



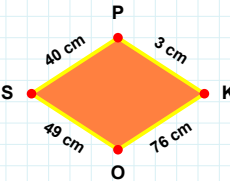
|LY| kenarı hangi şeklin kenarıdır?

- ☐ Altıgen
☐ Yedigen
☐ Sekizgen



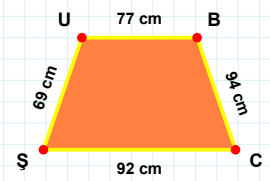
76 cm hangi şeklin kenarıdır?

- ☐ Eşkenar Dörtgen
☐ Paralelkenar
☐ Yamuk



|BC| kenarı hangi şeklin kenarıdır?

- ☐ Paralelkenar
☐ Eşkenar Dörtgen
☐ Yamuk



|ÜV| kenarı hangi şeklin kenarıdır?

- ☐ Eşkenar Dörtgen
☐ Paralelkenar
☐ Yamuk

SÜREÇ ODAKLI DEĞERLENDİRME ÖLÇEĞİ

Geliştirilmeli (0-109)	İyi (110-187)	Çok İyi (188-265)	Mükemmel (266-312)
<input type="checkbox"/>	<input type="checkbox"/>	<input type="checkbox"/>	<input type="checkbox"/>

Hazırlayan:

Bu bölüme sınıfınızın ilgili kazanıma yönelik genel durumuna ilişkin gözlem ve izlenimlerinizi, öğrencilerinizin bu kazanımla ilgili öğrenme eksikliklerini ve bu eksikliklerin giderilmesi amacıyla yaptığınız/yapmayı planladığınız faaliyetleri not edebilirsiniz.

No	Adı - Soyadı	Toplam Puan	Değerlendirme
1			
2			
3			
4			
5			
6			
7			
8			
9			
10			
11			
12			
13			
14			
15			
16			
17			
18			
19			
20			
21			
22			
23			
24			
25			
26			
27			
28			
29			
30			
31			
32			
33			
34			
35			

Hazırlayan: