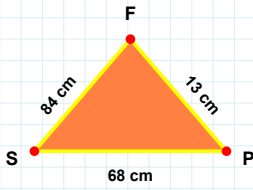
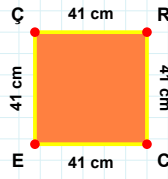


SORU: Aşağıdaki şekilleri inceleyiniz. Verilen kenar bilgisinin hangi şekle ait olduğunu işaretleyiniz.



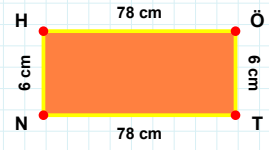
[ÖT] kenarı hangi şeklin kenarıdır?

- ☐ Kare
☐ Üçgen
☐ Dikdörtgen



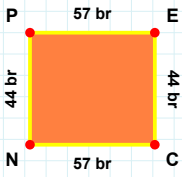
[PF] kenarı hangi şeklin kenarıdır?

- ☐ Üçgen
☐ Kare
☐ Dikdörtgen



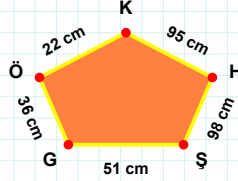
[CE] kenarı hangi şeklin kenarıdır?

- ☐ Kare
☐ Üçgen
☐ Dikdörtgen



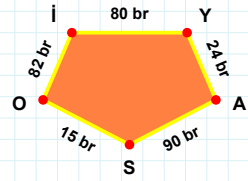
98 cm hangi şeklin kenarıdır?

- ☐ Ters Beşgen
☐ Beşgen
☐ Dikey Dikdörtgen



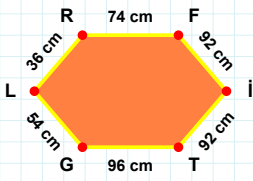
[SO] kenarı hangi şeklin kenarıdır?

- ☐ Ters Beşgen
☐ Dikey Dikdörtgen
☐ Beşgen



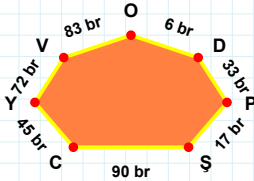
[CN] kenarı hangi şeklin kenarıdır?

- ☐ Beşgen
☐ Dikey Dikdörtgen
☐ Ters Beşgen



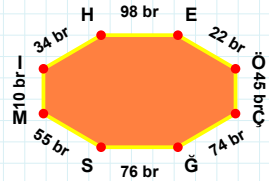
[HE] kenarı hangi şeklin kenarıdır?

- ☐ Yedigen
☐ Altigen
☐ Sekizgen



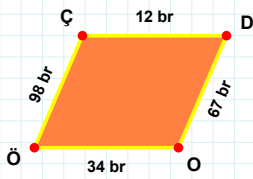
[TG] kenarı hangi şeklin kenarıdır?

- ☐ Yedigen
☐ Altigen
☐ Sekizgen



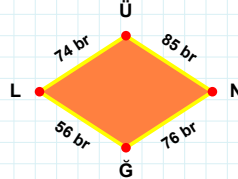
33 br hangi şeklin kenarıdır?

- ☐ Altigen
☐ Sekizgen
☐ Yedigen



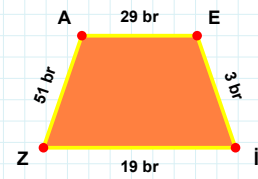
74 br hangi şeklin kenarıdır?

- ☐ Eşkenar Dörtgen
☐ Paralelkenar
☐ Yamuk



[ZA] kenarı hangi şeklin kenarıdır?

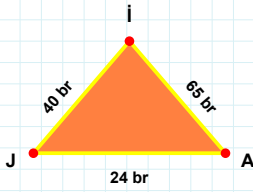
- ☐ Paralelkenar
☐ Yamuk
☐ Eşkenar Dörtgen



[ÖÇ] kenarı hangi şeklin kenarıdır?

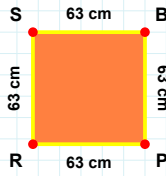
- ☐ Yamuk
☐ Eşkenar Dörtgen
☐ Paralelkenar

SORU: Aşağıdaki şekilleri inceleyiniz. Verilen kenar bilgisinin hangi şekle ait olduğunu işaretleyiniz.



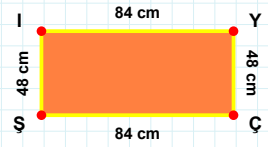
[YÇ] kenarı hangi şeklin kenarıdır?

- ☐ Üçgen
☐ Dikdörtgen
☐ Kare



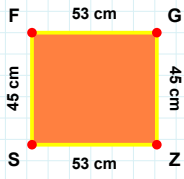
[JA] kenarı hangi şeklin kenarıdır?

- ☐ Üçgen
☐ Kare
☐ Dikdörtgen



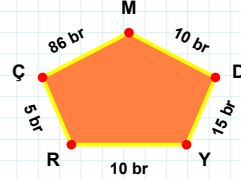
[BP] kenarı hangi şeklin kenarıdır?

- ☐ Üçgen
☐ Dikdörtgen
☐ Kare



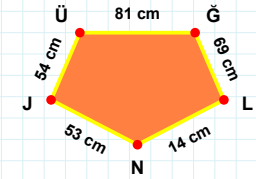
15 br hangi şeklin kenarıdır?

- ☐ Beşgen
☐ Ters Beşgen
☐ Dikey Dikdörtgen



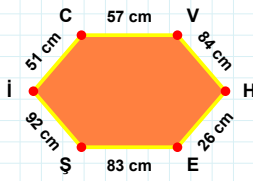
[NJ] kenarı hangi şeklin kenarıdır?

- ☐ Dikey Dikdörtgen
☐ Ters Beşgen
☐ Beşgen



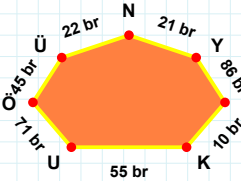
[GZ] kenarı hangi şeklin kenarıdır?

- ☐ Dikey Dikdörtgen
☐ Beşgen
☐ Ters Beşgen



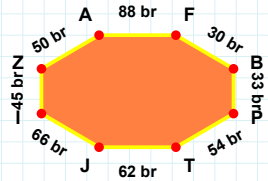
[TJ] kenarı hangi şeklin kenarıdır?

- ☐ Sekizgen
☐ Yediggen
☐ Altıgen



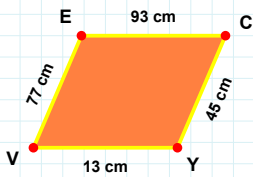
[VH] kenarı hangi şeklin kenarıdır?

- ☐ Altıgen
☐ Sekizgen
☐ Yediggen



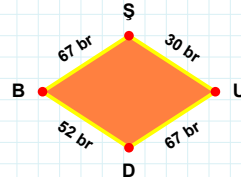
22 br hangi şeklin kenarıdır?

- ☐ Altıgen
☐ Sekizgen
☐ Yediggen



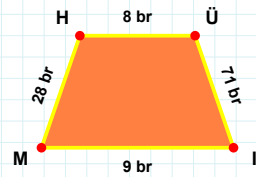
[Üİ] kenarı hangi şeklin kenarıdır?

- ☐ Yamuk
☐ Paralelkenar
☐ Eşkenar Dörtgen



[VE] kenarı hangi şeklin kenarıdır?

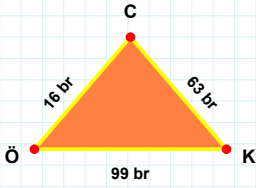
- ☐ Paralelkenar
☐ Eşkenar Dörtgen
☐ Yamuk



30 br hangi şeklin kenarıdır?

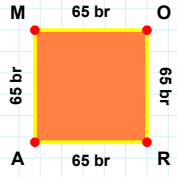
- ☐ Yamuk
☐ Paralelkenar
☐ Eşkenar Dörtgen

SORU: Aşağıdaki şekilleri inceleyiniz. Verilen kenar bilgisinin hangi şekle ait olduğunu işaretleyiniz.



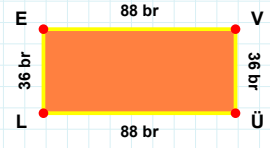
|VÜ| kenarı hangi şeklin kenarıdır?

- ☐ Kare
☐ Dikdörtgen
☐ Üçgen



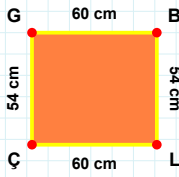
|ÖK| kenarı hangi şeklin kenarıdır?

- ☐ Kare
☐ Dikdörtgen
☐ Üçgen



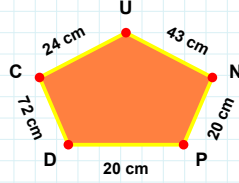
|RA| kenarı hangi şeklin kenarıdır?

- ☐ Kare
☐ Üçgen
☐ Dikdörtgen



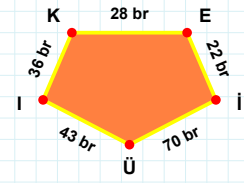
72 cm hangi şeklin kenarıdır?

- ☐ Dikey Dikdörtgen
☐ Beşgen
☐ Ters Beşgen



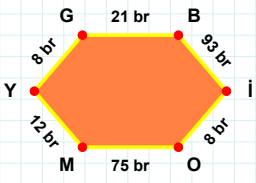
|Eİ| kenarı hangi şeklin kenarıdır?

- ☐ Dikey Dikdörtgen
☐ Beşgen
☐ Ters Beşgen



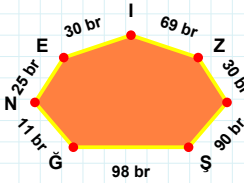
|GB| kenarı hangi şeklin kenarıdır?

- ☐ Dikey Dikdörtgen
☐ Ters Beşgen
☐ Beşgen



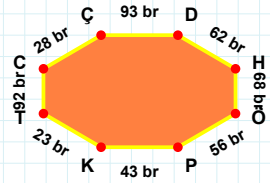
90 br hangi şeklin kenarıdır?

- ☐ Yedigen
☐ Altıgen
☐ Sekizgen



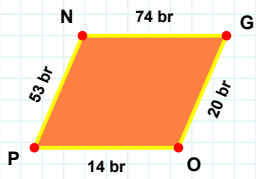
|ÖP| kenarı hangi şeklin kenarıdır?

- ☐ Sekizgen
☐ Yedigen
☐ Altıgen



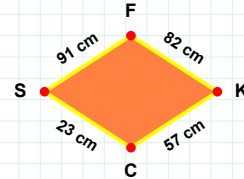
|İO| kenarı hangi şeklin kenarıdır?

- ☐ Sekizgen
☐ Altıgen
☐ Yedigen



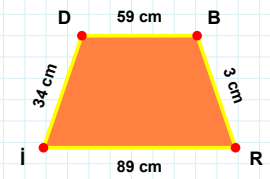
|DB| kenarı hangi şeklin kenarıdır?

- ☐ Yamuk
☐ Paralelkenar
☐ Eşkenar Dörtgen



|OP| kenarı hangi şeklin kenarıdır?

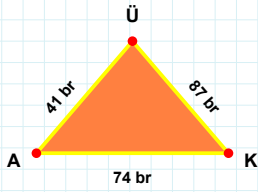
- ☐ Paralelkenar
☐ Eşkenar Dörtgen
☐ Yamuk



23 cm hangi şeklin kenarıdır?

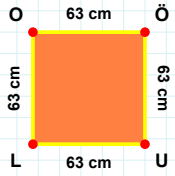
- ☐ Paralelkenar
☐ Eşkenar Dörtgen
☐ Yamuk

SORU: Aşağıdaki şekilleri inceleyiniz. Verilen kenar bilgisinin hangi şekle ait olduğunu işaretleyiniz.



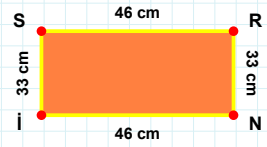
|Nİ| kenarı hangi şeklin kenarıdır?

- ☐ Kare
☐ Dikdörtgen
☐ Üçgen



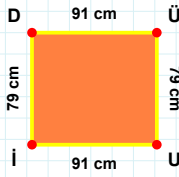
|AK| kenarı hangi şeklin kenarıdır?

- ☐ Kare
☐ Dikdörtgen
☐ Üçgen



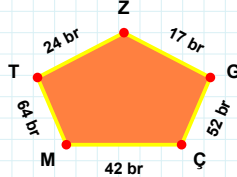
|OÖ| kenarı hangi şeklin kenarıdır?

- ☐ Üçgen
☐ Kare
☐ Dikdörtgen



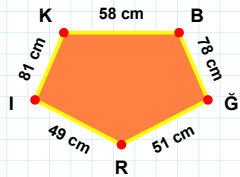
42 br hangi şeklin kenarıdır?

- ☐ Ters Beşgen
☐ Dikey Dikdörtgen
☐ Beşgen



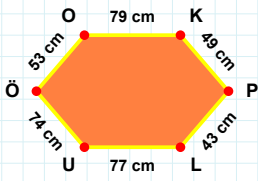
|BĞ| kenarı hangi şeklin kenarıdır?

- ☐ Ters Beşgen
☐ Beşgen
☐ Dikey Dikdörtgen



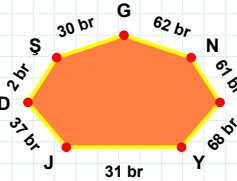
|ÜÜ| kenarı hangi şeklin kenarıdır?

- ☐ Dikey Dikdörtgen
☐ Beşgen
☐ Ters Beşgen



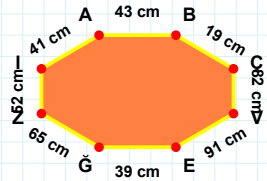
|IA| kenarı hangi şeklin kenarıdır?

- ☐ Altıgen
☐ Yediggen
☐ Sekizgen



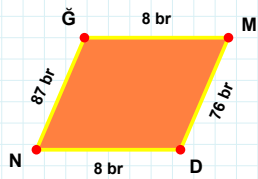
|OK| kenarı hangi şeklin kenarıdır?

- ☐ Altıgen
☐ Yediggen
☐ Sekizgen



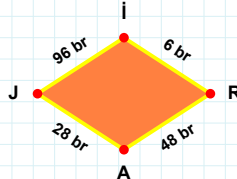
30 br hangi şeklin kenarıdır?

- ☐ Altıgen
☐ Yediggen
☐ Sekizgen



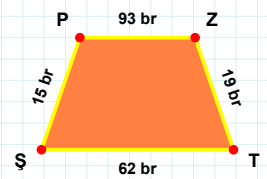
96 br hangi şeklin kenarıdır?

- ☐ Paralelkenar
☐ Eşkenar Dörtgen
☐ Yamuk



|PZ| kenarı hangi şeklin kenarıdır?

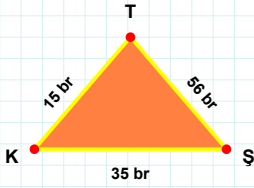
- ☐ Yamuk
☐ Paralelkenar
☐ Eşkenar Dörtgen



|DN| kenarı hangi şeklin kenarıdır?

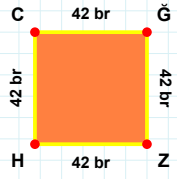
- ☐ Paralelkenar
☐ Eşkenar Dörtgen
☐ Yamuk

SORU: Aşağıdaki şekilleri inceleyiniz. Verilen kenar bilgisinin hangi şekle ait olduğunu işaretleyiniz.



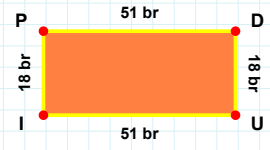
[CĞ] kenarı hangi şeklin kenarıdır?

- ☐ Kare
☐ Dikdörtgen
☐ Üçgen



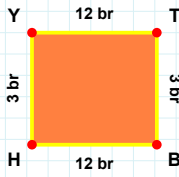
[JP] kenarı hangi şeklin kenarıdır?

- ☐ Üçgen
☐ Dikdörtgen
☐ Kare



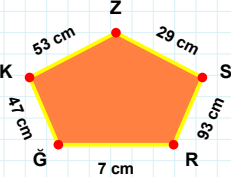
[ST] kenarı hangi şeklin kenarıdır?

- ☐ Üçgen
☐ Kare
☐ Dikdörtgen



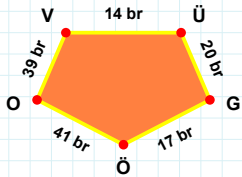
29 cm hangi şeklin kenarıdır?

- ☐ Dikey Dikdörtgen
☐ Beşgen
☐ Ters Beşgen



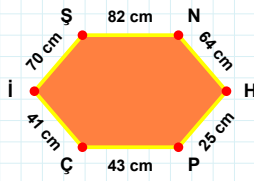
[ÖO] kenarı hangi şeklin kenarıdır?

- ☐ Ters Beşgen
☐ Beşgen
☐ Dikey Dikdörtgen



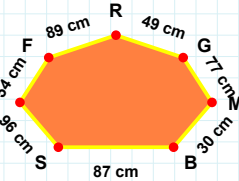
[TB] kenarı hangi şeklin kenarıdır?

- ☐ Beşgen
☐ Ters Beşgen
☐ Dikey Dikdörtgen



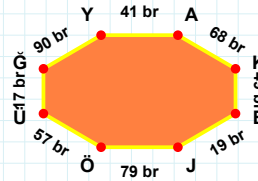
89 cm hangi şeklin kenarıdır?

- ☐ Altıgen
☐ Sekizgen
☐ Yedigen



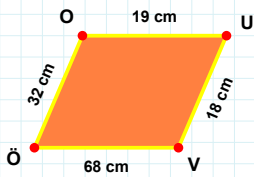
[AK] kenarı hangi şeklin kenarıdır?

- ☐ Yedigen
☐ Sekizgen
☐ Altıgen



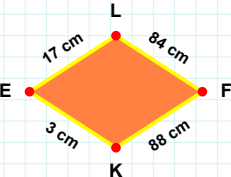
[Çİ] kenarı hangi şeklin kenarıdır?

- ☐ Altıgen
☐ Sekizgen
☐ Yedigen



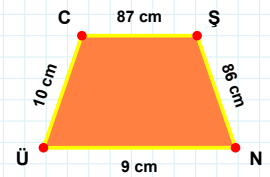
[SN] kenarı hangi şeklin kenarıdır?

- ☐ Yamuk
☐ Eşkenar Dörtgen
☐ Paralelkenar



[UV] kenarı hangi şeklin kenarıdır?

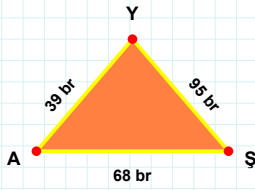
- ☐ Yamuk
☐ Paralelkenar
☐ Eşkenar Dörtgen



3 cm hangi şeklin kenarıdır?

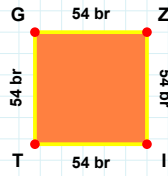
- ☐ Yamuk
☐ Eşkenar Dörtgen
☐ Paralelkenar

SORU: Aşağıdaki şekilleri inceleyiniz. Verilen kenar bilgisinin hangi şekle ait olduğunu işaretleyiniz.



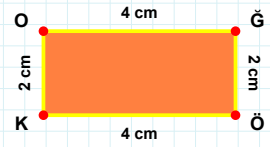
[GZ] kenarı hangi şeklin kenarıdır?

- ☐ Dikdörtgen
☐ Üçgen
☐ Kare



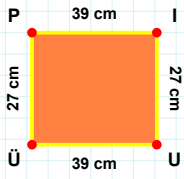
[ĞÖ] kenarı hangi şeklin kenarıdır?

- ☐ Kare
☐ Dikdörtgen
☐ Üçgen



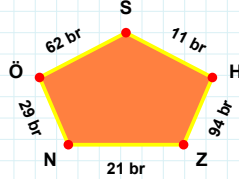
[YA] kenarı hangi şeklin kenarıdır?

- ☐ Üçgen
☐ Kare
☐ Dikdörtgen



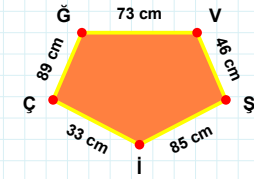
[ÇĞ] kenarı hangi şeklin kenarıdır?

- ☐ Beşgen
☐ Dikey Dikdörtgen
☐ Ters Beşgen



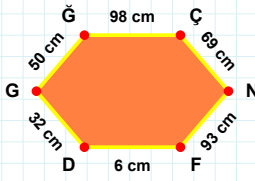
[PI] kenarı hangi şeklin kenarıdır?

- ☐ Ters Beşgen
☐ Beşgen
☐ Dikey Dikdörtgen



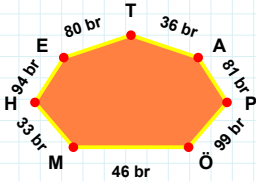
29 br hangi şeklin kenarıdır?

- ☐ Beşgen
☐ Ters Beşgen
☐ Dikey Dikdörtgen



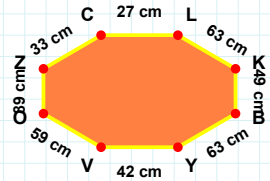
[OZ] kenarı hangi şeklin kenarıdır?

- ☐ Yedigen
☐ Sekizgen
☐ Altıgen



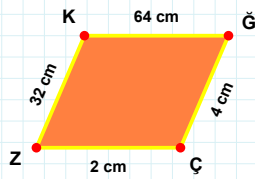
[FD] kenarı hangi şeklin kenarıdır?

- ☐ Yedigen
☐ Sekizgen
☐ Altıgen



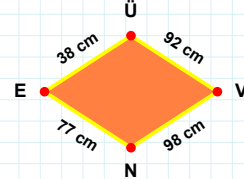
94 br hangi şeklin kenarıdır?

- ☐ Sekizgen
☐ Altıgen
☐ Yedigen



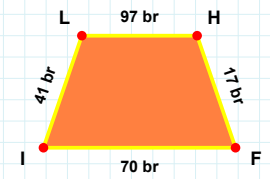
[HF] kenarı hangi şeklin kenarıdır?

- ☐ Yamuk
☐ Eşkenar Dörtgen
☐ Paralelkenar



[KĞ] kenarı hangi şeklin kenarıdır?

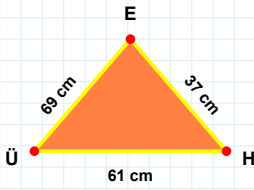
- ☐ Yamuk
☐ Eşkenar Dörtgen
☐ Paralelkenar



98 cm hangi şeklin kenarıdır?

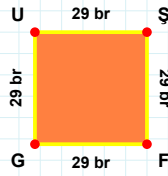
- ☐ Paralelkenar
☐ Yamuk
☐ Eşkenar Dörtgen

SORU: Aşağıdaki şekilleri inceleyiniz. Verilen kenar bilgisinin hangi şekle ait olduğunu işaretleyiniz.



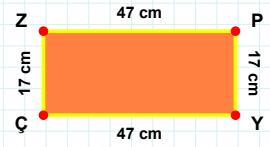
[ÇZ] kenarı hangi şeklin kenarıdır?

- ☐ Dikdörtgen
☐ Üçgen
☐ Kare



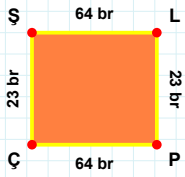
[EÜ] kenarı hangi şeklin kenarıdır?

- ☐ Üçgen
☐ Dikdörtgen
☐ Kare



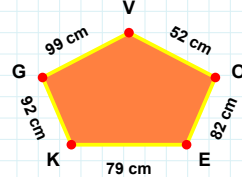
[GU] kenarı hangi şeklin kenarıdır?

- ☐ Dikdörtgen
☐ Kare
☐ Üçgen



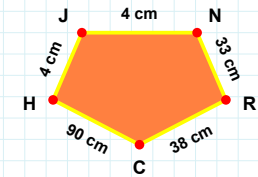
79 cm hangi şeklin kenarıdır?

- ☐ Ters Beşgen
☐ Beşgen
☐ Dikey Dikdörtgen



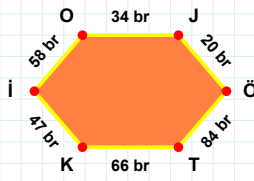
[HJ] kenarı hangi şeklin kenarıdır?

- ☐ Dikey Dikdörtgen
☐ Ters Beşgen
☐ Beşgen



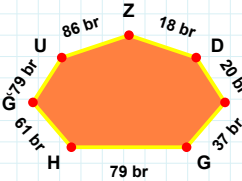
[ÇŞ] kenarı hangi şeklin kenarıdır?

- ☐ Ters Beşgen
☐ Dikey Dikdörtgen
☐ Beşgen



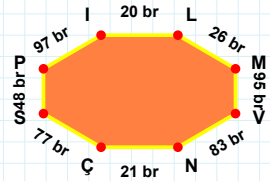
18 br hangi şeklin kenarıdır?

- ☐ Yedigen
☐ Altıgen
☐ Sekizgen



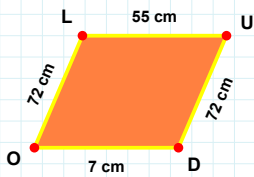
[NÇ] kenarı hangi şeklin kenarıdır?

- ☐ Yedigen
☐ Sekizgen
☐ Altıgen



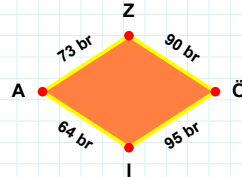
[JÖ] kenarı hangi şeklin kenarıdır?

- ☐ Yedigen
☐ Sekizgen
☐ Altıgen



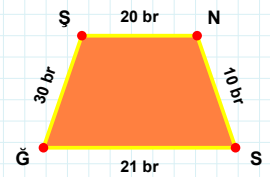
64 br hangi şeklin kenarıdır?

- ☐ Yamuk
☐ Paralelkenar
☐ Eşkenar Dörtgen



[NS] kenarı hangi şeklin kenarıdır?

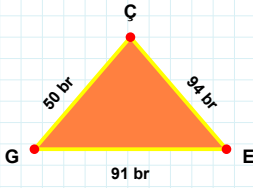
- ☐ Eşkenar Dörtgen
☐ Paralelkenar
☐ Yamuk



[UD] kenarı hangi şeklin kenarıdır?

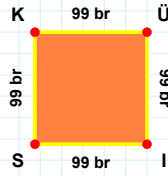
- ☐ Yamuk
☐ Eşkenar Dörtgen
☐ Paralelkenar

SORU: Aşağıdaki şekilleri inceleyiniz. Verilen kenar bilgisinin hangi şekle ait olduğunu işaretleyiniz.



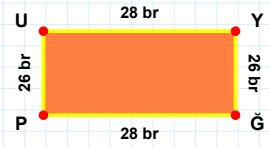
[GE] kenarı hangi şeklin kenarıdır?

- ☐ Dikdörtgen
☐ Kare
☐ Üçgen



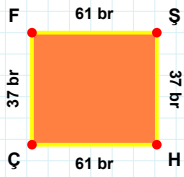
[GE] kenarı hangi şeklin kenarıdır?

- ☐ Üçgen
☐ Kare
☐ Dikdörtgen



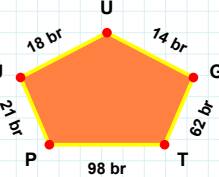
[IS] kenarı hangi şeklin kenarıdır?

- ☐ Dikdörtgen
☐ Üçgen
☐ Kare



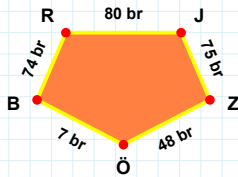
[BR] kenarı hangi şeklin kenarıdır?

- ☐ Beşgen
☐ Ters Beşgen
☐ Dikey Dikdörtgen



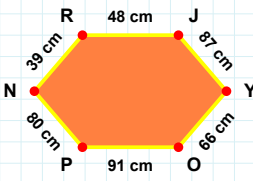
[HÇ] kenarı hangi şeklin kenarıdır?

- ☐ Beşgen
☐ Dikey Dikdörtgen
☐ Ters Beşgen



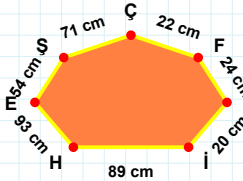
98 br hangi şeklin kenarıdır?

- ☐ Ters Beşgen
☐ Beşgen
☐ Dikey Dikdörtgen



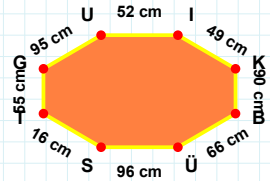
[BÜ] kenarı hangi şeklin kenarıdır?

- ☐ Sekizgen
☐ Altıgen
☐ Yedigen



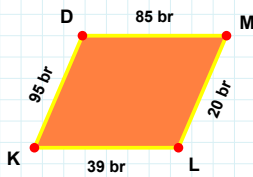
[NR] kenarı hangi şeklin kenarıdır?

- ☐ Sekizgen
☐ Yedigen
☐ Altıgen



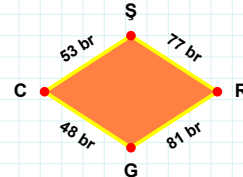
71 cm hangi şeklin kenarıdır?

- ☐ Altıgen
☐ Yedigen
☐ Sekizgen



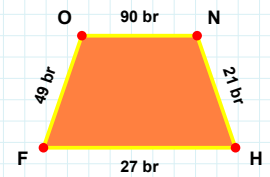
48 br hangi şeklin kenarıdır?

- ☐ Eşkenar Dörtgen
☐ Paralelkenar
☐ Yamuk



[ON] kenarı hangi şeklin kenarıdır?

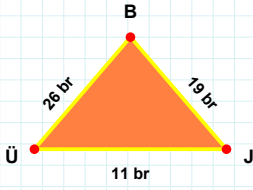
- ☐ Yamuk
☐ Paralelkenar
☐ Eşkenar Dörtgen



[DM] kenarı hangi şeklin kenarıdır?

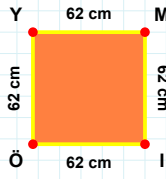
- ☐ Paralelkenar
☐ Eşkenar Dörtgen
☐ Yamuk

SORU: Aşağıdaki şekilleri inceleyiniz. Verilen kenar bilgisinin hangi şekle ait olduğunu işaretleyiniz.



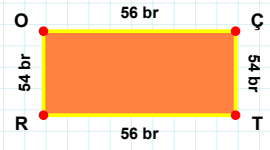
[YM] kenarı hangi şeklin kenarıdır?

- ☐ Dikdörtgen
☐ Üçgen
☐ Kare



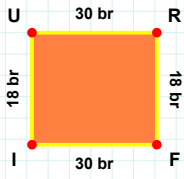
[RO] kenarı hangi şeklin kenarıdır?

- ☐ Üçgen
☐ Kare
☐ Dikdörtgen



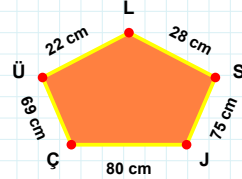
[JB] kenarı hangi şeklin kenarıdır?

- ☐ Kare
☐ Dikdörtgen
☐ Üçgen



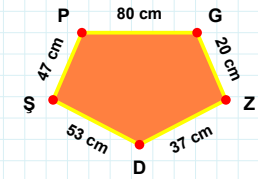
75 cm hangi şeklin kenarıdır?

- ☐ Dikey Dikdörtgen
☐ Beşgen
☐ Ters Beşgen



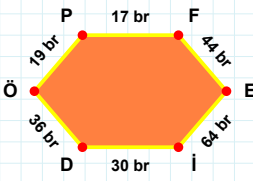
[SP] kenarı hangi şeklin kenarıdır?

- ☐ Dikey Dikdörtgen
☐ Beşgen
☐ Ters Beşgen



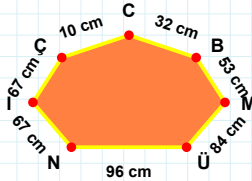
[IU] kenarı hangi şeklin kenarıdır?

- ☐ Beşgen
☐ Dikey Dikdörtgen
☐ Ters Beşgen



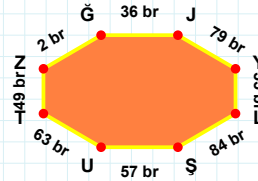
[ĞJ] kenarı hangi şeklin kenarıdır?

- ☐ Sekizgen
☐ Yediggen
☐ Altıgen



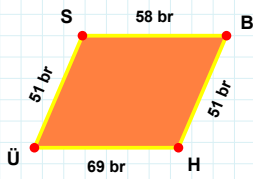
[FE] kenarı hangi şeklin kenarıdır?

- ☐ Sekizgen
☐ Altıgen
☐ Yediggen



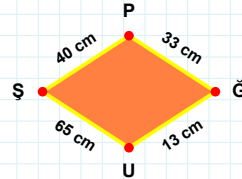
84 cm hangi şeklin kenarıdır?

- ☐ Altıgen
☐ Yediggen
☐ Sekizgen



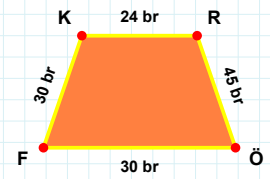
40 cm hangi şeklin kenarıdır?

- ☐ Paralelkenar
☐ Yamuk
☐ Eşkenar Dörtgen



[ÖF] kenarı hangi şeklin kenarıdır?

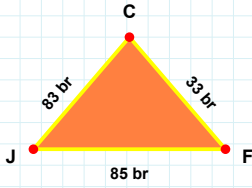
- ☐ Paralelkenar
☐ Eşkenar Dörtgen
☐ Yamuk



[BH] kenarı hangi şeklin kenarıdır?

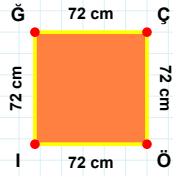
- ☐ Paralelkenar
☐ Yamuk
☐ Eşkenar Dörtgen

SORU: Aşağıdaki şekilleri inceleyiniz. Verilen kenar bilgisinin hangi şekle ait olduğunu işaretleyiniz.



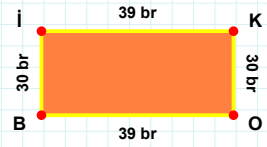
[JO] kenarı hangi şeklin kenarıdır?

- ☐ Üçgen
☐ Kare
☐ Dikdörtgen



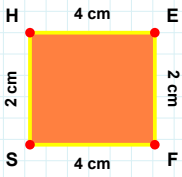
[FC] kenarı hangi şeklin kenarıdır?

- ☐ Üçgen
☐ Dikdörtgen
☐ Kare



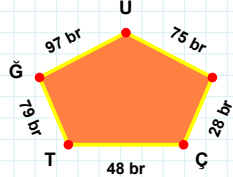
[ĞÇ] kenarı hangi şeklin kenarıdır?

- ☐ Kare
☐ Dikdörtgen
☐ Üçgen



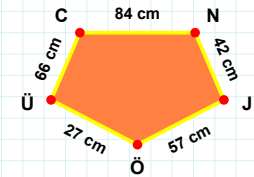
28 br hangi şeklin kenarıdır?

- ☐ Ters Beşgen
☐ Beşgen
☐ Dikey Dikdörtgen



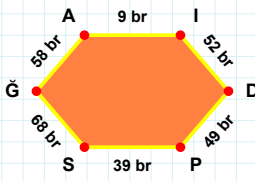
[ÖÜ] kenarı hangi şeklin kenarıdır?

- ☐ Ters Beşgen
☐ Beşgen
☐ Dikey Dikdörtgen



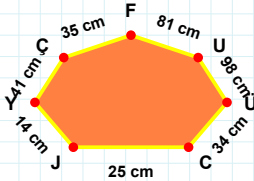
[FS] kenarı hangi şeklin kenarıdır?

- ☐ Ters Beşgen
☐ Dikey Dikdörtgen
☐ Beşgen



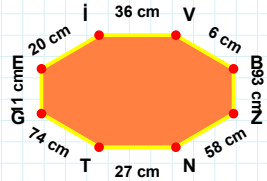
14 cm hangi şeklin kenarıdır?

- ☐ Yedigen
☐ Sekizgen
☐ Altıgen



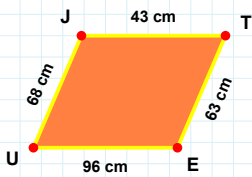
[TG] kenarı hangi şeklin kenarıdır?

- ☐ Altıgen
☐ Yedigen
☐ Sekizgen



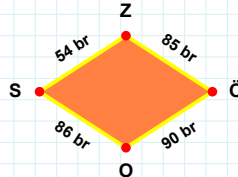
[PS] kenarı hangi şeklin kenarıdır?

- ☐ Sekizgen
☐ Yedigen
☐ Altıgen



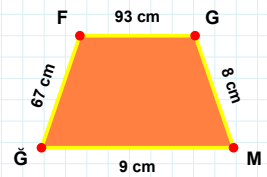
54 br hangi şeklin kenarıdır?

- ☐ Yamuk
☐ Paralelkenar
☐ Eşkenar Dörtgen



[GF] kenarı hangi şeklin kenarıdır?

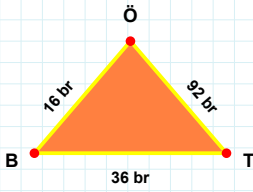
- ☐ Paralelkenar
☐ Eşkenar Dörtgen
☐ Yamuk



[TE] kenarı hangi şeklin kenarıdır?

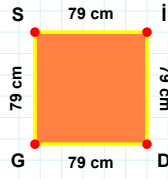
- ☐ Eşkenar Dörtgen
☐ Paralelkenar
☐ Yamuk

SORU: Aşağıdaki şekilleri inceleyiniz. Verilen kenar bilgisinin hangi şekle ait olduğunu işaretleyiniz.



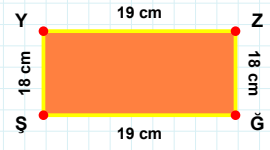
|ZĞ| kenarı hangi şeklin kenarıdır?

- ☐ Kare
☐ Dikdörtgen
☐ Üçgen



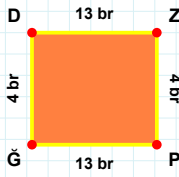
|ÖB| kenarı hangi şeklin kenarıdır?

- ☐ Kare
☐ Dikdörtgen
☐ Üçgen



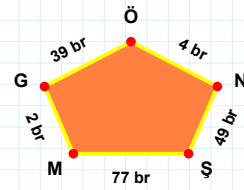
|İD| kenarı hangi şeklin kenarıdır?

- ☐ Üçgen
☐ Dikdörtgen
☐ Kare



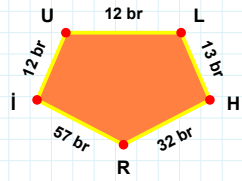
39 br hangi şeklin kenarıdır?

- ☐ Beşgen
☐ Dikey Dikdörtgen
☐ Ters Beşgen



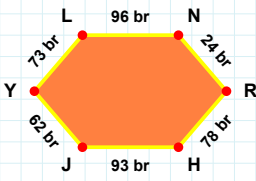
|LH| kenarı hangi şeklin kenarıdır?

- ☐ Ters Beşgen
☐ Dikey Dikdörtgen
☐ Beşgen



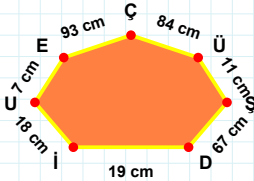
|ĞD| kenarı hangi şeklin kenarıdır?

- ☐ Beşgen
☐ Dikey Dikdörtgen
☐ Ters Beşgen



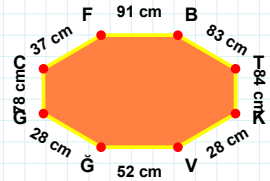
|TK| kenarı hangi şeklin kenarıdır?

- ☐ Yedigen
☐ Sekizgen
☐ Altıgen



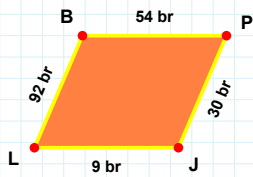
|NR| kenarı hangi şeklin kenarıdır?

- ☐ Altıgen
☐ Sekizgen
☐ Yedigen



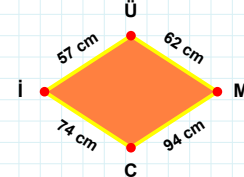
93 cm hangi şeklin kenarıdır?

- ☐ Yedigen
☐ Sekizgen
☐ Altıgen



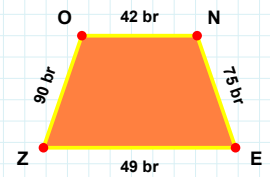
94 cm hangi şeklin kenarıdır?

- ☐ Eşkenar Dörtgen
☐ Paralelkenar
☐ Yamuk



|EZ| kenarı hangi şeklin kenarıdır?

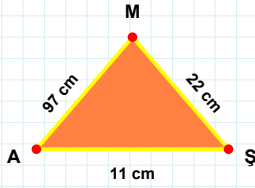
- ☐ Eşkenar Dörtgen
☐ Paralelkenar
☐ Yamuk



|PJ| kenarı hangi şeklin kenarıdır?

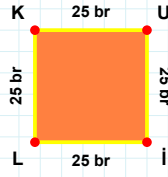
- ☐ Yamuk
☐ Paralelkenar
☐ Eşkenar Dörtgen

SORU: Aşağıdaki şekilleri inceleyiniz. Verilen kenar bilgisinin hangi şekle ait olduğunu işaretleyiniz.



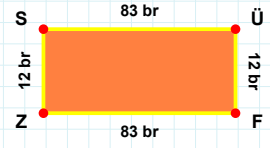
[İL] kenarı hangi şeklin kenarıdır?

- ☐ Dikdörtgen
☐ Kare
☐ Üçgen



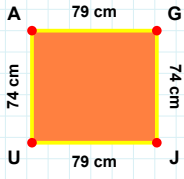
[SÜ] kenarı hangi şeklin kenarıdır?

- ☐ Dikdörtgen
☐ Kare
☐ Üçgen



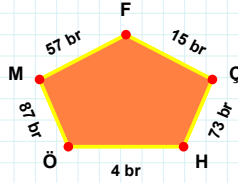
[ŞM] kenarı hangi şeklin kenarıdır?

- ☐ Kare
☐ Üçgen
☐ Dikdörtgen



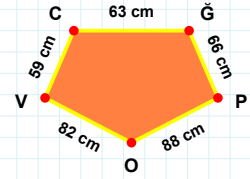
[OV] kenarı hangi şeklin kenarıdır?

- ☐ Ters Beşgen
☐ Dikey Dikdörtgen
☐ Beşgen



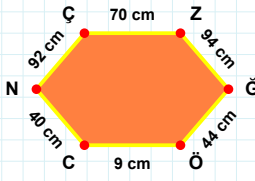
[AG] kenarı hangi şeklin kenarıdır?

- ☐ Dikey Dikdörtgen
☐ Beşgen
☐ Ters Beşgen



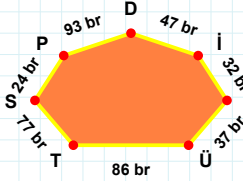
15 br hangi şeklin kenarıdır?

- ☐ Dikey Dikdörtgen
☐ Ters Beşgen
☐ Beşgen



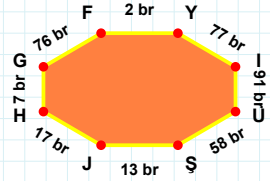
[FY] kenarı hangi şeklin kenarıdır?

- ☐ Yedigen
☐ Sekizgen
☐ Altıgen



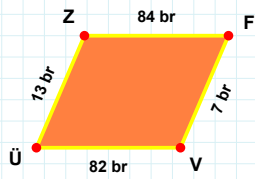
[ÖC] kenarı hangi şeklin kenarıdır?

- ☐ Yedigen
☐ Sekizgen
☐ Altıgen



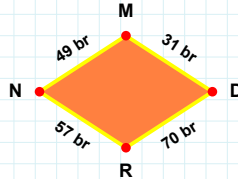
32 br hangi şeklin kenarıdır?

- ☐ Yedigen
☐ Altıgen
☐ Sekizgen



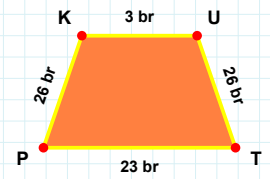
57 br hangi şeklin kenarıdır?

- ☐ Eşkenar Dörtgen
☐ Yamuk
☐ Paralelkenar



[KU] kenarı hangi şeklin kenarıdır?

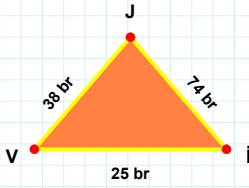
- ☐ Yamuk
☐ Eşkenar Dörtgen
☐ Paralelkenar



[ZF] kenarı hangi şeklin kenarıdır?

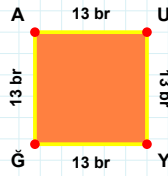
- ☐ Yamuk
☐ Eşkenar Dörtgen
☐ Paralelkenar

SORU: Aşağıdaki şekilleri inceleyiniz. Verilen kenar bilgisinin hangi şekle ait olduğunu işaretleyiniz.



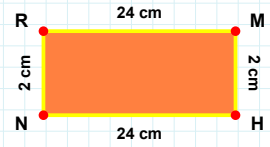
|RM| kenarı hangi şeklin kenarıdır?

- ☐ Dikdörtgen
☐ Üçgen
☐ Kare



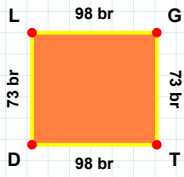
|LJ| kenarı hangi şeklin kenarıdır?

- ☐ Dikdörtgen
☐ Üçgen
☐ Kare



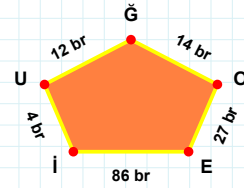
|AU| kenarı hangi şeklin kenarıdır?

- ☐ Üçgen
☐ Kare
☐ Dikdörtgen



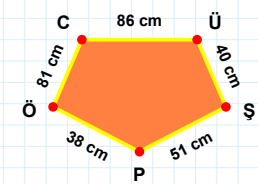
|ÜŞ| kenarı hangi şeklin kenarıdır?

- ☐ Beşgen
☐ Dikey Dikdörtgen
☐ Ters Beşgen



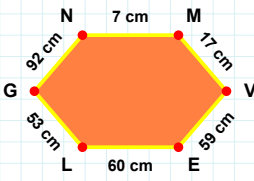
|LG| kenarı hangi şeklin kenarıdır?

- ☐ Dikey Dikdörtgen
☐ Ters Beşgen
☐ Beşgen



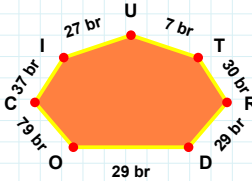
14 br hangi şeklin kenarıdır?

- ☐ Dikey Dikdörtgen
☐ Beşgen
☐ Ters Beşgen



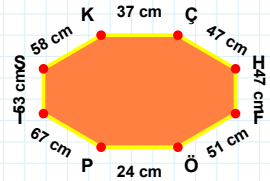
30 br hangi şeklin kenarıdır?

- ☐ Yedigen
☐ Sekizgen
☐ Altıgen



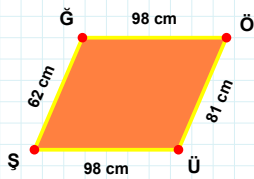
|HF| kenarı hangi şeklin kenarıdır?

- ☐ Yedigen
☐ Sekizgen
☐ Altıgen



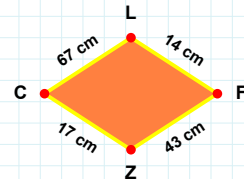
|NM| kenarı hangi şeklin kenarıdır?

- ☐ Sekizgen
☐ Altıgen
☐ Yedigen



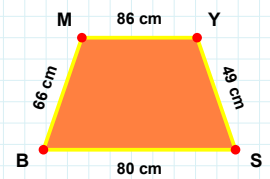
14 cm hangi şeklin kenarıdır?

- ☐ Yamuk
☐ Paralelkenar
☐ Eşkenar Dörtgen



|BM| kenarı hangi şeklin kenarıdır?

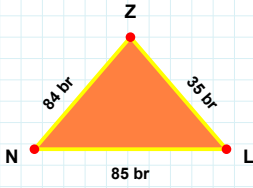
- ☐ Yamuk
☐ Eşkenar Dörtgen
☐ Paralelkenar



|ÖÜ| kenarı hangi şeklin kenarıdır?

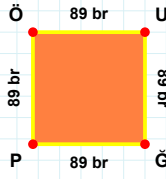
- ☐ Yamuk
☐ Eşkenar Dörtgen
☐ Paralelkenar

SORU: Aşağıdaki şekilleri inceleyiniz. Verilen kenar bilgisinin hangi şekle ait olduğunu işaretleyiniz.



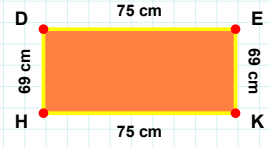
|ÖÜ| kenarı hangi şeklin kenarıdır?

- ☐ Üçgen
☐ Kare
☐ Dikdörtgen



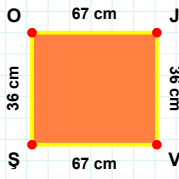
|HD| kenarı hangi şeklin kenarıdır?

- ☐ Dikdörtgen
☐ Üçgen
☐ Kare



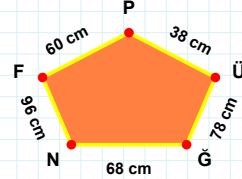
|LZ| kenarı hangi şeklin kenarıdır?

- ☐ Dikdörtgen
☐ Üçgen
☐ Kare



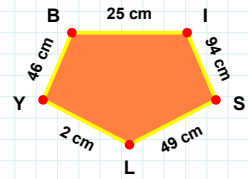
96 cm hangi şeklin kenarıdır?

- ☐ Beşgen
☐ Dikey Dikdörtgen
☐ Ters Beşgen



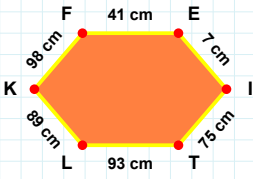
|SL| kenarı hangi şeklin kenarıdır?

- ☐ Dikey Dikdörtgen
☐ Beşgen
☐ Ters Beşgen



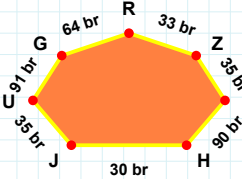
|VS| kenarı hangi şeklin kenarıdır?

- ☐ Ters Beşgen
☐ Dikey Dikdörtgen
☐ Beşgen



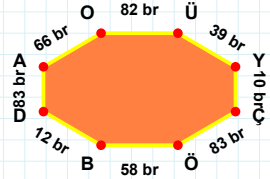
90 br hangi şeklin kenarıdır?

- ☐ Yedigen
☐ Altigen
☐ Sekizgen



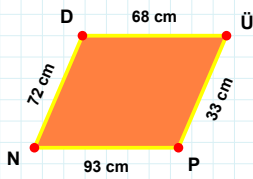
|ÇÖ| kenarı hangi şeklin kenarıdır?

- ☐ Sekizgen
☐ Altigen
☐ Yedigen



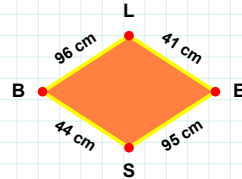
|KF| kenarı hangi şeklin kenarıdır?

- ☐ Altigen
☐ Yedigen
☐ Sekizgen



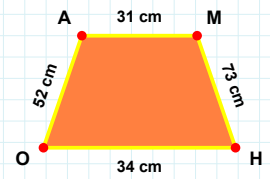
96 cm hangi şeklin kenarıdır?

- ☐ Yamuk
☐ Paralelkenar
☐ Eşkenar Dörtgen



|MH| kenarı hangi şeklin kenarıdır?

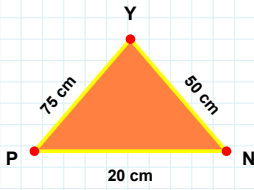
- ☐ Eşkenar Dörtgen
☐ Paralelkenar
☐ Yamuk



|PN| kenarı hangi şeklin kenarıdır?

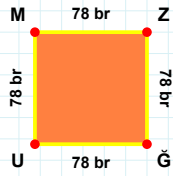
- ☐ Paralelkenar
☐ Yamuk
☐ Eşkenar Dörtgen

SORU: Aşağıdaki şekilleri inceleyiniz. Verilen kenar bilgisinin hangi şekle ait olduğunu işaretleyiniz.



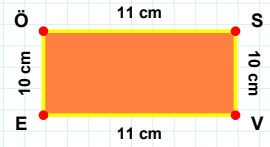
[MZ] kenarı hangi şeklin kenarıdır?

- ☐ Dikdörtgen
☐ Üçgen
☐ Kare



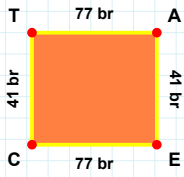
[EÖ] kenarı hangi şeklin kenarıdır?

- ☐ Dikdörtgen
☐ Kare
☐ Üçgen



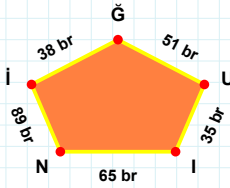
[YP] kenarı hangi şeklin kenarıdır?

- ☐ Kare
☐ Üçgen
☐ Dikdörtgen



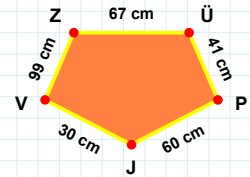
[PJ] kenarı hangi şeklin kenarıdır?

- ☐ Beşgen
☐ Dikey Dikdörtgen
☐ Ters Beşgen



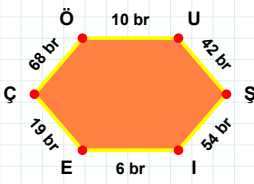
[TA] kenarı hangi şeklin kenarıdır?

- ☐ Dikey Dikdörtgen
☐ Beşgen
☐ Ters Beşgen



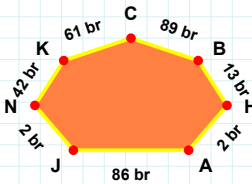
51 br hangi şeklin kenarıdır?

- ☐ Beşgen
☐ Ters Beşgen
☐ Dikey Dikdörtgen



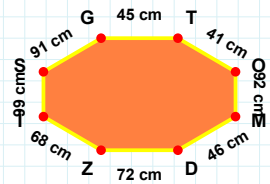
89 br hangi şeklin kenarıdır?

- ☐ Yedigen
☐ Altigen
☐ Sekizgen



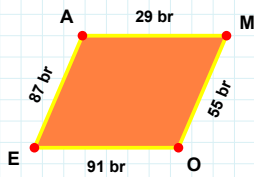
[SG] kenarı hangi şeklin kenarıdır?

- ☐ Sekizgen
☐ Altigen
☐ Yedigen



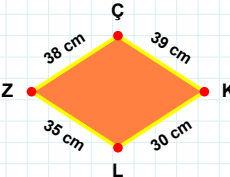
[ÇÖ] kenarı hangi şeklin kenarıdır?

- ☐ Altigen
☐ Yedigen
☐ Sekizgen



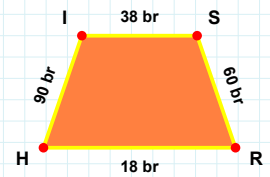
30 cm hangi şeklin kenarıdır?

- ☐ Paralelkenar
☐ Yamuk
☐ Eşkenar Dörtgen



[SR] kenarı hangi şeklin kenarıdır?

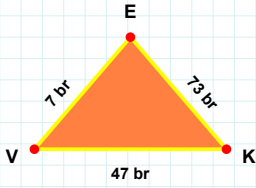
- ☐ Yamuk
☐ Paralelkenar
☐ Eşkenar Dörtgen



[MO] kenarı hangi şeklin kenarıdır?

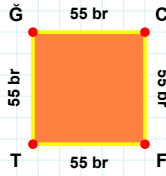
- ☐ Eşkenar Dörtgen
☐ Yamuk
☐ Paralelkenar

SORU: Aşağıdaki şekilleri inceleyiniz. Verilen kenar bilgisinin hangi şekle ait olduğunu işaretleyiniz.



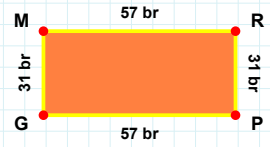
[CF] kenarı hangi şeklin kenarıdır?

- ☐ Dikdörtgen
☐ Üçgen
☐ Kare



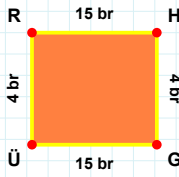
[MR] kenarı hangi şeklin kenarıdır?

- ☐ Kare
☐ Üçgen
☐ Dikdörtgen



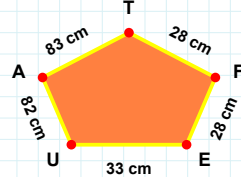
[KE] kenarı hangi şeklin kenarıdır?

- ☐ Kare
☐ Dikdörtgen
☐ Üçgen



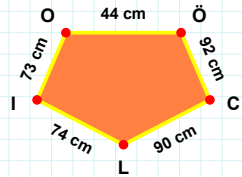
83 cm hangi şeklin kenarıdır?

- ☐ Beşgen
☐ Dikey Dikdörtgen
☐ Ters Beşgen



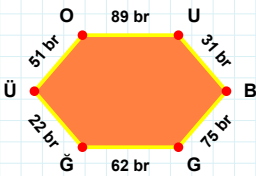
[CL] kenarı hangi şeklin kenarıdır?

- ☐ Ters Beşgen
☐ Dikey Dikdörtgen
☐ Beşgen



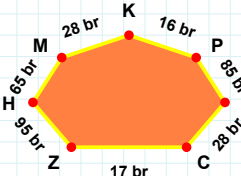
[HG] kenarı hangi şeklin kenarıdır?

- ☐ Ters Beşgen
☐ Beşgen
☐ Dikey Dikdörtgen



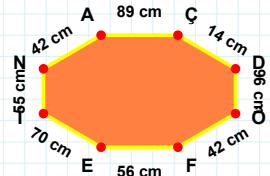
17 br hangi şeklin kenarıdır?

- ☐ Altıgen
☐ Yediggen
☐ Sekizgen



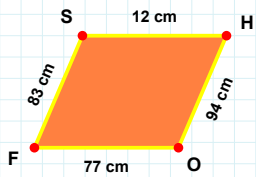
[NA] kenarı hangi şeklin kenarıdır?

- ☐ Altıgen
☐ Yediggen
☐ Sekizgen



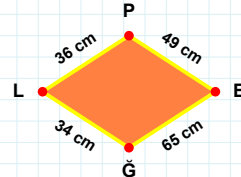
[GĞ] kenarı hangi şeklin kenarıdır?

- ☐ Altıgen
☐ Sekizgen
☐ Yediggen



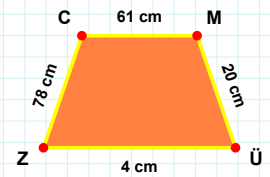
[ÜZ] kenarı hangi şeklin kenarıdır?

- ☐ Paralelkenar
☐ Yamuk
☐ Eşkenar Dörtgen



[HO] kenarı hangi şeklin kenarıdır?

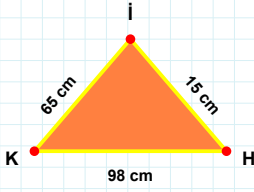
- ☐ Paralelkenar
☐ Yamuk
☐ Eşkenar Dörtgen



49 cm hangi şeklin kenarıdır?

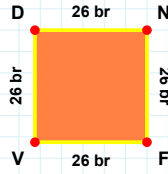
- ☐ Yamuk
☐ Eşkenar Dörtgen
☐ Paralelkenar

SORU: Aşağıdaki şekilleri inceleyiniz. Verilen kenar bilgisinin hangi şekle ait olduğunu işaretleyiniz.



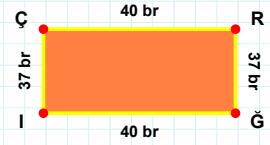
[VD] kenarı hangi şeklin kenarıdır?

- ☐ Dikdörtgen
☐ Kare
☐ Üçgen



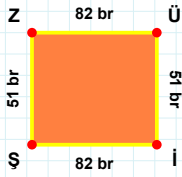
[ÇR] kenarı hangi şeklin kenarıdır?

- ☐ Kare
☐ Üçgen
☐ Dikdörtgen



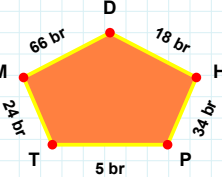
[İK] kenarı hangi şeklin kenarıdır?

- ☐ Üçgen
☐ Dikdörtgen
☐ Kare



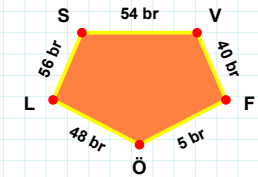
[LS] kenarı hangi şeklin kenarıdır?

- ☐ Beşgen
☐ Dikey Dikdörtgen
☐ Ters Beşgen



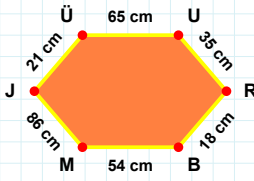
[ZÜ] kenarı hangi şeklin kenarıdır?

- ☐ Beşgen
☐ Ters Beşgen
☐ Dikey Dikdörtgen



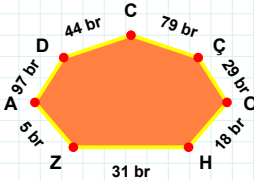
18 br hangi şeklin kenarıdır?

- ☐ Ters Beşgen
☐ Beşgen
☐ Dikey Dikdörtgen



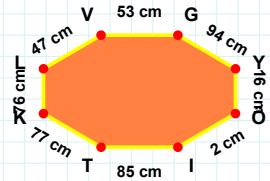
[Öİ] kenarı hangi şeklin kenarıdır?

- ☐ Altıgen
☐ Sekizgen
☐ Yediggen



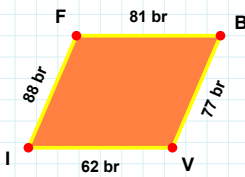
[MJ] kenarı hangi şeklin kenarıdır?

- ☐ Yediggen
☐ Altıgen
☐ Sekizgen



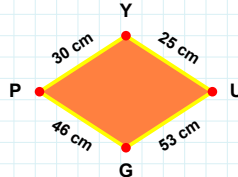
44 br hangi şeklin kenarıdır?

- ☐ Sekizgen
☐ Yediggen
☐ Altıgen



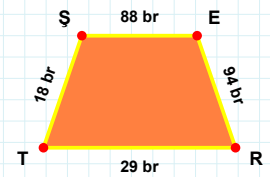
46 cm hangi şeklin kenarıdır?

- ☐ Paralelkenar
☐ Eşkenar Dörtgen
☐ Yamuk



[ŞE] kenarı hangi şeklin kenarıdır?

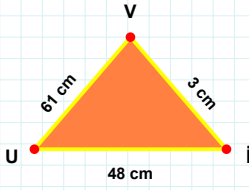
- ☐ Yamuk
☐ Eşkenar Dörtgen
☐ Paralelkenar



[VI] kenarı hangi şeklin kenarıdır?

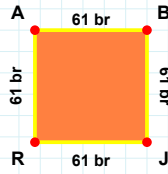
- ☐ Eşkenar Dörtgen
☐ Yamuk
☐ Paralelkenar

SORU: Aşağıdaki şekilleri inceleyiniz. Verilen kenar bilgisinin hangi şekle ait olduğunu işaretleyiniz.



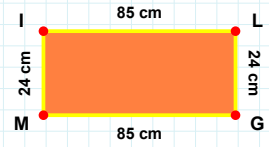
[JR] kenarı hangi şeklin kenarıdır?

- ☐ Dikdörtgen
☐ Kare
☐ Üçgen



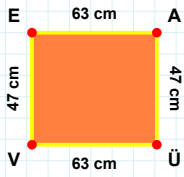
[JL] kenarı hangi şeklin kenarıdır?

- ☐ Üçgen
☐ Dikdörtgen
☐ Kare



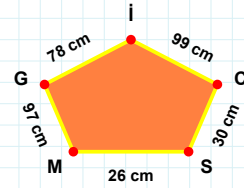
[İV] kenarı hangi şeklin kenarıdır?

- ☐ Üçgen
☐ Kare
☐ Dikdörtgen



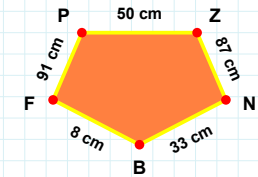
[BF] kenarı hangi şeklin kenarıdır?

- ☐ Ters Beşgen
☐ Dikey Dikdörtgen
☐ Beşgen



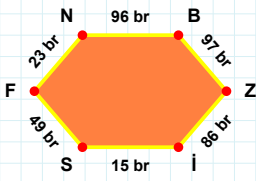
[EA] kenarı hangi şeklin kenarıdır?

- ☐ Dikey Dikdörtgen
☐ Ters Beşgen
☐ Beşgen



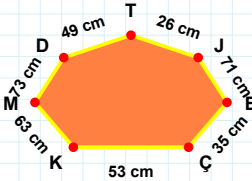
30 cm hangi şeklin kenarıdır?

- ☐ Beşgen
☐ Dikey Dikdörtgen
☐ Ters Beşgen



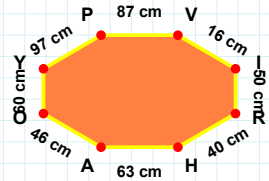
71 cm hangi şeklin kenarıdır?

- ☐ Yedigen
☐ Altıgen
☐ Sekizgen



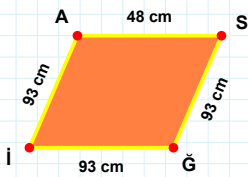
[PV] kenarı hangi şeklin kenarıdır?

- ☐ Altıgen
☐ Sekizgen
☐ Yedigen



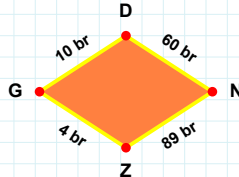
[İS] kenarı hangi şeklin kenarıdır?

- ☐ Yedigen
☐ Sekizgen
☐ Altıgen



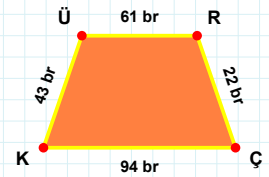
[ÇK] kenarı hangi şeklin kenarıdır?

- ☐ Eşkenar Dörtgen
☐ Yamuk
☐ Paralelkenar



[İA] kenarı hangi şeklin kenarıdır?

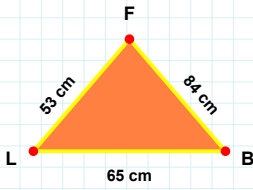
- ☐ Eşkenar Dörtgen
☐ Paralelkenar
☐ Yamuk



89 br hangi şeklin kenarıdır?

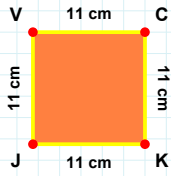
- ☐ Paralelkenar
☐ Yamuk
☐ Eşkenar Dörtgen

SORU: Aşağıdaki şekilleri inceleyiniz. Verilen kenar bilgisinin hangi şekle ait olduğunu işaretleyiniz.



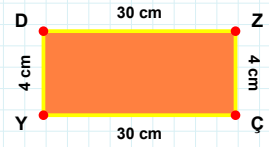
|ZÇ| kenarı hangi şeklin kenarıdır?

- ☐ Dikdörtgen
☐ Üçgen
☐ Kare



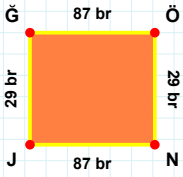
|LB| kenarı hangi şeklin kenarıdır?

- ☐ Dikdörtgen
☐ Üçgen
☐ Kare



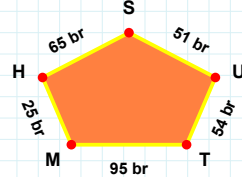
|JV| kenarı hangi şeklin kenarıdır?

- ☐ Kare
☐ Dikdörtgen
☐ Üçgen



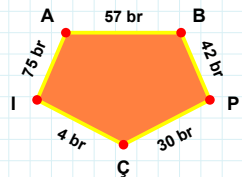
|PÇ| kenarı hangi şeklin kenarıdır?

- ☐ Dikey Dikdörtgen
☐ Ters Beşgen
☐ Beşgen



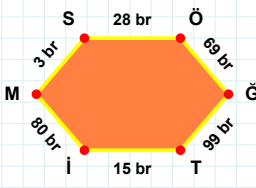
|NJ| kenarı hangi şeklin kenarıdır?

- ☐ Ters Beşgen
☐ Beşgen
☐ Dikey Dikdörtgen



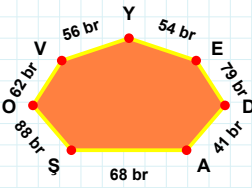
25 br hangi şeklin kenarıdır?

- ☐ Ters Beşgen
☐ Dikey Dikdörtgen
☐ Beşgen



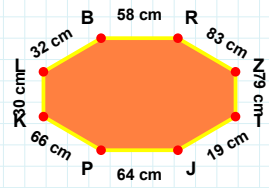
|IJ| kenarı hangi şeklin kenarıdır?

- ☐ Sekizgen
☐ Altıgen
☐ Yediggen



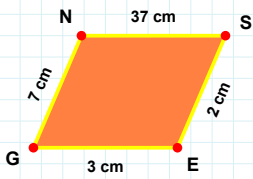
|MS| kenarı hangi şeklin kenarıdır?

- ☐ Sekizgen
☐ Yediggen
☐ Altıgen



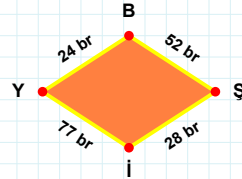
79 br hangi şeklin kenarıdır?

- ☐ Yediggen
☐ Sekizgen
☐ Altıgen



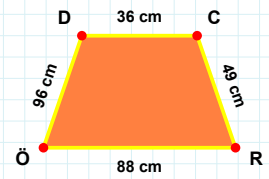
|DC| kenarı hangi şeklin kenarıdır?

- ☐ Yamuk
☐ Paralelkenar
☐ Eşkenar Dörtgen



|EG| kenarı hangi şeklin kenarıdır?

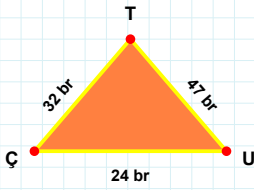
- ☐ Paralelkenar
☐ Yamuk
☐ Eşkenar Dörtgen



24 br hangi şeklin kenarıdır?

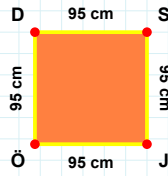
- ☐ Yamuk
☐ Eşkenar Dörtgen
☐ Paralelkenar

SORU: Aşağıdaki şekilleri inceleyiniz. Verilen kenar bilgisinin hangi şekle ait olduğunu işaretleyiniz.



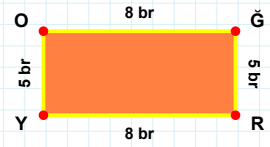
[YO] kenarı hangi şeklin kenarıdır?

- ☐ Kare
☐ Dikdörtgen
☐ Üçgen



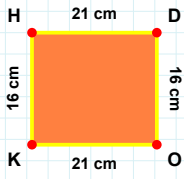
[TÇ] kenarı hangi şeklin kenarıdır?

- ☐ Üçgen
☐ Dikdörtgen
☐ Kare



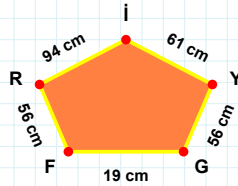
[SJ] kenarı hangi şeklin kenarıdır?

- ☐ Dikdörtgen
☐ Üçgen
☐ Kare



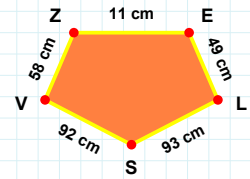
[EL] kenarı hangi şeklin kenarıdır?

- ☐ Beşgen
☐ Dikey Dikdörtgen
☐ Ters Beşgen



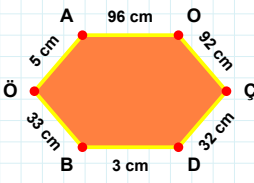
[HD] kenarı hangi şeklin kenarıdır?

- ☐ Beşgen
☐ Ters Beşgen
☐ Dikey Dikdörtgen



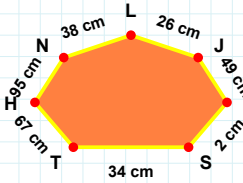
19 cm hangi şeklin kenarıdır?

- ☐ Ters Beşgen
☐ Dikey Dikdörtgen
☐ Beşgen



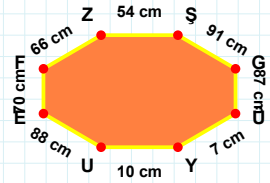
67 cm hangi şeklin kenarıdır?

- ☐ Altıgen
☐ Sekizgen
☐ Yedigen



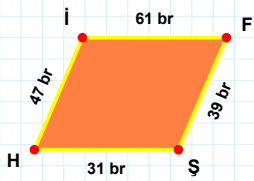
[ZŞ] kenarı hangi şeklin kenarıdır?

- ☐ Sekizgen
☐ Altıgen
☐ Yedigen



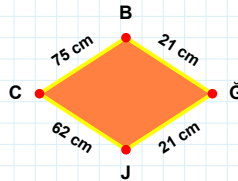
[BÖ] kenarı hangi şeklin kenarıdır?

- ☐ Yedigen
☐ Altıgen
☐ Sekizgen



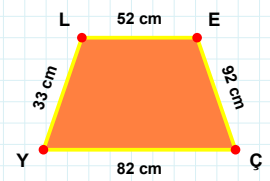
[LE] kenarı hangi şeklin kenarıdır?

- ☐ Eşkenar Dörtgen
☐ Yamuk
☐ Paralelkenar



[İF] kenarı hangi şeklin kenarıdır?

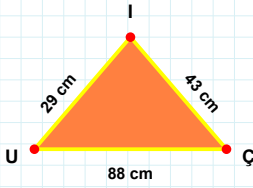
- ☐ Yamuk
☐ Eşkenar Dörtgen
☐ Paralelkenar



75 cm hangi şeklin kenarıdır?

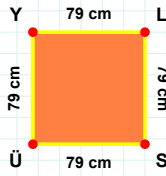
- ☐ Paralelkenar
☐ Yamuk
☐ Eşkenar Dörtgen

SORU: Aşağıdaki şekilleri inceleyiniz. Verilen kenar bilgisinin hangi şekle ait olduğunu işaretleyiniz.



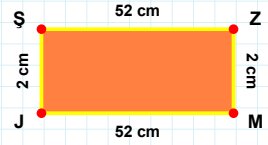
|SÜ| kenarı hangi şeklin kenarıdır?

- ☐ Dikdörtgen
☐ Kare
☐ Üçgen



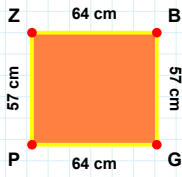
|ZM| kenarı hangi şeklin kenarıdır?

- ☐ Üçgen
☐ Dikdörtgen
☐ Kare



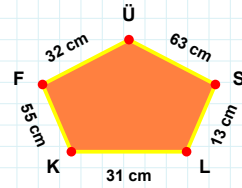
|UÇ| kenarı hangi şeklin kenarıdır?

- ☐ Dikdörtgen
☐ Üçgen
☐ Kare



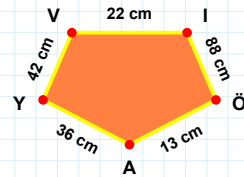
|VI| kenarı hangi şeklin kenarıdır?

- ☐ Ters Beşgen
☐ Beşgen
☐ Dikey Dikdörtgen



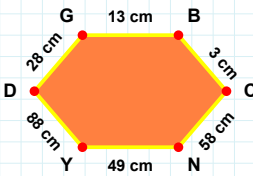
|PZ| kenarı hangi şeklin kenarıdır?

- ☐ Beşgen
☐ Dikey Dikdörtgen
☐ Ters Beşgen



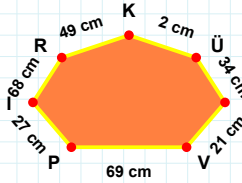
32 cm hangi şeklin kenarıdır?

- ☐ Beşgen
☐ Dikey Dikdörtgen
☐ Ters Beşgen



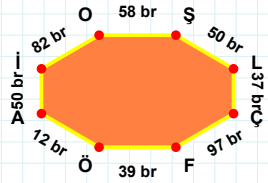
2 cm hangi şeklin kenarıdır?

- ☐ Yediggen
☐ Altıgen
☐ Sekizgen



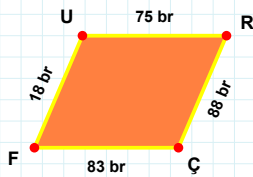
|Aİ| kenarı hangi şeklin kenarıdır?

- ☐ Yediggen
☐ Sekizgen
☐ Altıgen



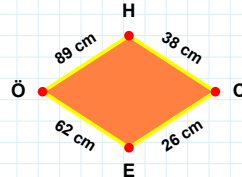
|BC| kenarı hangi şeklin kenarıdır?

- ☐ Sekizgen
☐ Yediggen
☐ Altıgen



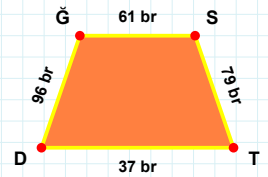
|ST| kenarı hangi şeklin kenarıdır?

- ☐ Eşkenar Dörtgen
☐ Yamuk
☐ Paralelkenar



|FU| kenarı hangi şeklin kenarıdır?

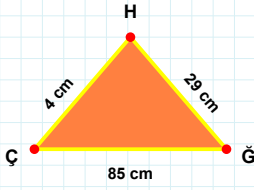
- ☐ Eşkenar Dörtgen
☐ Paralelkenar
☐ Yamuk



26 cm hangi şeklin kenarıdır?

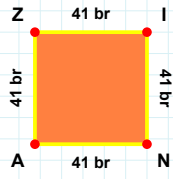
- ☐ Yamuk
☐ Paralelkenar
☐ Eşkenar Dörtgen

SORU: Aşağıdaki şekilleri inceleyiniz. Verilen kenar bilgisinin hangi şekle ait olduğunu işaretleyiniz.



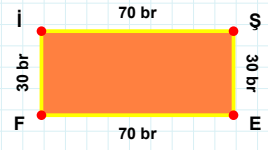
|NA| kenarı hangi şeklin kenarıdır?

- ☐ Üçgen
☐ Dikdörtgen
☐ Kare



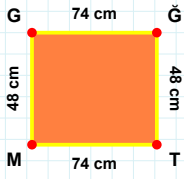
|İŞ| kenarı hangi şeklin kenarıdır?

- ☐ Kare
☐ Dikdörtgen
☐ Üçgen



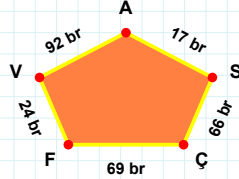
|HÇ| kenarı hangi şeklin kenarıdır?

- ☐ Üçgen
☐ Dikdörtgen
☐ Kare



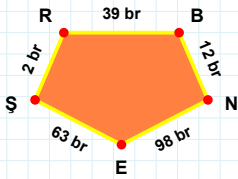
92 br hangi şeklin kenarıdır?

- ☐ Beşgen
☐ Dikey Dikdörtgen
☐ Ters Beşgen



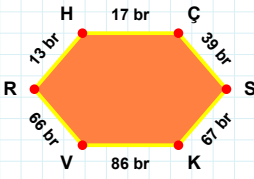
|SR| kenarı hangi şeklin kenarıdır?

- ☐ Ters Beşgen
☐ Dikey Dikdörtgen
☐ Beşgen



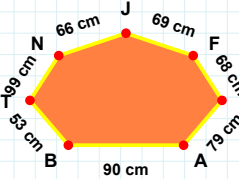
|GĞ| kenarı hangi şeklin kenarıdır?

- ☐ Ters Beşgen
☐ Dikey Dikdörtgen
☐ Beşgen



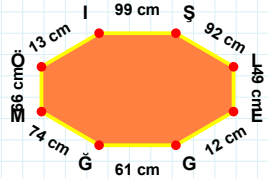
69 cm hangi şeklin kenarıdır?

- ☐ Sekizgen
☐ Yediggen
☐ Altıgen



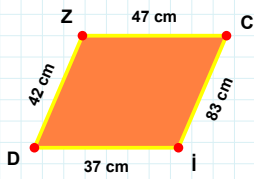
|İŞ| kenarı hangi şeklin kenarıdır?

- ☐ Altıgen
☐ Sekizgen
☐ Yediggen



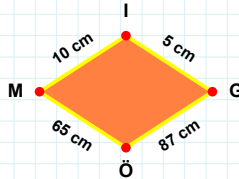
|RH| kenarı hangi şeklin kenarıdır?

- ☐ Yediggen
☐ Sekizgen
☐ Altıgen



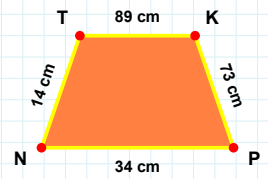
10 cm hangi şeklin kenarıdır?

- ☐ Paralelkenar
☐ Yamuk
☐ Eşkenar Dörtgen



|KP| kenarı hangi şeklin kenarıdır?

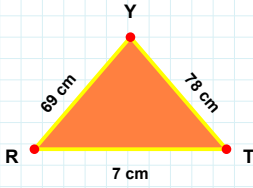
- ☐ Eşkenar Dörtgen
☐ Paralelkenar
☐ Yamuk



|İD| kenarı hangi şeklin kenarıdır?

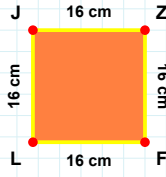
- ☐ Paralelkenar
☐ Yamuk
☐ Eşkenar Dörtgen

SORU: Aşağıdaki şekilleri inceleyiniz. Verilen kenar bilgisinin hangi şekle ait olduğunu işaretleyiniz.



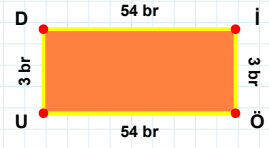
[ÖÜ] kenarı hangi şeklin kenarıdır?

- ☐ Üçgen
☐ Kare
☐ Dikdörtgen



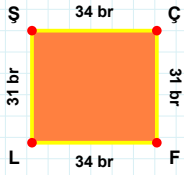
[TY] kenarı hangi şeklin kenarıdır?

- ☐ Kare
☐ Dikdörtgen
☐ Üçgen



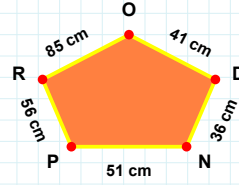
[LJ] kenarı hangi şeklin kenarıdır?

- ☐ Üçgen
☐ Dikdörtgen
☐ Kare



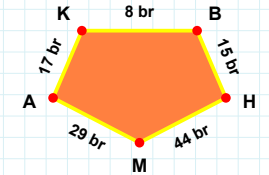
36 cm hangi şeklin kenarıdır?

- ☐ Beşgen
☐ Dikey Dikdörtgen
☐ Ters Beşgen



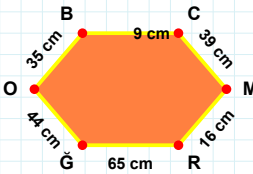
[BH] kenarı hangi şeklin kenarıdır?

- ☐ Dikey Dikdörtgen
☐ Beşgen
☐ Ters Beşgen



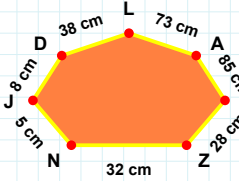
[FL] kenarı hangi şeklin kenarıdır?

- ☐ Beşgen
☐ Dikey Dikdörtgen
☐ Ters Beşgen



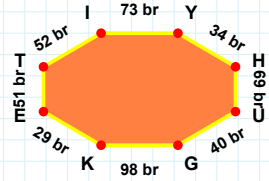
8 cm hangi şeklin kenarıdır?

- ☐ Sekizgen
☐ Altıgen
☐ Yedigen



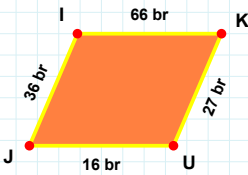
[GK] kenarı hangi şeklin kenarıdır?

- ☐ Sekizgen
☐ Altıgen
☐ Yedigen



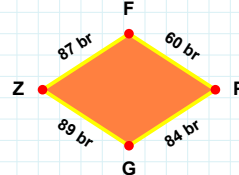
[ÖÖ] kenarı hangi şeklin kenarıdır?

- ☐ Sekizgen
☐ Yedigen
☐ Altıgen



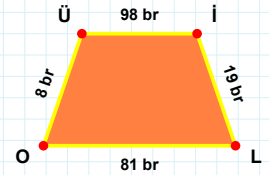
[İL] kenarı hangi şeklin kenarıdır?

- ☐ Yamuk
☐ Paralelkenar
☐ Eşkenar Dörtgen



[UJ] kenarı hangi şeklin kenarıdır?

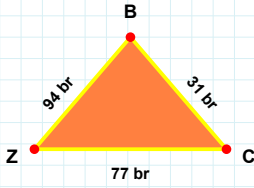
- ☐ Paralelkenar
☐ Eşkenar Dörtgen
☐ Yamuk



89 br hangi şeklin kenarıdır?

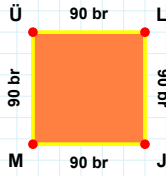
- ☐ Eşkenar Dörtgen
☐ Paralelkenar
☐ Yamuk

SORU: Aşağıdaki şekilleri inceleyiniz. Verilen kenar bilgisinin hangi şekle ait olduğunu işaretleyiniz.



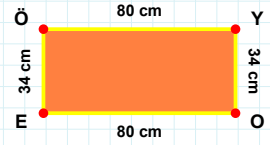
[LJ] kenarı hangi şeklin kenarıdır?

- ☐ Üçgen
☐ Kare
☐ Dikdörtgen



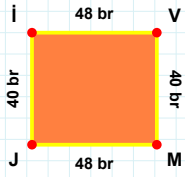
[YO] kenarı hangi şeklin kenarıdır?

- ☐ Dikdörtgen
☐ Kare
☐ Üçgen



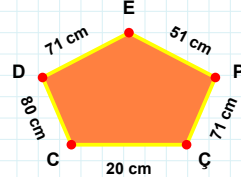
[BZ] kenarı hangi şeklin kenarıdır?

- ☐ Üçgen
☐ Kare
☐ Dikdörtgen



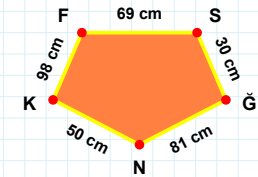
[ĞN] kenarı hangi şeklin kenarıdır?

- ☐ Ters Beşgen
☐ Beşgen
☐ Dikey Dikdörtgen



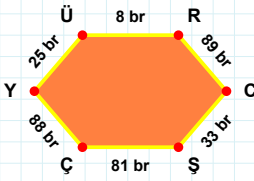
[VM] kenarı hangi şeklin kenarıdır?

- ☐ Ters Beşgen
☐ Beşgen
☐ Dikey Dikdörtgen



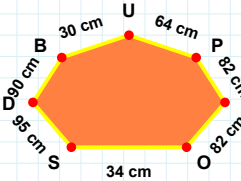
80 cm hangi şeklin kenarıdır?

- ☐ Ters Beşgen
☐ Dikey Dikdörtgen
☐ Beşgen



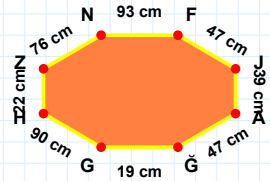
[JA] kenarı hangi şeklin kenarıdır?

- ☐ Sekizgen
☐ Altıgen
☐ Yedigen



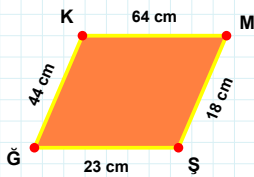
[ŞÇ] kenarı hangi şeklin kenarıdır?

- ☐ Sekizgen
☐ Yedigen
☐ Altıgen



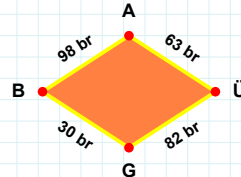
64 cm hangi şeklin kenarıdır?

- ☐ Sekizgen
☐ Altıgen
☐ Yedigen



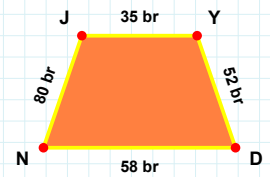
63 br hangi şeklin kenarıdır?

- ☐ Paralelkenar
☐ Eşkenar Dörtgen
☐ Yamuk



[NJ] kenarı hangi şeklin kenarıdır?

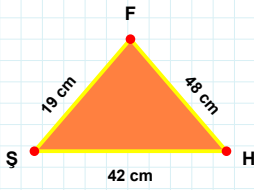
- ☐ Yamuk
☐ Eşkenar Dörtgen
☐ Paralelkenar



[KM] kenarı hangi şeklin kenarıdır?

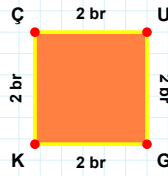
- ☐ Paralelkenar
☐ Yamuk
☐ Eşkenar Dörtgen

SORU: Aşağıdaki şekilleri inceleyiniz. Verilen kenar bilgisinin hangi şekle ait olduğunu işaretleyiniz.



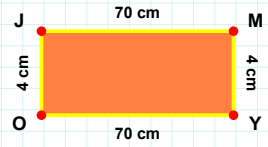
[UG] kenarı hangi şeklin kenarıdır?

- ☐ Dikdörtgen
☐ Üçgen
☐ Kare



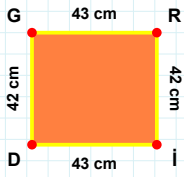
[YO] kenarı hangi şeklin kenarıdır?

- ☐ Kare
☐ Dikdörtgen
☐ Üçgen



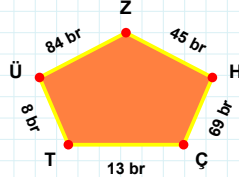
[SH] kenarı hangi şeklin kenarıdır?

- ☐ Üçgen
☐ Dikdörtgen
☐ Kare



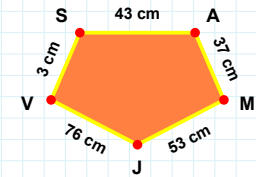
69 br hangi şeklin kenarıdır?

- ☐ Ters Beşgen
☐ Dikey Dikdörtgen
☐ Beşgen



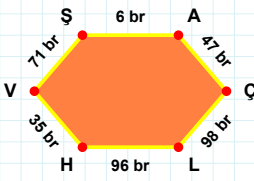
[AM] kenarı hangi şeklin kenarıdır?

- ☐ Beşgen
☐ Dikey Dikdörtgen
☐ Ters Beşgen



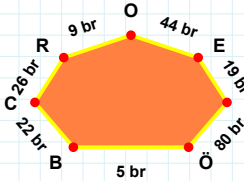
[ID] kenarı hangi şeklin kenarıdır?

- ☐ Ters Beşgen
☐ Beşgen
☐ Dikey Dikdörtgen



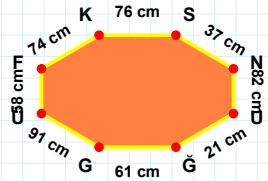
26 br hangi şeklin kenarıdır?

- ☐ Sekizgen
☐ Altıgen
☐ Yedigen



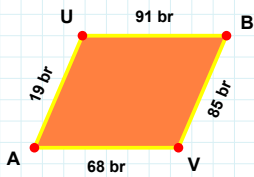
[SN] kenarı hangi şeklin kenarıdır?

- ☐ Sekizgen
☐ Altıgen
☐ Yedigen



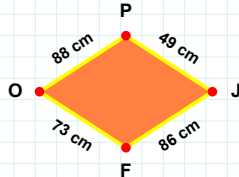
[SA] kenarı hangi şeklin kenarıdır?

- ☐ Yedigen
☐ Altıgen
☐ Sekizgen



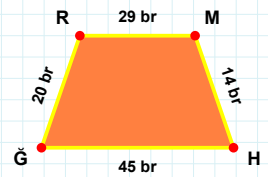
86 cm hangi şeklin kenarıdır?

- ☐ Yamuk
☐ Paralelkenar
☐ Eşkenar Dörtgen



[RM] kenarı hangi şeklin kenarıdır?

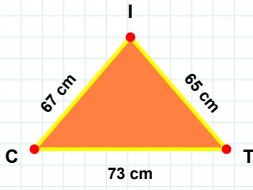
- ☐ Eşkenar Dörtgen
☐ Paralelkenar
☐ Yamuk



[UB] kenarı hangi şeklin kenarıdır?

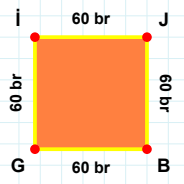
- ☐ Eşkenar Dörtgen
☐ Paralelkenar
☐ Yamuk

SORU: Aşağıdaki şekilleri inceleyiniz. Verilen kenar bilgisinin hangi şekle ait olduğunu işaretleyiniz.



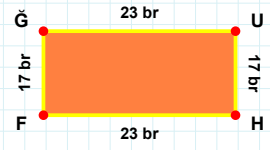
|HF| kenarı hangi şeklin kenarıdır?

- ☐ Üçgen
☐ Kare
☐ Dikdörtgen



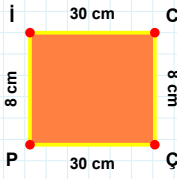
|IC| kenarı hangi şeklin kenarıdır?

- ☐ Kare
☐ Üçgen
☐ Dikdörtgen



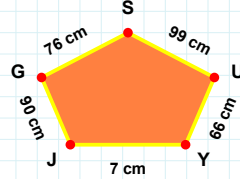
|GI| kenarı hangi şeklin kenarıdır?

- ☐ Üçgen
☐ Kare
☐ Dikdörtgen



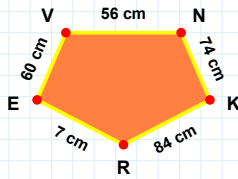
90 cm hangi şeklin kenarıdır?

- ☐ Ters Beşgen
☐ Beşgen
☐ Dikey Dikdörtgen



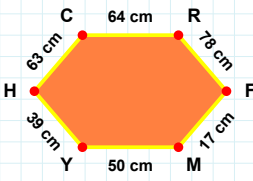
|NK| kenarı hangi şeklin kenarıdır?

- ☐ Dikey Dikdörtgen
☐ Ters Beşgen
☐ Beşgen



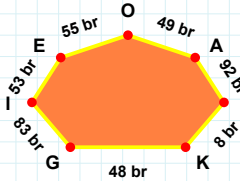
|ÇÇ| kenarı hangi şeklin kenarıdır?

- ☐ Beşgen
☐ Dikey Dikdörtgen
☐ Ters Beşgen



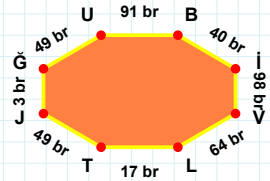
92 br hangi şeklin kenarıdır?

- ☐ Sekizgen
☐ Yediggen
☐ Altıgen



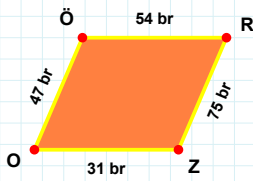
|Bİ| kenarı hangi şeklin kenarıdır?

- ☐ Altıgen
☐ Sekizgen
☐ Yediggen



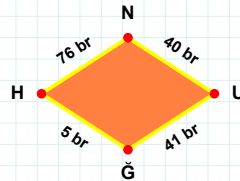
|FM| kenarı hangi şeklin kenarıdır?

- ☐ Altıgen
☐ Sekizgen
☐ Yediggen



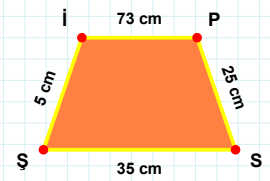
|PS| kenarı hangi şeklin kenarıdır?

- ☐ Eşkenar Dörtgen
☐ Yamuk
☐ Paralelkenar



|ZO| kenarı hangi şeklin kenarıdır?

- ☐ Eşkenar Dörtgen
☐ Yamuk
☐ Paralelkenar



5 br hangi şeklin kenarıdır?

- ☐ Paralelkenar
☐ Eşkenar Dörtgen
☐ Yamuk

SÜREÇ ODAKLI DEĞERLENDİRME ÖLÇEĞİ

Geliştirilmeli (0-109)	İyi (110-187)	Çok İyi (188-265)	Mükemmel (266-312)
<input type="checkbox"/>	<input type="checkbox"/>	<input type="checkbox"/>	<input type="checkbox"/>

Hazırlayan:

Bu bölüme sınıfınızın ilgili kazanıma yönelik genel durumuna ilişkin gözlem ve izlenimlerinizi, öğrencilerinizin bu kazanımla ilgili öğrenme eksikliklerini ve bu eksikliklerin giderilmesi amacıyla yaptığınız/yapmayı planladığınız faaliyetleri not edebilirsiniz.

No	Adı - Soyadı	Toplam Puan	Değerlendirme
1			
2			
3			
4			
5			
6			
7			
8			
9			
10			
11			
12			
13			
14			
15			
16			
17			
18			
19			
20			
21			
22			
23			
24			
25			
26			
27			
28			
29			
30			
31			
32			
33			
34			
35			

Hazırlayan: