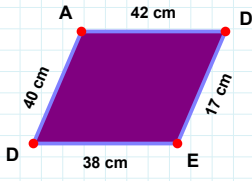
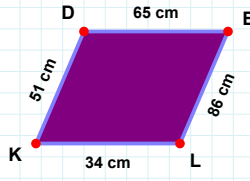


SORU: Aşağıdaki şekillerde istenen kenarın kaç birim veya santimetre olduğunu bulunuz.



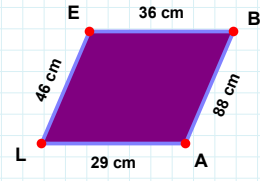
|LE| kaç cmdir?

- ☐ 56 cm
☐ 46 cm
☐ 48 cm



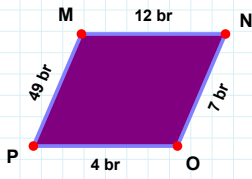
|EL| kaç cmdir?

- ☐ 89 cm
☐ 81 cm
☐ 86 cm



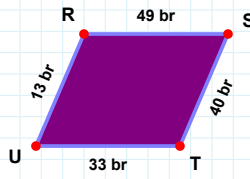
|DE| kaç cmdir?

- ☐ 7 cm
☐ 17 cm
☐ 18 cm



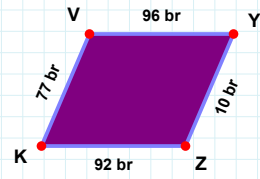
|ZK| kaç brdir?

- ☐ 93 br
☐ 92 br
☐ 91 br



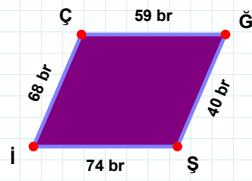
|RS| kaç brdir?

- ☐ 39 br
☐ 49 br
☐ 50 br



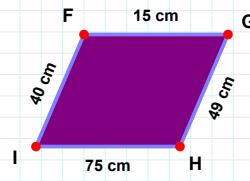
|MN| kaç brdir?

- ☐ 15 br
☐ 12 br
☐ 14 br



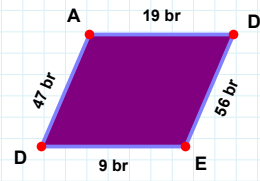
|Şİ| kaç brdir?

- ☐ 84 br
☐ 74 br
☐ 79 br



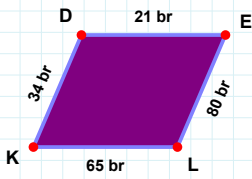
|FG| kaç cmdir?

- ☐ 20 cm
☐ 10 cm
☐ 15 cm



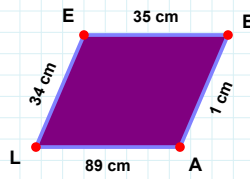
|DE| kaç brdir?

- ☐ 58 br
☐ 51 br
☐ 56 br



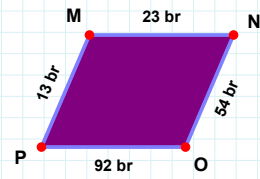
|PM| kaç brdir?

- ☐ 10 br
☐ 13 br
☐ 18 br



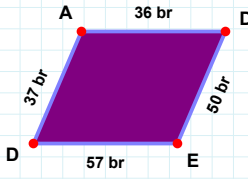
|LK| kaç brdir?

- ☐ 70 br
☐ 68 br
☐ 65 br



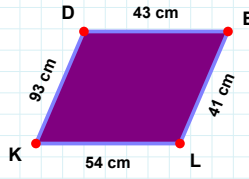
|BA| kaç cmdir?

- ☐ 2 cm
☐ 1 cm
☐ 6 cm

SORU: Aşağıdaki şekillerde istenen kenarın kaç birim veya santimetre olduğunu bulunuz.

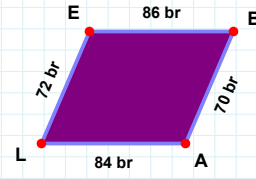
|EL| kaç cmdir?

- ☐ 41 cm
☐ 39 cm
☐ 38 cm



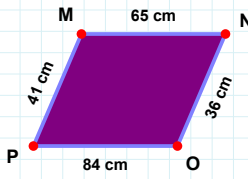
|ED| kaç brdir?

- ☐ 57 br
☐ 47 br
☐ 54 br



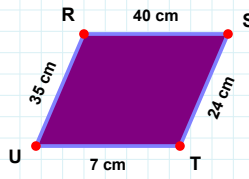
|AL| kaç brdir?

- ☐ 85 br
☐ 89 br
☐ 84 br



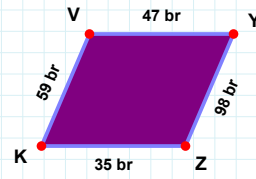
|ST| kaç cmdir?

- ☐ 21 cm
☐ 19 cm
☐ 24 cm



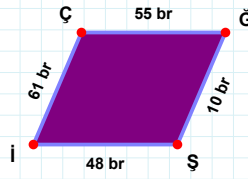
|YZ| kaç brdir?

- ☐ 96 br
☐ 98 br
☐ 97 br



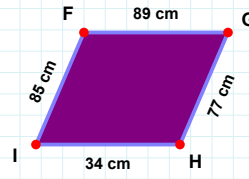
|OP| kaç cmdir?

- ☐ 74 cm
☐ 84 cm
☐ 82 cm



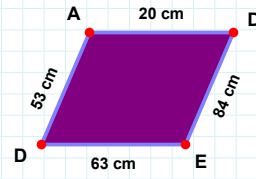
|Şİ| kaç brdir?

- ☐ 9 br
☐ 15 br
☐ 10 br



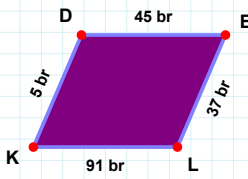
|DA| kaç cmdir?

- ☐ 58 cm
☐ 52 cm
☐ 53 cm



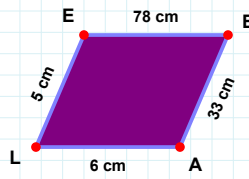
|GH| kaç cmdir?

- ☐ 74 cm
☐ 82 cm
☐ 77 cm



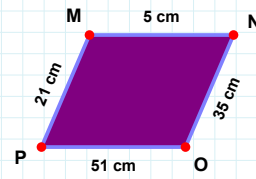
|BA| kaç cmdir?

- ☐ 23 cm
☐ 33 cm
☐ 36 cm



|PM| kaç cmdir?

- ☐ 20 cm
☐ 21 cm
☐ 26 cm



|DE| kaç brdir?

- ☐ 48 br
☐ 43 br
☐ 45 br

SÜREÇ ODAKLI DEĞERLENDİRME ÖLÇEĞİ

Doğru Sayısı: / 24

Öğretmen ilgili kutucuğu işaretler.

Geliştirilmeli (0-8)

İyi (9-14)

Çok İyi (15-20)

Mükemmel (21-24)

☐☐☐☐

Hazırlayan:

Bu bölüme sınıfınızın ilgili kazanıma yönelik genel durumuna ilişkin gözlem ve izlenimlerinizi, öğrencilerinizin bu kazanımla ilgili öğrenme eksikliklerini ve bu eksikliklerin giderilmesi amacıyla yaptığınız/yapmayı planladığınız faaliyetleri not edebilirsiniz.

No	Adı - Soyadı	Toplam Puan	Değerlendirme
1			
2			
3			
4			
5			
6			
7			
8			
9			
10			
11			
12			
13			
14			
15			
16			
17			
18			
19			
20			
21			
22			
23			
24			
25			
26			
27			
28			
29			
30			
31			
32			
33			
34			
35			

Hazırlayan: