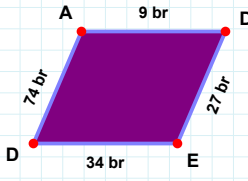
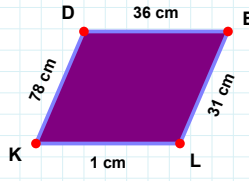


SORU: Aşağıdaki şekillerde istenen kenarın kaç birim veya santimetre olduğunu bulunuz.

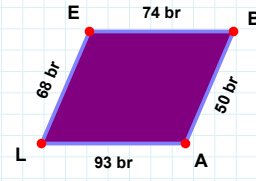
|LK| kaç cmdir?

- ☐ 3 cm
☐ 1 cm
☐ 11 cm



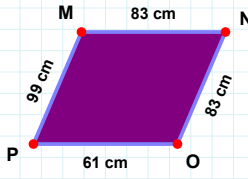
|DA| kaç brdir?

- ☐ 64 br
☐ 74 br
☐ 76 br



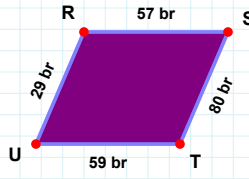
|BA| kaç brdir?

- ☐ 45 br
☐ 50 br
☐ 52 br



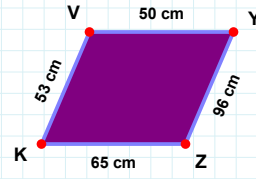
|OP| kaç cmdir?

- ☐ 64 cm
☐ 62 cm
☐ 61 cm



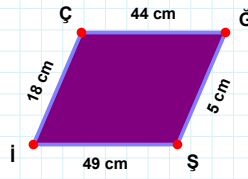
|VY| kaç cmdir?

- ☐ 47 cm
☐ 50 cm
☐ 49 cm



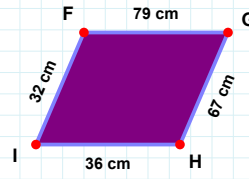
|UR| kaç brdir?

- ☐ 27 br
☐ 24 br
☐ 29 br



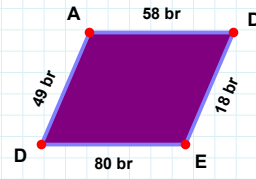
|DE| kaç brdir?

- ☐ 17 br
☐ 21 br
☐ 18 br



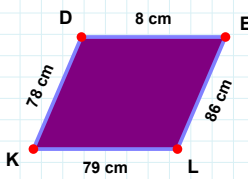
|Şİ| kaç cmdir?

- ☐ 51 cm
☐ 47 cm
☐ 49 cm



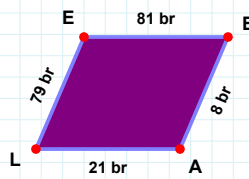
|GH| kaç cmdir?

- ☐ 67 cm
☐ 62 cm
☐ 72 cm



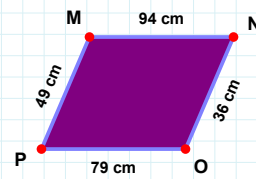
|MN| kaç cmdir?

- ☐ 94 cm
☐ 93 cm
☐ 97 cm



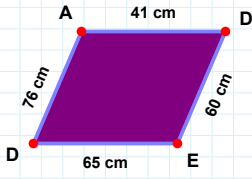
|LE| kaç brdir?

- ☐ 78 br
☐ 84 br
☐ 79 br



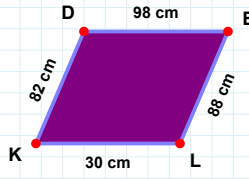
|KD| kaç cmdir?

- ☐ 78 cm
☐ 75 cm
☐ 81 cm

SORU: Aşağıdaki şekillerde istenen kenarın kaç birim veya santimetre olduğunu bulunuz.

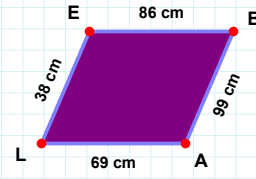
|ED| kaç cmdir?

- ☐ 75 cm
☐ 68 cm
☐ 65 cm



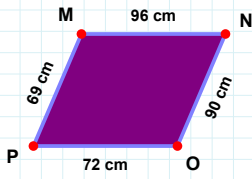
|DE| kaç cmdir?

- ☐ 97 cm
☐ 98 cm
☐ 96 cm



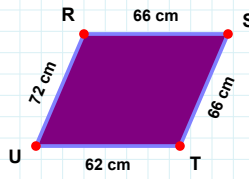
|AL| kaç cmdir?

- ☐ 69 cm
☐ 79 cm
☐ 59 cm



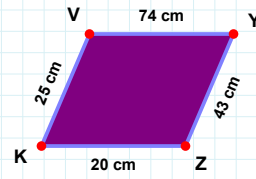
|ST| kaç cmdir?

- ☐ 66 cm
☐ 61 cm
☐ 64 cm



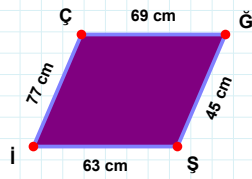
|PM| kaç cmdir?

- ☐ 67 cm
☐ 69 cm
☐ 59 cm



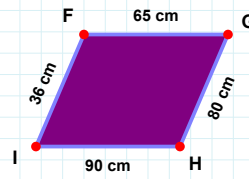
|KV| kaç cmdir?

- ☐ 35 cm
☐ 25 cm
☐ 26 cm



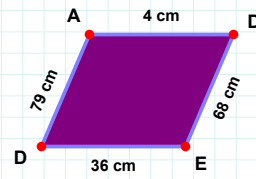
|İF| kaç cmdir?

- ☐ 41 cm
☐ 36 cm
☐ 35 cm



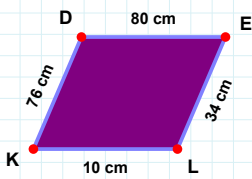
|İÇ| kaç cmdir?

- ☐ 77 cm
☐ 79 cm
☐ 72 cm



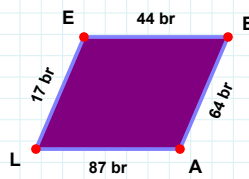
|AD| kaç cmdir?

- ☐ 6 cm
☐ 4 cm
☐ 2 cm



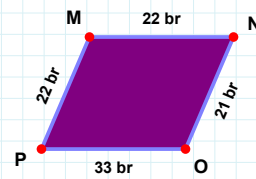
|AL| kaç brdir?

- ☐ 84 br
☐ 77 br
☐ 87 br



|LK| kaç cmdir?

- ☐ 10 cm
☐ 12 cm
☐ 13 cm



|OP| kaç brdir?

- ☐ 33 br
☐ 23 br
☐ 30 br

SÜREÇ ODAKLI DEĞERLENDİRME ÖLÇEĞİ

Doğru Sayısı: / 24

Öğretmen ilgili kutucuğu işaretler.

Geliştirilmeli (0-8)

İyi (9-14)

Çok İyi (15-20)

Mükemmel (21-24)

☐☐☐☐

Hazırlayan:

Bu bölüme sınıfınızın ilgili kazanıma yönelik genel durumuna ilişkin gözlem ve izlenimlerinizi, öğrencilerinizin bu kazanımla ilgili öğrenme eksikliklerini ve bu eksikliklerin giderilmesi amacıyla yaptığınız/yapmayı planladığınız faaliyetleri not edebilirsiniz.

No	Adı - Soyadı	Toplam Puan	Değerlendirme
1			
2			
3			
4			
5			
6			
7			
8			
9			
10			
11			
12			
13			
14			
15			
16			
17			
18			
19			
20			
21			
22			
23			
24			
25			
26			
27			
28			
29			
30			
31			
32			
33			
34			
35			

Hazırlayan: