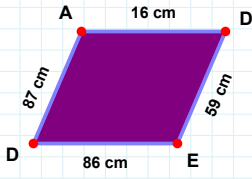
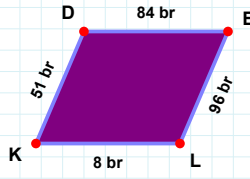


**SORU:** Aşağıdaki şekillerde istenen kenarın kaç birim veya santimetre olduğunu bulunuz.

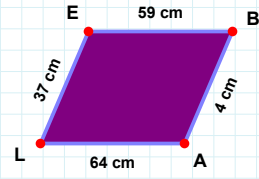
|LE| kaç cmdir?

- ☐ 36 cm  
☐ 38 cm  
☐ 37 cm



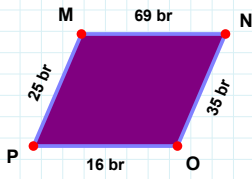
|ED| kaç cmdir?

- ☐ 86 cm  
☐ 84 cm  
☐ 89 cm



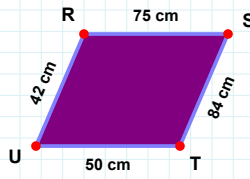
|KD| kaç brdir?

- ☐ 52 br  
☐ 48 br  
☐ 51 br



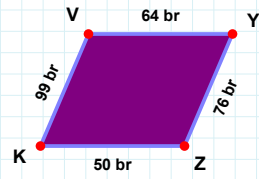
|PM| kaç brdir?

- ☐ 15 br  
☐ 26 br  
☐ 25 br



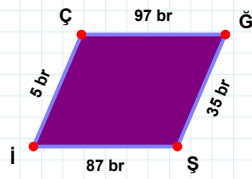
|KV| kaç brdir?

- ☐ 99 br  
☐ 94 br  
☐ 89 br



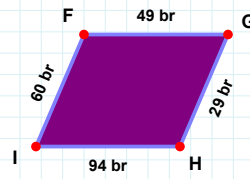
|TU| kaç cmdir?

- ☐ 53 cm  
☐ 50 cm  
☐ 49 cm



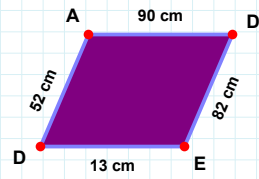
|GH| kaç brdir?

- ☐ 29 br  
☐ 19 br  
☐ 39 br



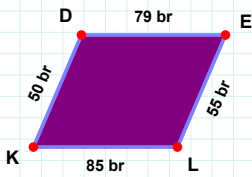
|İÇ| kaç brdir?

- ☐ 5 br  
☐ 2 br  
☐ 4 br



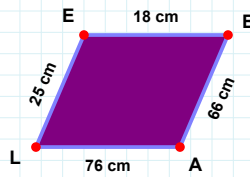
|DE| kaç cmdir?

- ☐ 92 cm  
☐ 82 cm  
☐ 79 cm



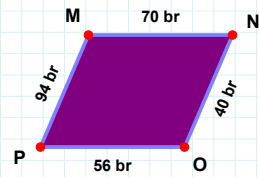
|DE| kaç brdir?

- ☐ 69 br  
☐ 79 br  
☐ 89 br



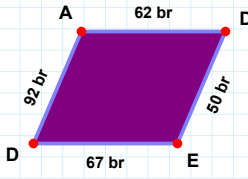
|EB| kaç cmdir?

- ☐ 16 cm  
☐ 23 cm  
☐ 18 cm



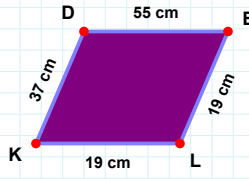
|PM| kaç brdir?

- ☐ 94 br  
☐ 99 br  
☐ 92 br

**SORU:** Aşağıdaki şekillerde istenen kenarın kaç birim veya santimetre olduğunu bulunuz.

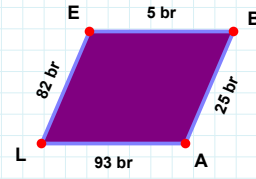
|EL| kaç cmdir?

- ☐ 16 cm  
☐ 19 cm  
☐ 24 cm



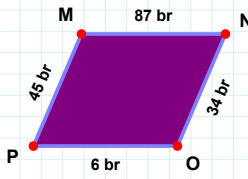
|ED| kaç brdir?

- ☐ 64 br  
☐ 77 br  
☐ 67 br



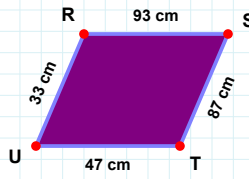
|BA| kaç brdir?

- ☐ 23 br  
☐ 20 br  
☐ 25 br



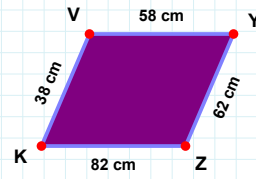
|YZ| kaç cmdir?

- ☐ 63 cm  
☐ 52 cm  
☐ 62 cm



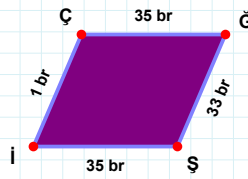
|TU| kaç cmdir?

- ☐ 46 cm  
☐ 44 cm  
☐ 47 cm



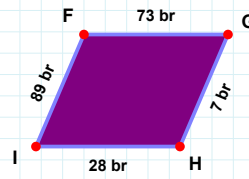
|PM| kaç brdir?

- ☐ 42 br  
☐ 43 br  
☐ 45 br



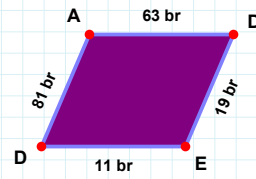
|FG| kaç brdir?

- ☐ 63 br  
☐ 71 br  
☐ 73 br



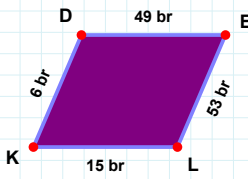
|ŞI| kaç brdir?

- ☐ 25 br  
☐ 32 br  
☐ 35 br



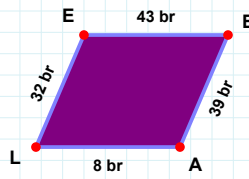
|AD| kaç brdir?

- ☐ 62 br  
☐ 53 br  
☐ 63 br



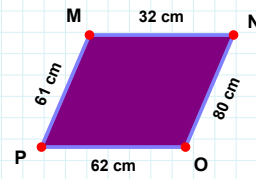
|NO| kaç cmdir?

- ☐ 82 cm  
☐ 80 cm  
☐ 83 cm



|LK| kaç brdir?

- ☐ 15 br  
☐ 5 br  
☐ 10 br



|EB| kaç brdir?

- ☐ 43 br  
☐ 45 br  
☐ 41 br

## SÜREÇ ODAKLI DEĞERLENDİRME ÖLÇEĞİ

Doğru Sayısı: ..... / 24

Öğretmen ilgili kutucuğu işaretler.

Geliştirilmeli (0-8)

İyi (9-14)

Çok İyi (15-20)

Mükemmel (21-24)

☐☐☐☐

Hazırlayan: .....

**Bu bölüme sınıfınızın ilgili kazanıma yönelik genel durumuna ilişkin gözlem ve izlenimlerinizi, öğrencilerinizin bu kazanımla ilgili öğrenme eksikliklerini ve bu eksikliklerin giderilmesi amacıyla yaptığınız/yapmayı planladığınız faaliyetleri not edebilirsiniz.**

No	Adı - Soyadı	Toplam Puan	Değerlendirme
1			
2			
3			
4			
5			
6			
7			
8			
9			
10			
11			
12			
13			
14			
15			
16			
17			
18			
19			
20			
21			
22			
23			
24			
25			
26			
27			
28			
29			
30			
31			
32			
33			
34			
35			

Hazırlayan: .....