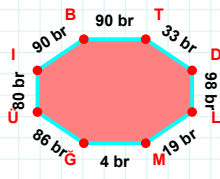
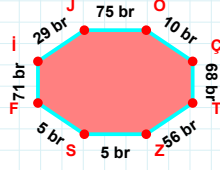


**SORU:** Aşağıdaki geometrik şekillerle ilgili soruları cevaplayınız.



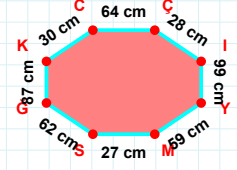
90 br hangi kenara aittir?

- ☐ ÜM kenarı  
☐ MĞ kenarı  
☐ DL kenarı



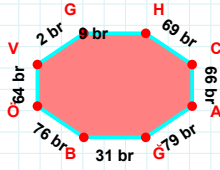
29 br hangi kenara aittir?

- ☐ FÇ kenarı  
☐ JO kenarı  
☐ OÇ kenarı



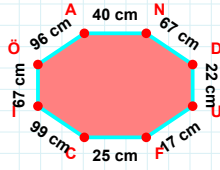
|SG| + |YM| = ....

Cevap: ..... cm



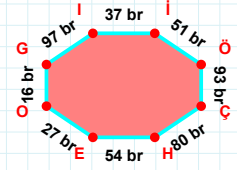
|CA| kaç brdir?

- ☐ 65 br  
☐ 66 br  
☐ 67 br



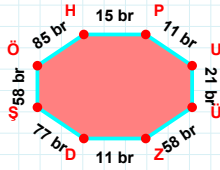
96 cm hangi kenara aittir?

- ☐ AN kenarı  
☐ UC kenarı  
☐ ND kenarı



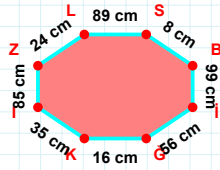
93 br hangi kenara aittir?

Kenar: .....



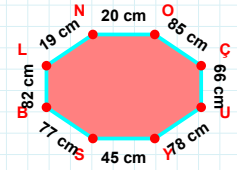
|ÖH| kaç brdir?

- ☐ 84 br  
☐ 85 br  
☐ 86 br



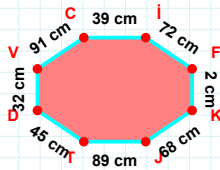
|GK| kaç cmdir?

- ☐ 15 cm  
☐ 16 cm  
☐ 17 cm



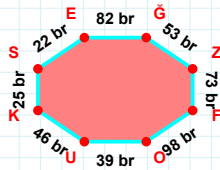
|SB| + |ÇU| = ....

Cevap: ..... cm



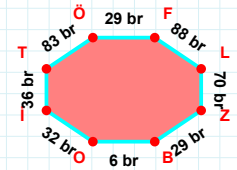
|VC| + |JT| = ....

Cevap: ..... cm



|UK| + |EĞ| = ....

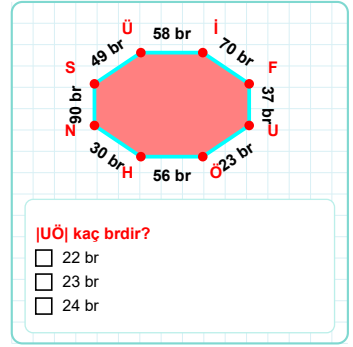
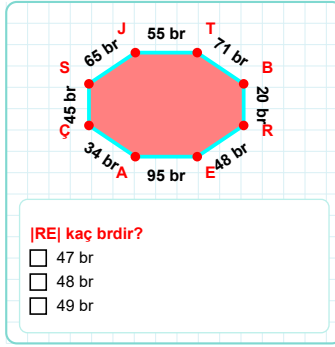
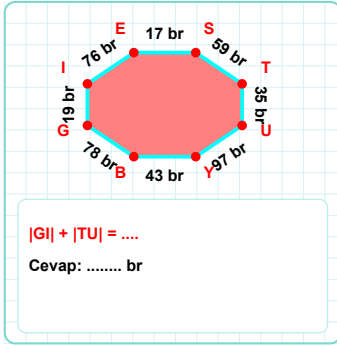
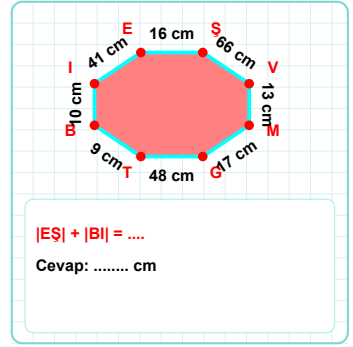
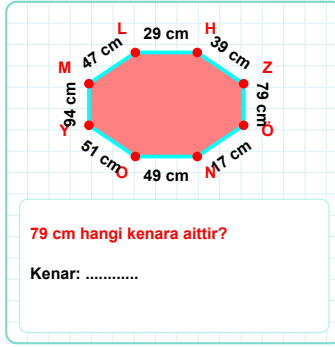
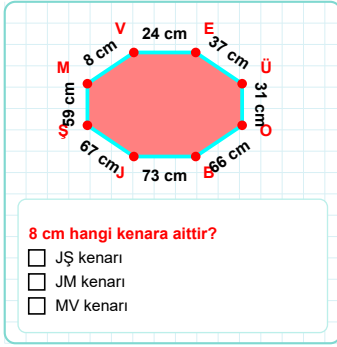
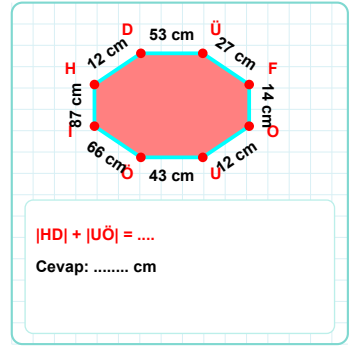
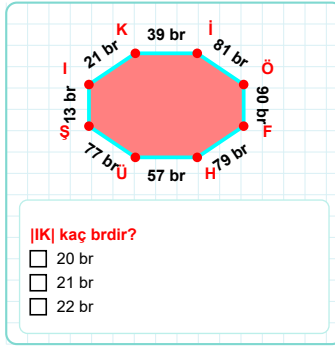
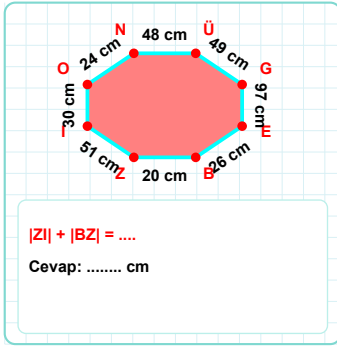
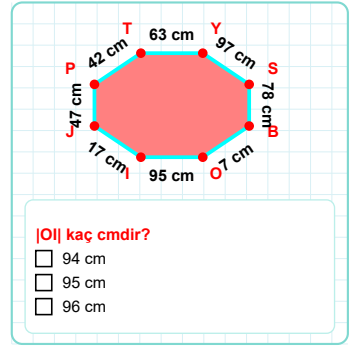
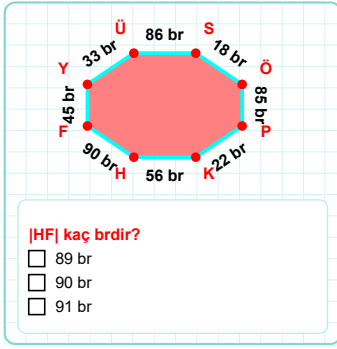
Cevap: ..... br



|ZB| kaç brdir?

- ☐ 28 br  
☐ 29 br  
☐ 30 br

**SORU:** Aşağıdaki geometrik şekillerle ilgili soruları cevaplayınız.



SÜREÇ ODAKLI DEĞERLENDİRME ÖLÇEĞİ

Doğru Sayısı: ..... / 24

Öğretmen ilgili kutucuğu işaretler.

Geliştirilmeli (0-8)

İyi (9-14)

Çok İyi (15-20)

Mükemmel (21-24)

☐☐☐☐

Hazırlayan: .....

**Bu bölüme sınıfınızın ilgili kazanıma yönelik genel durumuna ilişkin gözlem ve izlenimlerinizi, öğrencilerinizin bu kazanımla ilgili öğrenme eksikliklerini ve bu eksikliklerin giderilmesi amacıyla yaptığınız/yapmayı planladığınız faaliyetleri not edebilirsiniz.**

No	Adı - Soyadı	Toplam Puan	Değerlendirme
1			
2			
3			
4			
5			
6			
7			
8			
9			
10			
11			
12			
13			
14			
15			
16			
17			
18			
19			
20			
21			
22			
23			
24			
25			
26			
27			
28			
29			
30			
31			
32			
33			
34			
35			

**Hazırlayan:** ..... ..