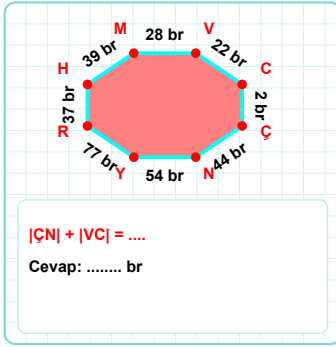
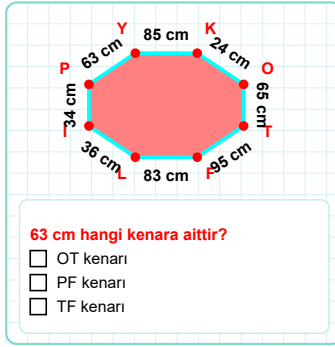


SORU: Aşağıdaki geometrik şekillerle ilgili soruları cevaplayınız.



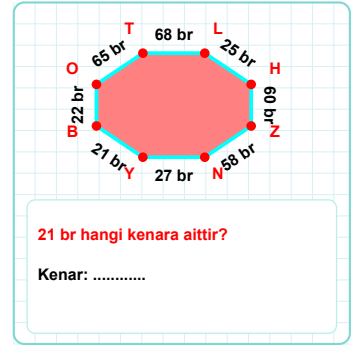
$|CN| + |VC| = \dots$

Cevap: br



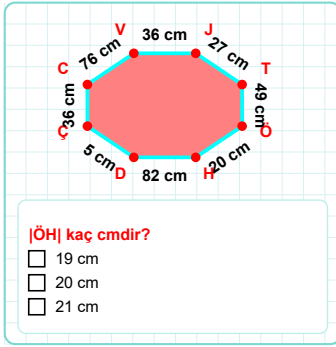
63 cm hangi kenara aittir?

- ☐ OT kenarı
☐ PF kenarı
☐ TF kenarı



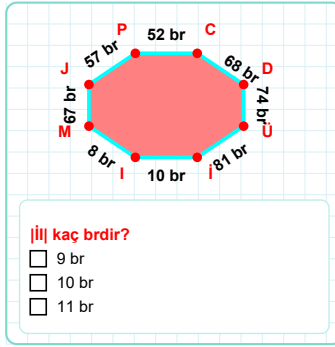
21 br hangi kenara aittir?

Kenar:



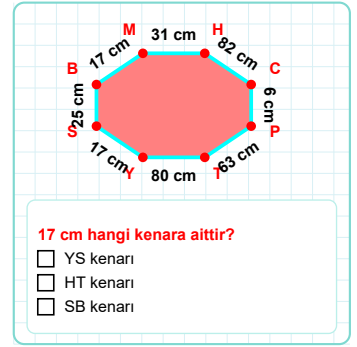
$|JH|$ kaç cm'dir?

- ☐ 19 cm
☐ 20 cm
☐ 21 cm



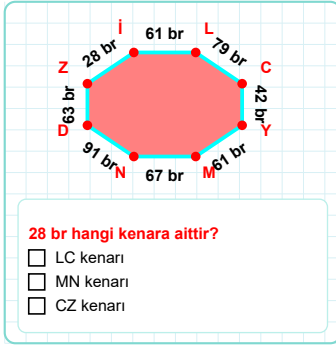
$|IJ|$ kaç br'dir?

- ☐ 9 br
☐ 10 br
☐ 11 br



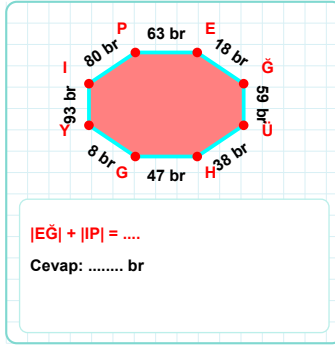
17 cm hangi kenara aittir?

- ☐ YS kenarı
☐ HT kenarı
☐ SB kenarı



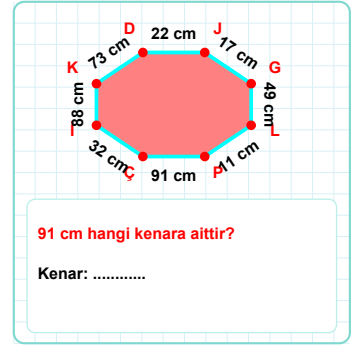
28 br hangi kenara aittir?

- ☐ LC kenarı
☐ MN kenarı
☐ CZ kenarı



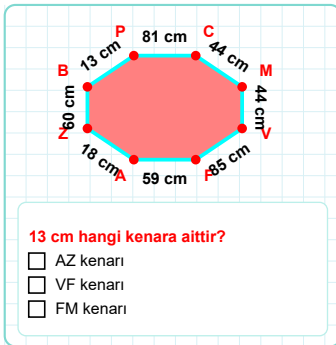
$|EG| + |IP| = \dots$

Cevap: br



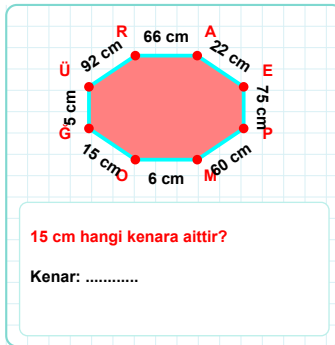
91 cm hangi kenara aittir?

Kenar:



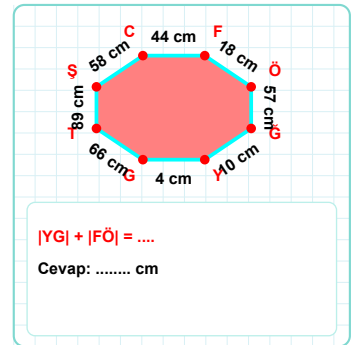
13 cm hangi kenara aittir?

- ☐ AZ kenarı
☐ VF kenarı
☐ FM kenarı



15 cm hangi kenara aittir?

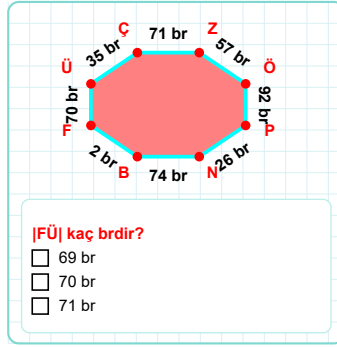
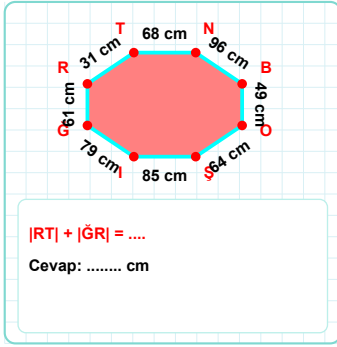
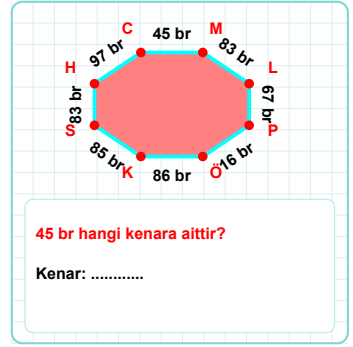
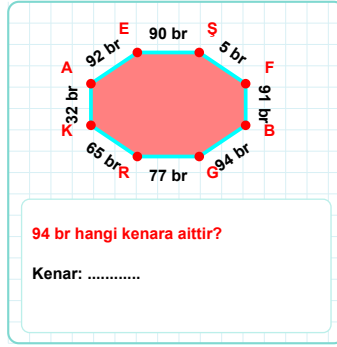
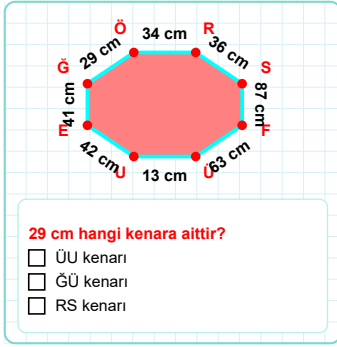
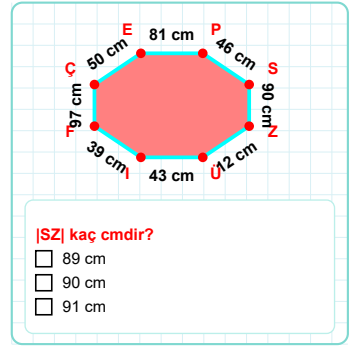
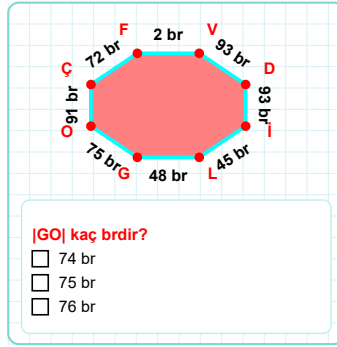
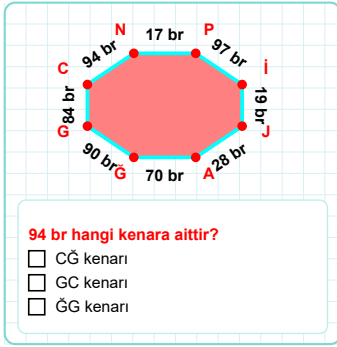
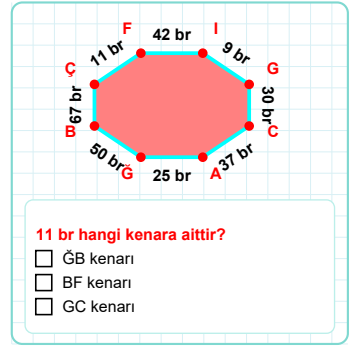
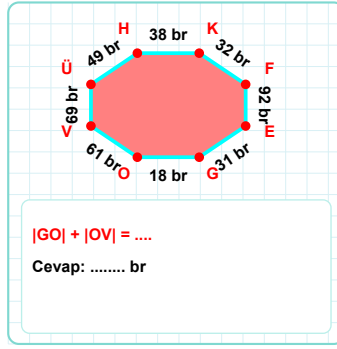
Kenar:



$|YG| + |FÖ| = \dots$

Cevap: cm

SORU: Aşağıdaki geometrik şekillerle ilgili soruları cevaplayınız.



SÜREÇ ODAKLI DEĞERLENDİRME ÖLÇEĞİ

Doğru Sayısı: / 24

Öğretmen ilgili kutucuğu işaretler.

Geliştirilmeli (0-8)

İyi (9-14)

Çok İyi (15-20)

Mükemmel (21-24)

☐☐☐☐

Hazırlayan:

Bu bölüme sınıfınızın ilgili kazanıma yönelik genel durumuna ilişkin gözlem ve izlenimlerinizi, öğrencilerinizin bu kazanımla ilgili öğrenme eksikliklerini ve bu eksikliklerin giderilmesi amacıyla yaptığınız/yapmayı planladığınız faaliyetleri not edebilirsiniz.

| No | Adı - Soyadı | Toplam Puan | Değerlendirme |
|----|--------------|-------------|---------------|
| 1 | | | |
| 2 | | | |
| 3 | | | |
| 4 | | | |
| 5 | | | |
| 6 | | | |
| 7 | | | |
| 8 | | | |
| 9 | | | |
| 10 | | | |
| 11 | | | |
| 12 | | | |
| 13 | | | |
| 14 | | | |
| 15 | | | |
| 16 | | | |
| 17 | | | |
| 18 | | | |
| 19 | | | |
| 20 | | | |
| 21 | | | |
| 22 | | | |
| 23 | | | |
| 24 | | | |
| 25 | | | |
| 26 | | | |
| 27 | | | |
| 28 | | | |
| 29 | | | |
| 30 | | | |
| 31 | | | |
| 32 | | | |
| 33 | | | |
| 34 | | | |
| 35 | | | |

Hazırlayan: