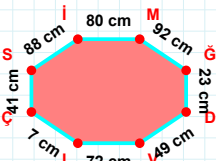
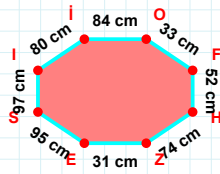


**SORU:** Aşağıdaki geometrik şekillerle ilgili soruları cevaplayınız.



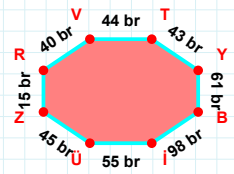
88 cm hangi kenara aittir?

- ☐ Mİ kenarı  
☐ İÇ kenarı  
☐ DV kenarı



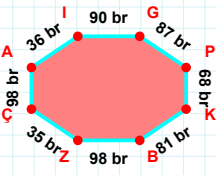
|ES| kaç cm'dir?

- ☐ 94 cm  
☐ 95 cm  
☐ 96 cm



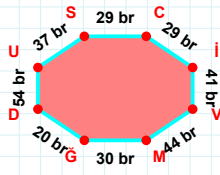
40 br hangi kenara aittir?

- ☐ YB kenarı  
☐ TY kenarı  
☐ VZ kenarı



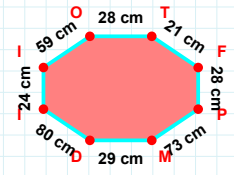
|ZÇ| kaç br'dir?

- ☐ 34 br  
☐ 35 br  
☐ 36 br



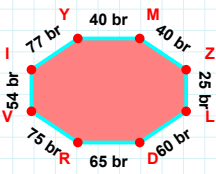
|CI| kaç br'dir?

- ☐ 28 br  
☐ 29 br  
☐ 30 br



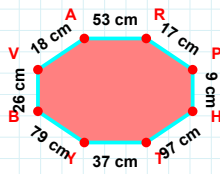
59 cm hangi kenara aittir?

Kenar: .....



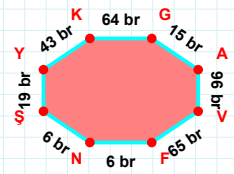
|DR| + |RV| = ....

Cevap: ..... br



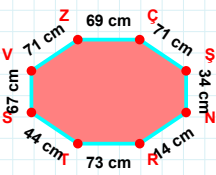
18 cm hangi kenara aittir?

- ☐ VR kenarı  
☐ HT kenarı  
☐ TY kenarı



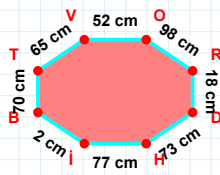
|VF| kaç br'dir?

- ☐ 64 br  
☐ 65 br  
☐ 66 br



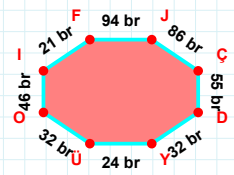
|SV| + |RT| = ....

Cevap: ..... cm



52 cm hangi kenara aittir?

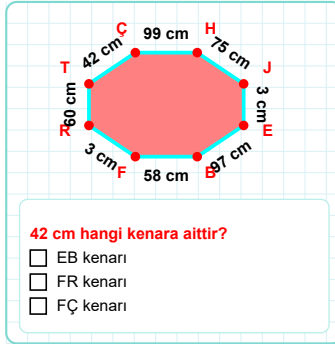
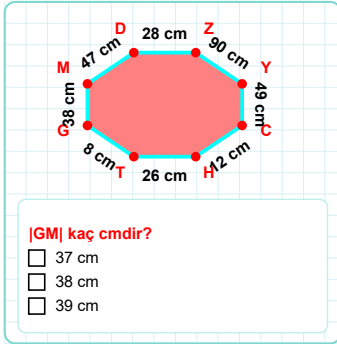
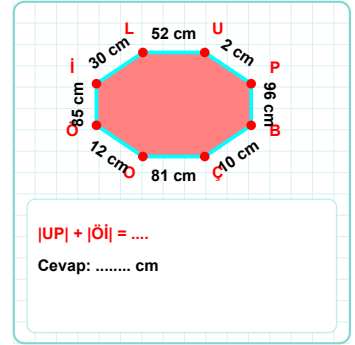
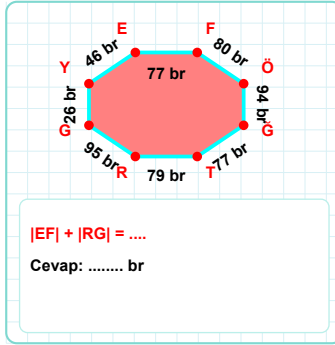
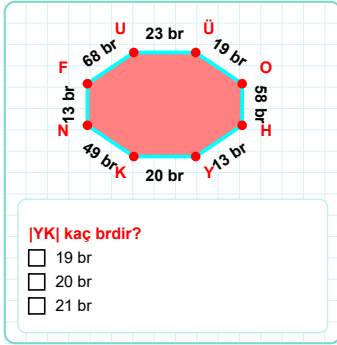
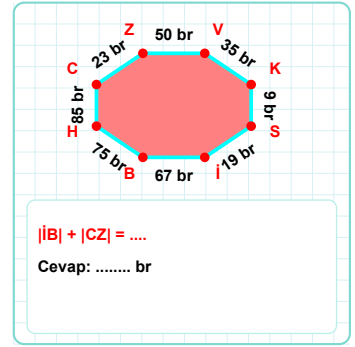
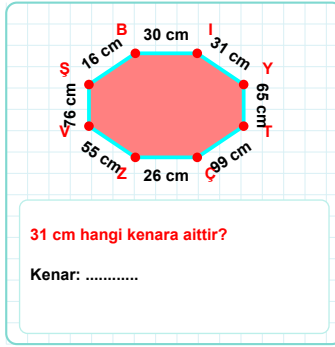
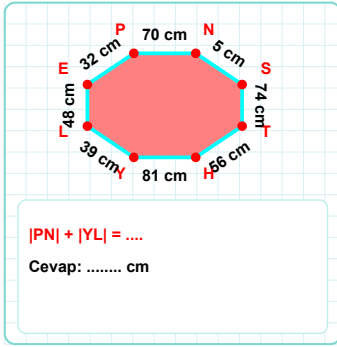
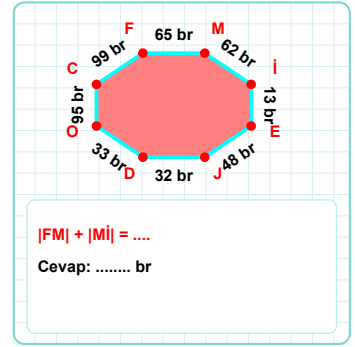
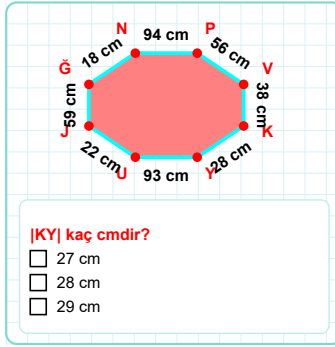
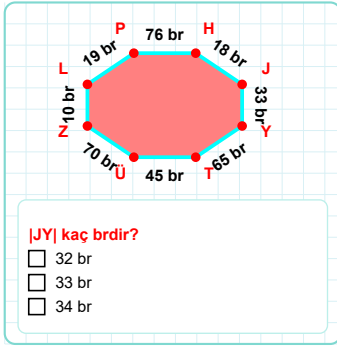
Kenar: .....



21 br hangi kenara aittir?

- ☐ OÇ kenarı  
☐ IF kenarı  
☐ ÜO kenarı

**SORU:** Aşağıdaki geometrik şekillerle ilgili soruları cevaplayınız.



SÜREÇ ODAKLI DEĞERLENDİRME ÖLÇEĞİ

Doğru Sayısı: ..... / 24

Öğretmen ilgili kutucuğu işaretler.

| Geliştirilmeli (0-8)     | İyi (9-14)               | Çok İyi (15-20)          | Mükemmel (21-24)         |
|--------------------------|--------------------------|--------------------------|--------------------------|
| <input type="checkbox"/> | <input type="checkbox"/> | <input type="checkbox"/> | <input type="checkbox"/> |

Hazırlayan: .....

**Bu bölüme sınıfınızın ilgili kazanıma yönelik genel durumuna ilişkin gözlem ve izlenimlerinizi, öğrencilerinizin bu kazanımla ilgili öğrenme eksikliklerini ve bu eksikliklerin giderilmesi amacıyla yaptığınız/yapmayı planladığınız faaliyetleri not edebilirsiniz.**

| No | Adı - Soyadı | Toplam Puan | Değerlendirme |
|----|--------------|-------------|---------------|
| 1  |              |             |               |
| 2  |              |             |               |
| 3  |              |             |               |
| 4  |              |             |               |
| 5  |              |             |               |
| 6  |              |             |               |
| 7  |              |             |               |
| 8  |              |             |               |
| 9  |              |             |               |
| 10 |              |             |               |
| 11 |              |             |               |
| 12 |              |             |               |
| 13 |              |             |               |
| 14 |              |             |               |
| 15 |              |             |               |
| 16 |              |             |               |
| 17 |              |             |               |
| 18 |              |             |               |
| 19 |              |             |               |
| 20 |              |             |               |
| 21 |              |             |               |
| 22 |              |             |               |
| 23 |              |             |               |
| 24 |              |             |               |
| 25 |              |             |               |
| 26 |              |             |               |
| 27 |              |             |               |
| 28 |              |             |               |
| 29 |              |             |               |
| 30 |              |             |               |
| 31 |              |             |               |
| 32 |              |             |               |
| 33 |              |             |               |
| 34 |              |             |               |
| 35 |              |             |               |

**Hazırlayan:** ..... ..